



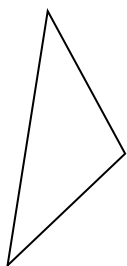
Определите, какая фигура изображена перед нами.

ОТВЕТЫ

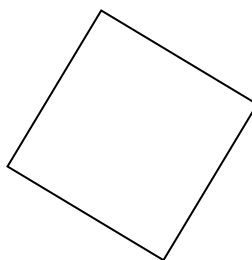
1)



2)

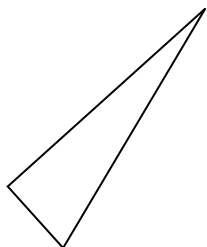


3)

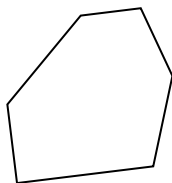


1. _____

4)



5)

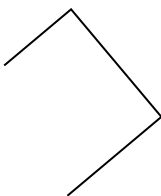


6)




2. _____

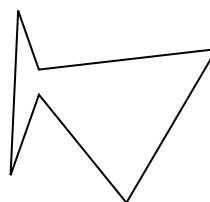
7)



8)

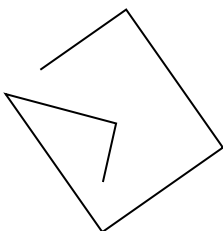


9)

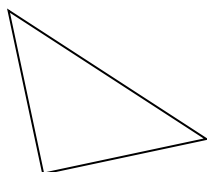


3. _____

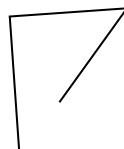
10)



11)

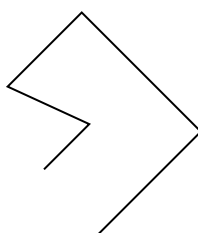


12)

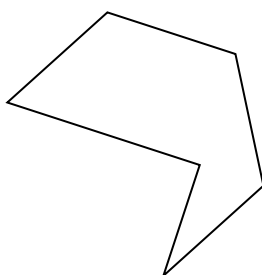


4. _____

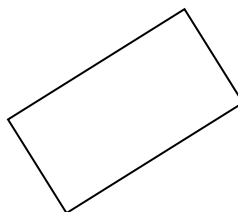
13)



14)



15)



5. _____

6. _____

7. _____

8. _____

9. _____

10. _____

11. _____

12. _____

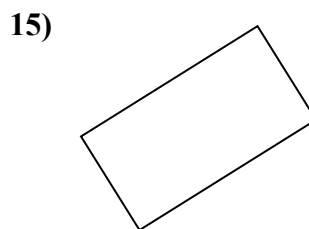
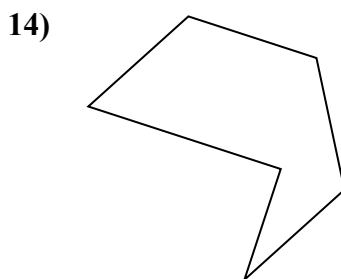
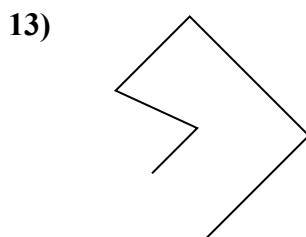
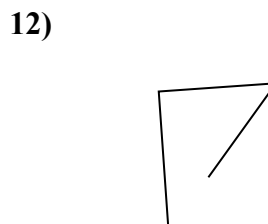
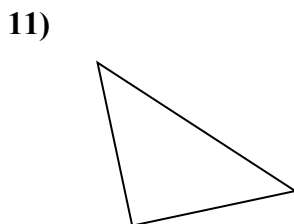
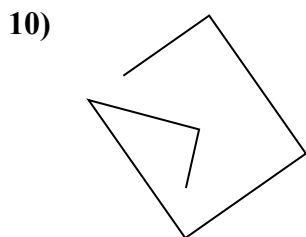
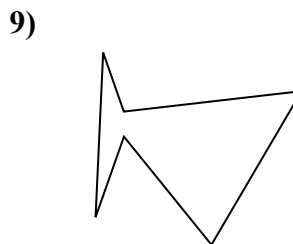
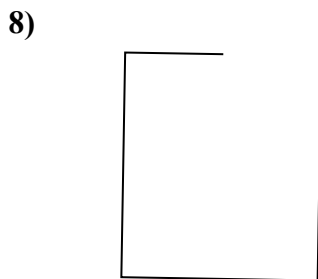
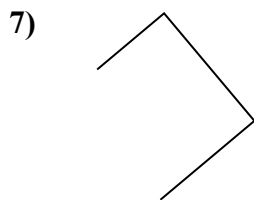

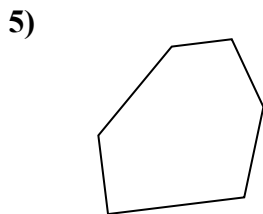
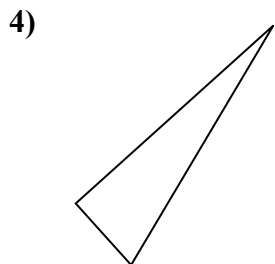
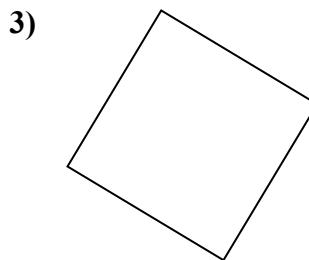
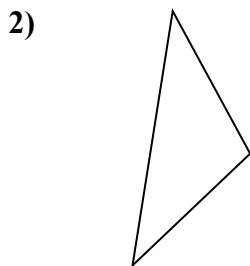
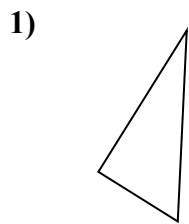
13. _____

14. _____

15. _____



Определите, какая фигура изображена перед нами.



ОТВЕТЫ

1. треугольник

2. треугольник

3. квадрат

4. треугольник

5. шестиугольник

6. другая

7. другая

8. другая

9. шестиугольник

10. другая

11. треугольник

12. другая

13. другая

14. шестиугольник

15. прямоугольник