



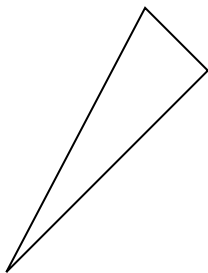
Определите, какая фигура изображена перед нами.

ОТВЕТЫ

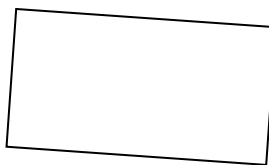
1)



2)

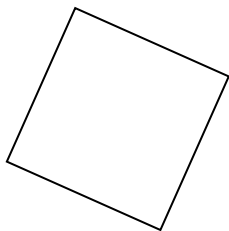


3)

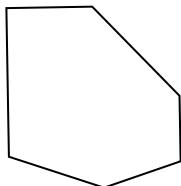


1. _____

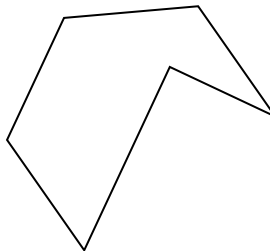
4)



5)

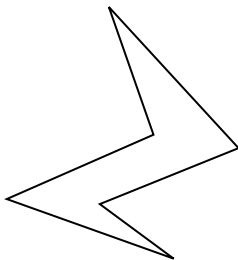


6)

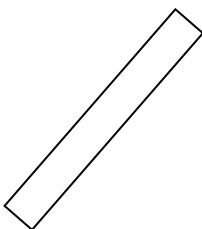


2. _____

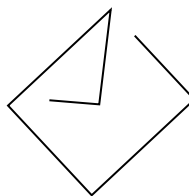
7)



8)



9)

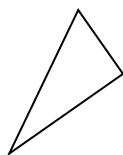


3. _____

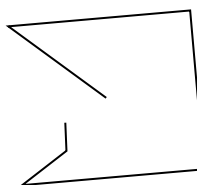
10)



11)




12)




4. _____

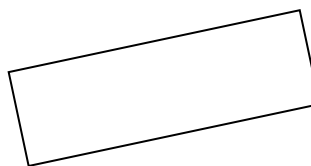
13)



14)



15)



5. _____

6. _____

7. _____

8. _____

9. _____

10. _____

11. _____

12. _____

13. _____

14. _____

15. _____

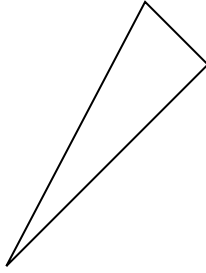


Определите, какая фигура изображена перед нами.

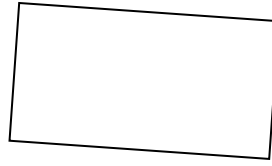
1)



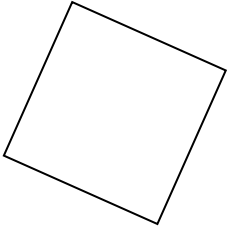
2)



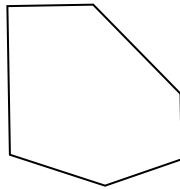
3)



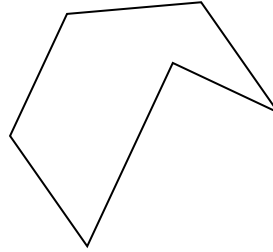
4)



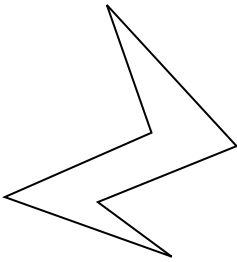
5)



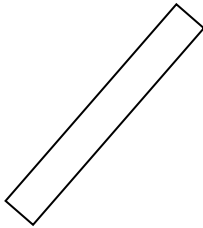
6)



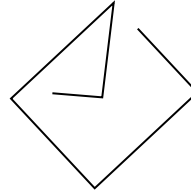
7)



8)



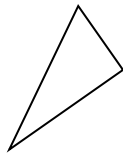
9)



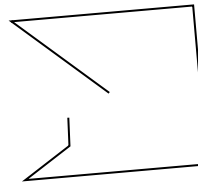
10)




11)




12)



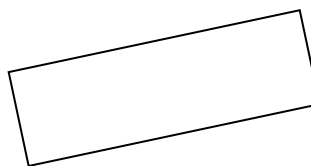
13)



14)



15)



ОТВЕТЫ

1. другая

2. треугольник

3. прямоугольник

4. квадрат

5. шестиугольник

6. шестиугольник

7. шестиугольник

8. прямоугольник

9. другая

10. треугольник

11. треугольник

12. другая

13. другая

14. треугольник

15. прямоугольник