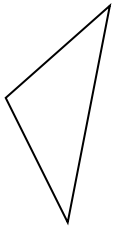




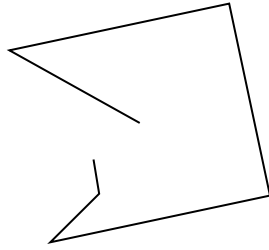
Определите, какая фигура изображена перед нами.

ОТВЕТЫ

1)



2)



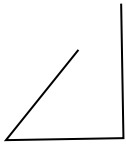
3)



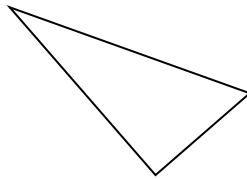
1. _____

2. _____

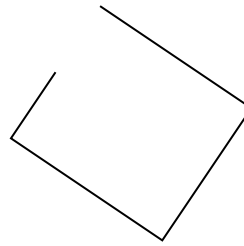
4)



5)



6)



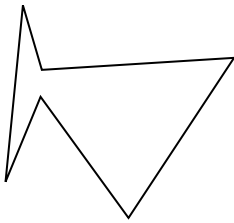
3. _____

4. _____

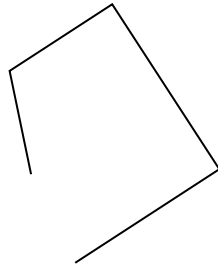
5. _____

6. _____

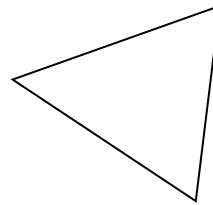
7)



8)



9)



7. _____


8. _____

9. _____

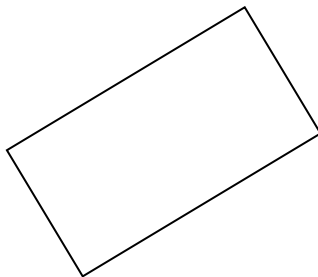
10. _____

11. _____


10)



11)



12)



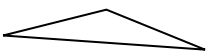
12. _____

13. _____


14. _____

15. _____

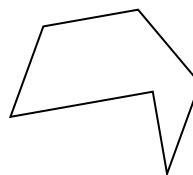
13)



14)



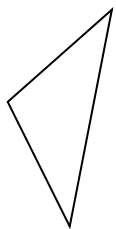
15)



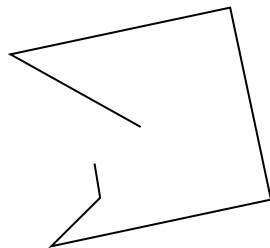


Определите, какая фигура изображена перед нами.

1)



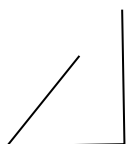
2)



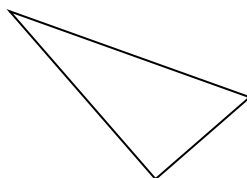
3)



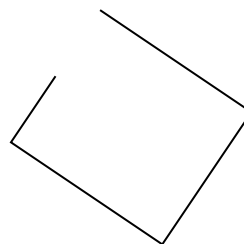
4)



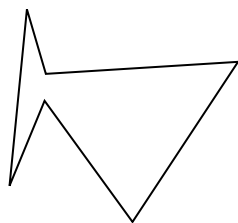
5)



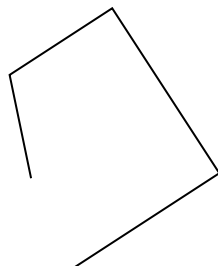
6)



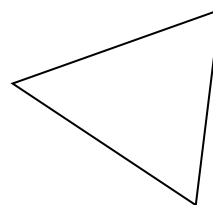
7)




8)



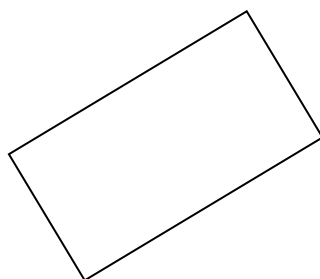
9)




10)



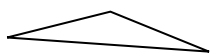
11)




12)



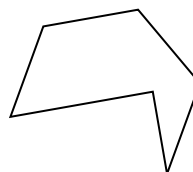
13)



14)



15)



ОТВЕТЫ

1. треугольник

2. другая

3. другая

4. другая

5. треугольник

6. другая

7. шестиугольник

8. другая

9. треугольник

10. другая

11. прямоугольник

12. шестиугольник

13. треугольник

14. другая

15. шестиугольник