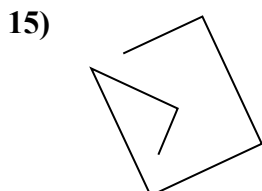
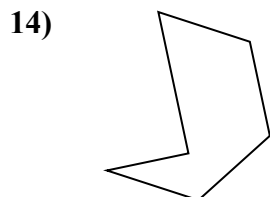
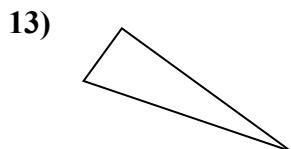
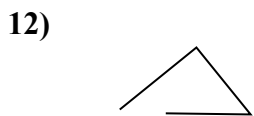
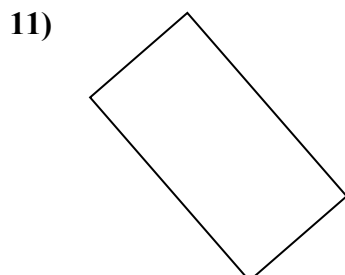
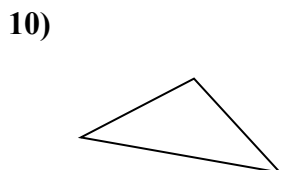

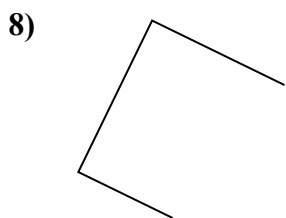
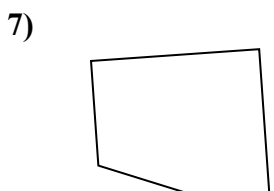
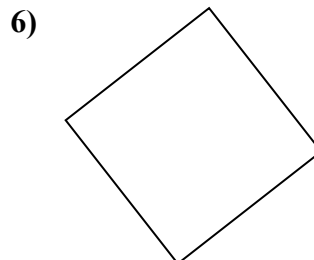
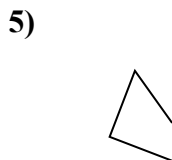
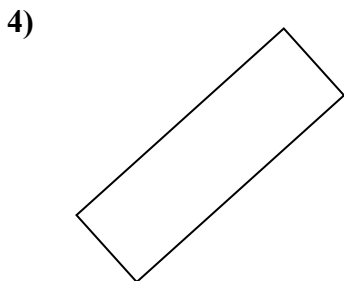
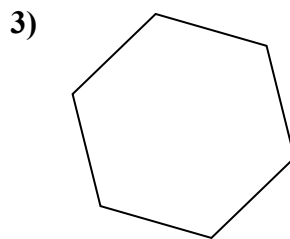
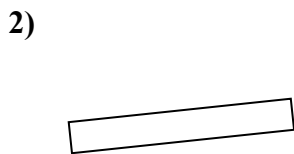
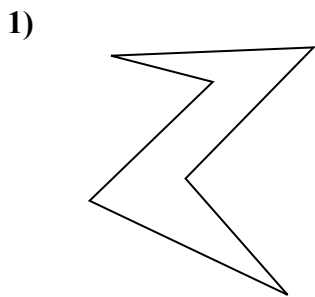




Определите, какая фигура изображена перед нами.

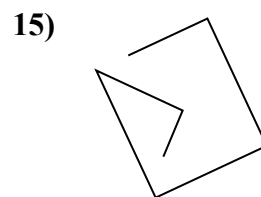
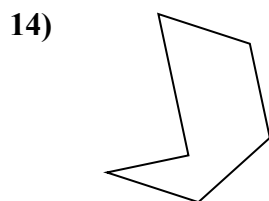
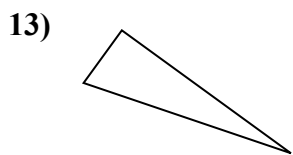
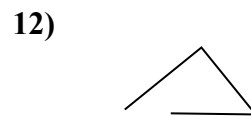
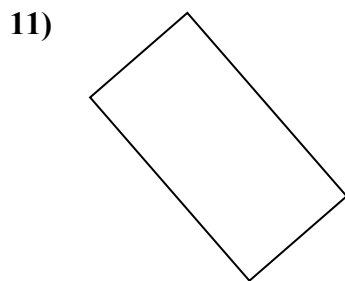
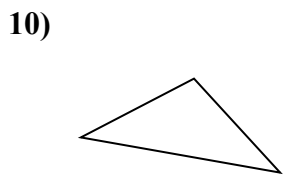
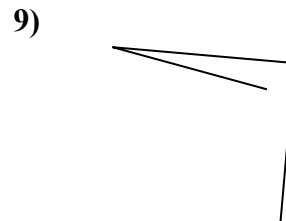
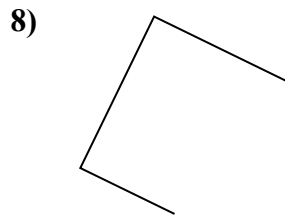
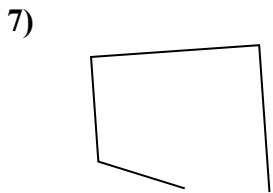
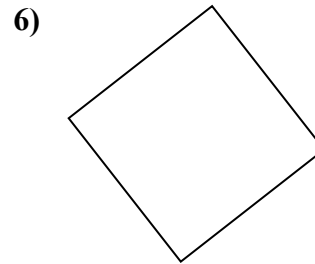
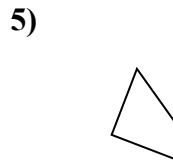
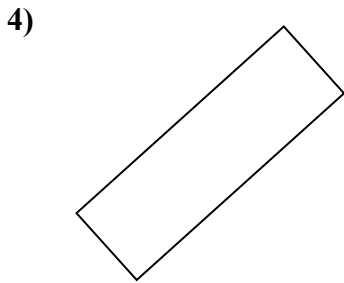
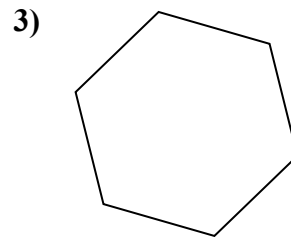

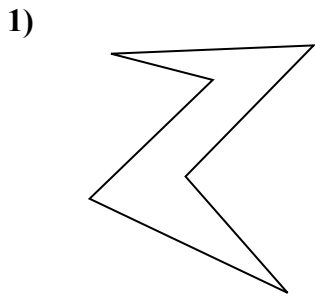
ОТВЕТЫ



- 1. \_\_\_\_\_
- 2. \_\_\_\_\_
- 3. \_\_\_\_\_
- 4. \_\_\_\_\_
- 5. \_\_\_\_\_
- 6. \_\_\_\_\_
- 7. \_\_\_\_\_
- 8. \_\_\_\_\_
- 9. \_\_\_\_\_
- 10. \_\_\_\_\_
- 11. \_\_\_\_\_
- 12. \_\_\_\_\_
- 13. \_\_\_\_\_
- 14. \_\_\_\_\_
- 15. \_\_\_\_\_



Определите, какая фигура изображена перед нами.



ОТВЕТЫ

1. шестиугольник
2. прямоугольник
3. шестиугольник
4. прямоугольник
5. другая
6. квадрат
7. другая
8. другая
9. другая
10. треугольник
11. прямоугольник
12. другая
13. треугольник
14. шестиугольник
15. другая