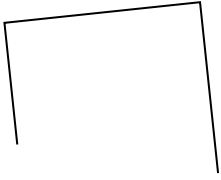




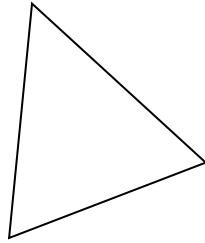
Определите, какая фигура изображена перед нами.

ОТВЕТЫ

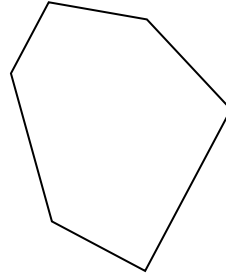
1)



2)

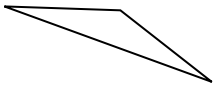


3)

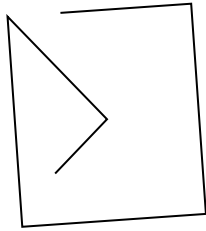


1. _____


4)



5)

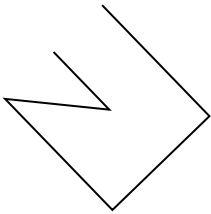


6)




2. _____

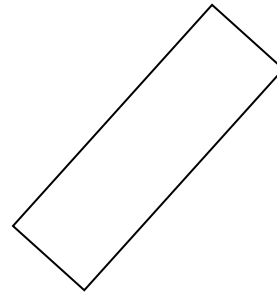
7)



8)

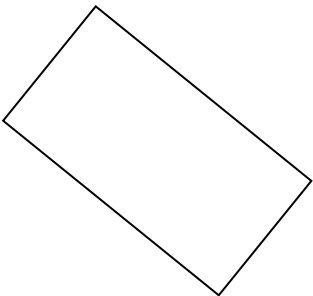


9)

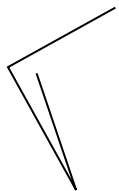


3. _____


10)



11)

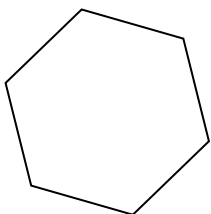


12)

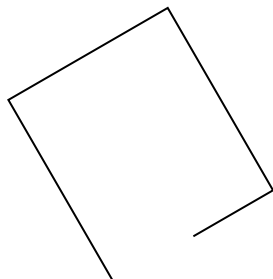


4. _____

13)



14)



15)



5. _____

6. _____

7. _____

8. _____

9. _____

10. _____

11. _____

12. _____

13. _____

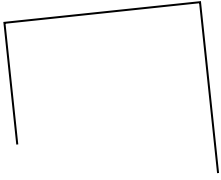
14. _____

15. _____

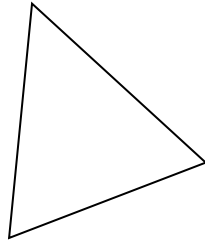


Определите, какая фигура изображена перед нами.

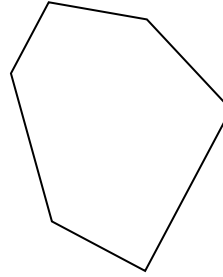
1)



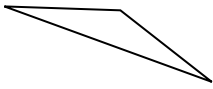
2)



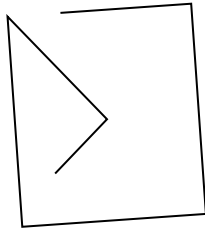
3)




4)



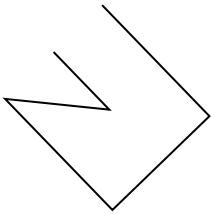
5)




6)



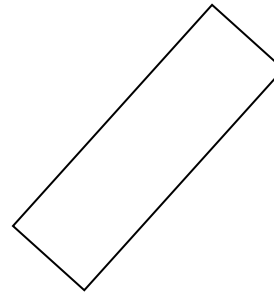
7)



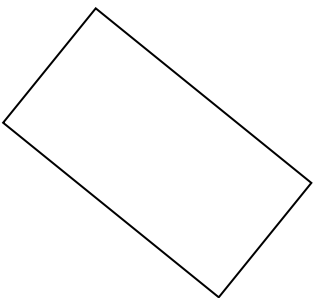
8)



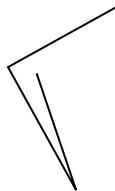
9)




10)



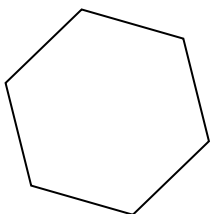
11)



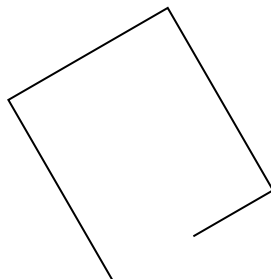
12)



13)



14)



15)



ОТВЕТЫ

1. другая

2. треугольник

3. шестиугольник

4. треугольник

5. другая

6. шестиугольник

7. другая

8. квадрат

9. прямоугольник

10. прямоугольник

11. другая

12. другая

13. шестиугольник

14. другая

15. треугольник