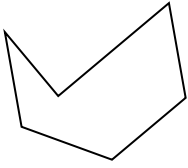




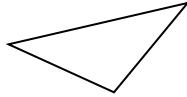
Определите, какая фигура изображена перед нами.

ОТВЕТЫ

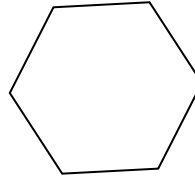
1)



2)



3)



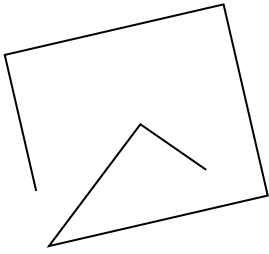
1. _____

2. _____

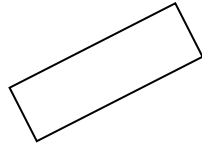
3. _____

4. _____


4)



5)



6)



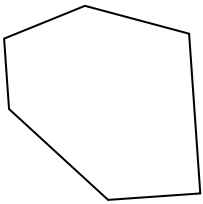
5. _____

6. _____

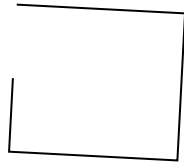
7. _____

8. _____


7)



8)



9)



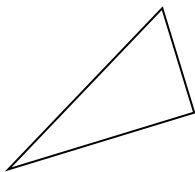
9. _____

10. _____

11. _____

12. _____

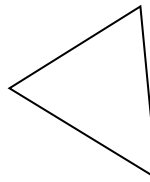
10)



11)



12)

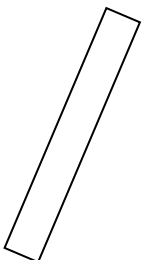


13. _____

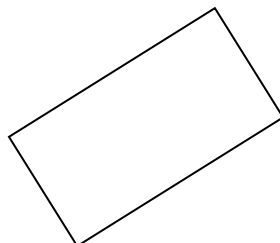
14. _____

15. _____

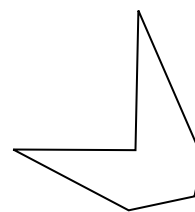
13)



14)



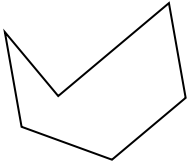
15)



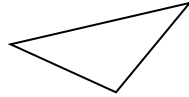


Определите, какая фигура изображена перед нами.

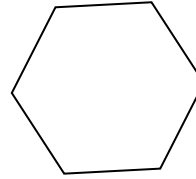
1)



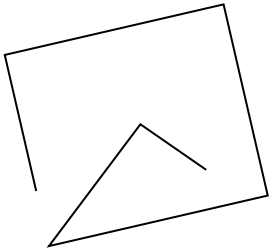
2)



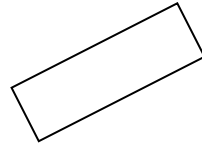
3)




4)



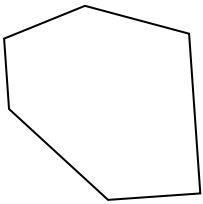
5)



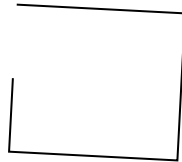
6)




7)



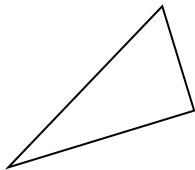
8)



9)



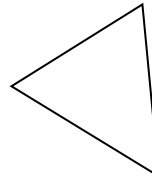
10)



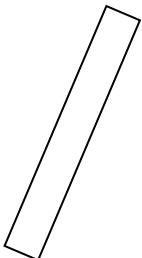
11)



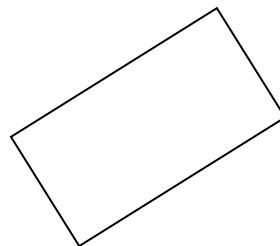
12)



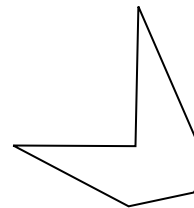
13)



14)



15)



ОТВЕТЫ

1. шестиугольник
2. треугольник
3. шестиугольник
4. другая
5. прямоугольник
6. квадрат
7. шестиугольник
8. другая
9. шестиугольник
10. треугольник
11. другая
12. треугольник
13. прямоугольник
14. прямоугольник
15. шестиугольник