





Определите тип данных фигур.

Ответы

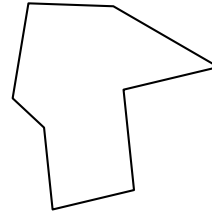
1)



2)

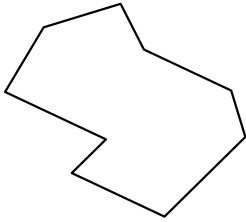


3)

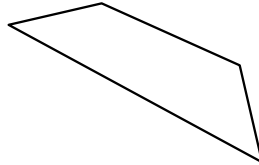


1. \_\_\_\_\_

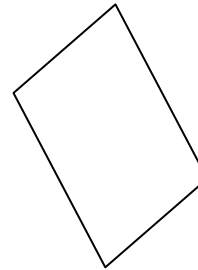
4)



5)



6)



2. \_\_\_\_\_

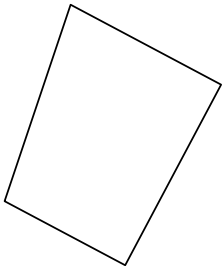
3. \_\_\_\_\_

4. \_\_\_\_\_

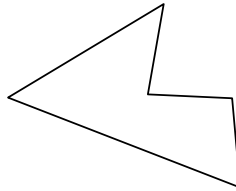
5. \_\_\_\_\_

6. \_\_\_\_\_


7)



8)



9)



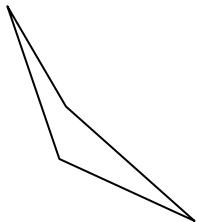
7. \_\_\_\_\_

8. \_\_\_\_\_

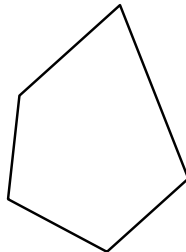
9. \_\_\_\_\_

10. \_\_\_\_\_

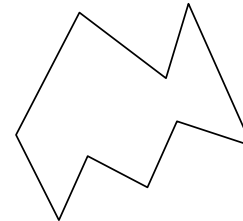
10)



11)



12)



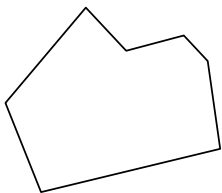
11. \_\_\_\_\_

12. \_\_\_\_\_

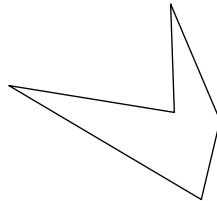
13. \_\_\_\_\_

14. \_\_\_\_\_

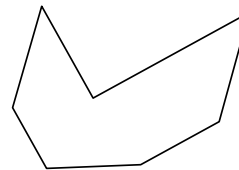
13)



14)



15)




15. \_\_\_\_\_

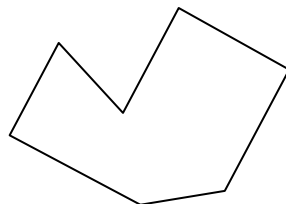
16. \_\_\_\_\_

17. \_\_\_\_\_

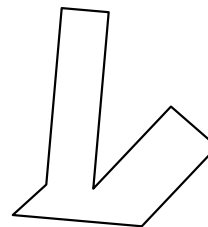
16)



17)



18)



18. \_\_\_\_\_

19. \_\_\_\_\_

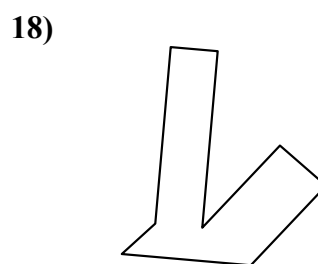
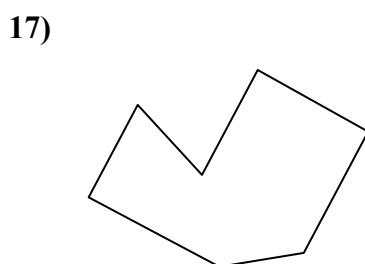
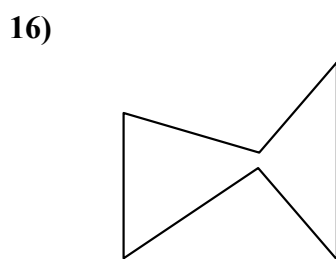
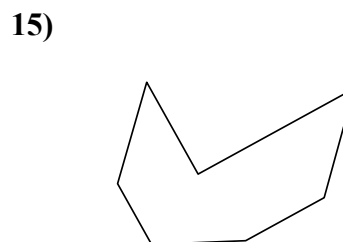
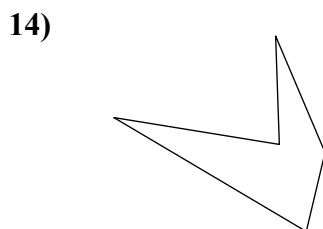
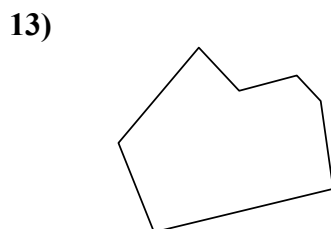
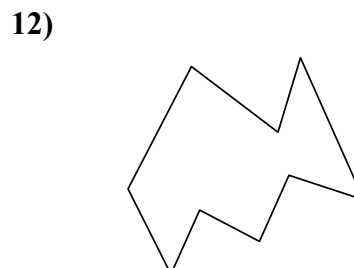
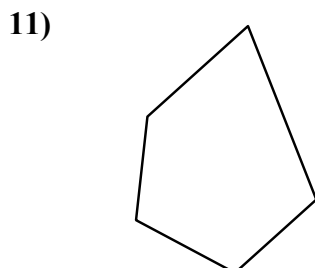
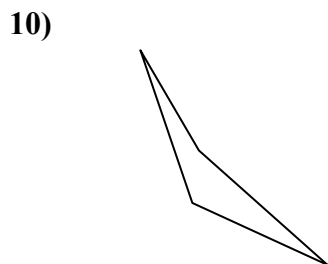
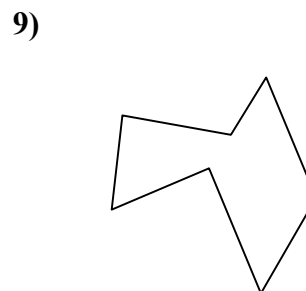
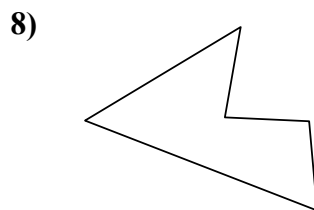
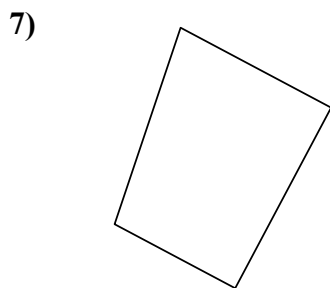
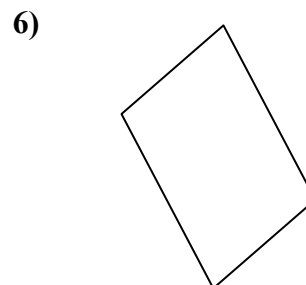
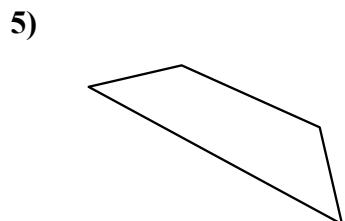
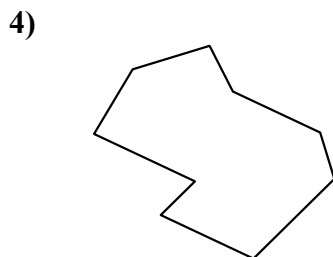
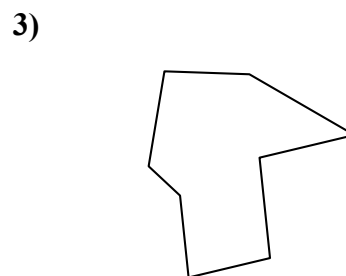
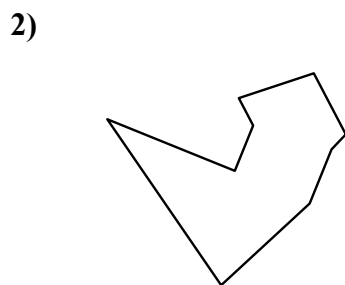
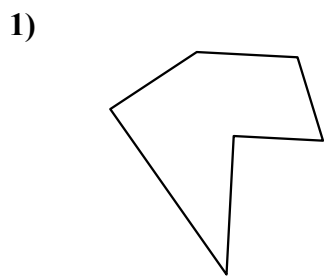
20. \_\_\_\_\_

21. \_\_\_\_\_



Определите тип данных фигур.

ОТВЕТЫ



1. шестиугольник

2. девятиугольник

3. восьмиугольник

4. девятиугольник

5. четырёхугольник

6. четырёхугольник

7. четырёхугольник

8. пятиугольник

9. семиугольник

10. четырёхугольник

11. пятиугольник

12. девятиугольник

13. семиугольник

14. пятиугольник

15. семиугольник

16. шестиугольник

17. семиугольник

18. восьмиугольник

19. восьмиугольник

20. семиугольник

21. восьмиугольник