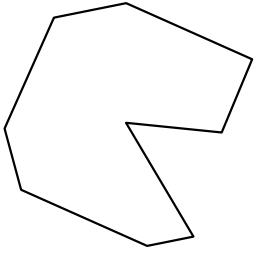




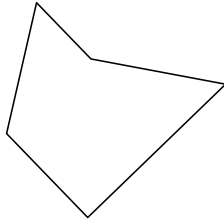
Определите тип данных фигур.

Ответы


1)



2)

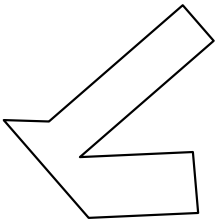


3)

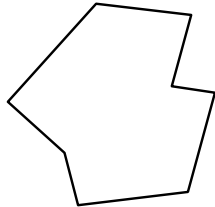


1. \_\_\_\_\_

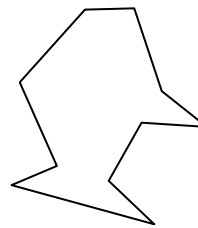
4)



5)



6)



2. \_\_\_\_\_

3. \_\_\_\_\_

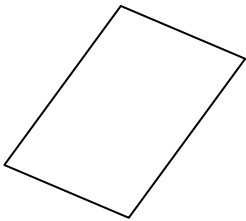
4. \_\_\_\_\_

5. \_\_\_\_\_

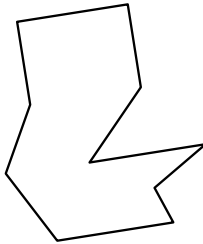
6. \_\_\_\_\_

7. \_\_\_\_\_

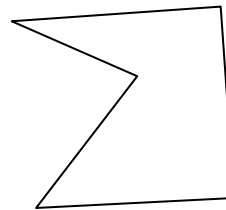
7)



8)



9)

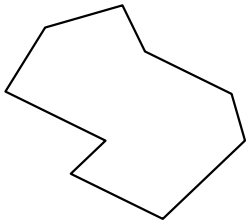


8. \_\_\_\_\_

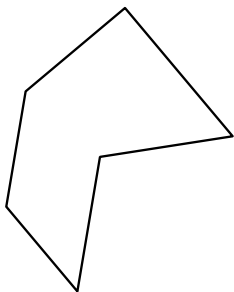
9. \_\_\_\_\_

10. \_\_\_\_\_

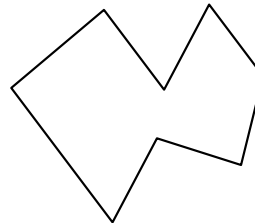
10)



11)



12)




11. \_\_\_\_\_

12. \_\_\_\_\_

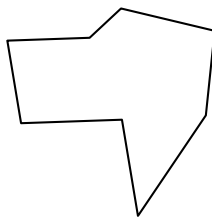
13. \_\_\_\_\_

14. \_\_\_\_\_

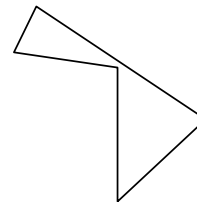
13)



14)



15)




15. \_\_\_\_\_

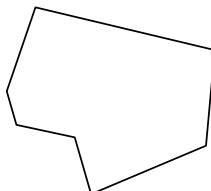
16. \_\_\_\_\_

17. \_\_\_\_\_


16)



17)



18)



18. \_\_\_\_\_

19. \_\_\_\_\_

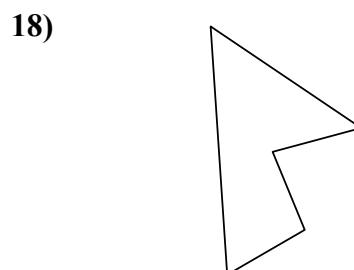
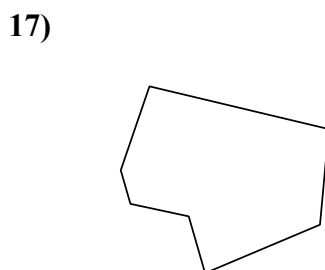
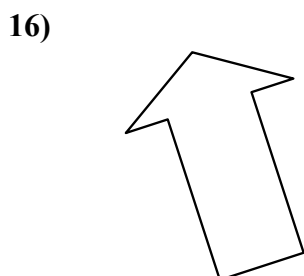
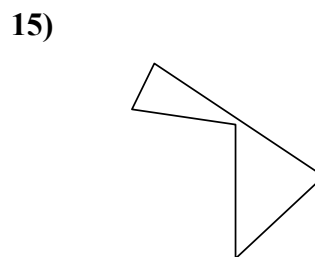
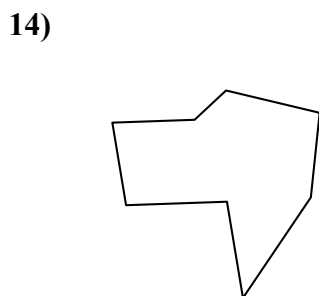
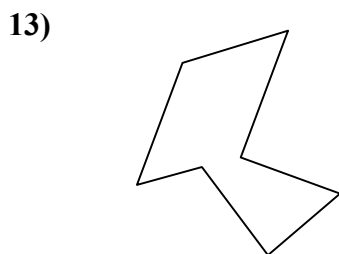
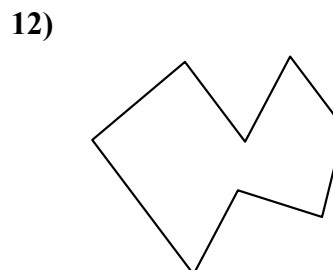
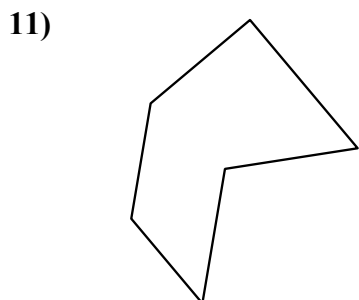
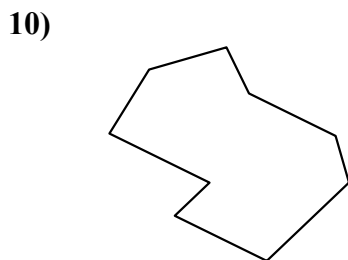
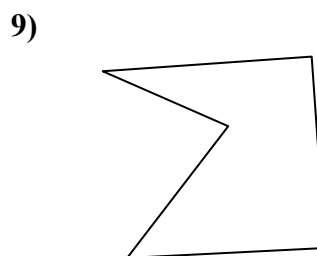
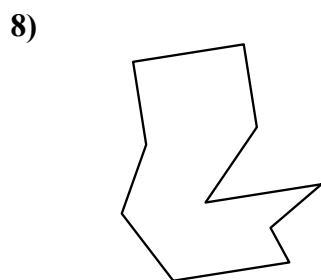
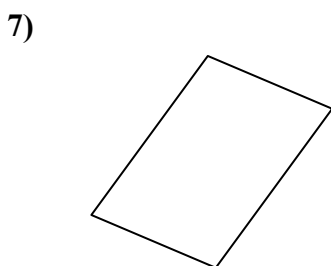
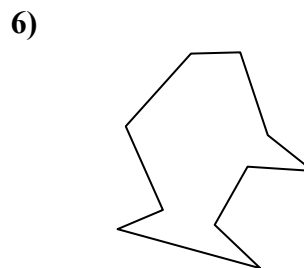
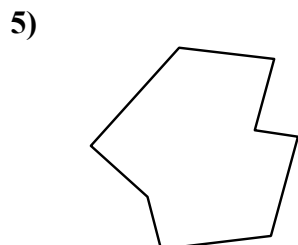
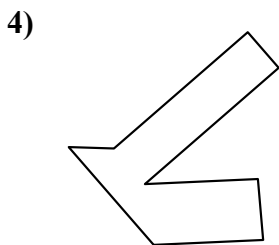
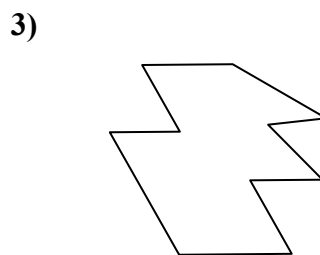
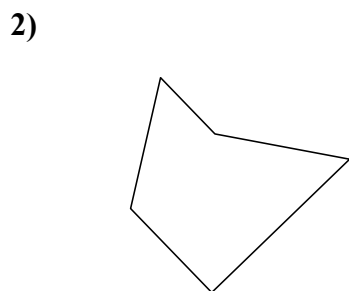
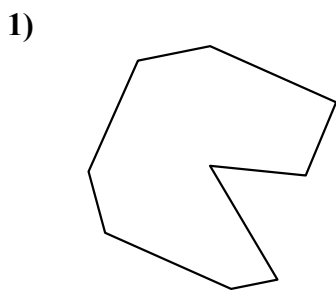
20. \_\_\_\_\_

21. \_\_\_\_\_



Определите тип данных фигур.

**ОТВЕТЫ**



1. девятугольник

2. пятигольник

3. десятугольник

4. восьмигольник

5. восьмигольник

6. десятугольник

7. четырёхгольник

8. десятугольник

9. пятигольник

10. девятугольник

11. шестигольник

12. восьмигольник

13. семигольник

14. восьмигольник

15. пятигольник

16. семигольник

17. семигольник

18. пятигольник

19. девятугольник

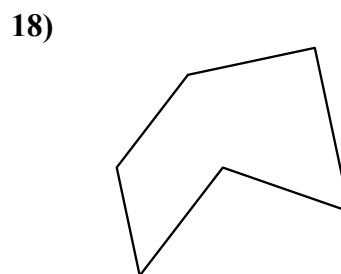
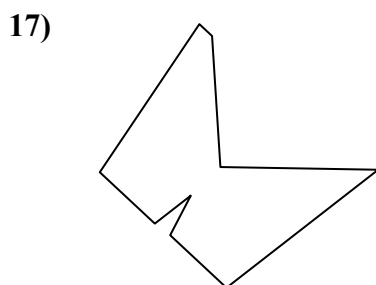
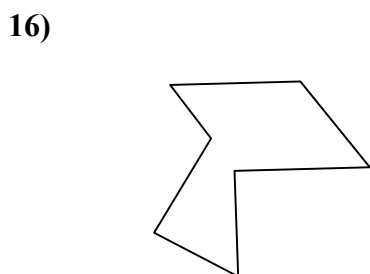
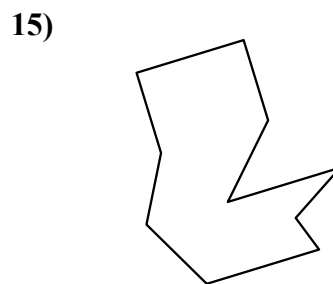
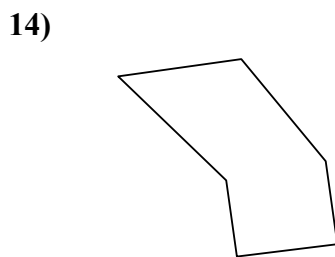
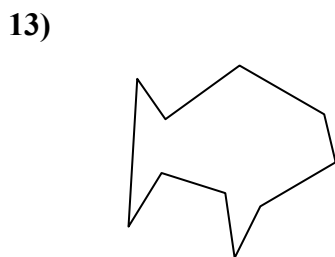
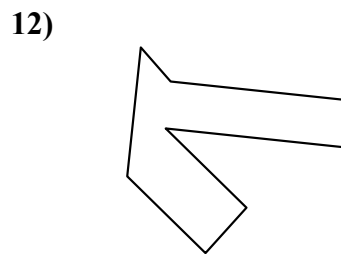
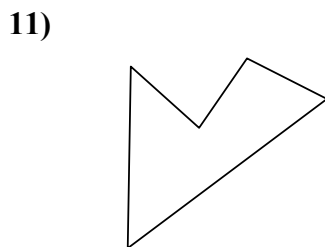
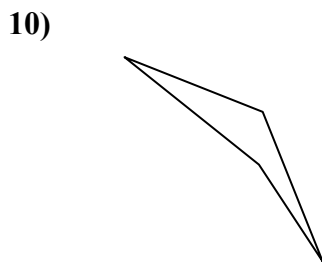
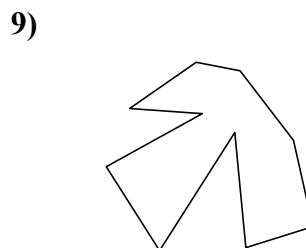
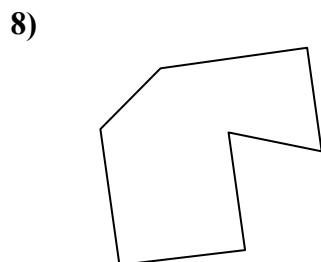
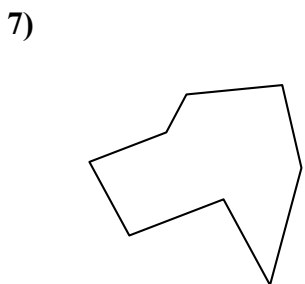
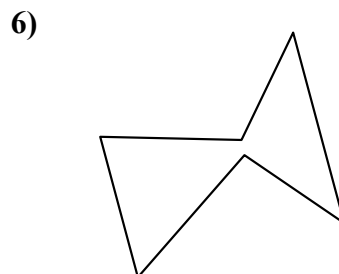
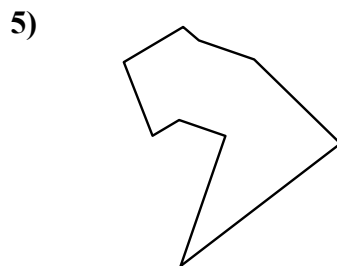
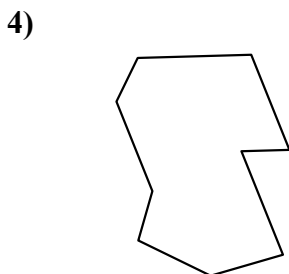
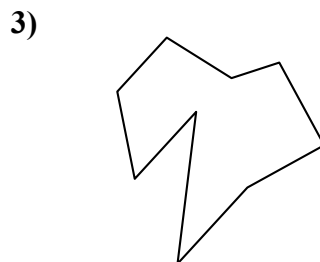
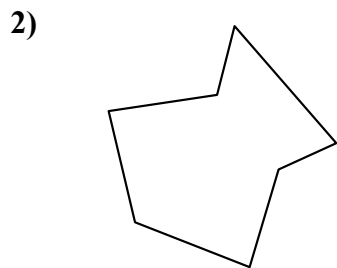
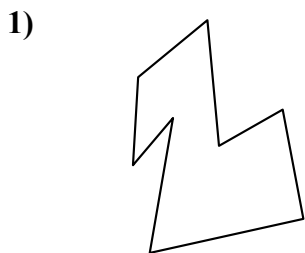
20. девятугольник

21. пятигольник



Определите тип данных фигур.

Ответы



1. \_\_\_\_\_

2. \_\_\_\_\_

3. \_\_\_\_\_

4. \_\_\_\_\_

5. \_\_\_\_\_

6. \_\_\_\_\_

7. \_\_\_\_\_

8. \_\_\_\_\_

9. \_\_\_\_\_

10. \_\_\_\_\_

11. \_\_\_\_\_

12. \_\_\_\_\_

13. \_\_\_\_\_

14. \_\_\_\_\_

15. \_\_\_\_\_

16. \_\_\_\_\_

17. \_\_\_\_\_

18. \_\_\_\_\_

19. \_\_\_\_\_

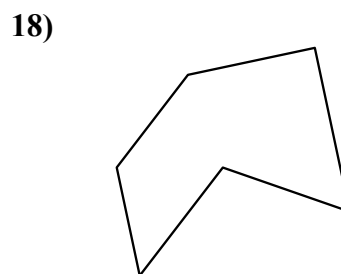
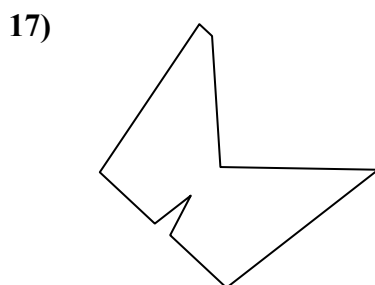

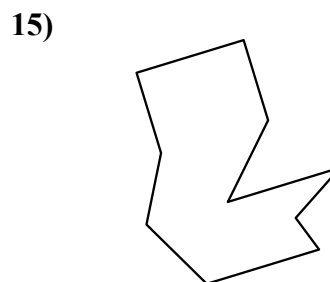
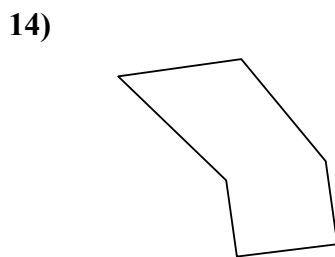
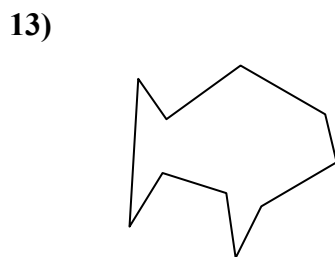
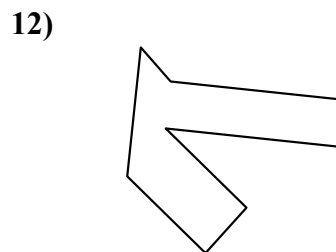
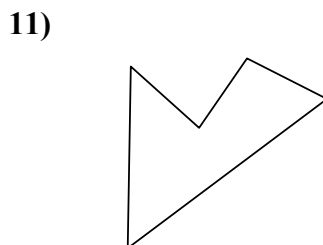
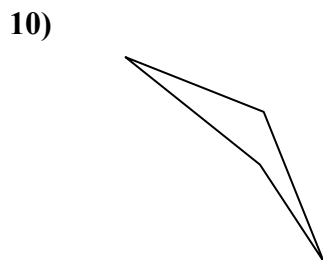
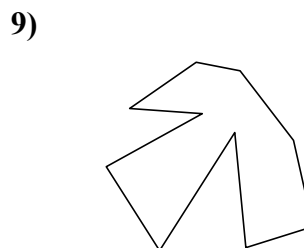
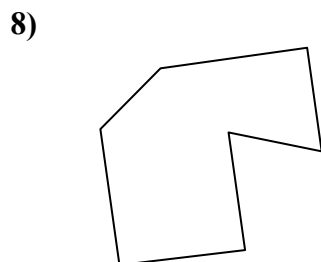
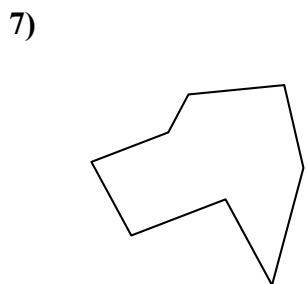
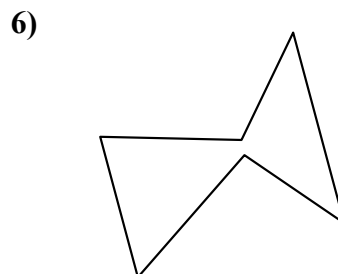
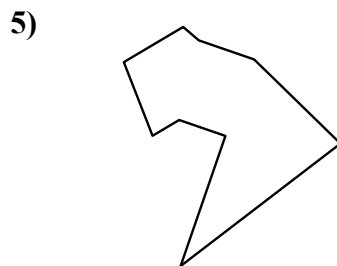
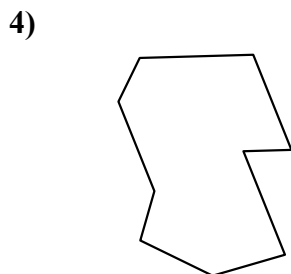
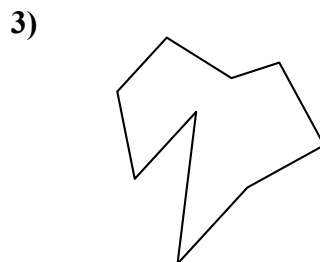
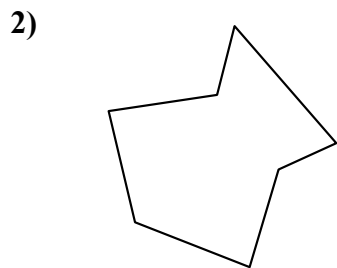
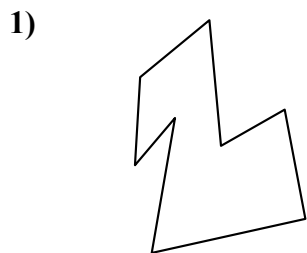
20. \_\_\_\_\_

21. \_\_\_\_\_



Определите тип данных фигур.

ОТВЕТЫ



1. восьмиугольник

2. семиугольник

3. девятиугольник

4. девятиугольник

5. девятиугольник

6. шестиугольник

7. восьмиугольник

8. семиугольник

9. десятиугольник

10. четырёхугольник

11. пятиугольник

12. восьмиугольник

13. десятиугольник

14. шестиугольник

15. десятиугольник

16. семиугольник

17. девятиугольник

18. шестиугольник

19. семиугольник

20. шестиугольник

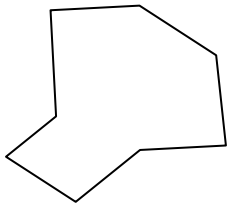
21. четырёхугольник



Определите тип данных фигур.

ОТВЕТЫ

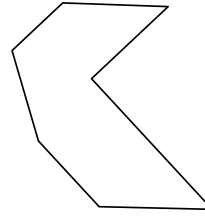
1)



2)

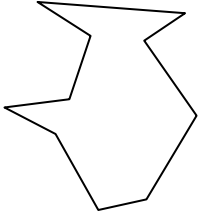


3)

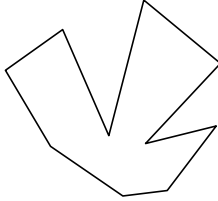


1. \_\_\_\_\_

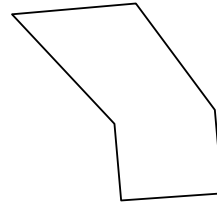
4)



5)

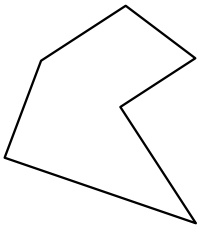


6)

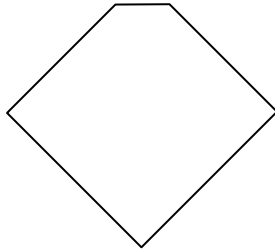


2. \_\_\_\_\_

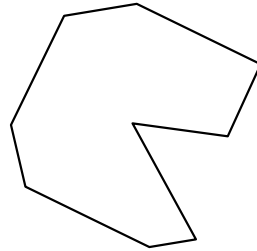
7)



8)




9)

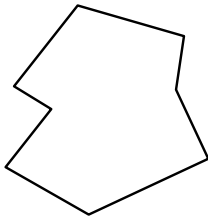


3. \_\_\_\_\_

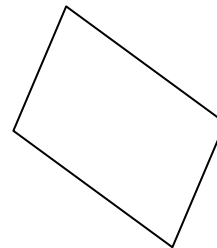
10)



11)

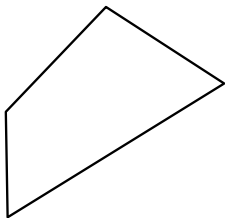


12)

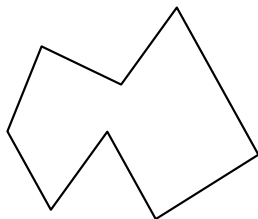


4. \_\_\_\_\_

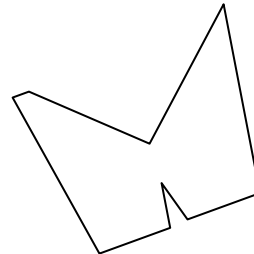
13)



14)

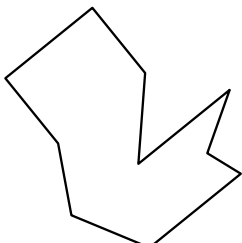


15)




5. \_\_\_\_\_

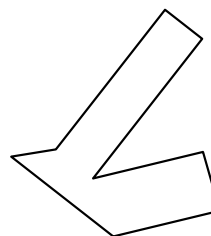
16)



17)



18)



6. \_\_\_\_\_

7. \_\_\_\_\_

8. \_\_\_\_\_

9. \_\_\_\_\_

10. \_\_\_\_\_

11. \_\_\_\_\_

12. \_\_\_\_\_

13. \_\_\_\_\_

14. \_\_\_\_\_

15. \_\_\_\_\_

16. \_\_\_\_\_

17. \_\_\_\_\_

18. \_\_\_\_\_

19. \_\_\_\_\_

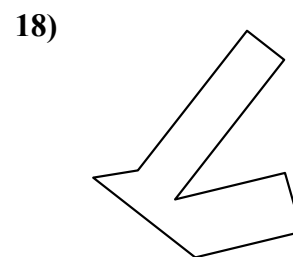
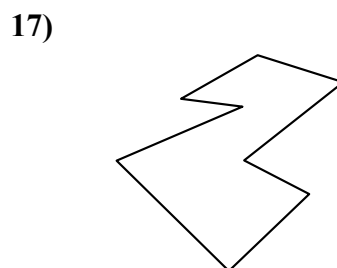
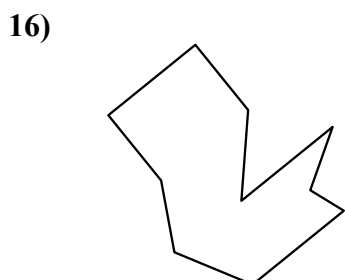
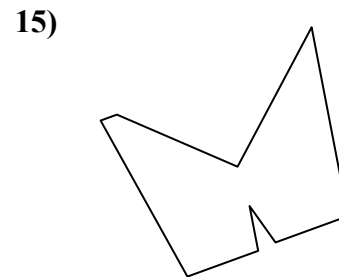

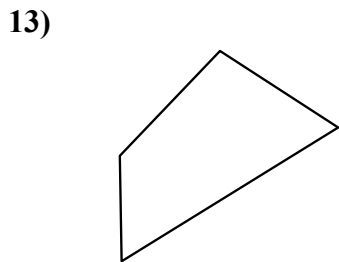
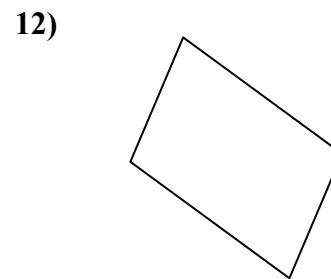
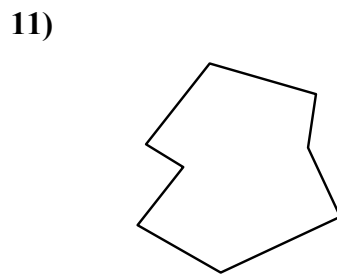
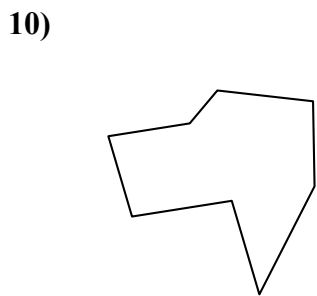
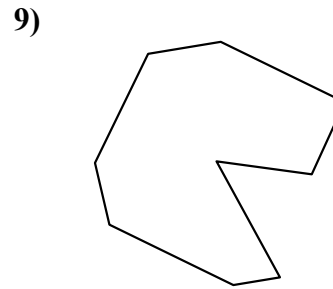
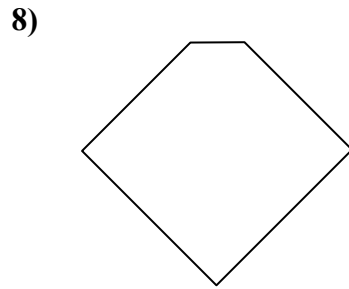
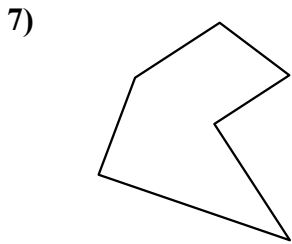
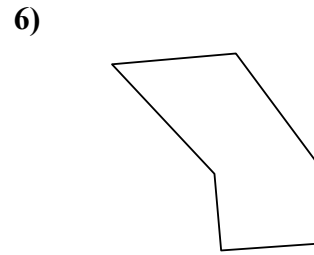
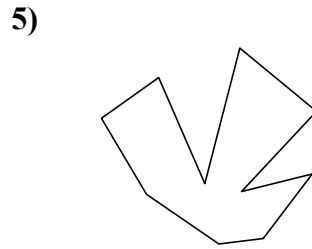
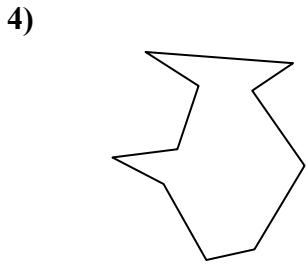
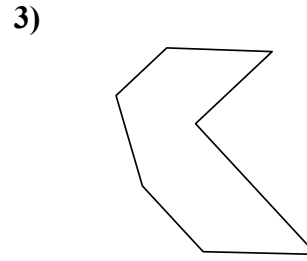
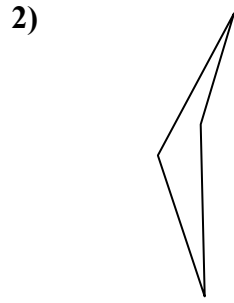
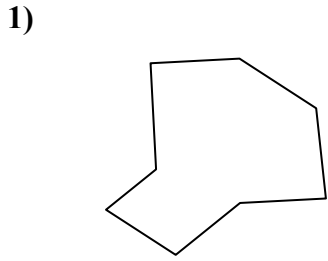
20. \_\_\_\_\_

21. \_\_\_\_\_



Определите тип данных фигур.

**ОТВЕТЫ**



1. восьмиугольник

2. четырёхугольник

3. семиугольник

4. десятиугольник

5. десятиугольник

6. шестиугольник

7. шестиугольник

8. пятиугольник

9. девятиугольник

10. восьмиугольник

11. восьмиугольник

12. четырёхугольник

13. четырёхугольник

14. восьмиугольник

15. девятиугольник

16. десятиугольник

17. восьмиугольник

18. восьмиугольник

19. четырёхугольник

20. семиугольник

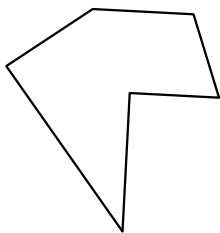
21. девятиугольник




Определите тип данных фигур.

ОТВЕТЫ

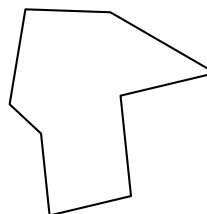
1)



2)

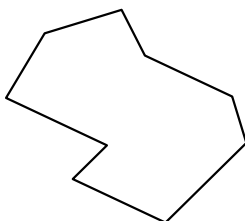


3)

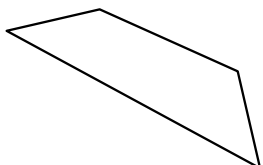


1. \_\_\_\_\_

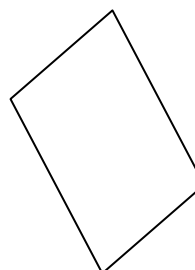
4)



5)



6)



2. \_\_\_\_\_

3. \_\_\_\_\_

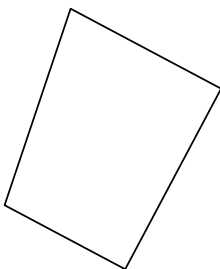
4. \_\_\_\_\_

5. \_\_\_\_\_

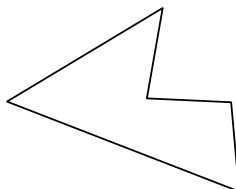
6. \_\_\_\_\_

7. \_\_\_\_\_


7)



8)



9)

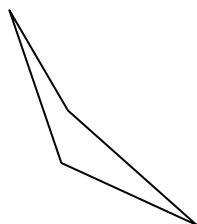


8. \_\_\_\_\_

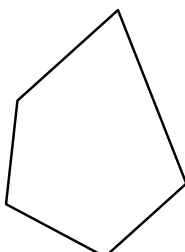
9. \_\_\_\_\_

10. \_\_\_\_\_

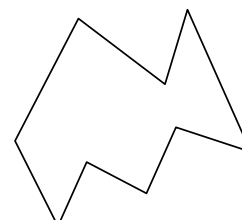
10)



11)



12)



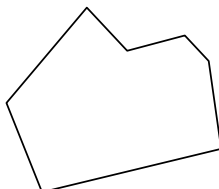
11. \_\_\_\_\_

12. \_\_\_\_\_

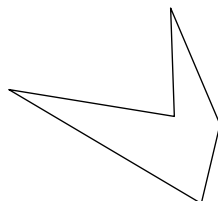
13. \_\_\_\_\_

14. \_\_\_\_\_

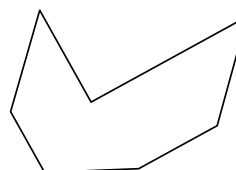
13)



14)



15)

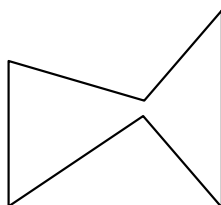


15. \_\_\_\_\_

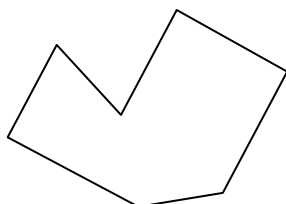
16. \_\_\_\_\_

17. \_\_\_\_\_

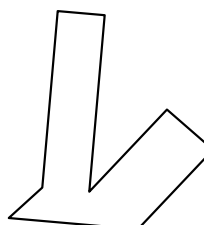
16)



17)



18)



18. \_\_\_\_\_

19. \_\_\_\_\_

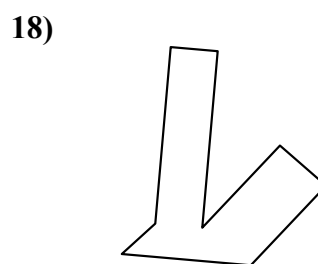
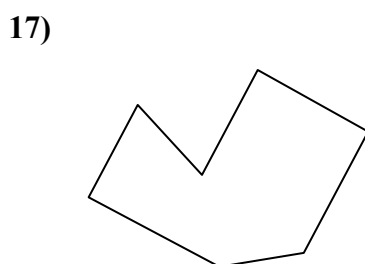
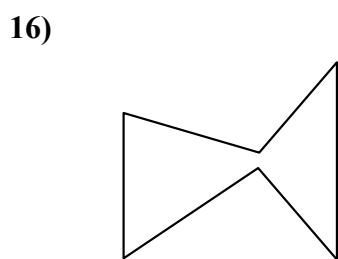
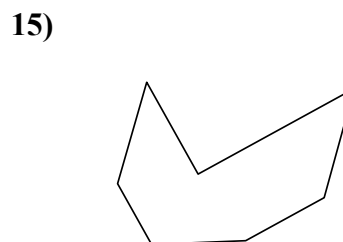
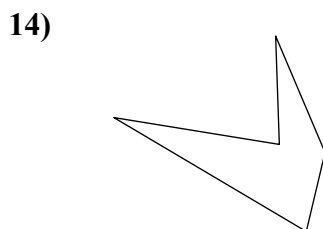
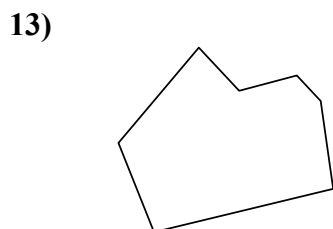
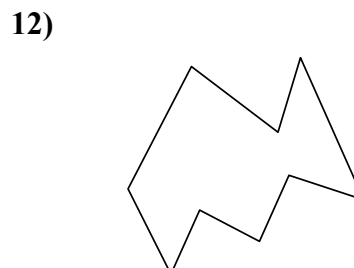
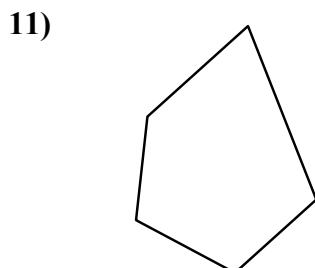
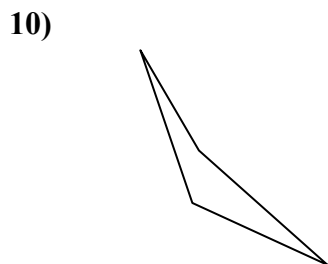
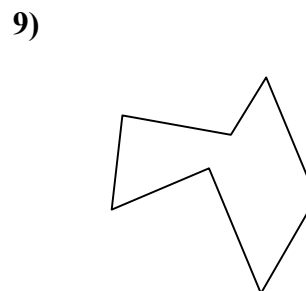
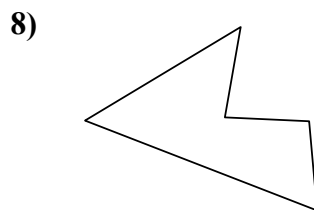
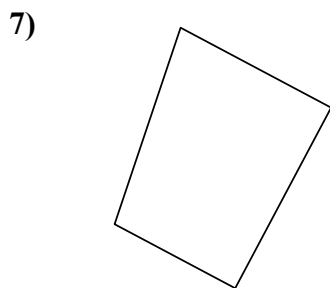
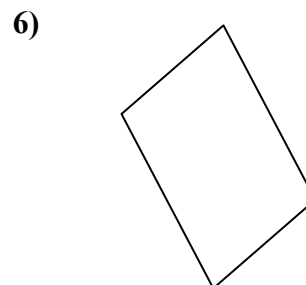
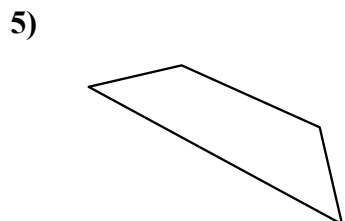
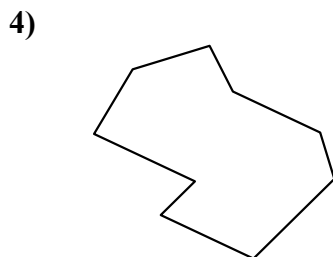
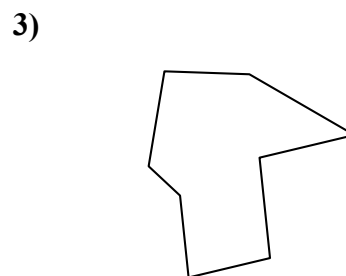
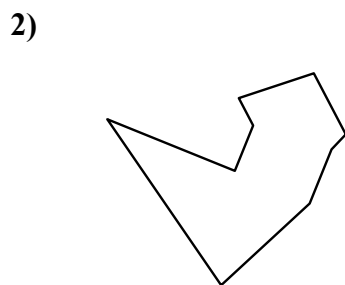
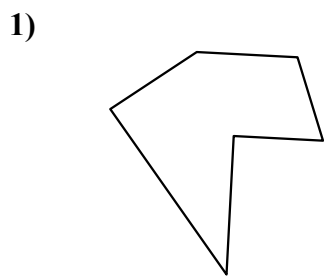
20. \_\_\_\_\_

21. \_\_\_\_\_



Определите тип данных фигур.

**ОТВЕТЫ**



1. шестиугольник

2. девятиугольник

3. восьмиугольник

4. девятиугольник

5. четырёхугольник

6. четырёхугольник

7. четырёхугольник

8. пятиугольник

9. семиугольник

10. четырёхугольник

11. пятиугольник

12. девятиугольник

13. семиугольник

14. пятиугольник

15. семиугольник

16. шестиугольник

17. семиугольник

18. восьмиугольник

19. восьмиугольник

20. семиугольник

21. восьмиугольник

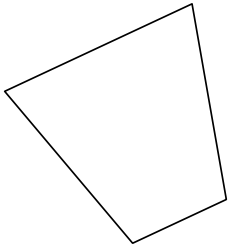




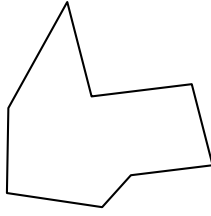
Определите тип данных фигур.

ОТВЕТЫ


1)



2)

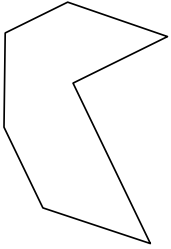


3)

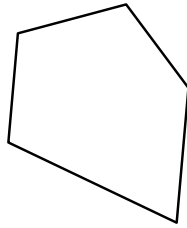


1. \_\_\_\_\_

4)



5)

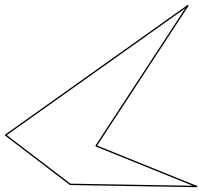


6)




2. \_\_\_\_\_

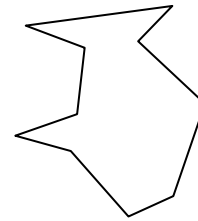
7)



8)




9)

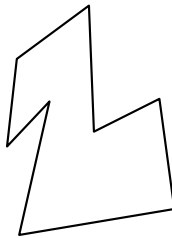


3. \_\_\_\_\_

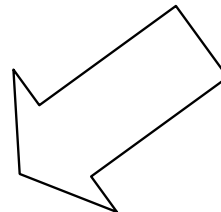
10)



11)

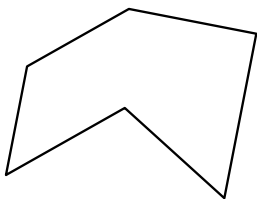


12)

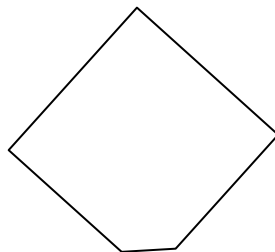


4. \_\_\_\_\_

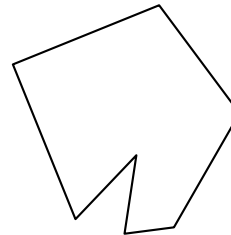
13)



14)

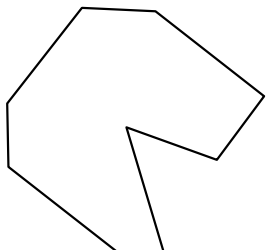


15)




5. \_\_\_\_\_

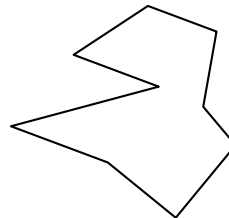
16)



17)



18)



6. \_\_\_\_\_

7. \_\_\_\_\_

8. \_\_\_\_\_

9. \_\_\_\_\_

10. \_\_\_\_\_

11. \_\_\_\_\_

12. \_\_\_\_\_

13. \_\_\_\_\_

14. \_\_\_\_\_

15. \_\_\_\_\_

16. \_\_\_\_\_

17. \_\_\_\_\_

18. \_\_\_\_\_

19. \_\_\_\_\_

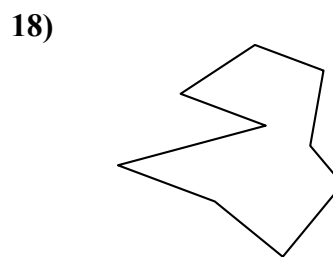

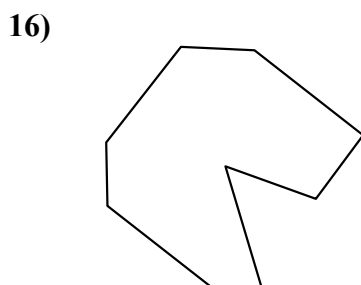
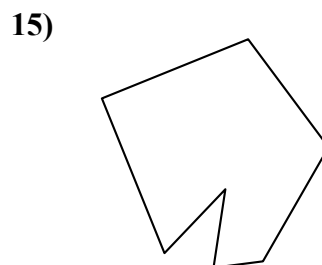
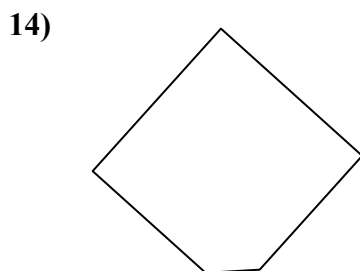
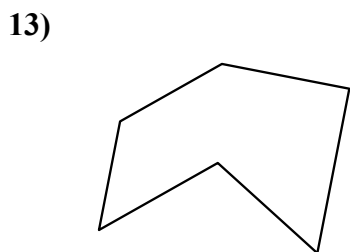
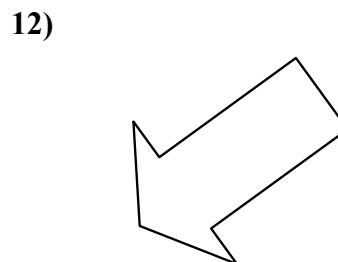
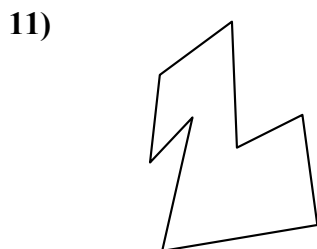
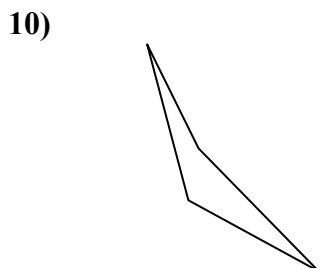
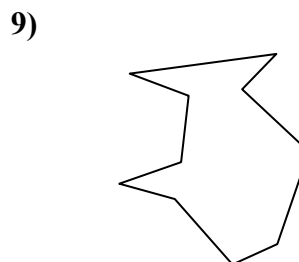
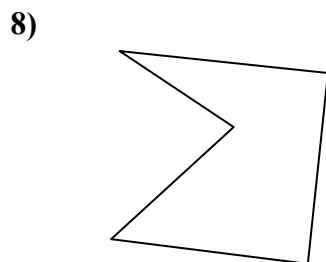
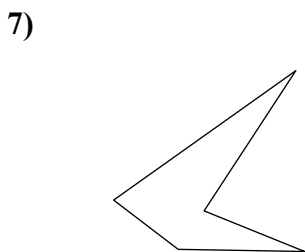
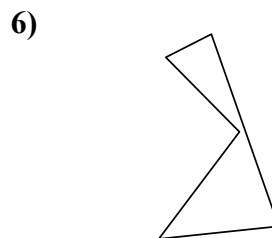
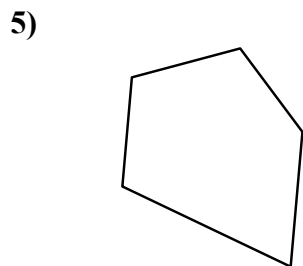
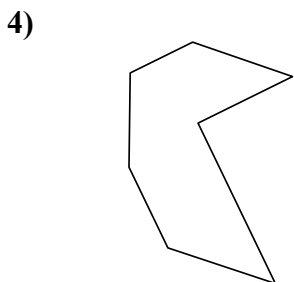
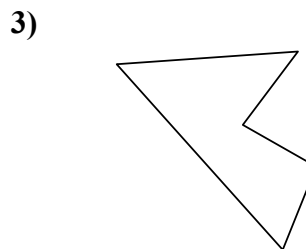
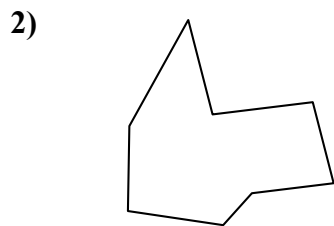
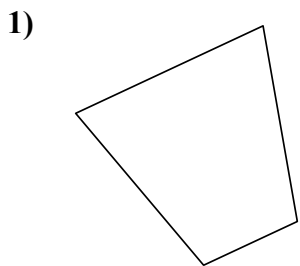
20. \_\_\_\_\_

21. \_\_\_\_\_



Определите тип данных фигур.

**ОТВЕТЫ**



1. четырёхугольник

2. восьмиугольник

3. пятиугольник

4. семиугольник

5. пятиугольник

6. пятиугольник

7. пятиугольник

8. пятиугольник

9. десятиугольник

10. четырёхугольник

11. восьмиугольник

12. семиугольник

13. шестиугольник

14. пятиугольник

15. семиугольник

16. девятиугольник

17. шестиугольник

18. девятиугольник

19. десятиугольник

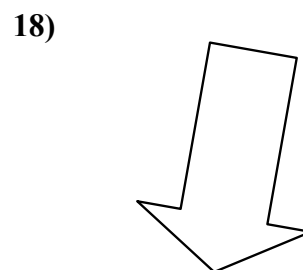
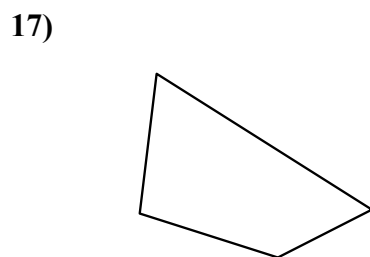
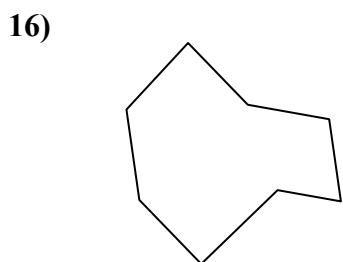
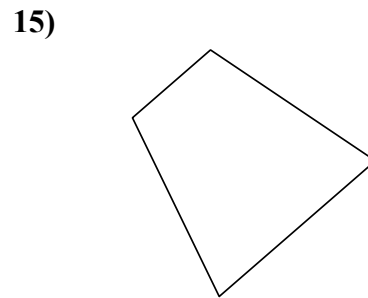
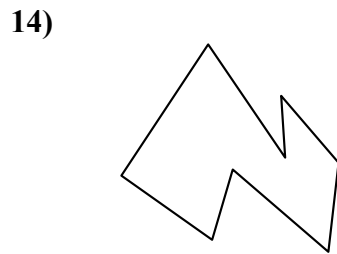
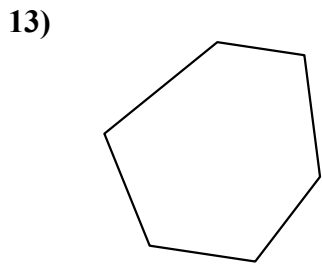
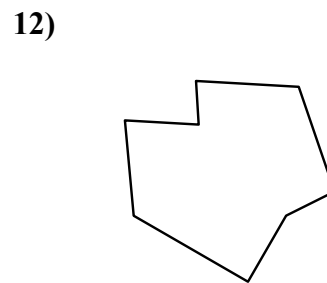
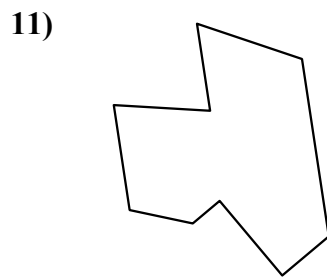
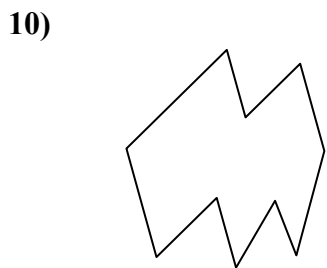
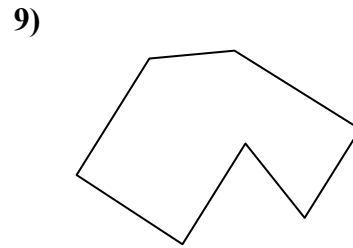

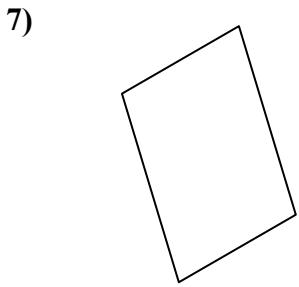
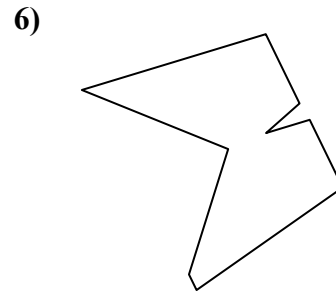
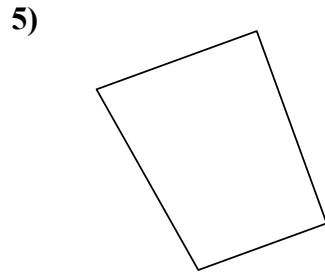
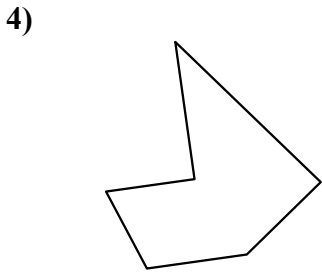
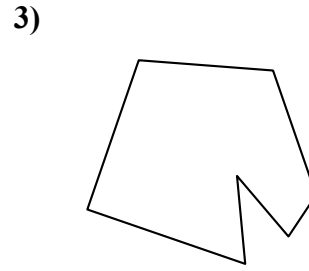
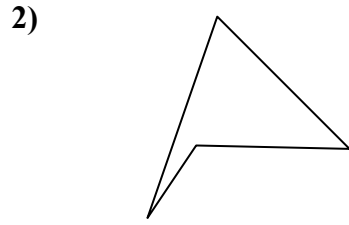
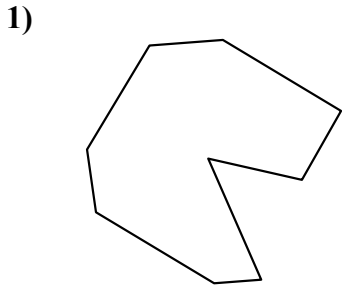
20. четырёхугольник

21. девятиугольник



Определите тип данных фигур.

Ответы



1. \_\_\_\_\_

2. \_\_\_\_\_

3. \_\_\_\_\_

4. \_\_\_\_\_

5. \_\_\_\_\_

6. \_\_\_\_\_

7. \_\_\_\_\_

8. \_\_\_\_\_

9. \_\_\_\_\_

10. \_\_\_\_\_

11. \_\_\_\_\_

12. \_\_\_\_\_

13. \_\_\_\_\_

14. \_\_\_\_\_

15. \_\_\_\_\_

16. \_\_\_\_\_

17. \_\_\_\_\_

18. \_\_\_\_\_

19. \_\_\_\_\_

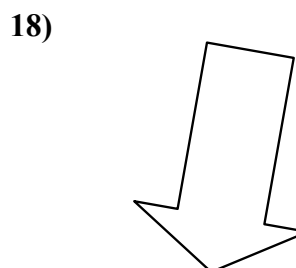
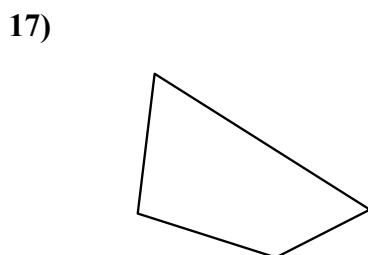
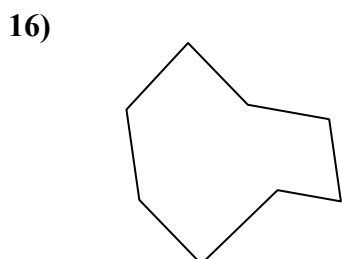
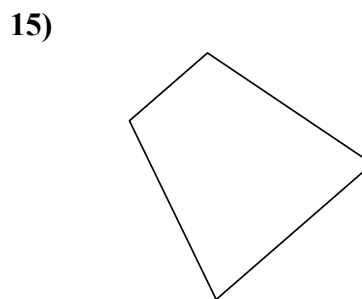
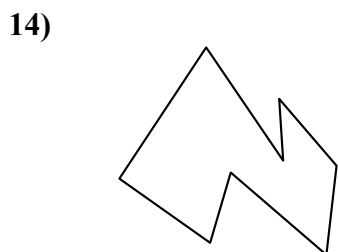
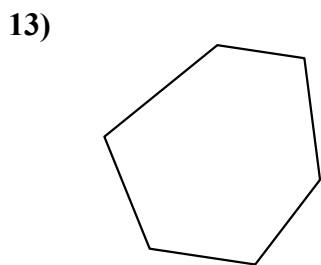
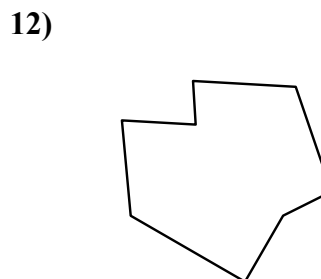
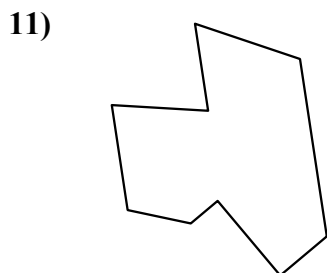
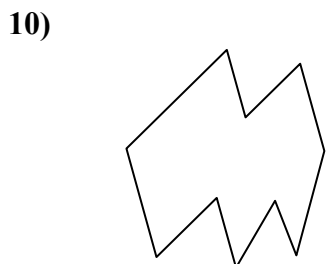
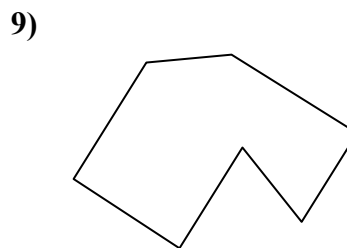
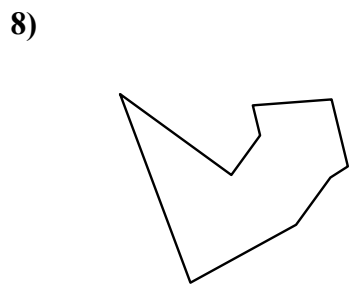
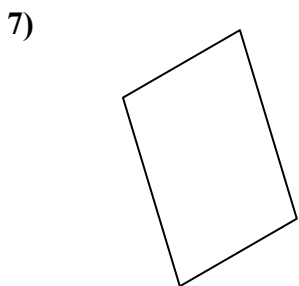
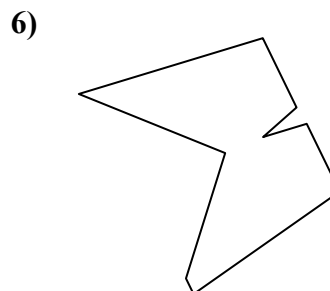
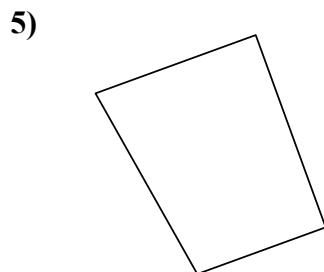
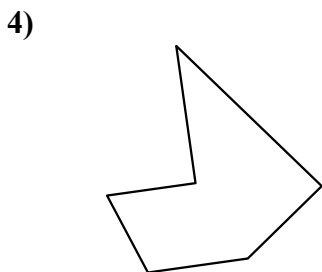
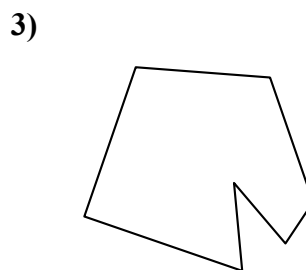
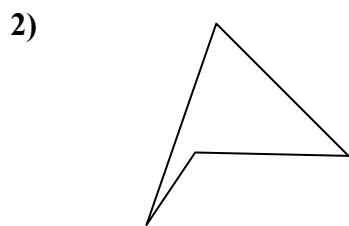
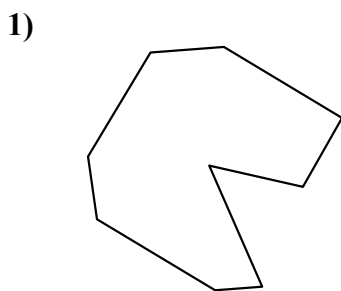
20. \_\_\_\_\_

21. \_\_\_\_\_



Определите тип данных фигур.

**ОТВЕТЫ**



1. девятугольник

2. четырехугольник

3. семиугольник

4. шестиугольник

5. четырехугольник

6. девятугольник

7. четырехугольник

8. девятугольник

9. семиугольник

10. десятугольник

11. девятугольник

12. восьмиугольник

13. шестиугольник

14. восьмиугольник

15. четырехугольник

16. восьмиугольник

17. четырехугольник

18. семиугольник

19. шестиугольник

20. пятиугольник

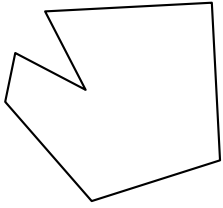
21. десятугольник



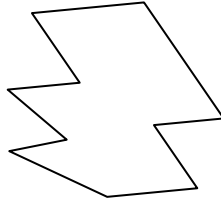
Определите тип данных фигур.

Ответы

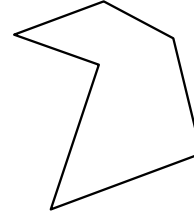
1)



2)

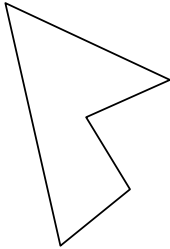


3)

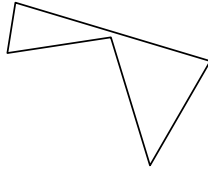


1. \_\_\_\_\_

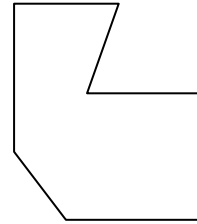
4)



5)



6)



2. \_\_\_\_\_

3. \_\_\_\_\_


4. \_\_\_\_\_

5. \_\_\_\_\_

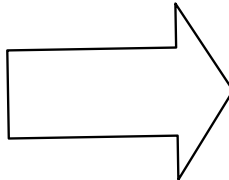
6. \_\_\_\_\_

7. \_\_\_\_\_

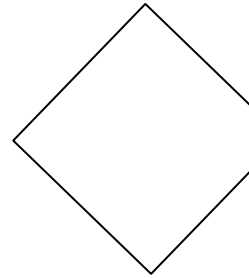
7)



8)



9)



8. \_\_\_\_\_

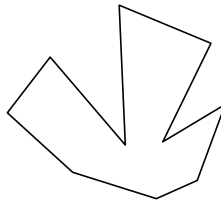
9. \_\_\_\_\_

10. \_\_\_\_\_

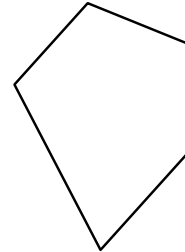
10)



11)



12)



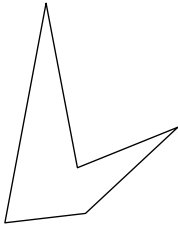
11. \_\_\_\_\_

12. \_\_\_\_\_

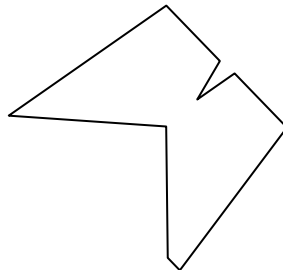
13. \_\_\_\_\_

14. \_\_\_\_\_


13)



14)



15)

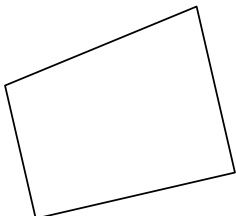


15. \_\_\_\_\_

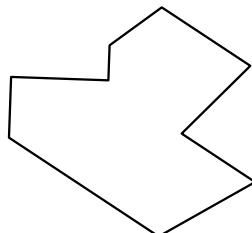
16. \_\_\_\_\_

17. \_\_\_\_\_


16)



17)



18)



18. \_\_\_\_\_

19. \_\_\_\_\_

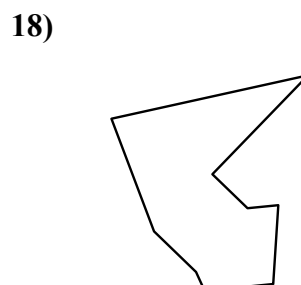
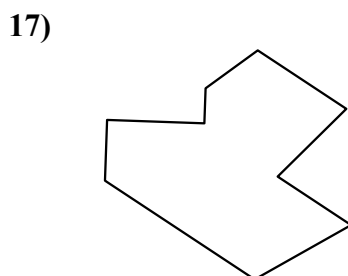
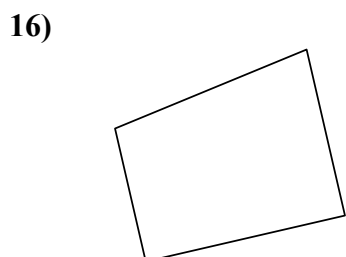
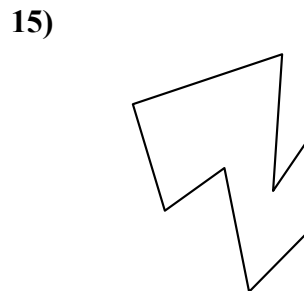
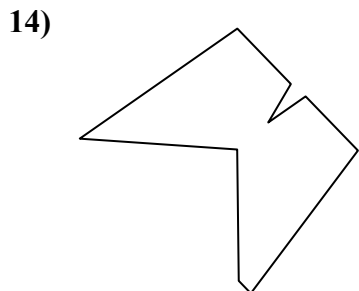
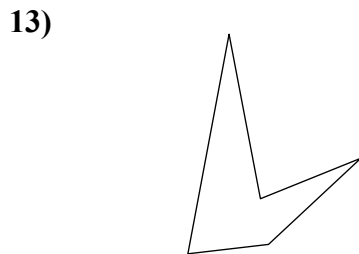
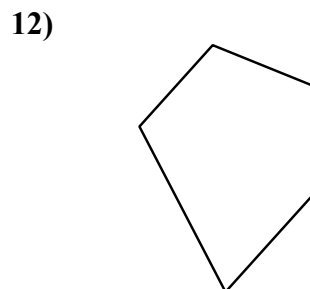
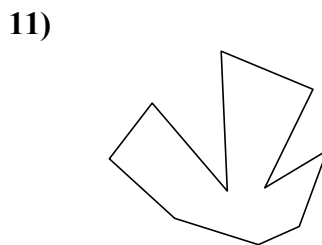
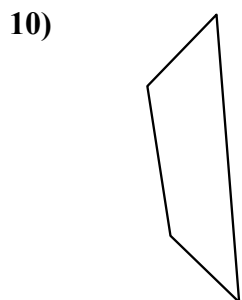
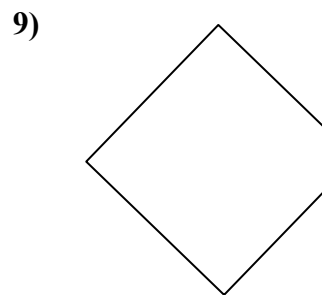
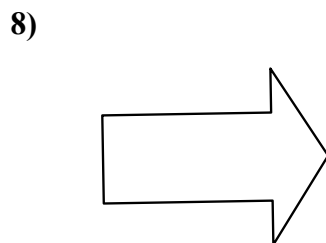
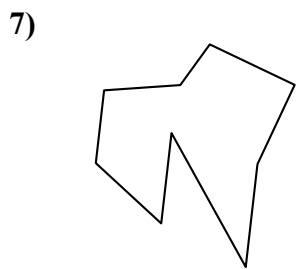
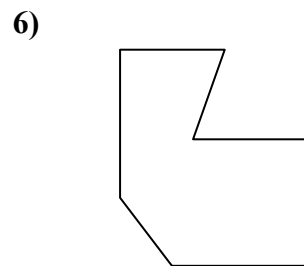
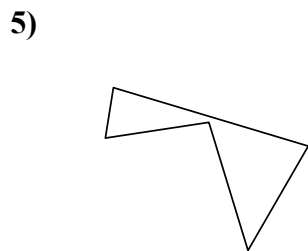
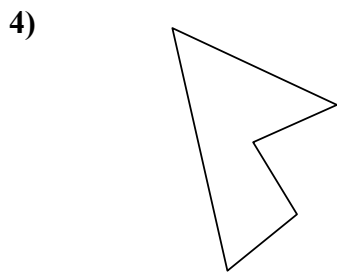
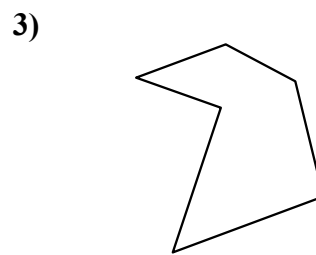

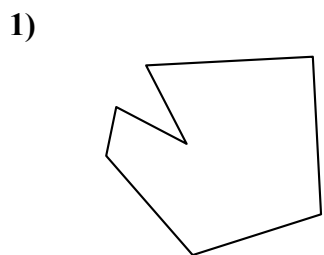
20. \_\_\_\_\_

21. \_\_\_\_\_



Определите тип данных фигур.

**ОТВЕТЫ**



1. семиугольник

2. десятиугольник

3. шестиугольник

4. пятиугольник

5. пятиугольник

6. семиугольник

7. девятиугольник

8. семиугольник

9. пятиугольник

10. четырёхугольник

11. десятиугольник

12. пятиугольник

13. пятиугольник

14. девятиугольник

15. восьмиугольник

16. четырёхугольник

17. девятиугольник

18. девятиугольник

19. восьмиугольник

20. четырёхугольник

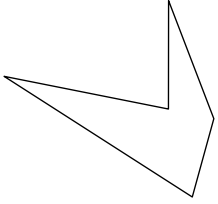
21. восьмиугольник



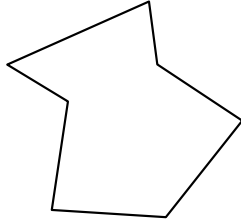
Определите тип данных фигур.

Ответы


1)



2)



3)

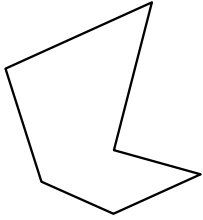


1. \_\_\_\_\_

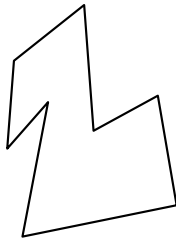
2. \_\_\_\_\_

3. \_\_\_\_\_

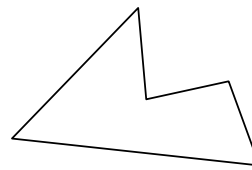
4)



5)



6)

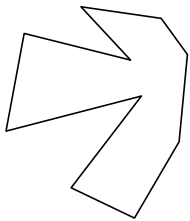


4. \_\_\_\_\_

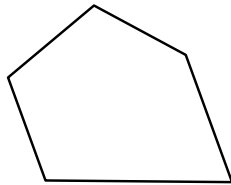
5. \_\_\_\_\_

6. \_\_\_\_\_

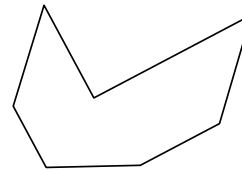
7)



8)



9)



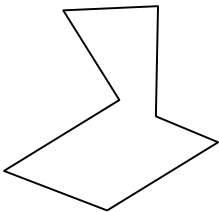
7. \_\_\_\_\_

8. \_\_\_\_\_


9. \_\_\_\_\_

10. \_\_\_\_\_

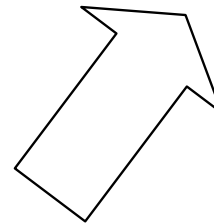
10)



11)



12)



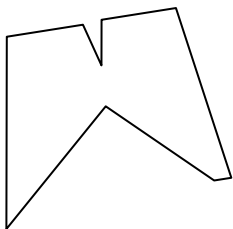
11. \_\_\_\_\_

12. \_\_\_\_\_

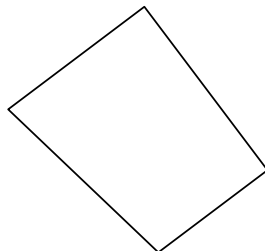
13. \_\_\_\_\_

14. \_\_\_\_\_

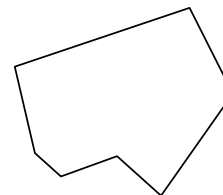
13)



14)



15)

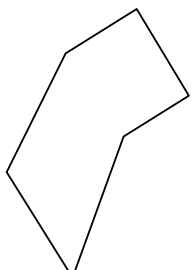


15. \_\_\_\_\_

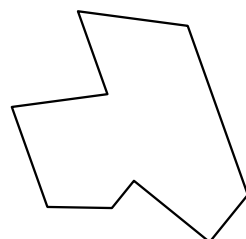
16. \_\_\_\_\_

17. \_\_\_\_\_


16)



17)



18)



18. \_\_\_\_\_

19. \_\_\_\_\_

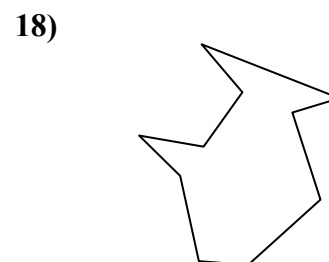
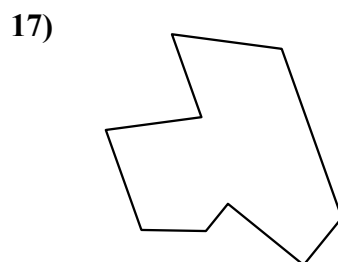
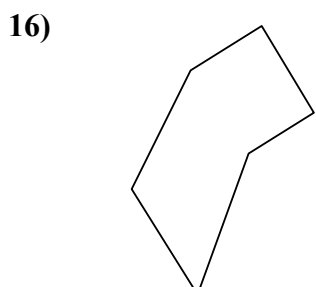
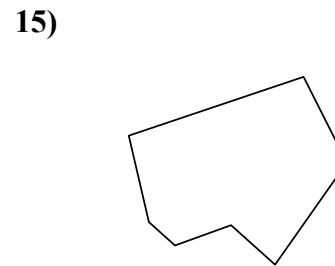
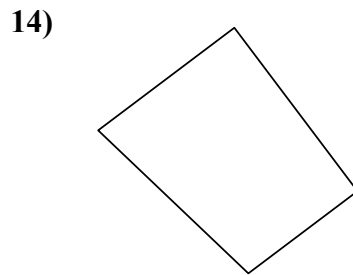
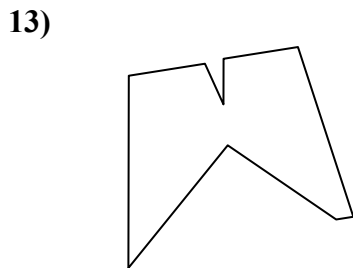
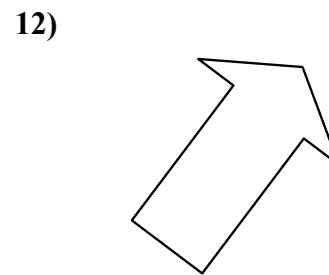
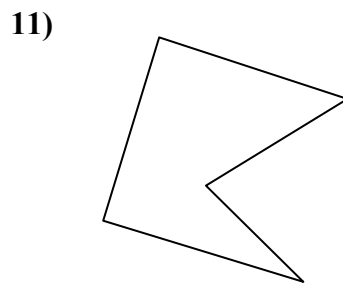
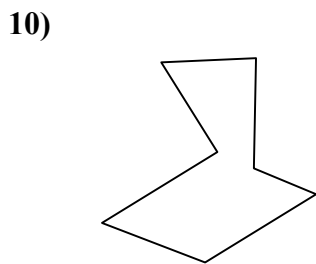
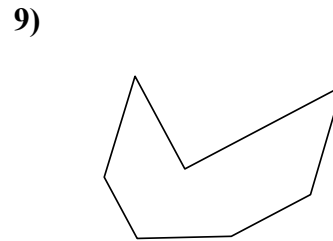
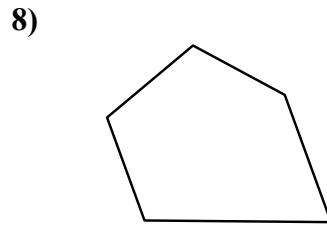
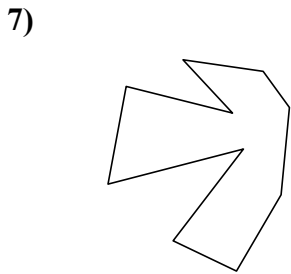
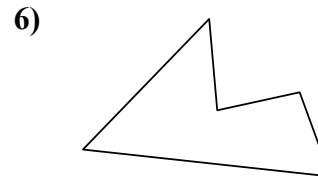
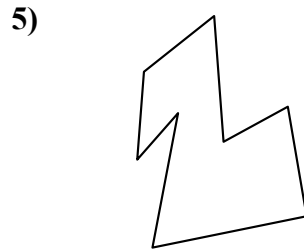
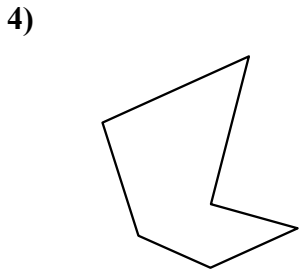
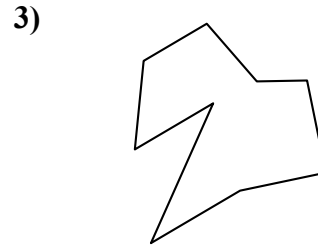
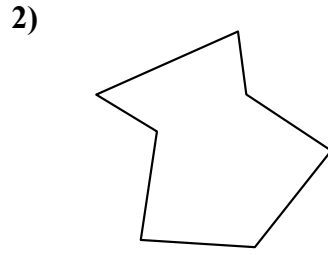
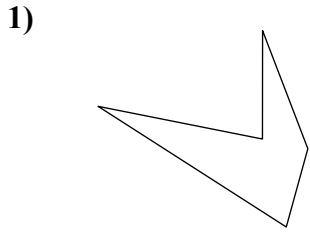
20. \_\_\_\_\_

21. \_\_\_\_\_



Определите тип данных фигур.

ОТВЕТЫ



1. пятиугольник

2. семиугольник

3. девятугольник

4. шестиугольник

5. восьмиугольник

6. пятиугольник

7. десятиугольник

8. пятиугольник

9. семиугольник

10. семиугольник

11. пятиугольник

12. семиугольник

13. девятугольник

14. четырёхугольник

15. семиугольник

16. шестиугольник

17. девятугольник

18. десятиугольник

19. девятугольник

20. шестиугольник

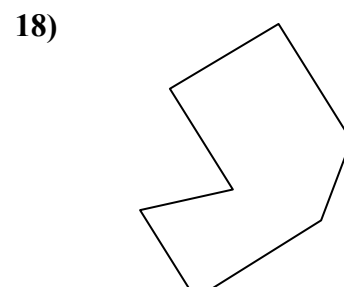
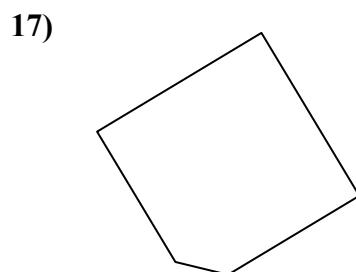
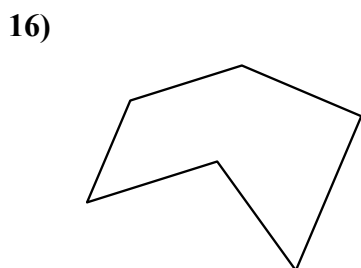
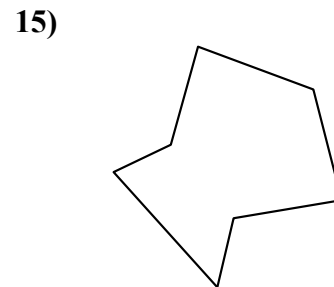

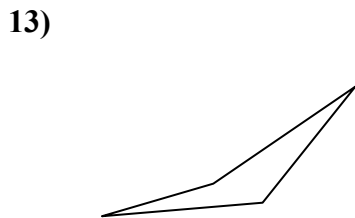
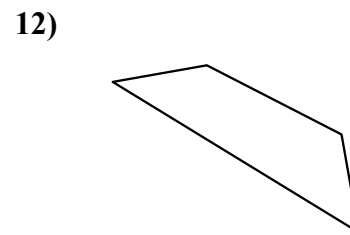
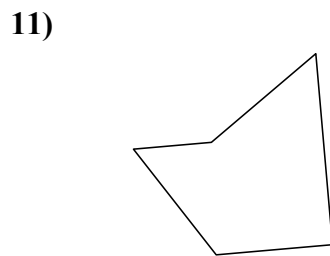
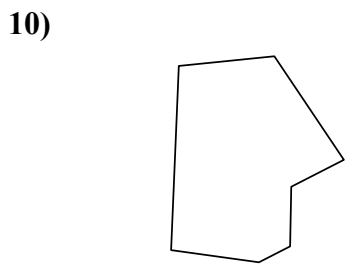
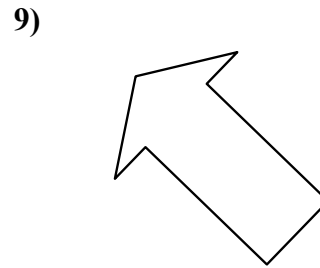
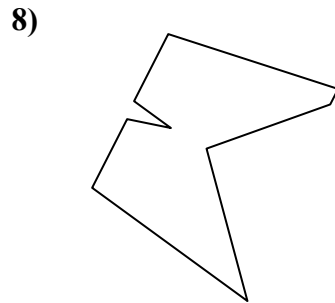
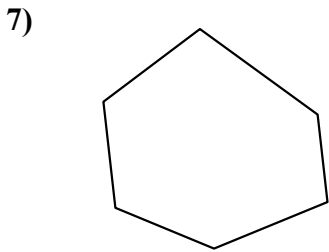
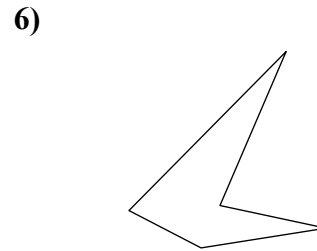
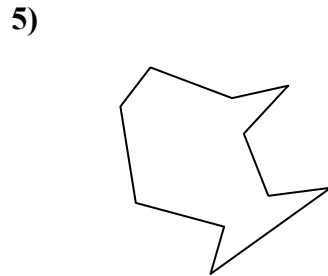
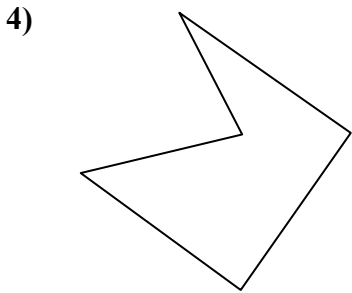
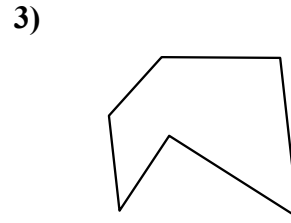
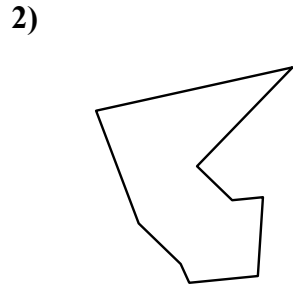
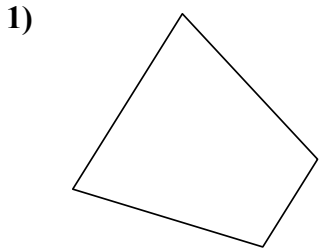
21. восьмиугольник





Определите тип данных фигур.

ОТВЕТЫ



1. \_\_\_\_\_

2. \_\_\_\_\_

3. \_\_\_\_\_

4. \_\_\_\_\_

5. \_\_\_\_\_

6. \_\_\_\_\_

7. \_\_\_\_\_

8. \_\_\_\_\_

9. \_\_\_\_\_

10. \_\_\_\_\_

11. \_\_\_\_\_

12. \_\_\_\_\_

13. \_\_\_\_\_

14. \_\_\_\_\_

15. \_\_\_\_\_

16. \_\_\_\_\_

17. \_\_\_\_\_

18. \_\_\_\_\_

19. \_\_\_\_\_

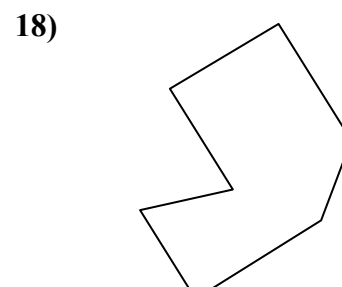
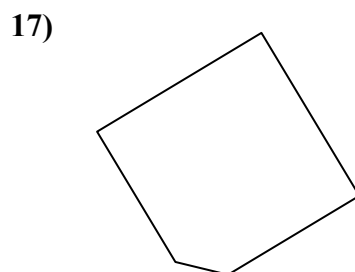
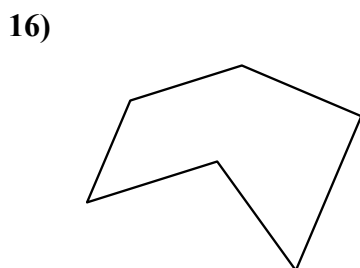
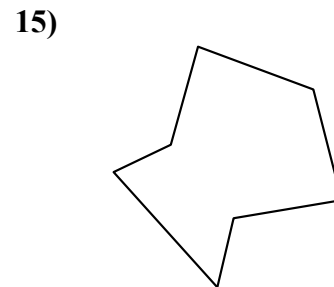

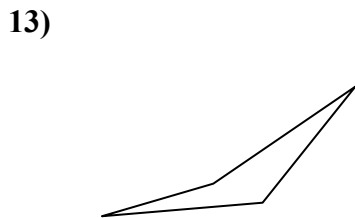
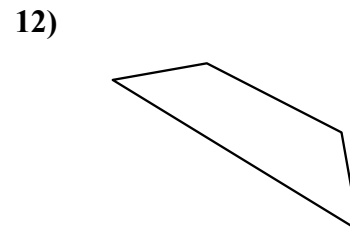
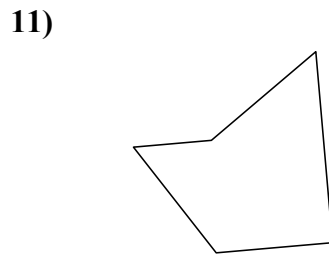
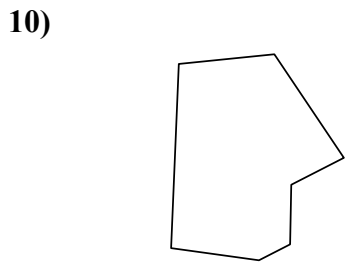
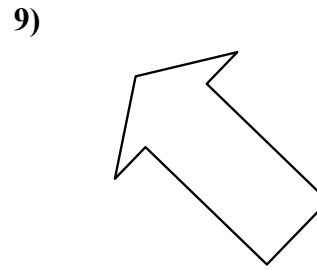
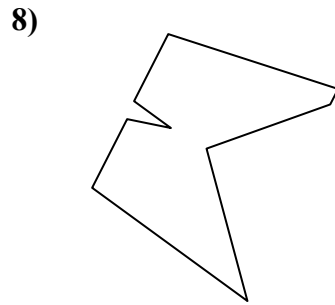
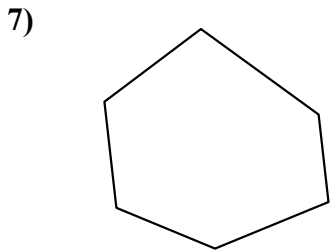
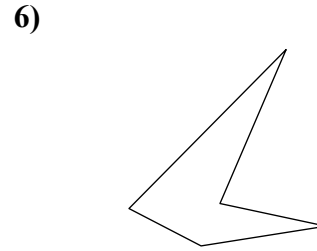
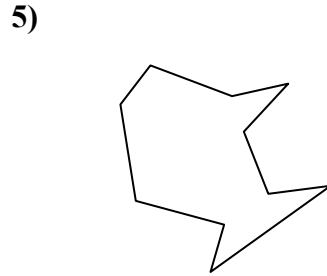
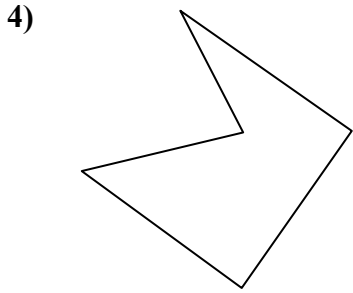
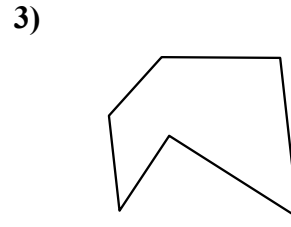
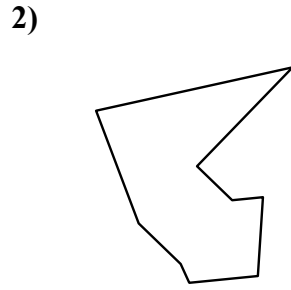
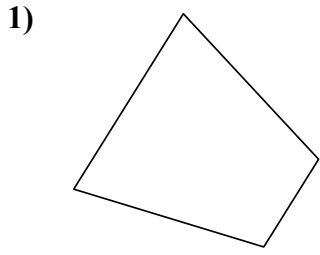
20. \_\_\_\_\_

21. \_\_\_\_\_



Определите тип данных фигур.

**ОТВЕТЫ**



1. четырёхугольник

2. девятиугольник

3. шестиугольник

4. пятиугольник

5. десятиугольник

6. пятиугольник

7. шестиугольник

8. девятиугольник

9. семиугольник

10. семиугольник

11. пятиугольник

12. четырёхугольник

13. четырёхугольник

14. четырёхугольник

15. семиугольник

16. шестиугольник

17. пятиугольник

18. семиугольник

19. семиугольник

20. восьмиугольник

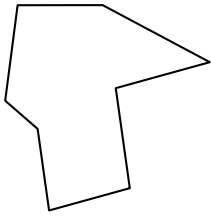
21. шестиугольник



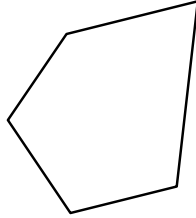
Определите тип данных фигур.

ОТВЕТЫ


1)



2)



3)

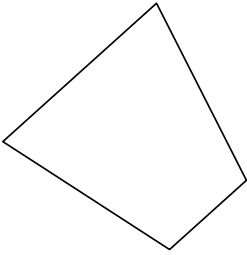


1. \_\_\_\_\_

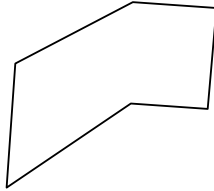
2. \_\_\_\_\_

3. \_\_\_\_\_

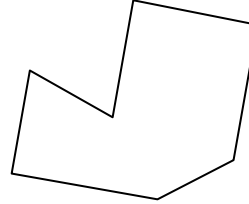
4)



5)



6)

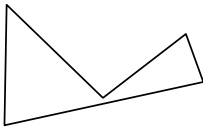


4. \_\_\_\_\_


5. \_\_\_\_\_

6. \_\_\_\_\_

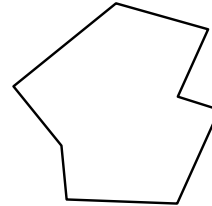
7)



8)



9)

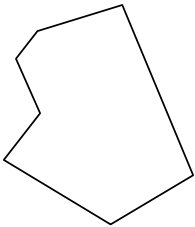


7. \_\_\_\_\_

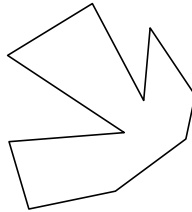
8. \_\_\_\_\_

9. \_\_\_\_\_

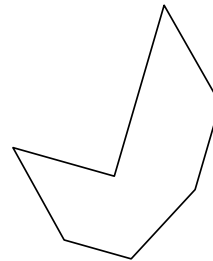
10)



11)



12)



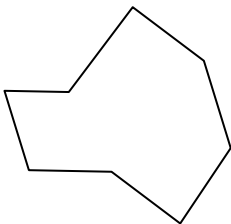
10. \_\_\_\_\_

11. \_\_\_\_\_

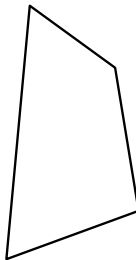
12. \_\_\_\_\_

13. \_\_\_\_\_

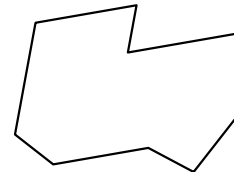
13)



14)



15)



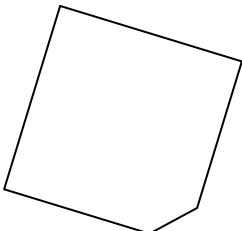
14. \_\_\_\_\_

15. \_\_\_\_\_

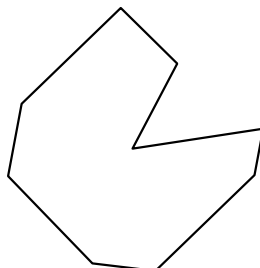
16. \_\_\_\_\_

17. \_\_\_\_\_

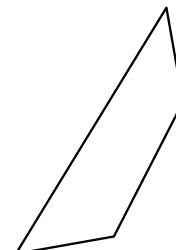
16)



17)



18)



18. \_\_\_\_\_

19. \_\_\_\_\_

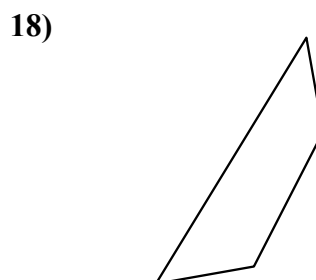
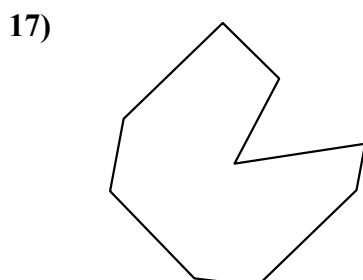
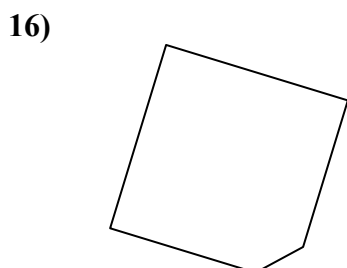
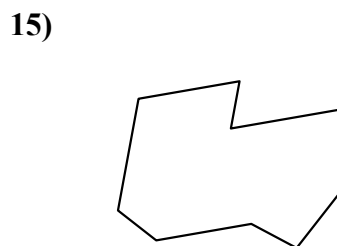
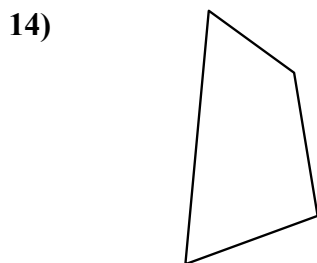
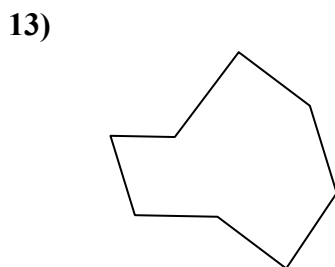
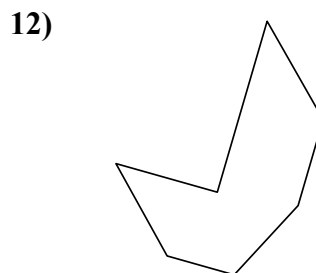
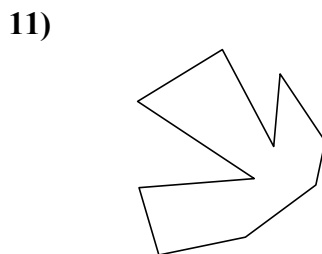
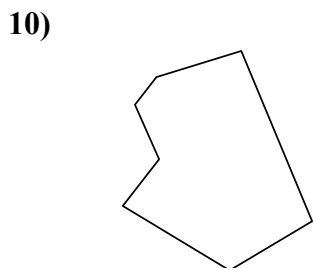
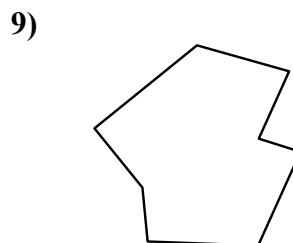
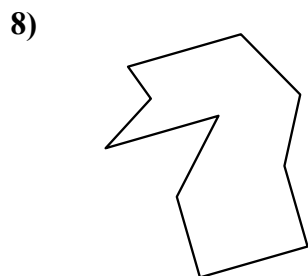
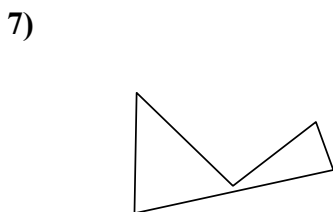
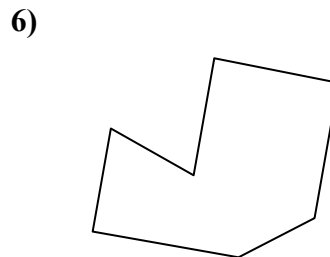
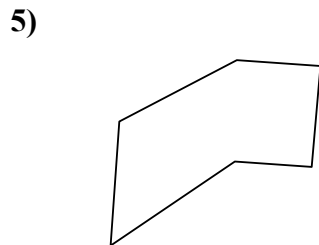
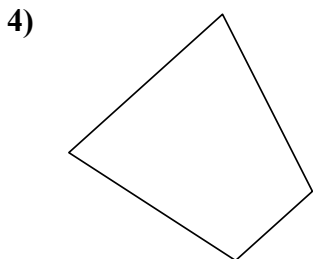
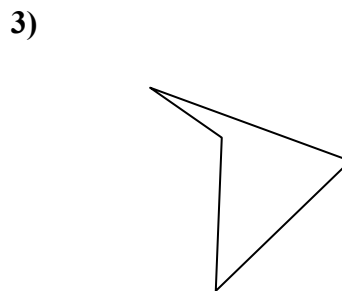
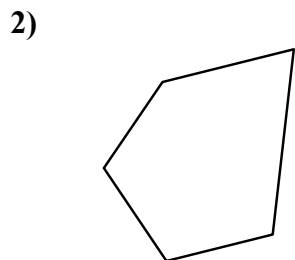
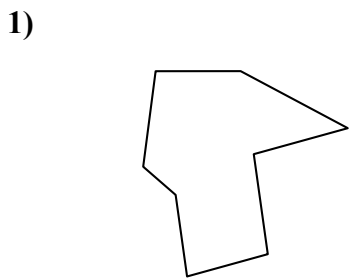
20. \_\_\_\_\_

21. \_\_\_\_\_



Определите тип данных фигур.

**ОТВЕТЫ**



1. восьмиугольник

2. пятиугольник

3. четырёхугольник

4. четырёхугольник

5. шестиугольник

6. семиугольник

7. пятиугольник

8. десятиугольник

9. восьмиугольник

10. семиугольник

11. десятиугольник

12. семиугольник

13. восьмиугольник

14. четырёхугольник

15. девятиугольник

16. пятиугольник

17. девятиугольник

18. четырёхугольник

19. семиугольник

20. шестиугольник

21. девятиугольник