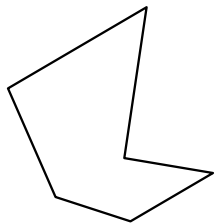




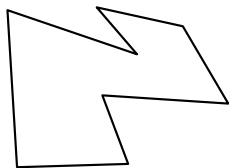
Определите тип данных фигур.

Ответы

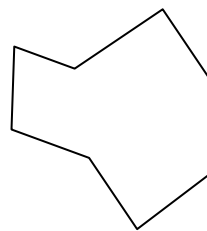
1)



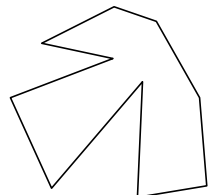
2)



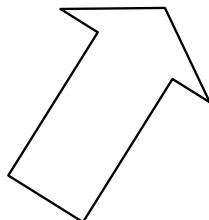
3)



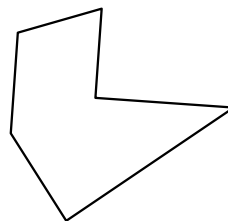
4)



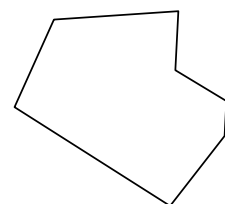
5)



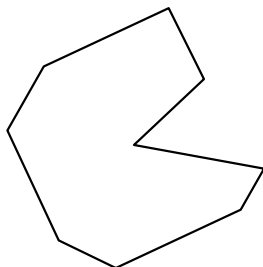
6)



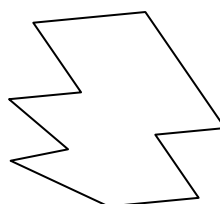
7)



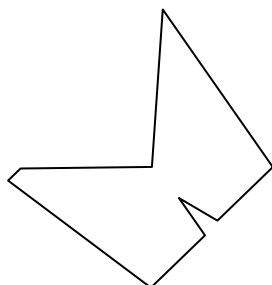
8)



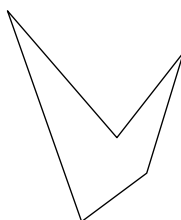
9)



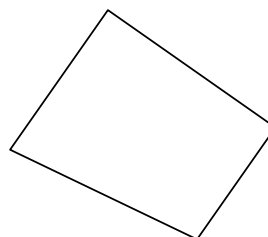
10)




11)



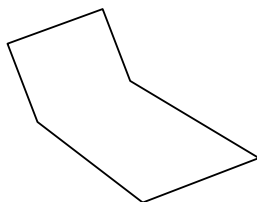
12)



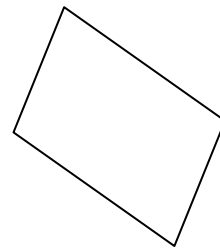
13)




14)



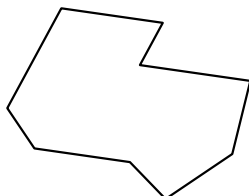
15)



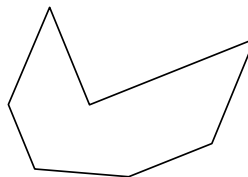
16)



17)



18)



1. _____

2. _____

3. _____

4. _____

5. _____

6. _____

7. _____

8. _____

9. _____

10. _____

11. _____

12. _____

13. _____

14. _____

15. _____

16. _____

17. _____

18. _____

19. _____

20. _____

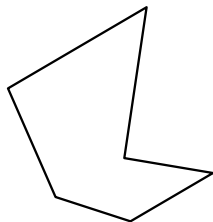
21. _____



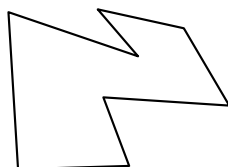
Определите тип данных фигур.

ОТВЕТЫ

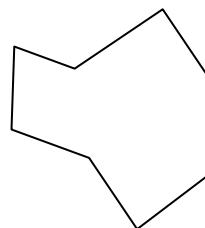
1)



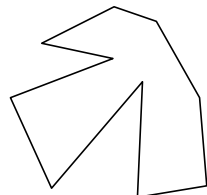
2)



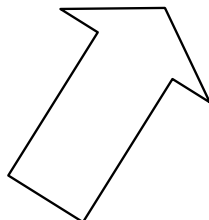
3)



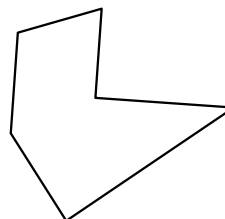
4)



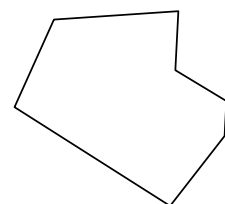
5)



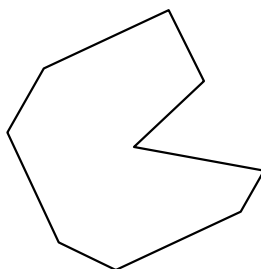
6)



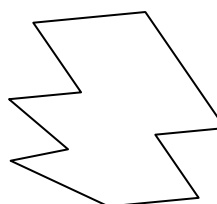
7)



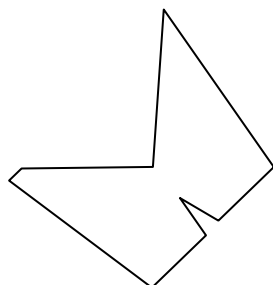
8)



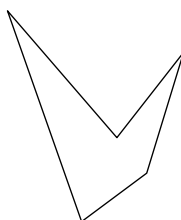
9)



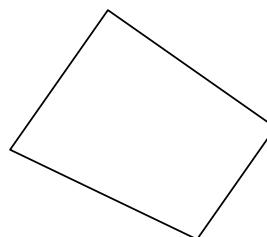
10)




11)



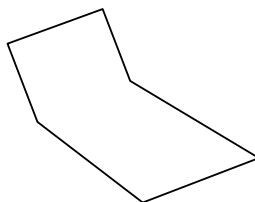
12)



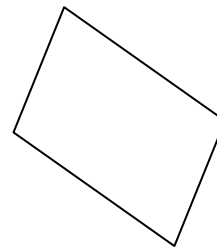
13)




14)



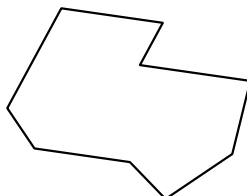
15)



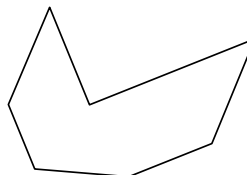
16)



17)



18)



1. шестиугольник

2. восьмиугольник

3. восьмиугольник

4. десятиугольник

5. семиугольник

6. шестиугольник

7. семиугольник

8. девятиугольник

9. десятиугольник

10. девятиугольник

11. пятиугольник

12. четырёхугольник

13. десятиугольник

14. шестиугольник

15. четырёхугольник

16. шестиугольник

17. девятиугольник

18. семиугольник

19. девятиугольник

20. пятиугольник

21. восьмиугольник