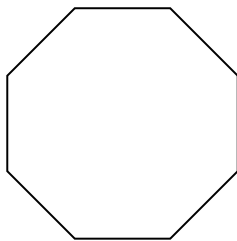


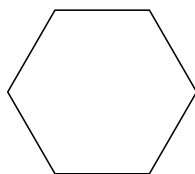


Определите тип данных фигур.

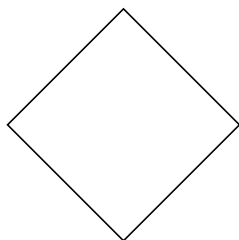
1)



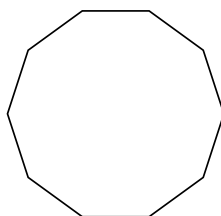
2)



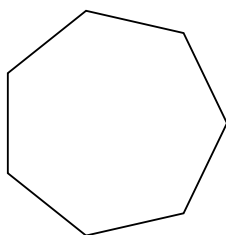
3)



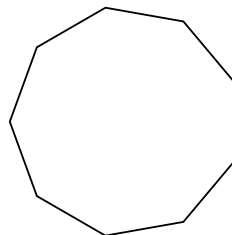
4)



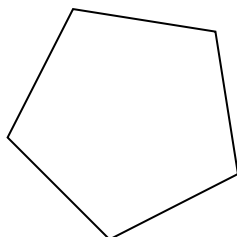
5)



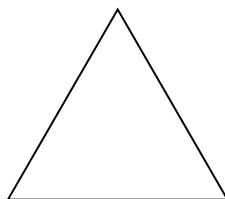
6)



7)



8)



Ответы

1. _____

2. _____

3. _____

4. _____

5. _____

6. _____

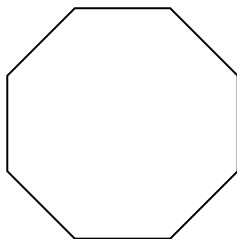
7. _____

8. _____

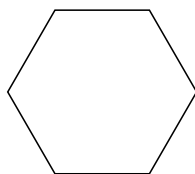


Определите тип данных фигур.

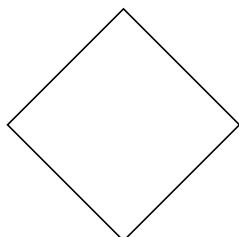
1)



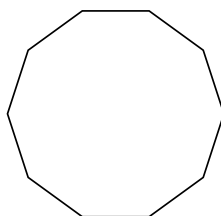
2)



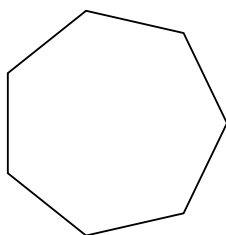
3)



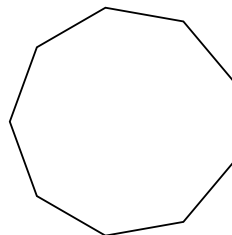
4)



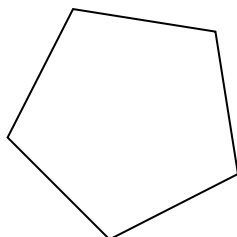
5)



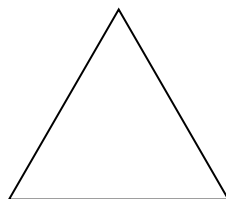
6)



7)



8)

Ответы1. восьмиугольник2. шестиугольник3. четырёхугольник4. десятиугольник5. семиугольник6. девятиугольник7. пятиугольник8. треугольник