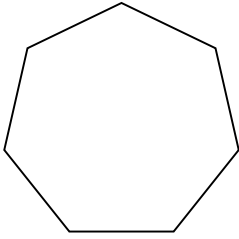


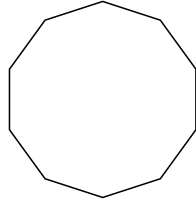


Определите тип данных фигур.

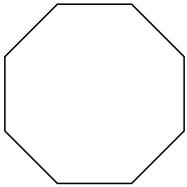
1)



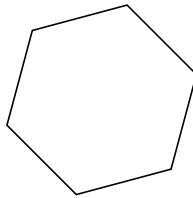
2)



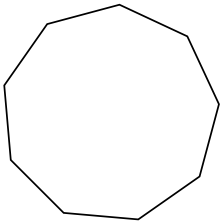
3)



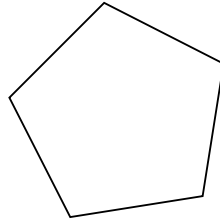
4)



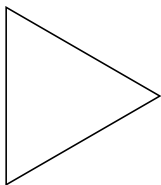
5)




6)



7)



8)



**ОТВЕТЫ**

1. \_\_\_\_\_

2. \_\_\_\_\_

3. \_\_\_\_\_

4. \_\_\_\_\_

5. \_\_\_\_\_

6. \_\_\_\_\_

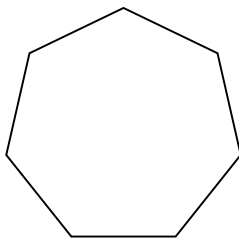
7. \_\_\_\_\_

8. \_\_\_\_\_

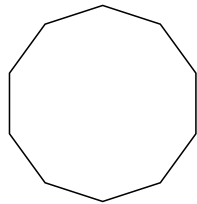


Определите тип данных фигур.

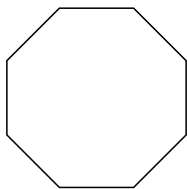
1)



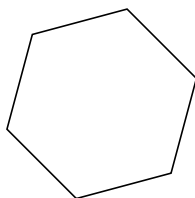
2)



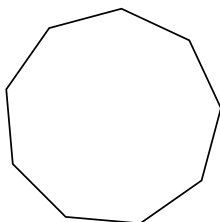
3)



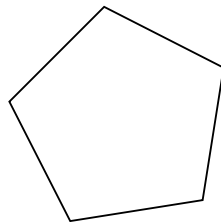
4)



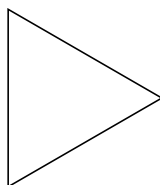
5)



6)



7)



8)



**ОТВЕТЫ**

1. семиугольник

2. десятиугольник

3. восьмиугольник

4. шестиугольник

5. девятиугольник

6. пятиугольник

7. треугольник

8. четырёхугольник