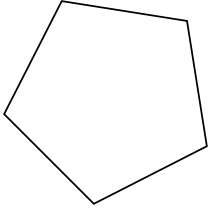





Определите тип данных фигур.

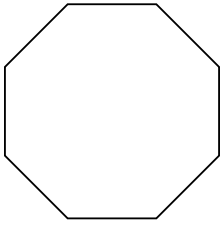
1)



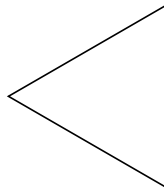
2)



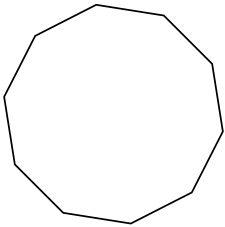
3)



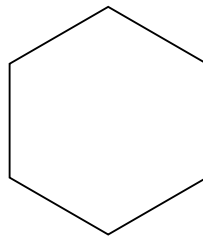
4)



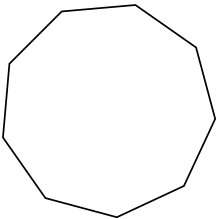
5)



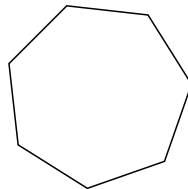
6)



7)



8)



**ОТВЕТЫ**

1. \_\_\_\_\_

2. \_\_\_\_\_

3. \_\_\_\_\_

4. \_\_\_\_\_

5. \_\_\_\_\_

6. \_\_\_\_\_

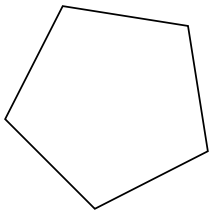
7. \_\_\_\_\_

8. \_\_\_\_\_

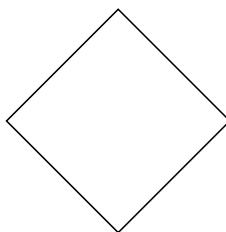


Определите тип данных фигур.

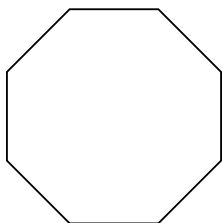
1)



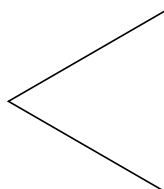
2)



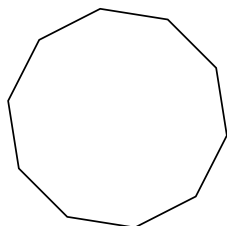
3)



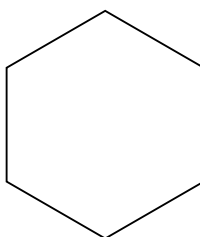
4)



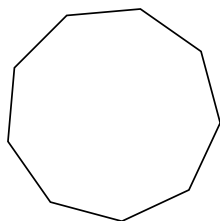
5)



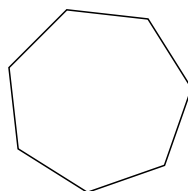
6)



7)



8)



ОТВЕТЫ

1. пятиугольник

2. четырёхугольник

3. восьмиугольник

4. треугольник

5. десятиугольник

6. шестиугольник

7. девятиугольник

8. семиугольник