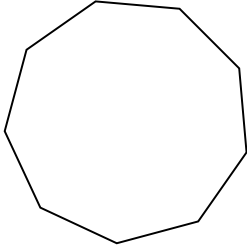


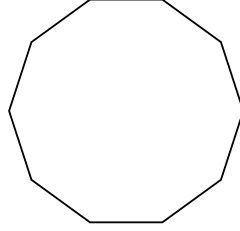


Определите тип данных фигур.


1)



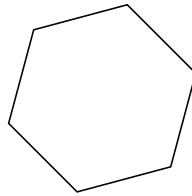
2)



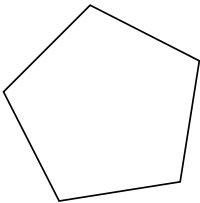
3)



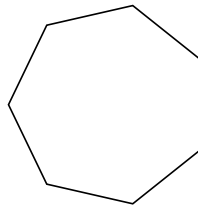
4)



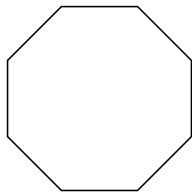
5)




6)



7)



8)



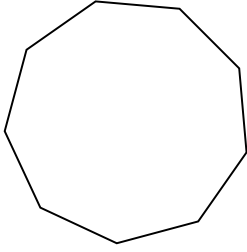
ОТВЕТЫ

- 1. _____
- 2. _____
- 3. _____
- 4. _____
- 5. _____
- 6. _____
- 7. _____
- 8. _____

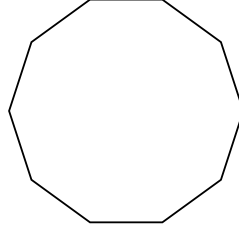


Определите тип данных фигур.


1)



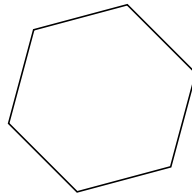
2)



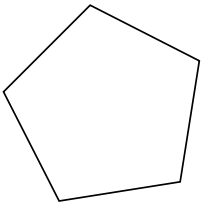
3)



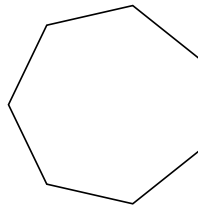
4)



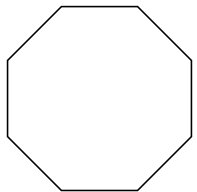
5)




6)



7)



8)



ОТВЕТЫ

1. девятиугольник
2. десятиугольник
3. треугольник
4. шестиугольник
5. пятиугольник
6. семиугольник
7. восьмиугольник
8. четырёхугольник