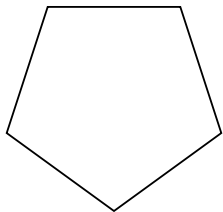


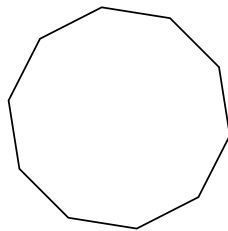


Определите тип данных фигур.

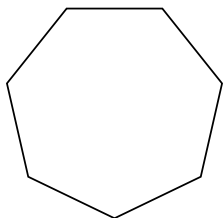
1)



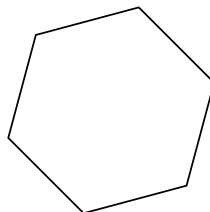
2)




3)



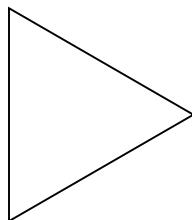
4)



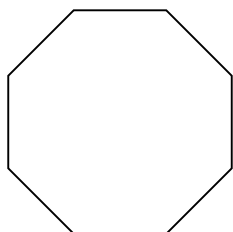
5)



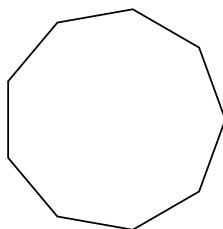
6)



7)



8)



ОТВЕТЫ

1. _____

2. _____

3. _____

4. _____

5. _____

6. _____

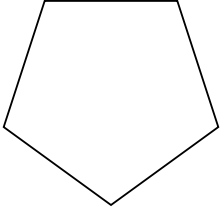
7. _____

8. _____

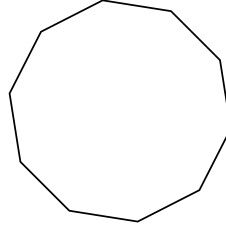


Определите тип данных фигур.

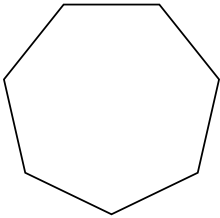
1)



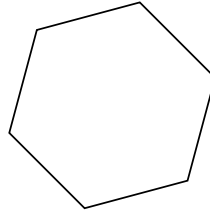
2)




3)



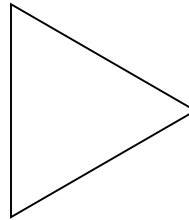
4)



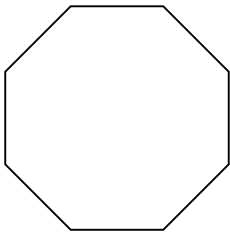
5)



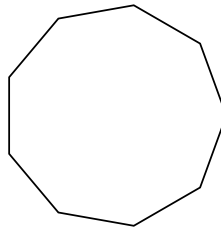
6)



7)



8)



ОТВЕТЫ

1. пятиугольник

2. десятиугольник

3. семиугольник

4. шестиугольник

5. четырёхугольник

6. треугольник

7. восьмиугольник

8. девятиугольник