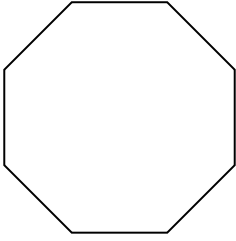


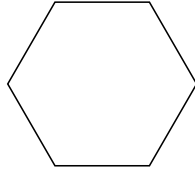


Определите тип данных фигур.


1)



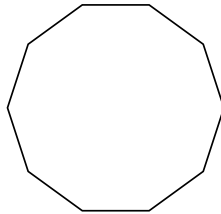
2)



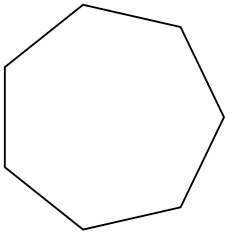
3)



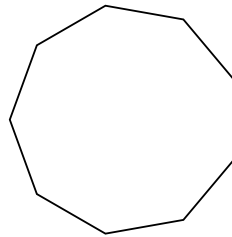
4)



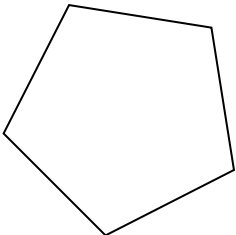
5)



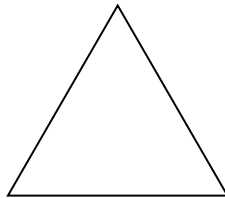
6)



7)



8)



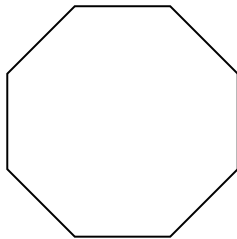
**ОТВЕТЫ**

- 1. \_\_\_\_\_
- 2. \_\_\_\_\_
- 3. \_\_\_\_\_
- 4. \_\_\_\_\_
- 5. \_\_\_\_\_
- 6. \_\_\_\_\_
- 7. \_\_\_\_\_
- 8. \_\_\_\_\_

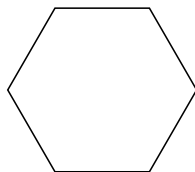


Определите тип данных фигур.

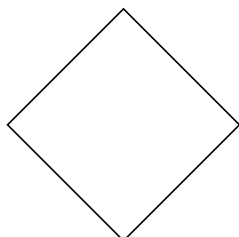
1)



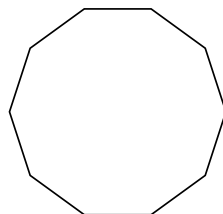
2)



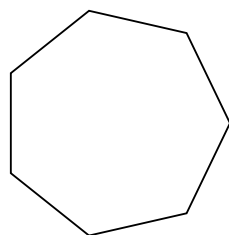
3)



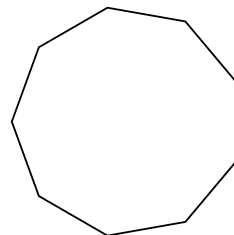
4)



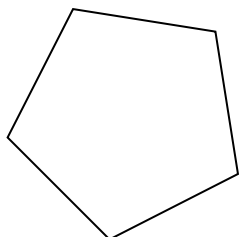
5)



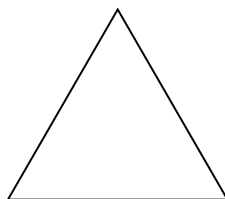
6)



7)



8)



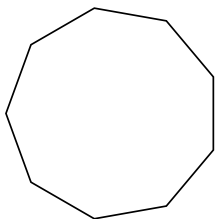
**ОТВЕТЫ**

1. восьмиугольник
2. шестиугольник
3. четырёхугольник
4. десятиугольник
5. семиугольник
6. девятиугольник
7. пятиугольник
8. треугольник

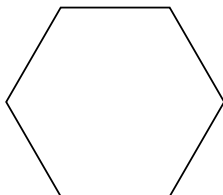


Определите тип данных фигур.

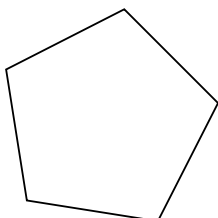
1)



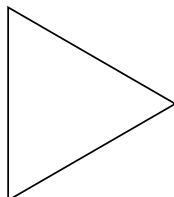
2)



3)



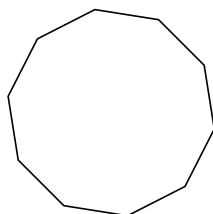
4)



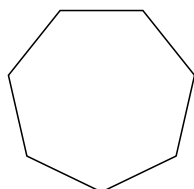
5)



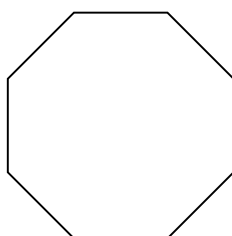
6)



7)



8)



**ОТВЕТЫ**

1. \_\_\_\_\_

2. \_\_\_\_\_

3. \_\_\_\_\_

4. \_\_\_\_\_

5. \_\_\_\_\_

6. \_\_\_\_\_

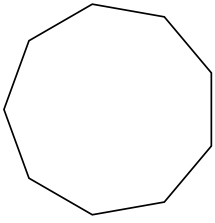
7. \_\_\_\_\_

8. \_\_\_\_\_

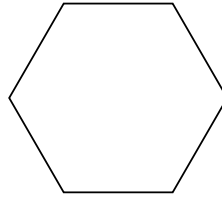


Определите тип данных фигур.

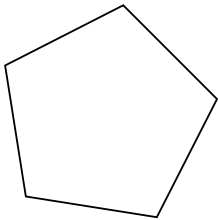
1)



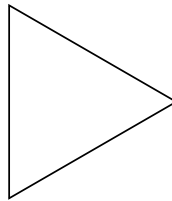
2)




3)



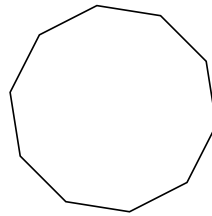
4)



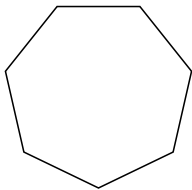
5)



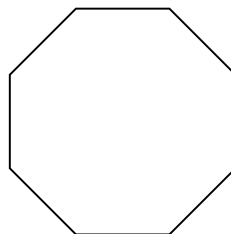
6)



7)



8)



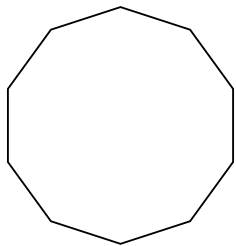
ОТВЕТЫ

1. девятиугольник
2. шестиугольник
3. пятиугольник
4. треугольник
5. четырёхугольник
6. десятиугольник
7. семиугольник
8. восьмиугольник

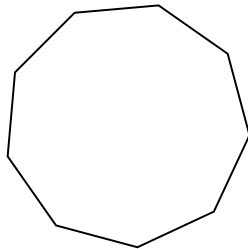


Определите тип данных фигур.

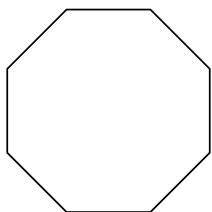
1)



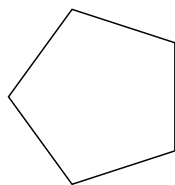
2)



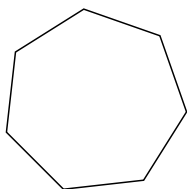
3)



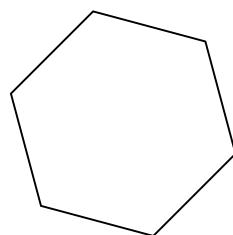
4)




5)




6)



7)



8)



**ОТВЕТЫ**

1. \_\_\_\_\_

2. \_\_\_\_\_

3. \_\_\_\_\_

4. \_\_\_\_\_

5. \_\_\_\_\_

6. \_\_\_\_\_

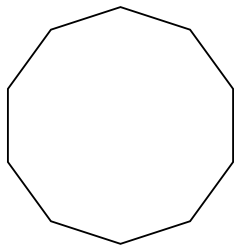
7. \_\_\_\_\_

8. \_\_\_\_\_

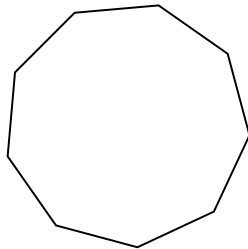


Определите тип данных фигур.

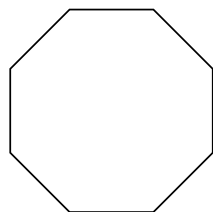
1)



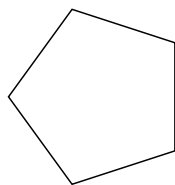
2)



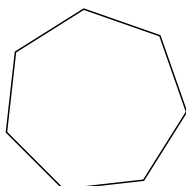
3)



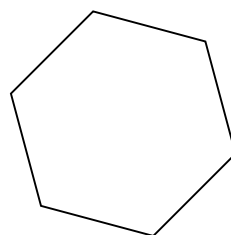
4)




5)




6)



7)



8)



ОТВЕТЫ

1. десятиугольник

2. девятиугольник

3. восьмиугольник

4. пятиугольник

5. семиугольник

6. шестиугольник

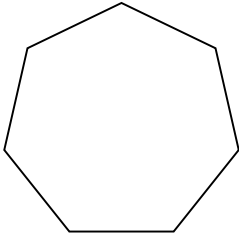
7. треугольник

8. четырёхугольник

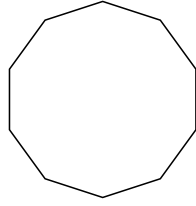


Определите тип данных фигур.

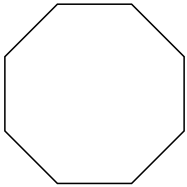
1)



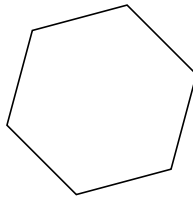
2)



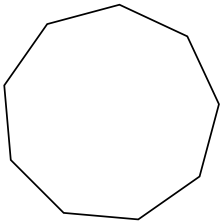
3)



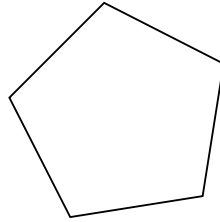
4)



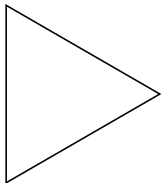
5)




6)



7)



8)



ОТВЕТЫ

1. \_\_\_\_\_

2. \_\_\_\_\_

3. \_\_\_\_\_

4. \_\_\_\_\_

5. \_\_\_\_\_

6. \_\_\_\_\_

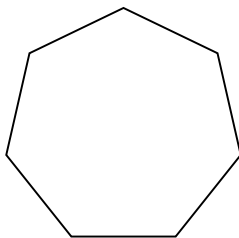
7. \_\_\_\_\_

8. \_\_\_\_\_

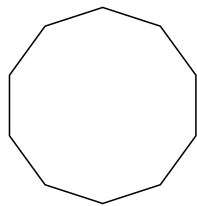


Определите тип данных фигур.

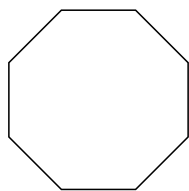
1)



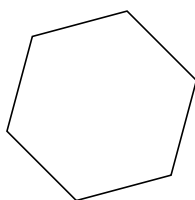
2)



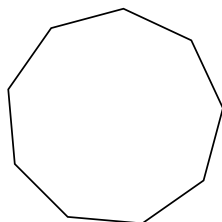
3)



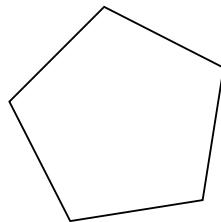
4)



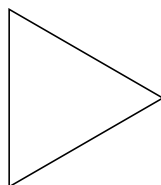
5)




6)



7)



8)



**ОТВЕТЫ**

1. семиугольник

2. десятиугольник

3. восьмиугольник

4. шестиугольник

5. девятиугольник

6. пятиугольник

7. треугольник

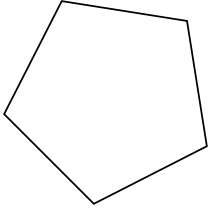
8. четырёхугольник






Определите тип данных фигур.

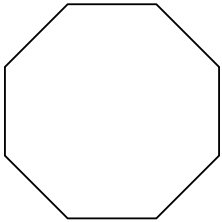
1)



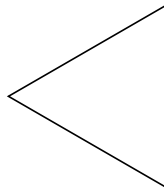
2)



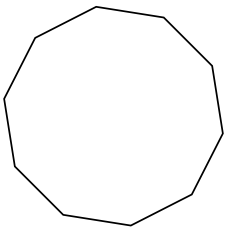
3)



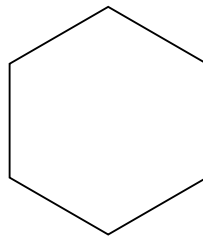
4)



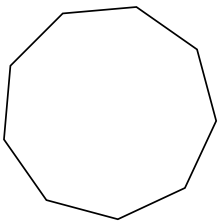
5)



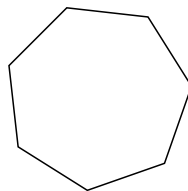
6)



7)



8)



**ОТВЕТЫ**

1. \_\_\_\_\_

2. \_\_\_\_\_

3. \_\_\_\_\_

4. \_\_\_\_\_

5. \_\_\_\_\_

6. \_\_\_\_\_

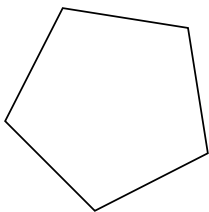
7. \_\_\_\_\_

8. \_\_\_\_\_

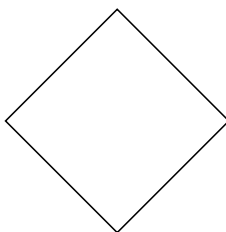


Определите тип данных фигур.

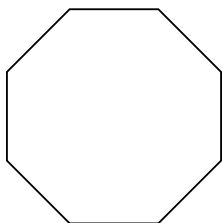
1)



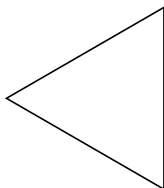
2)



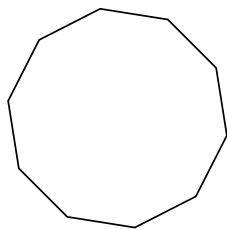
3)



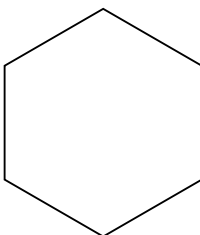
4)



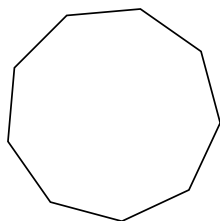
5)



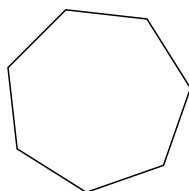
6)



7)



8)



**ОТВЕТЫ**

1. пятиугольник

2. четырёхугольник

3. восьмиугольник

4. треугольник

5. десятиугольник

6. шестиугольник

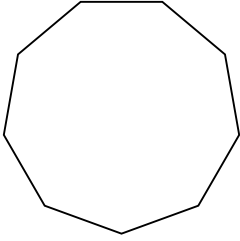
7. девятиугольник

8. семиугольник

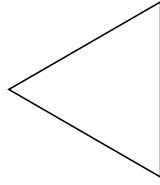


Определите тип данных фигур.

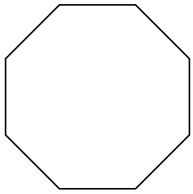
1)



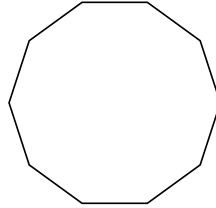
2)




3)



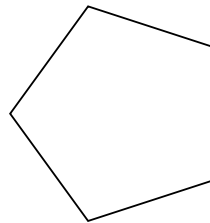
4)



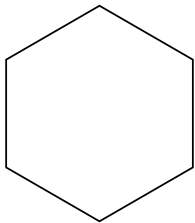
5)



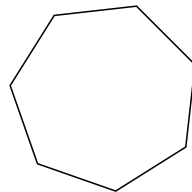
6)



7)



8)



**ОТВЕТЫ**

1. \_\_\_\_\_

2. \_\_\_\_\_

3. \_\_\_\_\_

4. \_\_\_\_\_

5. \_\_\_\_\_

6. \_\_\_\_\_

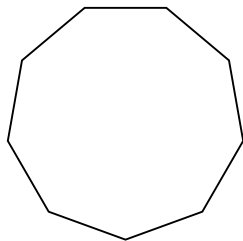
7. \_\_\_\_\_

8. \_\_\_\_\_

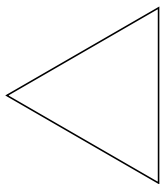


Определите тип данных фигур.

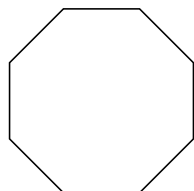
1)



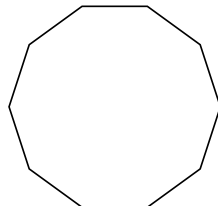
2)




3)



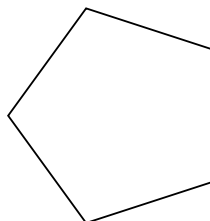
4)



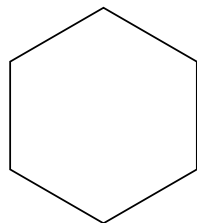
5)



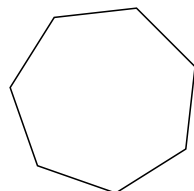
6)



7)



8)



**ОТВЕТЫ**

1. девятиугольник

2. треугольник

3. восьмиугольник

4. десятиугольник

5. четырёхугольник

6. пятиугольник

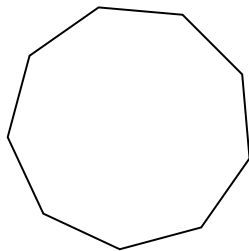
7. шестиугольник

8. семиугольник

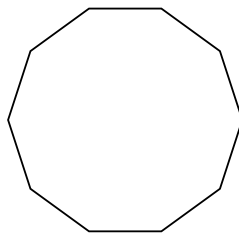


Определите тип данных фигур.

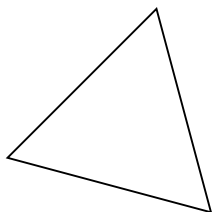
1)



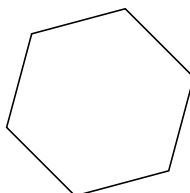
2)



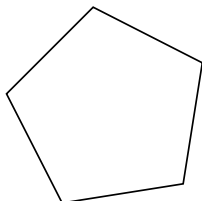
3)



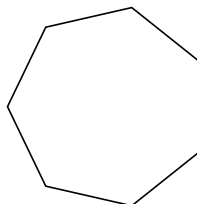
4)



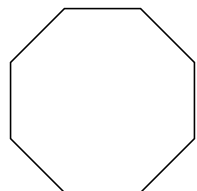
5)



6)



7)



8)



**ОТВЕТЫ**

1. \_\_\_\_\_

2. \_\_\_\_\_

3. \_\_\_\_\_

4. \_\_\_\_\_

5. \_\_\_\_\_

6. \_\_\_\_\_

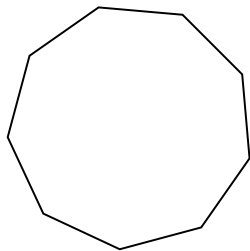
7. \_\_\_\_\_

8. \_\_\_\_\_

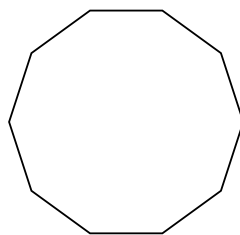


Определите тип данных фигур.

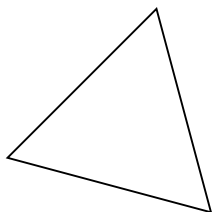
1)



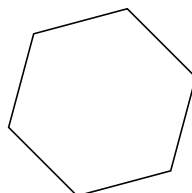
2)



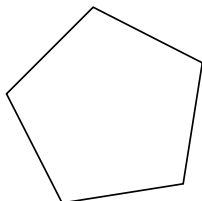
3)



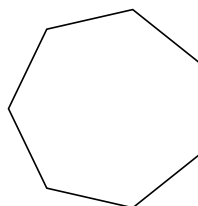
4)



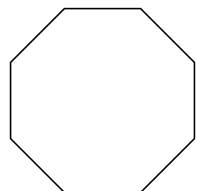
5)




6)



7)



8)



**ОТВЕТЫ**

1. девятиугольник

2. десятиугольник

3. треугольник

4. шестиугольник

5. пятиугольник

6. семиугольник

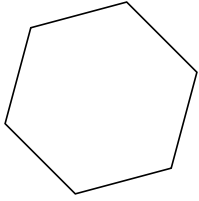
7. восьмиугольник

8. четырёхугольник

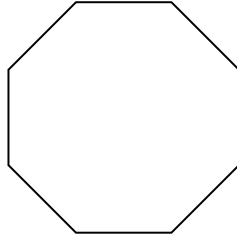


Определите тип данных фигур.

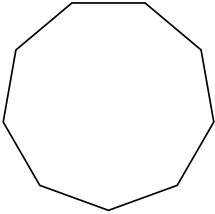
1)



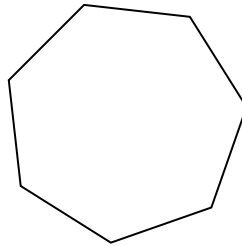
2)




3)



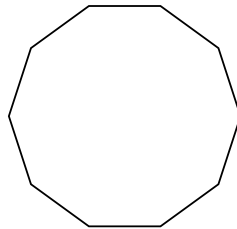
4)



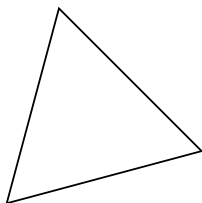
5)



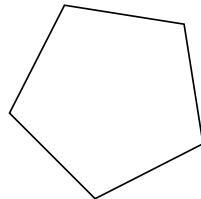
6)



7)



8)



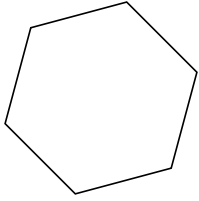
**ОТВЕТЫ**

- 1. \_\_\_\_\_
- 2. \_\_\_\_\_
- 3. \_\_\_\_\_
- 4. \_\_\_\_\_
- 5. \_\_\_\_\_
- 6. \_\_\_\_\_
- 7. \_\_\_\_\_
- 8. \_\_\_\_\_

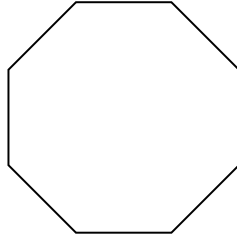


Определите тип данных фигур.

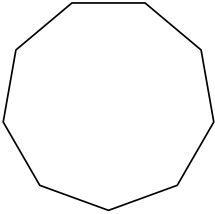
1)



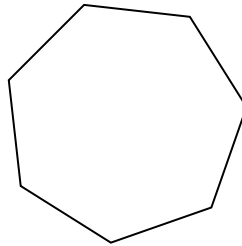
2)




3)



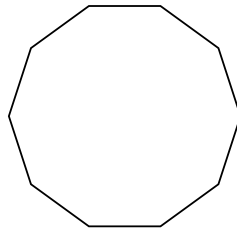
4)



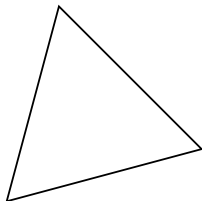
5)



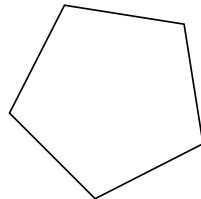
6)



7)



8)



**ОТВЕТЫ**

1. шестиугольник

2. восьмиугольник

3. девятиугольник

4. семиугольник

5. четырёхугольник

6. десятиугольник

7. треугольник

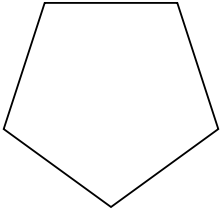
8. пятиугольник



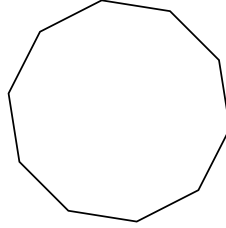


Определите тип данных фигур.

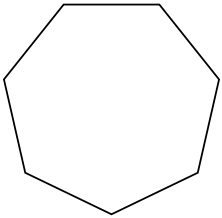
1)



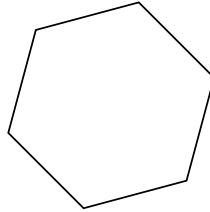
2)




3)



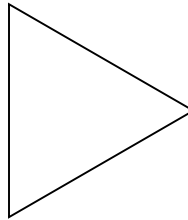
4)



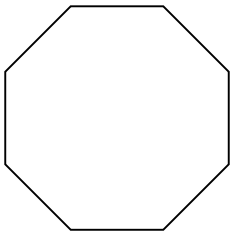
5)



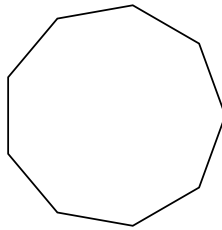
6)



7)



8)



**ОТВЕТЫ**

1. \_\_\_\_\_

2. \_\_\_\_\_

3. \_\_\_\_\_

4. \_\_\_\_\_

5. \_\_\_\_\_

6. \_\_\_\_\_

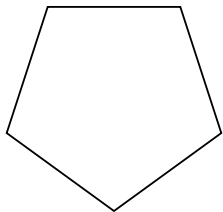
7. \_\_\_\_\_

8. \_\_\_\_\_

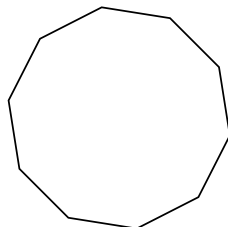


Определите тип данных фигур.

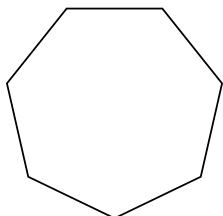
1)



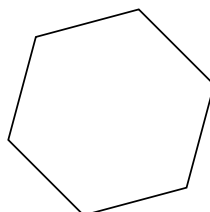
2)




3)



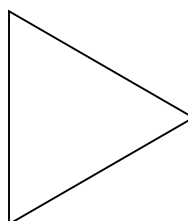
4)



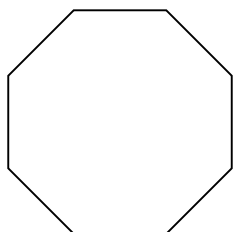
5)



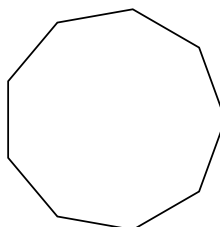
6)



7)



8)



**ОТВЕТЫ**

1. пятиугольник

2. десятиугольник

3. семиугольник

4. шестиугольник

5. четырёхугольник

6. треугольник

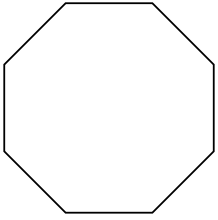
7. восьмиугольник

8. девятиугольник

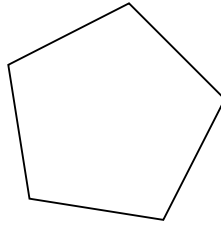


Определите тип данных фигур.

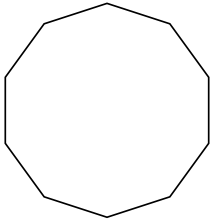
1)




2)



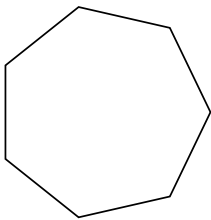
3)



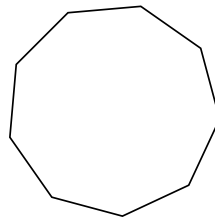
4)



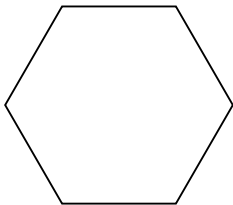
5)



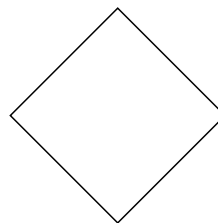
6)



7)



8)



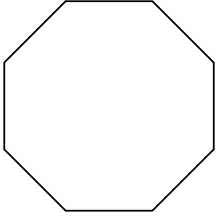
**ОТВЕТЫ**

- 1. \_\_\_\_\_
- 2. \_\_\_\_\_
- 3. \_\_\_\_\_
- 4. \_\_\_\_\_
- 5. \_\_\_\_\_
- 6. \_\_\_\_\_
- 7. \_\_\_\_\_
- 8. \_\_\_\_\_

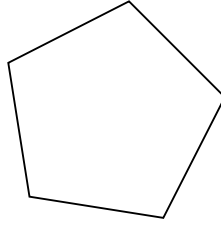


Определите тип данных фигур.

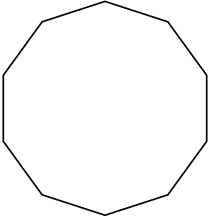
1)




2)



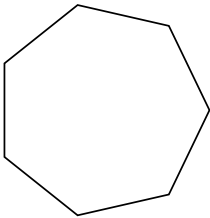
3)



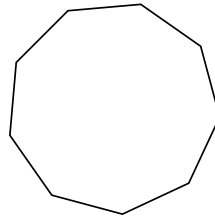
4)



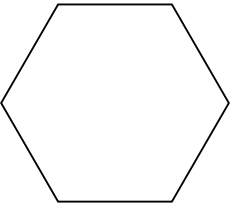
5)



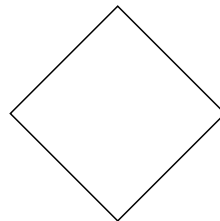
6)



7)



8)



**ОТВЕТЫ**

1. восьмиугольник
2. пятиугольник
3. десятиугольник
4. треугольник
5. семиугольник
6. девятиугольник
7. шестиугольник
8. четырёхугольник