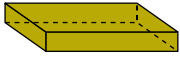




Определите, каая буква НАИЛУЧШИМ ОБРАЗОМ описывает данную фигуру.

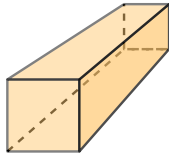
**ОТВЕТЫ**

1)



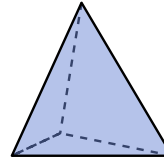
- A. cube
- B. cylinder
- C. triangular prism
- D. rectangular prism

2)



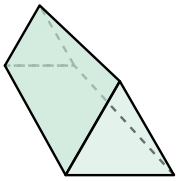
- A. cone
- B. cube
- C. rectangular prism
- D. triangular prism

3)



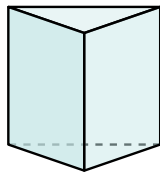
- A. cone
- B. rectangular pyramid
- C. cylinder
- D. triangular pyramid

4)



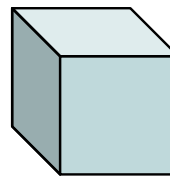
- A. rectangular pyramid
- B. rectangular prism
- C. triangular prism
- D. cube

5)



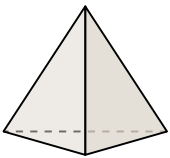
- A. rectangular prism
- B. cube
- C. cone
- D. triangular prism

6)




- A. rectangular pyramid
- B. cone
- C. cylinder
- D. cube

7)



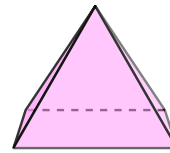
- A. triangular pyramid
- B. cone
- C. rectangular prism
- D. cylinder

8)



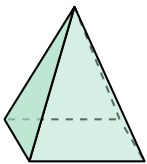
- A. sphere
- B. cylinder
- C. rectangular pyramid
- D. cube

9)



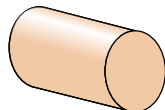
- A. triangular prism
- B. cylinder
- C. rectangular pyramid
- D. cube

10)




- A. rectangular pyramid
- B. rectangular prism
- C. triangular prism
- D. sphere

11)



- A. triangular pyramid
- B. sphere
- C. cylinder
- D. cube

12)



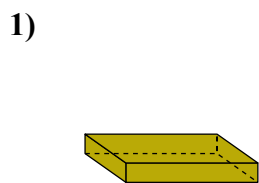
- A. rectangular pyramid
- B. triangular prism
- C. cube
- D. cylinder

- 1. \_\_\_\_\_
- 2. \_\_\_\_\_
- 3. \_\_\_\_\_
- 4. \_\_\_\_\_
- 5. \_\_\_\_\_
- 6. \_\_\_\_\_
- 7. \_\_\_\_\_
- 8. \_\_\_\_\_
- 9. \_\_\_\_\_
- 10. \_\_\_\_\_
- 11. \_\_\_\_\_
- 12. \_\_\_\_\_

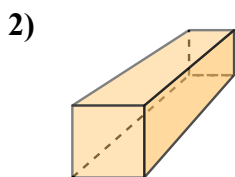


Определите, каая буква НАИЛУЧШИМ ОБРАЗОМ описывает данную фигуру.

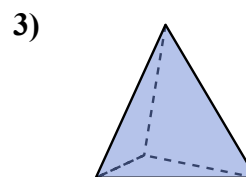
**ОТВЕТЫ**



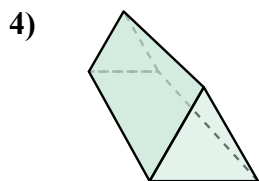
- A. cube
- B. cylinder
- C. triangular prism
- D. rectangular prism



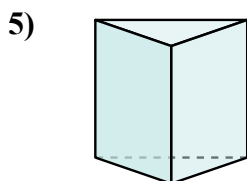
- A. cone
- B. cube
- C. rectangular prism
- D. triangular prism



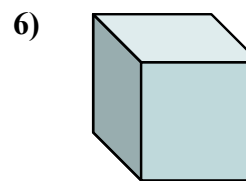
- A. cone
- B. rectangular pyramid
- C. cylinder
- D. triangular pyramid



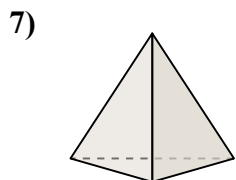
- A. rectangular pyramid
- B. rectangular prism
- C. triangular prism
- D. cube



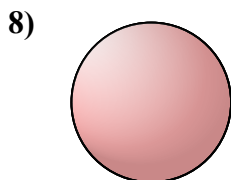
- A. rectangular prism
- B. cube
- C. cone
- D. triangular prism



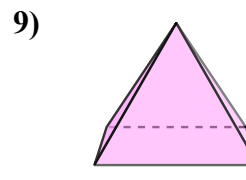
- A. rectangular pyramid
- B. cone
- C. cylinder
- D. cube



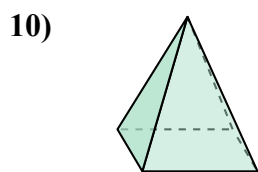
- A. triangular pyramid
- B. cone
- C. rectangular prism
- D. cylinder



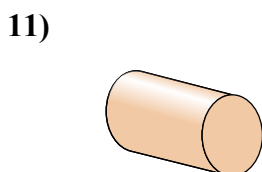
- A. sphere
- B. cylinder
- C. rectangular pyramid
- D. cube



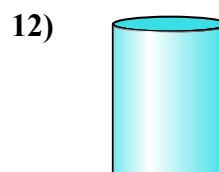
- A. triangular prism
- B. cylinder
- C. rectangular pyramid
- D. cube



- A. rectangular pyramid
- B. rectangular prism
- C. triangular prism
- D. sphere



- A. triangular pyramid
- B. sphere
- C. cylinder
- D. cube



- A. rectangular pyramid
- B. triangular prism
- C. cube
- D. cylinder

- 1.   **D**
- 2.   **C**
- 3.   **D**
- 4.   **C**
- 5.   **D**
- 6.   **D**
- 7.   **A**
- 8.   **A**
- 9.   **C**
- 10.   **A**
- 11.   **C**
- 12.   **D**