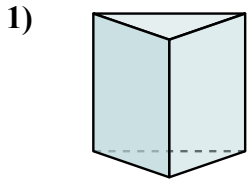





Определите, каая буква **НАИЛУЧШИМ ОБРАЗОМ** описывает данную фигуру.

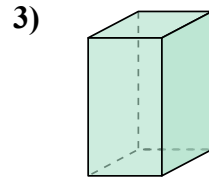
ОТВЕТЫ



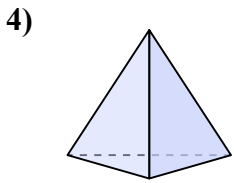
- A. rectangular pyramid
- B. triangular prism
- C. sphere
- D. cone



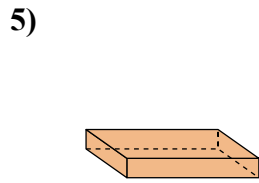
- A. rectangular prism
- B. triangular prism
- C. rectangular pyramid
- D. sphere



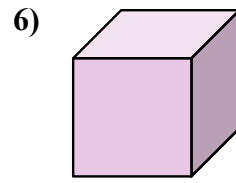
- A. cylinder
- B. rectangular prism
- C. triangular prism
- D. cone



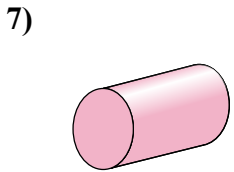
- A. cone
- B. cube
- C. rectangular prism
- D. triangular pyramid



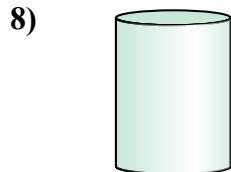
- A. rectangular prism
- B. sphere
- C. triangular pyramid
- D. rectangular pyramid



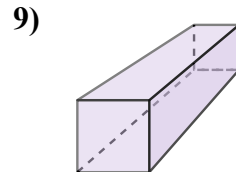
- A. cube
- B. cone
- C. rectangular prism
- D. triangular pyramid



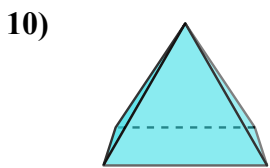
- A. triangular pyramid
- B. cylinder
- C. triangular prism
- D. sphere



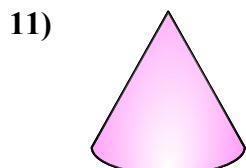
- A. triangular prism
- B. cylinder
- C. triangular pyramid
- D. rectangular prism



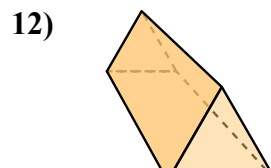
- A. rectangular pyramid
- B. sphere
- C. cylinder
- D. rectangular prism



- A. rectangular pyramid
- B. sphere
- C. triangular prism
- D. triangular pyramid



- A. rectangular prism
- B. sphere
- C. triangular prism
- D. cone



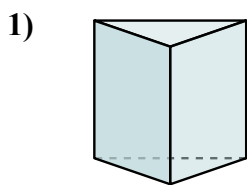
- A. cube
- B. cylinder
- C. cone
- D. triangular prism

- 1. _____
- 2. _____
- 3. _____
- 4. _____
- 5. _____
- 6. _____
- 7. _____
- 8. _____
- 9. _____
- 10. _____
- 11. _____
- 12. _____

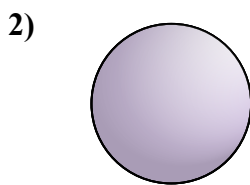


Определите, каая буква НАИЛУЧШИМ ОБРАЗОМ описывает данную фигуру.

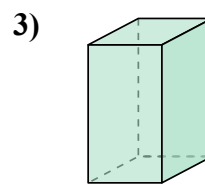
ОТВЕТЫ



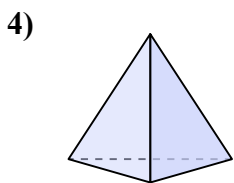
- A. rectangular pyramid
- B. triangular prism
- C. sphere
- D. cone



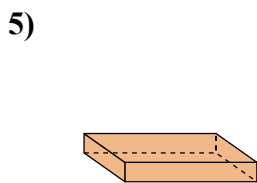
- A. rectangular prism
- B. triangular prism
- C. rectangular pyramid
- D. sphere



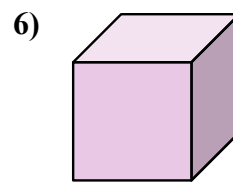
- A. cylinder
- B. rectangular prism
- C. triangular prism
- D. cone



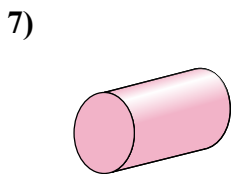
- A. cone
- B. cube
- C. rectangular prism
- D. triangular pyramid




- A. rectangular prism
- B. sphere
- C. triangular pyramid
- D. rectangular pyramid



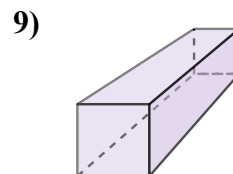
- A. cube
- B. cone
- C. rectangular prism
- D. triangular pyramid



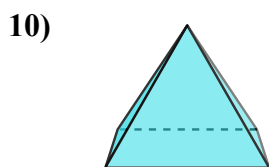
- A. triangular pyramid
- B. cylinder
- C. triangular prism
- D. sphere



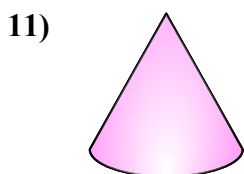
- A. triangular prism
- B. cylinder
- C. triangular pyramid
- D. rectangular prism



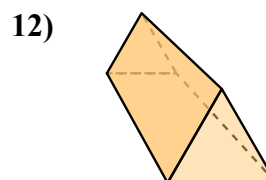
- A. rectangular pyramid
- B. sphere
- C. cylinder
- D. rectangular prism



- A. rectangular pyramid
- B. sphere
- C. triangular prism
- D. triangular pyramid



- A. rectangular prism
- B. sphere
- C. triangular prism
- D. cone



- A. cube
- B. cylinder
- C. cone
- D. triangular prism

1. **B**

2. **D**

3. **B**

4. **D**

5. **A**

6. **A**

7. **B**

8. **B**

9. **D**

10. **A**

11. **D**

12. **D**