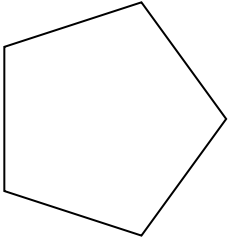




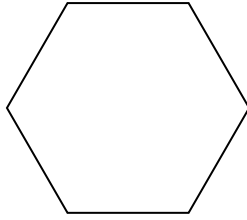
Определите, правильная или неправильная перед нами фигура.

ОТВЕТЫ

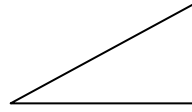
1)



2)

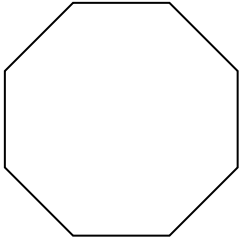


3)

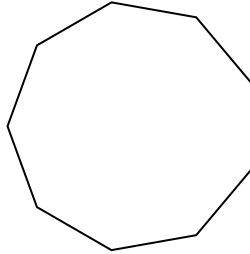


1. \_\_\_\_\_

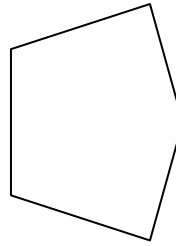
4)



5)

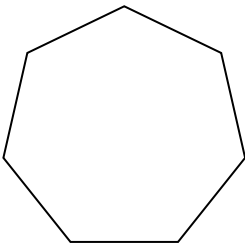


6)

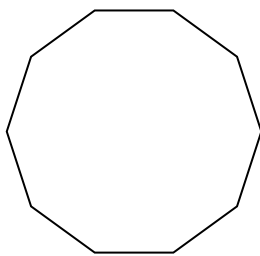


2. \_\_\_\_\_

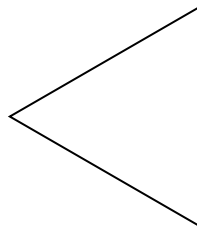
7)



8)




9)




3. \_\_\_\_\_

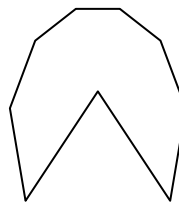
10)



11)




12)




4. \_\_\_\_\_

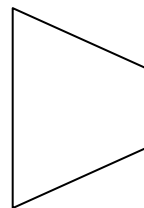
13)



14)



15)



5. \_\_\_\_\_

6. \_\_\_\_\_

7. \_\_\_\_\_

8. \_\_\_\_\_

9. \_\_\_\_\_

10. \_\_\_\_\_

11. \_\_\_\_\_

12. \_\_\_\_\_

13. \_\_\_\_\_

14. \_\_\_\_\_

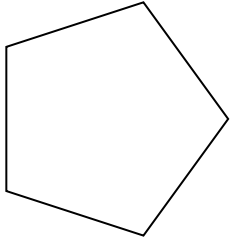
15. \_\_\_\_\_



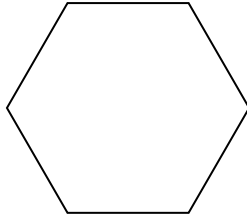
Определите, правильная или неправильная перед нами фигура.

**ОТВЕТЫ**

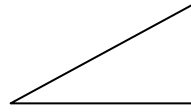
1)



2)

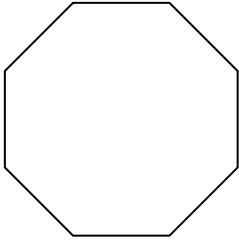


3)

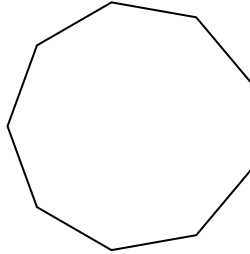


1. Правильная фигура

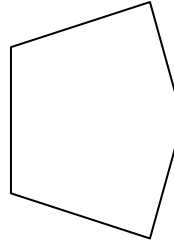
4)



5)



6)



2. Правильная фигура

3. Неправильная фигура

4. Правильная фигура

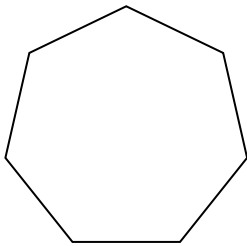
5. Правильная фигура

6. Неправильная фигура

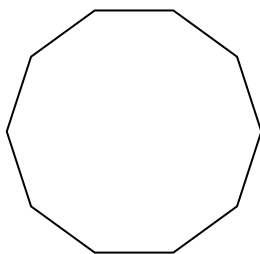
7. Правильная фигура

8. Правильная фигура

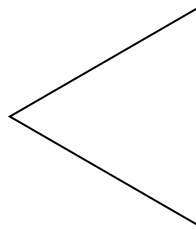
7)



8)



9)




9. Правильная фигура


10. Неправильная фигура

11. Правильная фигура

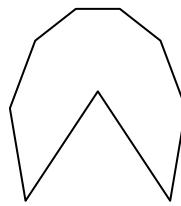
10)



11)



12)




12. Неправильная фигура


13. Неправильная фигура

14. Неправильная фигура

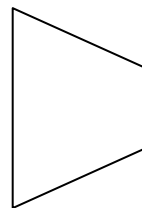
13)



14)



15)



15. Неправильная фигура