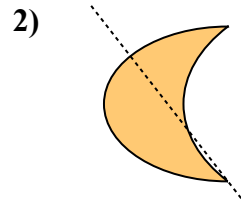
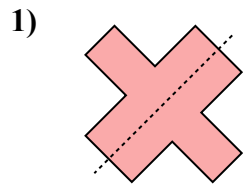
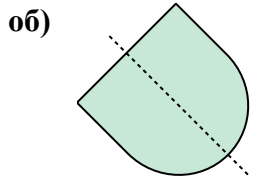




Определите, является ли данная линия линией симметрии.

ОТВЕТЫ



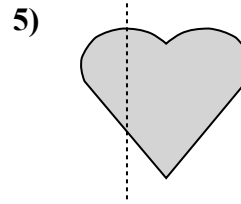
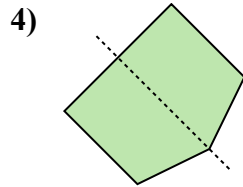
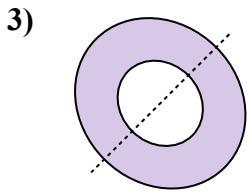
об. да

1. _____

2. _____

3. _____

4. _____

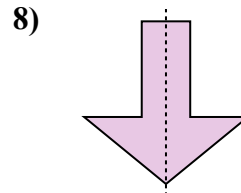
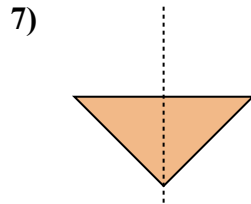
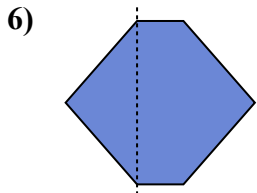


5. _____

6. _____

7. _____

8. _____



9. _____

10. _____

11. _____

