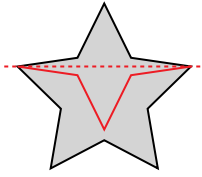


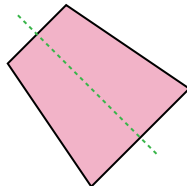


Определите, является ли данная линия линией симметрии.

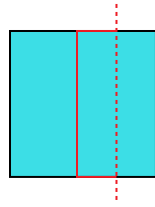
об)



1)



2)



об. **по**

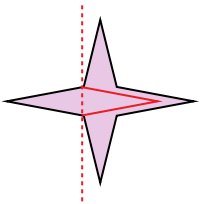
1. **да**

2. **по**

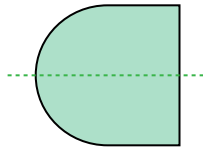
3. **по**

4. **да**

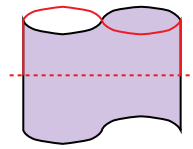
3)



4)



5)



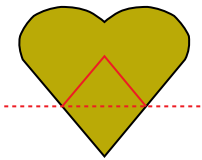
5. **по**

6. **по**

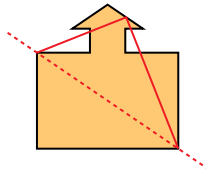
7. **по**

8. **да**

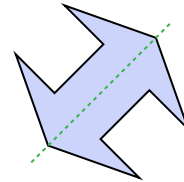
6)



7)



8)

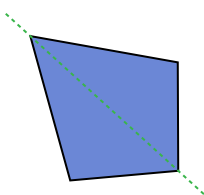


9. **да**

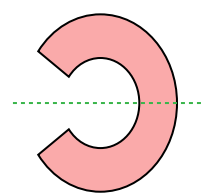
10. **да**

11. **да**

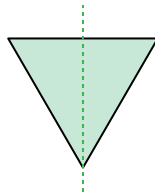
9)



10)



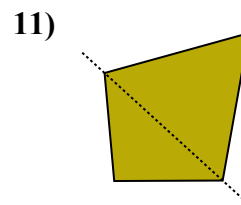
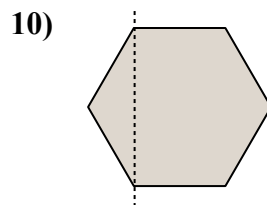
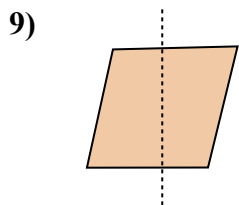
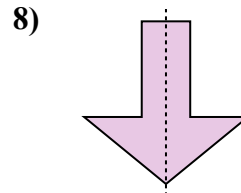
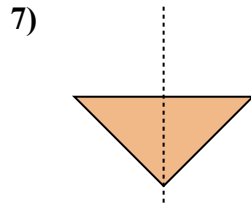
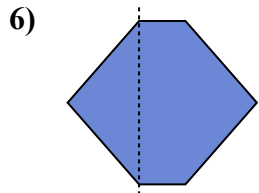
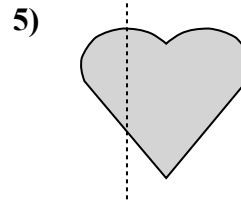
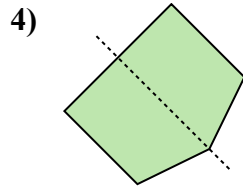
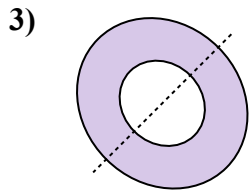
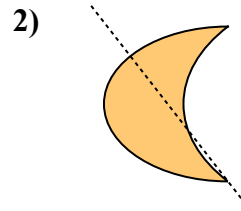
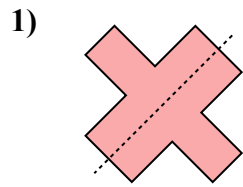
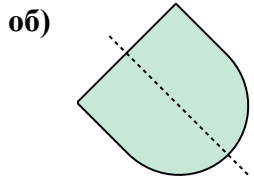
11)





Определите, является ли данная линия линией симметрии.

ОТВЕТЫ



об. да

1. _____

2. _____

3. _____

4. _____

5. _____

6. _____

7. _____

8. _____

9. _____

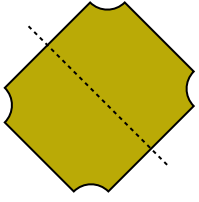
10. _____

11. _____

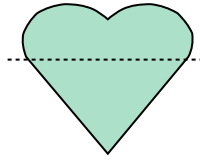


Определите, является ли данная линия линией симметрии.

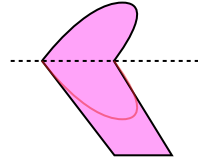
об)



1)



2)



ОТВЕТЫ

об. да

1. _____

2. _____

3. _____

4. _____

5. _____

6. _____

7. _____

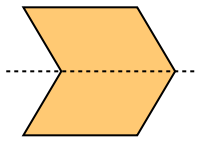
8. _____

9. _____


10. _____

11. _____

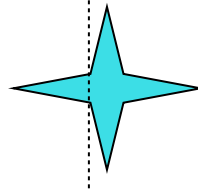
3)



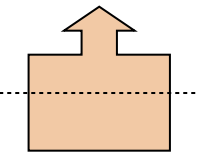
4)



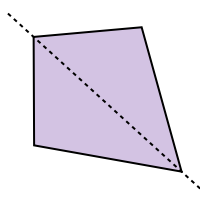
5)



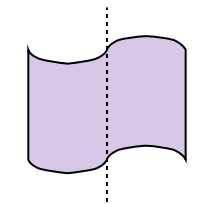
6)



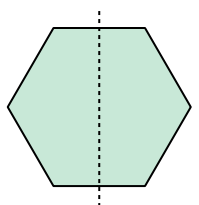
7)



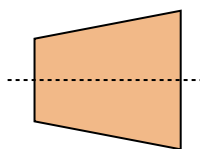
8)



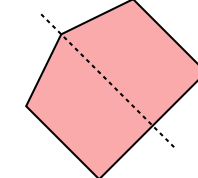
9)



10)



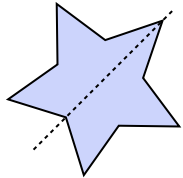
11)



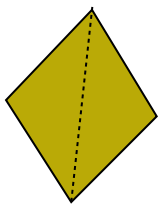


Определите, является ли данная линия линией симметрии.

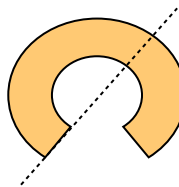
об)



1)



2)



Ответы

об. да

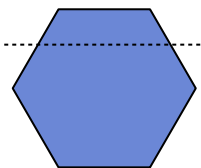
1. _____

2. _____

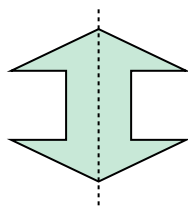
3. _____

4. _____

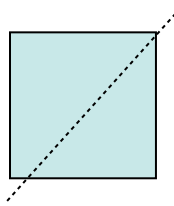
3)



4)



5)



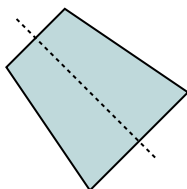
5. _____

6. _____

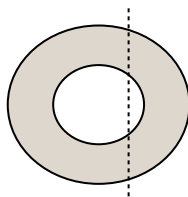
7. _____

8. _____

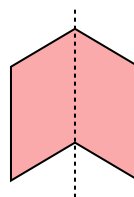
6)



7)



8)

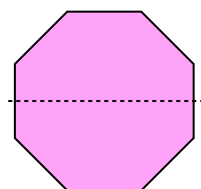


9. _____

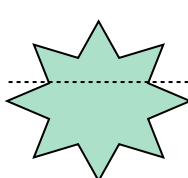
10. _____

11. _____

9)



10)



11)

