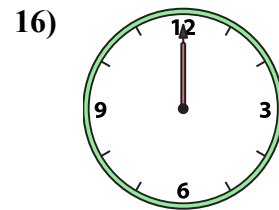
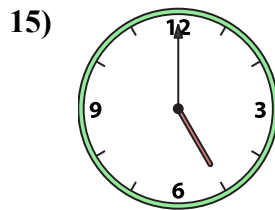
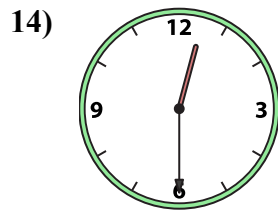
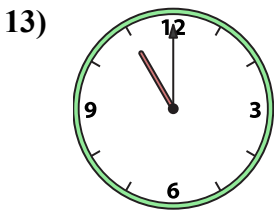
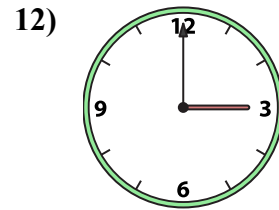
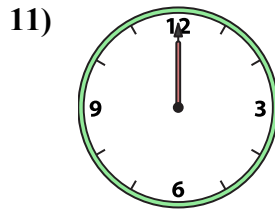
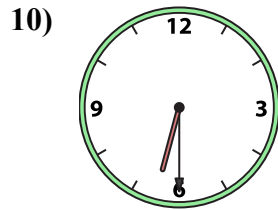
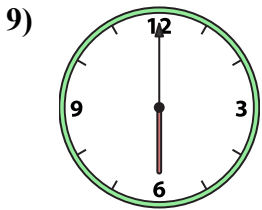
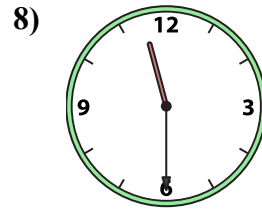
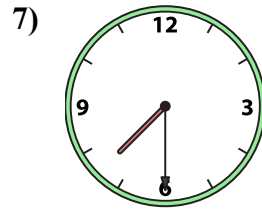
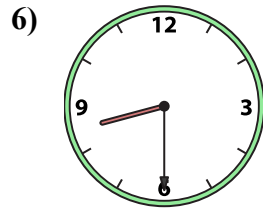
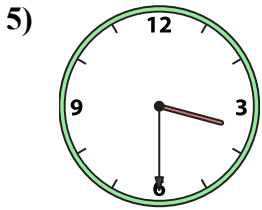
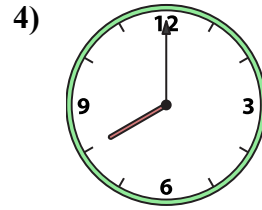
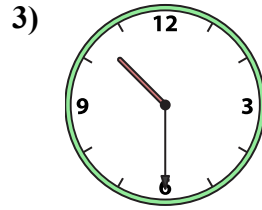
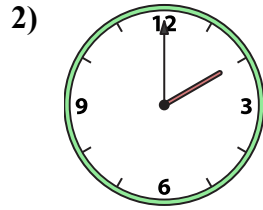
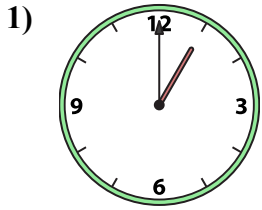




Подберите соответствующие часы к цифровым циферблатам снизу.

ОТВЕТЫ



1. _____
2. _____
3. _____
4. _____
5. _____
6. _____
7. _____
8. _____
9. _____
10. _____
11. _____
12. _____
13. _____
14. _____
15. _____
16. _____

A. 10:30

B. 2:00

C. 7:30

D. 12:30

E. 6:30

F. 1:00

G. 12:00

H. 6:00

I. 3:30

J. 3:00

K. 11:30

L. 5:00

M. 8:00

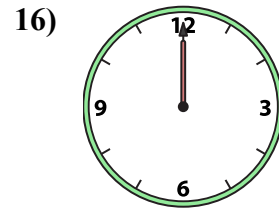
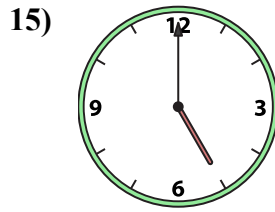
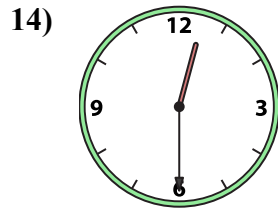
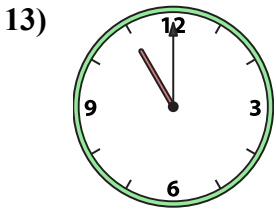
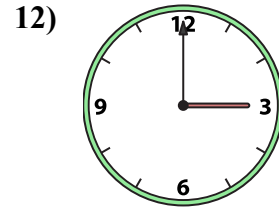
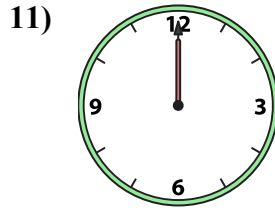
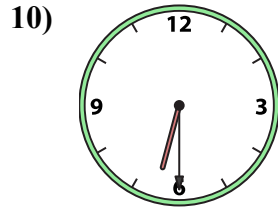
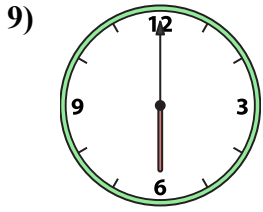
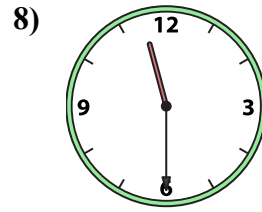
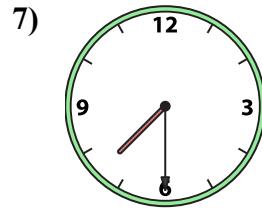
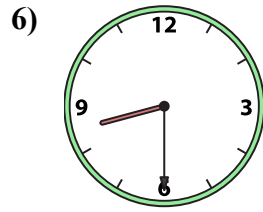
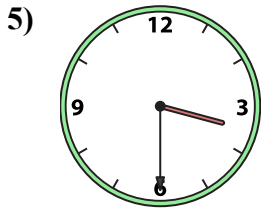
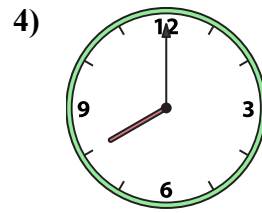
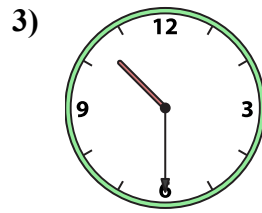
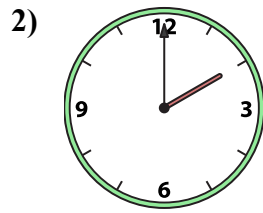
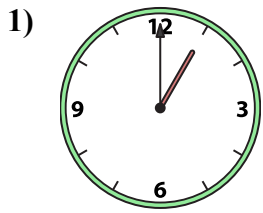
N. 12:00

O. 11:00

P. 8:30



Подберите соответствующие часы к цифровым циферблатам снизу.



A. 10:30

B. 2:00

C. 7:30

D. 12:30

E. 6:30

F. 1:00

G. 12:00

H. 6:00

I. 3:30

J. 3:00

K. 11:30

L. 5:00

M. 8:00

N. 12:00

O. 11:00

P. 8:30

ОТВЕТЫ

1. F

2. B

3. A

4. M

5. I

6. P

7. C

8. K

9. H

10. E

11. N

12. J

13. O

14. D

15. L

16. G