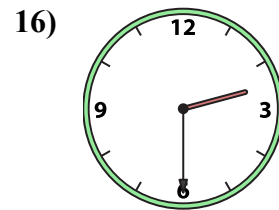
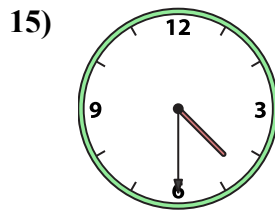
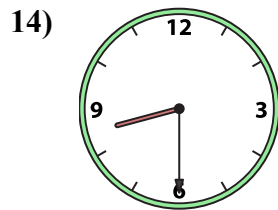
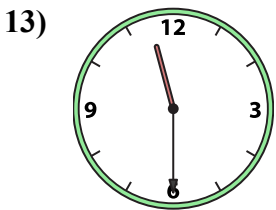
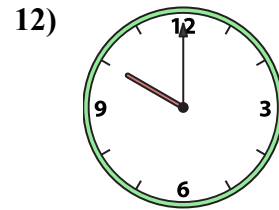
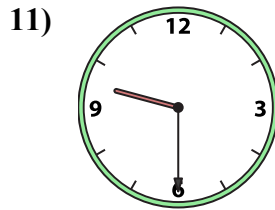
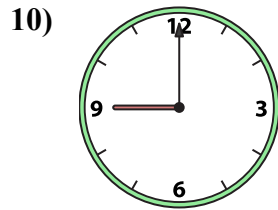
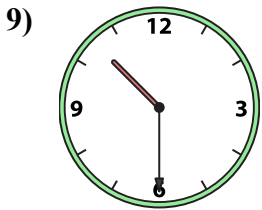
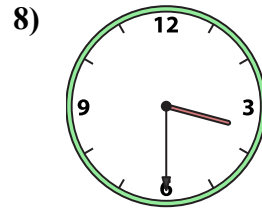
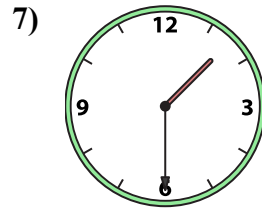
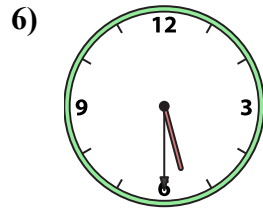
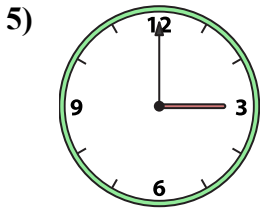
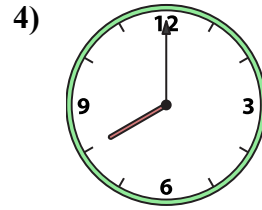
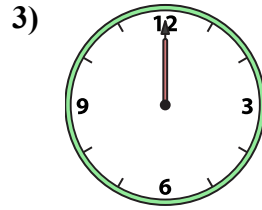
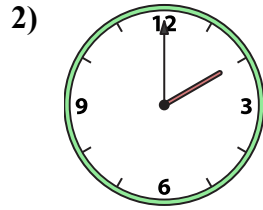
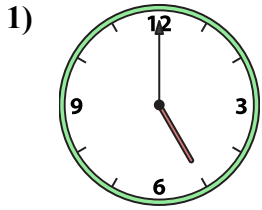




Подберите соответствующие часы к цифровым циферблатам снизу.

**ОТВЕТЫ**



A. 12:00

B. 8:00

C. 1:30

D. 3:00

E. 2:30

F. 4:30

G. 2:00

H. 10:30

I. 9:00

J. 10:00

K. 5:30

L. 9:30

M. 8:30

N. 5:00

O. 11:30

P. 3:30

1. \_\_\_\_\_

2. \_\_\_\_\_

3. \_\_\_\_\_

4. \_\_\_\_\_

5. \_\_\_\_\_

6. \_\_\_\_\_

7. \_\_\_\_\_

8. \_\_\_\_\_

9. \_\_\_\_\_

10. \_\_\_\_\_

11. \_\_\_\_\_

12. \_\_\_\_\_

13. \_\_\_\_\_

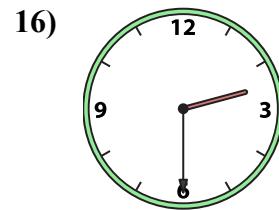
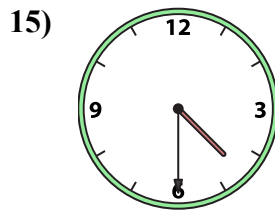
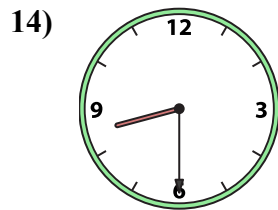
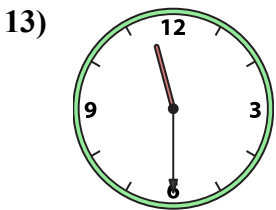
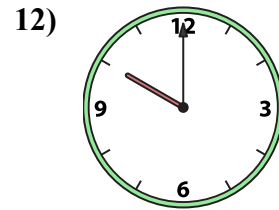
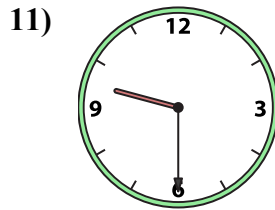
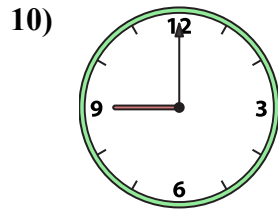
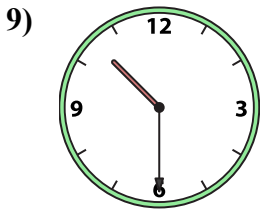
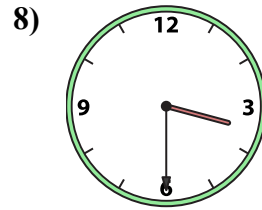
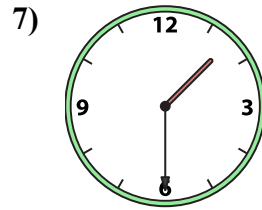
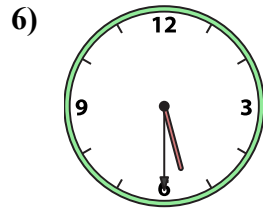
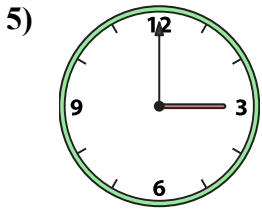
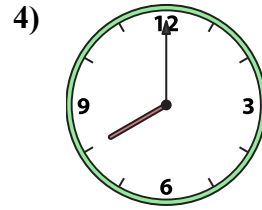
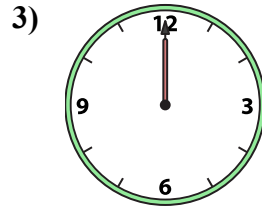
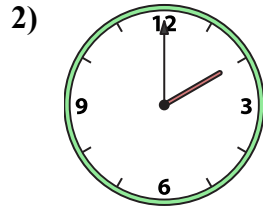
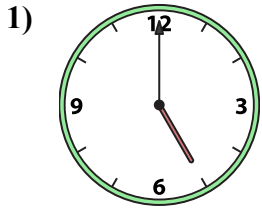
14. \_\_\_\_\_

15. \_\_\_\_\_

16. \_\_\_\_\_



Подберите соответствующие часы к цифровым циферблатам снизу.



A. 12:00

B. 8:00

C. 1:30

D. 3:00

E. 2:30

F. 4:30

G. 2:00

H. 10:30

I. 9:00

J. 10:00

K. 5:30

L. 9:30

M. 8:30

N. 5:00

O. 11:30

P. 3:30

**ОТВЕТЫ**

1. N

2. G

3. A

4. B

5. D

6. K

7. C

8. P

9. H

10. I

11. L

12. J

13. O

14. M

15. F

16. E