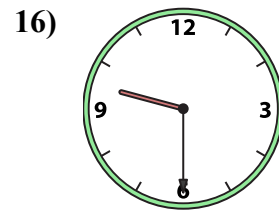
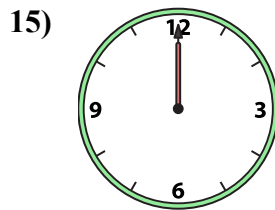
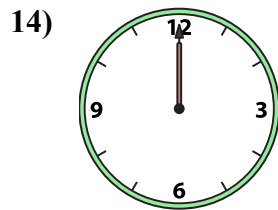
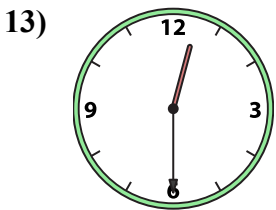
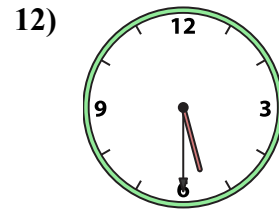
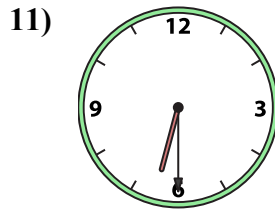
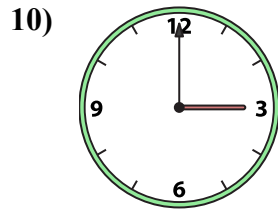
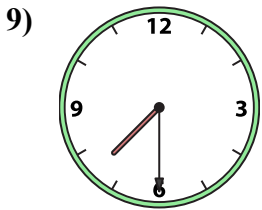
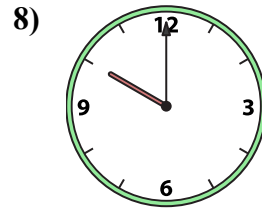
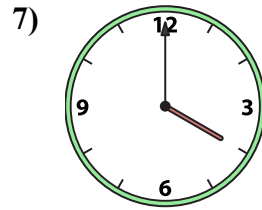
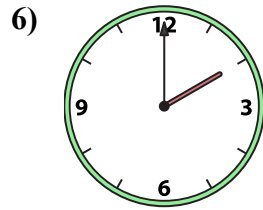
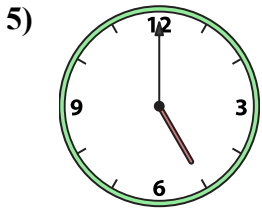
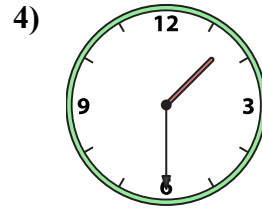
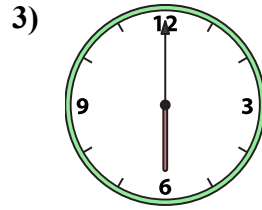
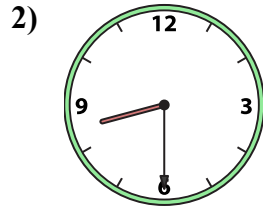
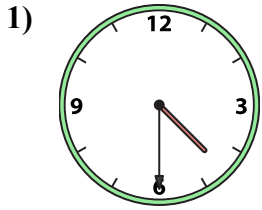




Подберите соответствующие часы к цифровым циферблатам снизу.

ОТВЕТЫ



1. _____
2. _____
3. _____
4. _____
5. _____
6. _____
7. _____
8. _____
9. _____
10. _____
11. _____
12. _____
13. _____
14. _____
15. _____
16. _____

A. 1:30

B. 12:00

C. 10:00

D. 5:30

E. 12:00

F. 2:00

G. 9:30

H. 6:00

I. 4:00

J. 6:30

K. 8:30

L. 3:00

M. 5:00

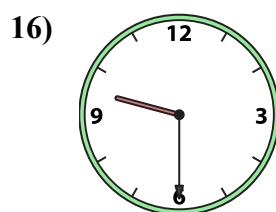
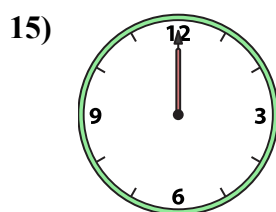
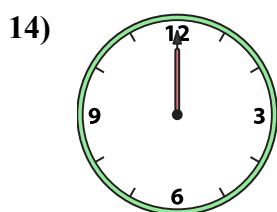
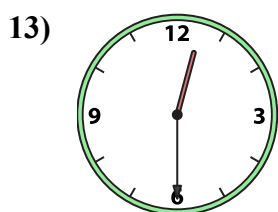
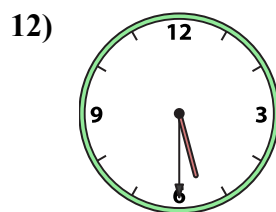
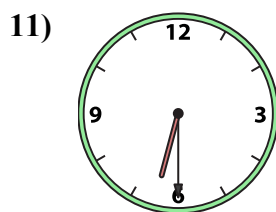
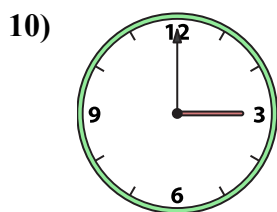
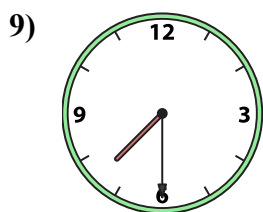
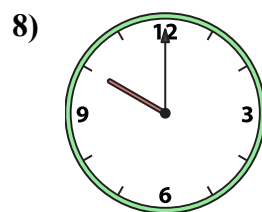
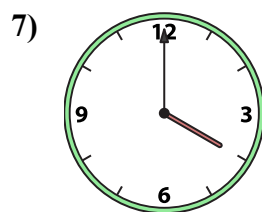
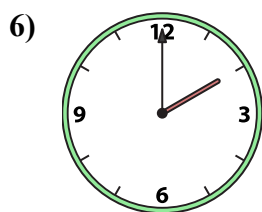
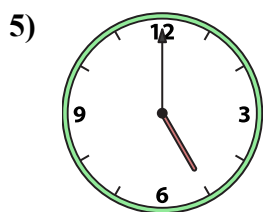
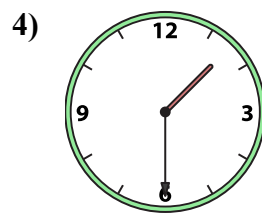
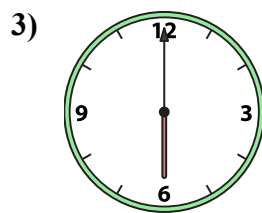
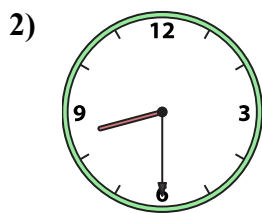
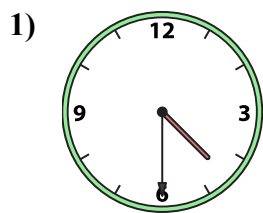
N. 12:30

O. 7:30

P. 4:30



Подберите соответствующие часы к цифровым циферблатам снизу.



A. 1:30

B. 12:00

C. 10:00

D. 5:30

E. 12:00

F. 2:00

G. 9:30

H. 6:00

I. 4:00

J. 6:30

K. 8:30

L. 3:00

M. 5:00

N. 12:30

O. 7:30

P. 4:30

ОТВЕТЫ

1. P

2. K

3. H

4. A

5. M

6. F

7. I

8. C

9. O

10. L

11. J

12. D

13. N

14. B

15. E

16. G