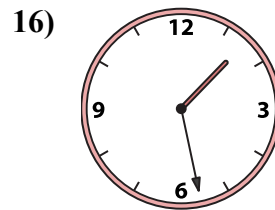
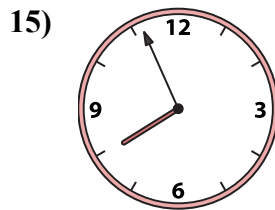
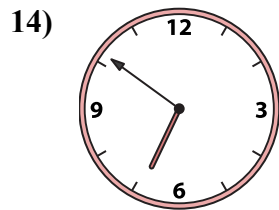
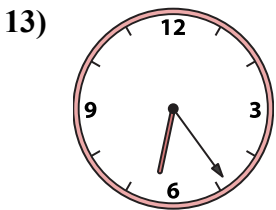
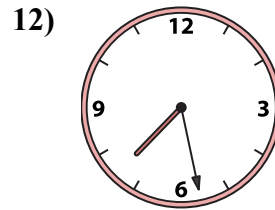
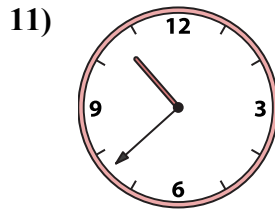
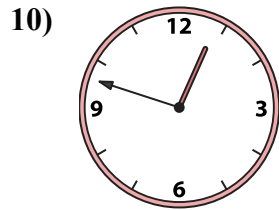
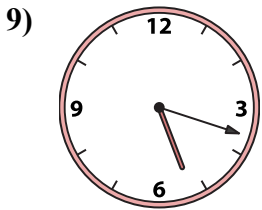
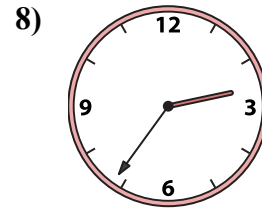
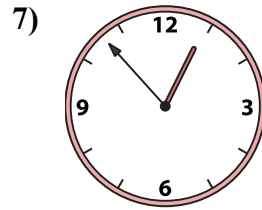
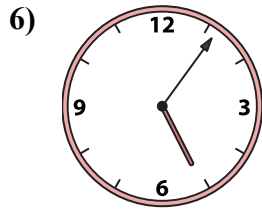
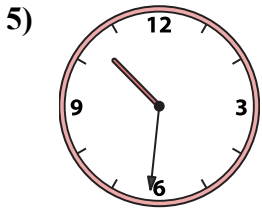
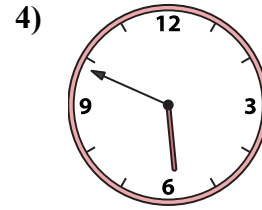
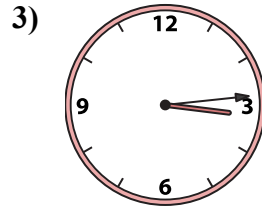
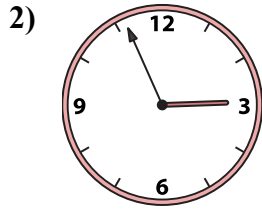
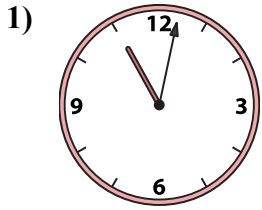




Подберите соответствующие часы к цифровым циферблатам снизу.

ОТВЕТЫ



1. _____
2. _____
3. _____
4. _____
5. _____
6. _____
7. _____
8. _____
9. _____
10. _____
11. _____
12. _____
13. _____
14. _____
15. _____
16. _____

A. 2:56

B. 10:31

C. 7:56

D. 6:24

E. 3:14

F. 5:49

G. 2:36

H. 1:28

I. 5:06

J. 10:38

K. 7:28

L. 12:53

M. 5:18


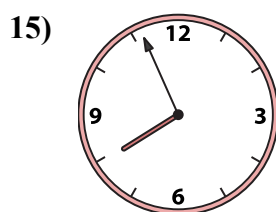
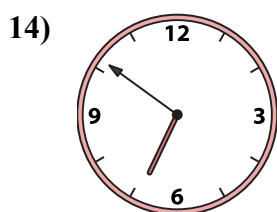

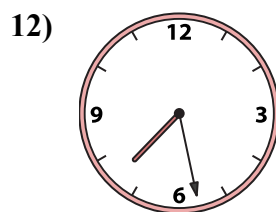
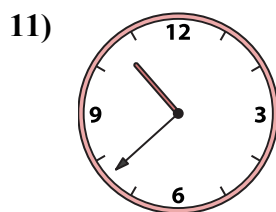
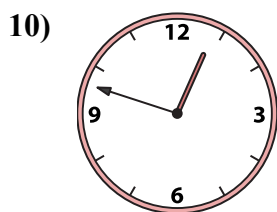
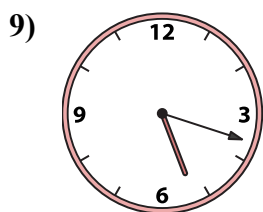
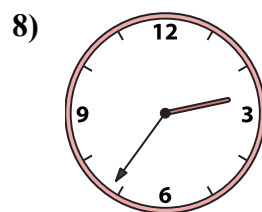

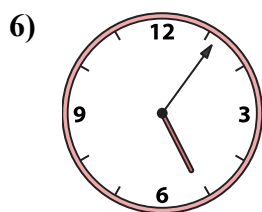

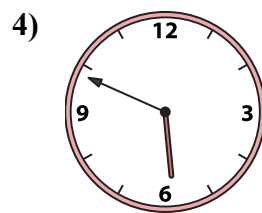
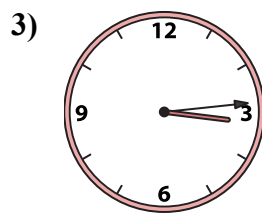
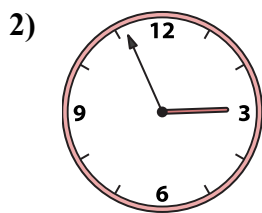
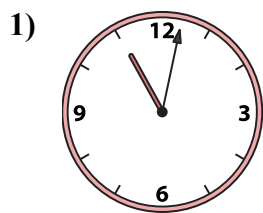
N. 12:48

O. 11:02

P. 6:51



Подберите соответствующие часы к цифровым циферблатам снизу.



A. 2:56

B. 10:31

C. 7:56

D. 6:24

E. 3:14

F. 5:49

G. 2:36

H. 1:28

I. 5:06

J. 10:38

K. 7:28

L. 12:53

M. 5:18

N. 12:48

O. 11:02

P. 6:51

ОТВЕТЫ

1. O

2. A

3. E

4. F

5. B

6. I

7. L

8. G

9. M

10. N

11. J

12. K

13. D

14. P

15. C

16. H