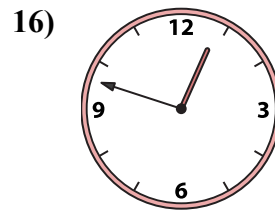
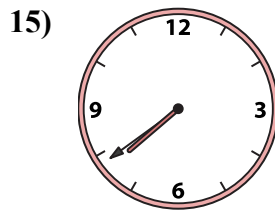
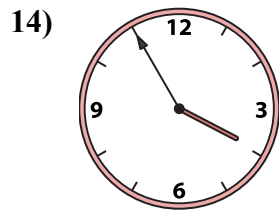
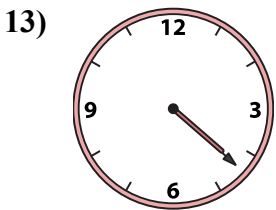
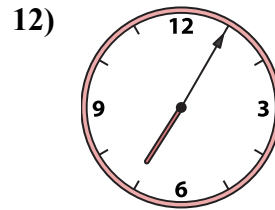
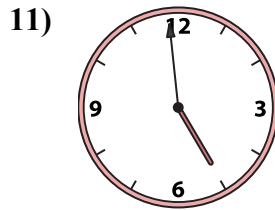
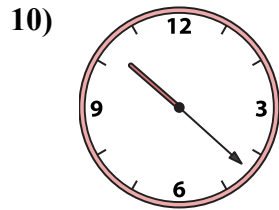
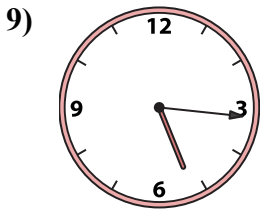
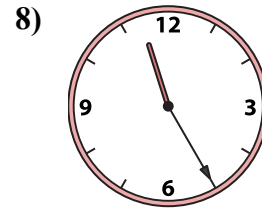
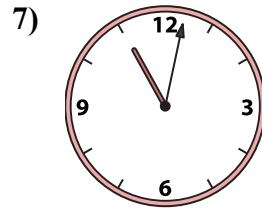
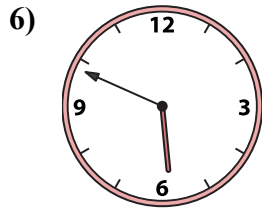
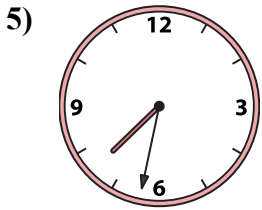
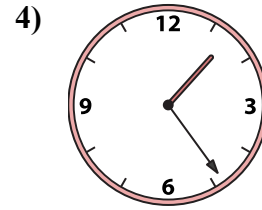
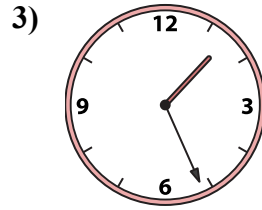
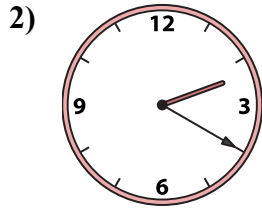





Подберите соответствующие часы к цифровым циферблатам снизу.

ОТВЕТЫ



A. 11:02

B. 1:24

C. 11:25

D. 5:16

E. 4:59

F. 4:22

G. 3:55

H. 5:49

I. 7:32

J. 1:01

K. 1:26

L. 12:48

M. 7:39

N. 2:20

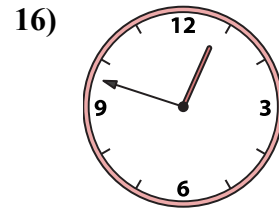
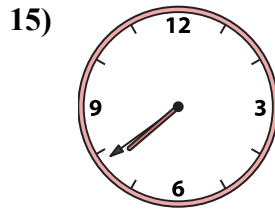
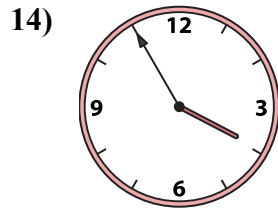
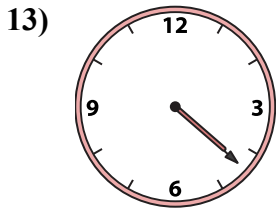
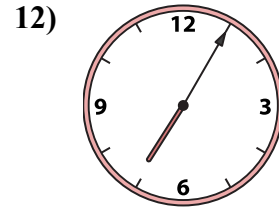
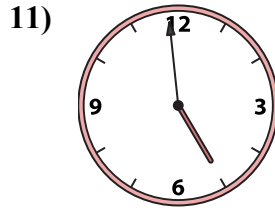
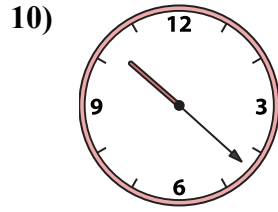
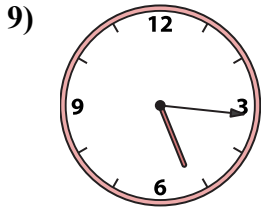
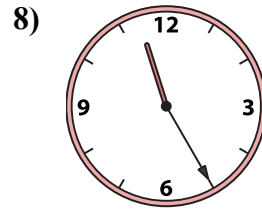

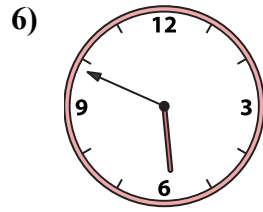
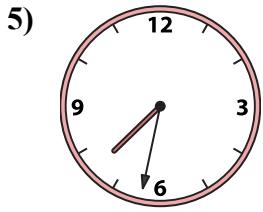
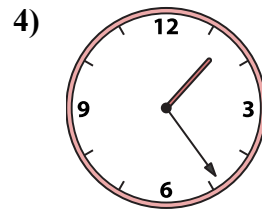
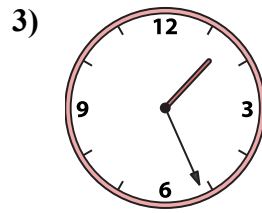
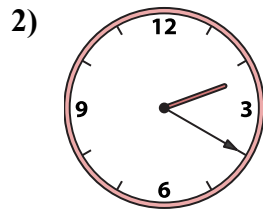
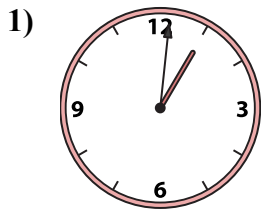
O. 10:22

P. 7:05

- 1. _____
- 2. _____
- 3. _____
- 4. _____
- 5. _____
- 6. _____
- 7. _____
- 8. _____
- 9. _____
- 10. _____
- 11. _____
- 12. _____
- 13. _____
- 14. _____
- 15. _____
- 16. _____



Подберите соответствующие часы к цифровым циферблатам снизу.



A. 11:02

B. 1:24

C. 11:25

D. 5:16

E. 4:59

F. 4:22

G. 3:55

H. 5:49

I. 7:32

J. 1:01

K. 1:26

L. 12:48

M. 7:39

N. 2:20

O. 10:22

P. 7:05

ОТВЕТЫ

1. J

2. N

3. K

4. B

5. I

6. H

7. A

8. C

9. D

10. O

11. E

12. P

13. F

14. G

15. M

16. L