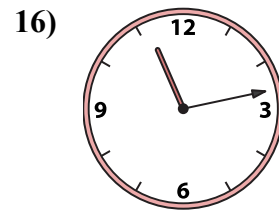
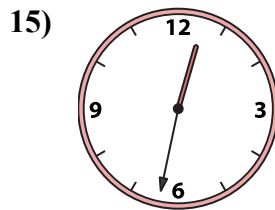
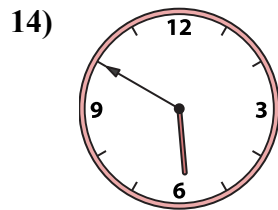
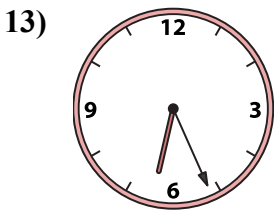
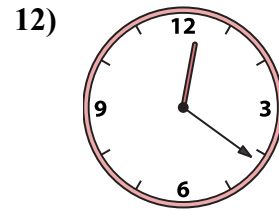
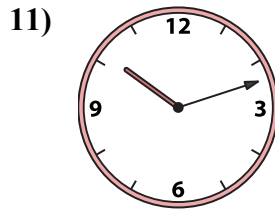
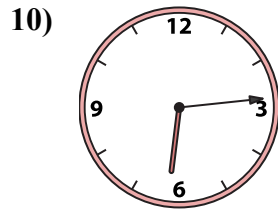
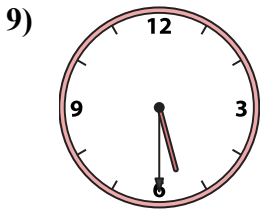
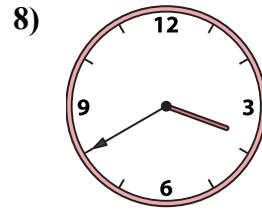
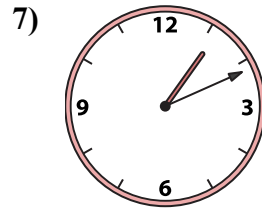
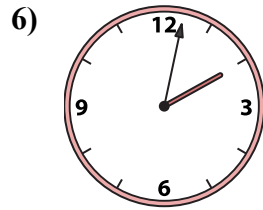
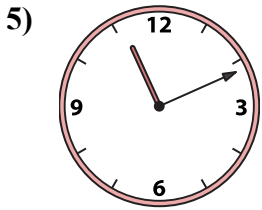
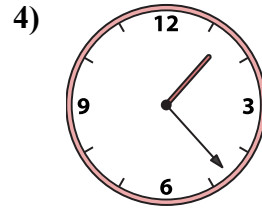
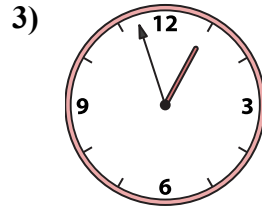
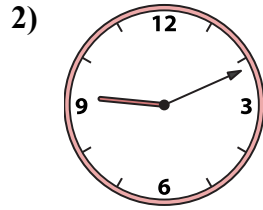
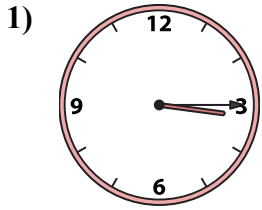




Подберите соответствующие часы к цифровым циферблатам снизу.

ОТВЕТЫ



1. _____
2. _____
3. _____
4. _____
5. _____
6. _____
7. _____
8. _____
9. _____
10. _____
11. _____
12. _____
13. _____
14. _____
15. _____
16. _____

A. 10:12

B. 3:40

C. 1:23

D. 12:32

E. 12:21

F. 3:15

G. 1:11

H. 6:14

I. 5:50

J. 2:02

K. 5:30

L. 6:26

M. 12:57

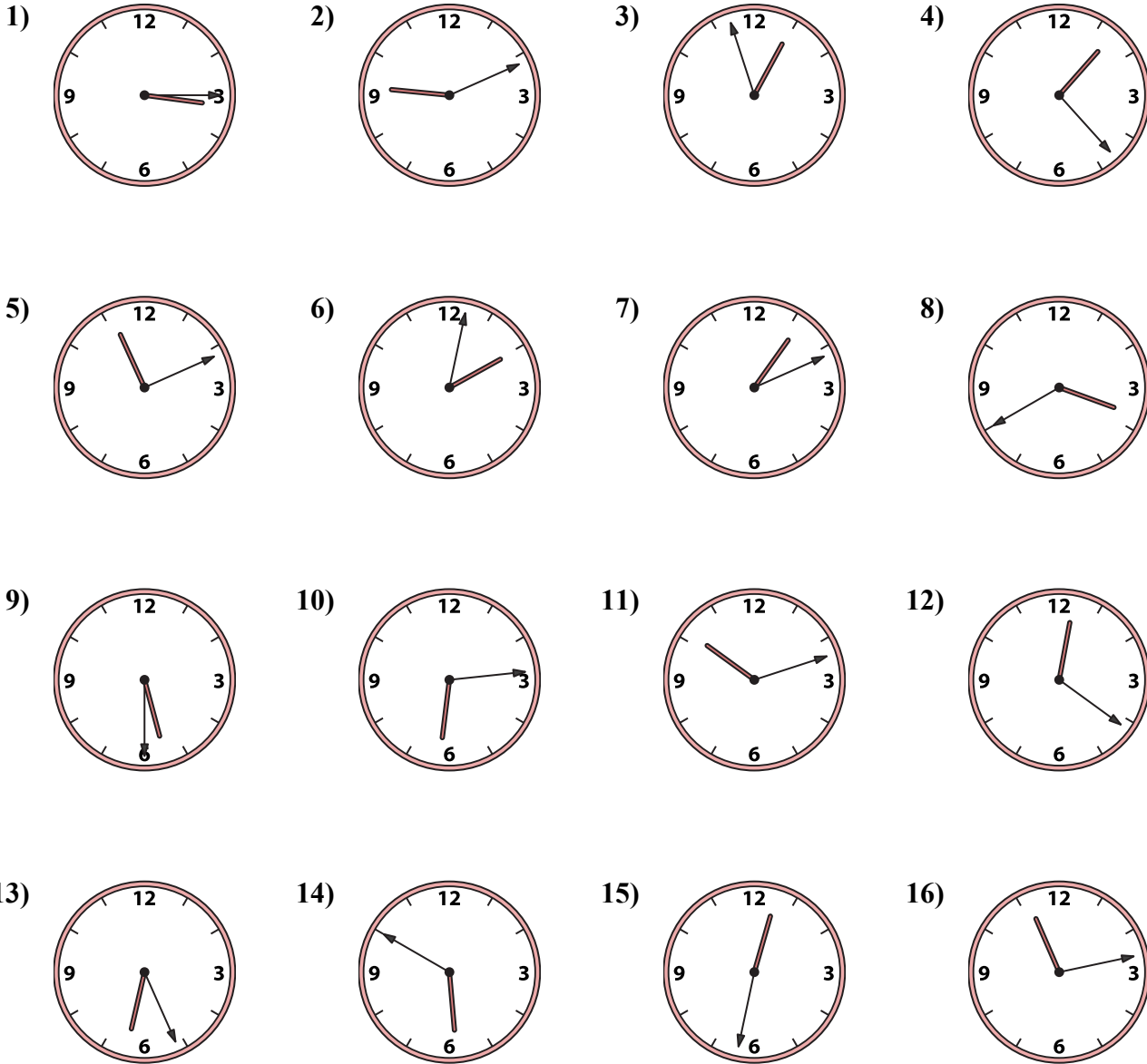
N. 11:11

O. 11:13

P. 9:11



Подберите соответствующие часы к цифровым циферблатам снизу.



ОТВЕТЫ

1. **F**
2. **P**
3. **M**
4. **C**
5. **N**
6. **J**
7. **G**
8. **B**
9. **K**
10. **H**
11. **A**
12. **E**
13. **L**
14. **I**
15. **D**
16. **O**

- A. 10:12 B. 3:40 C. 1:23 D. 12:32
- E. 12:21 F. 3:15 G. 1:11 H. 6:14
- I. 5:50 J. 2:02 K. 5:30 L. 6:26
- M. 12:57 N. 11:11 O. 11:13 P. 9:11