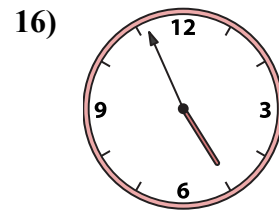
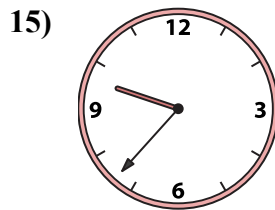
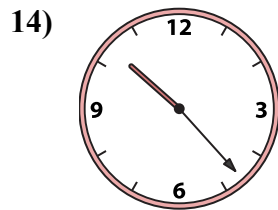
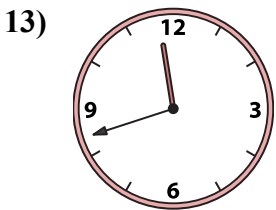
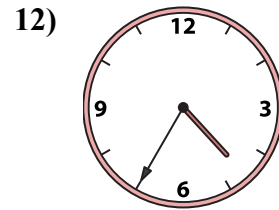
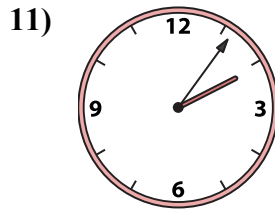
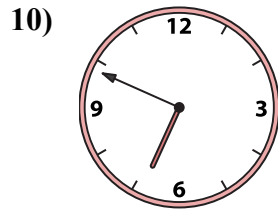
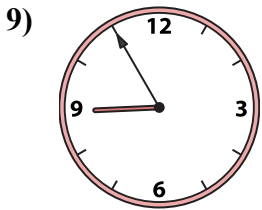
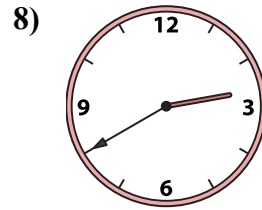
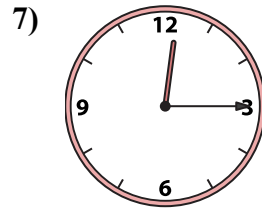
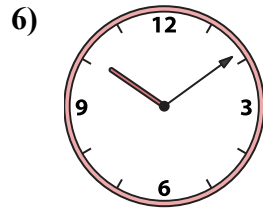
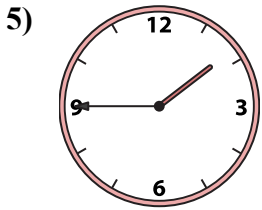
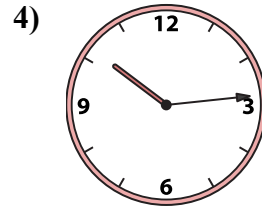
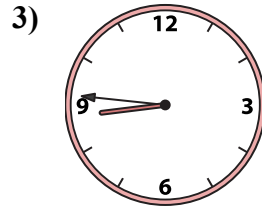
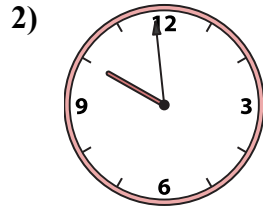
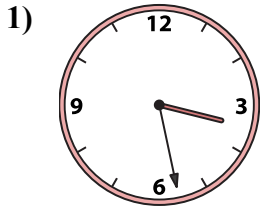




Подберите соответствующие часы к цифровым циферблатам снизу.

ОТВЕТЫ



A. 8:46

B. 4:56

C. 2:06

D. 3:28

E. 8:55

F. 4:35

G. 2:40

H. 6:49

I. 10:09

J. 9:59

K. 12:15

L. 10:14

M. 10:23

N. 9:37

O. 1:45

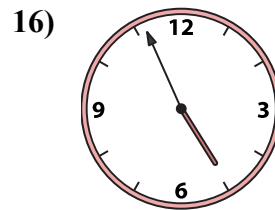
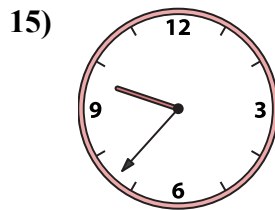
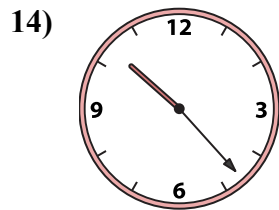
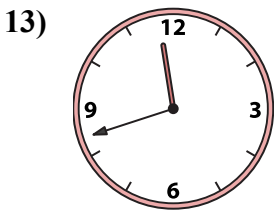
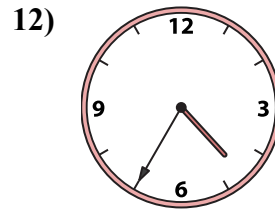
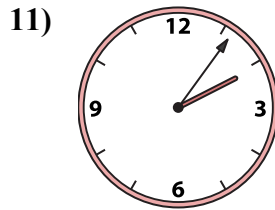
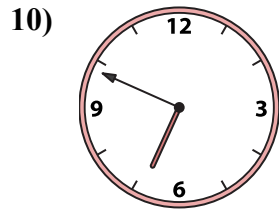
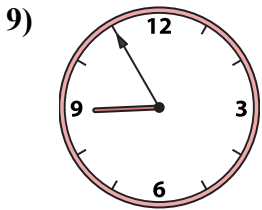
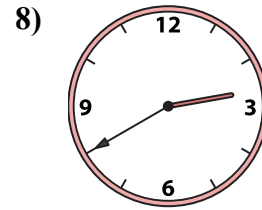
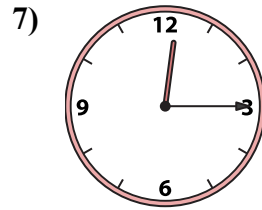
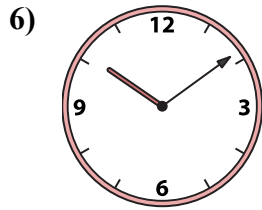
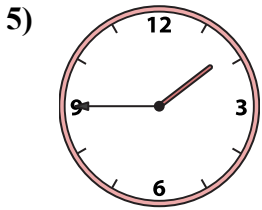
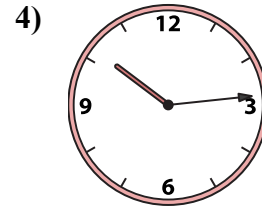
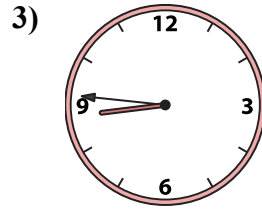
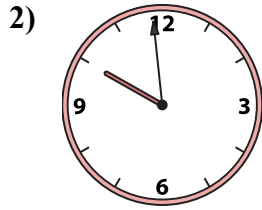
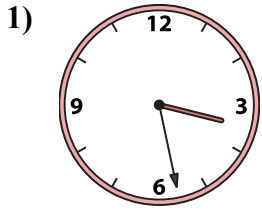
P. 11:42

1. _____
2. _____
3. _____
4. _____
5. _____
6. _____
7. _____
8. _____
9. _____
10. _____
11. _____
12. _____
13. _____
14. _____
15. _____
16. _____



Подберите соответствующие часы к цифровым циферблатам снизу.

ОТВЕТЫ



A. 8:46

B. 4:56

C. 2:06

D. 3:28

E. 8:55

F. 4:35

G. 2:40

H. 6:49

I. 10:09

J. 9:59

K. 12:15

L. 10:14

M. 10:23

N. 9:37

O. 1:45

P. 11:42

1. D

2. J

3. A

4. L

5. O

6. I

7. K

8. G

9. E

10. H

11. C

12. F

13. P

14. M

15. N

16. B