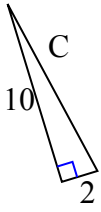




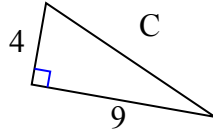
Определите значение 'С', округлите ответ до сотен.

Ответы

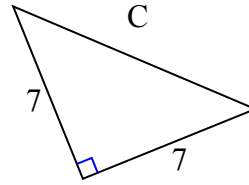
1)



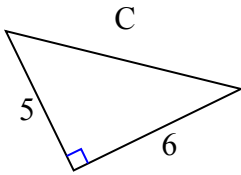
2)



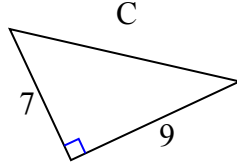
3)



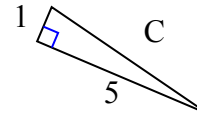
4)



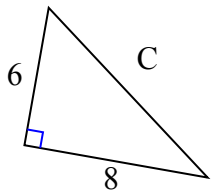
5)



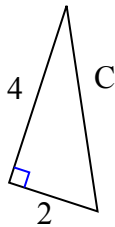
6)



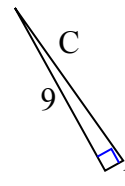
7)



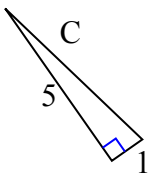
8)



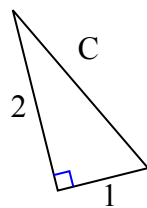
9)



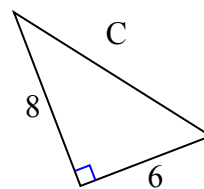
10)



11)



12)

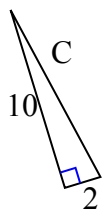


1. _____
2. _____
3. _____
4. _____
5. _____
6. _____
7. _____
8. _____
9. _____
10. _____
11. _____
12. _____



Определите значение 'C', округлите ответ до сотен.

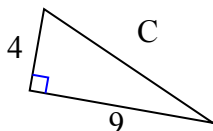
1)



$$100 + 4 = 104$$

$$\sqrt{104} = 10,2$$

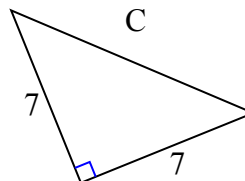
2)



$$16 + 81 = 97$$

$$\sqrt{97} = 9,85$$

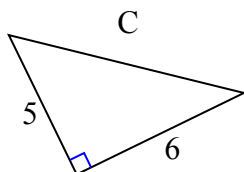
3)



$$49 + 49 = 98$$

$$\sqrt{98} = 9,9$$

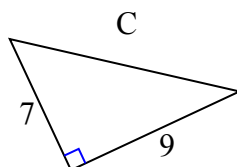
4)



$$25 + 36 = 61$$

$$\sqrt{61} = 7,81$$

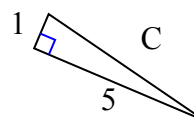
5)



$$49 + 81 = 130$$

$$\sqrt{130} = 11,4$$

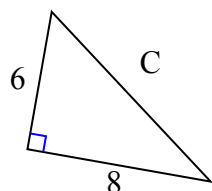
6)



$$1 + 25 = 26$$

$$\sqrt{26} = 5,1$$

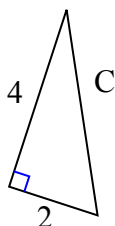
7)



$$36 + 64 = 100$$

$$\sqrt{100} = 10$$

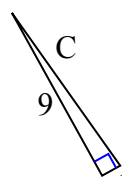
8)



$$16 + 4 = 20$$

$$\sqrt{20} = 4,47$$

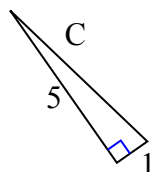
9)



$$81 + 1 = 82$$

$$\sqrt{82} = 9,06$$

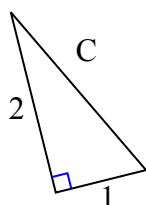
10)



$$25 + 1 = 26$$

$$\sqrt{26} = 5,1$$

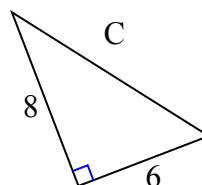
11)



$$4 + 1 = 5$$

$$\sqrt{5} = 2,24$$

12)



$$64 + 36 = 100$$

$$\sqrt{100} = 10$$

ОТВЕТЫ1. 10,22. 9,853. 9,94. 7,815. 11,46. 5,17. 108. 4,479. 9,0610. 5,111. 2,2412. 10