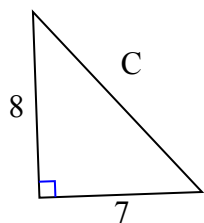




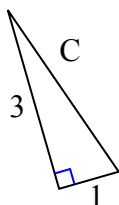
Определите значение 'C', округлите ответ до сотен.

ОТВЕТЫ

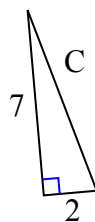
1)



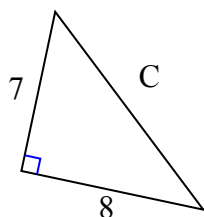
2)



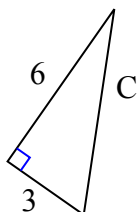
3)



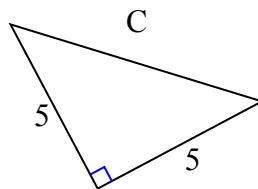
4)



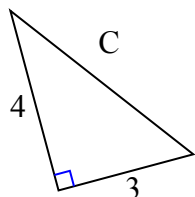
5)



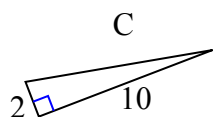
6)



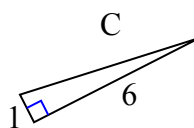
7)



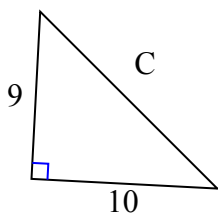
8)



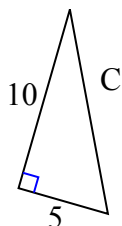
9)



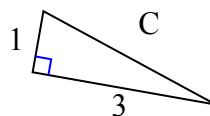
10)



11)



12)

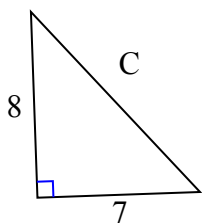


1. _____
2. _____
3. _____
4. _____
5. _____
6. _____
7. _____
8. _____
9. _____
10. _____
11. _____
12. _____



Определите значение 'C', округлите ответ до сотен.

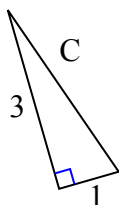
1)



$$64 + 49 = 113$$

$$\sqrt{113} = 10,63$$

2)



$$9 + 1 = 10$$

$$\sqrt{10} = 3,16$$

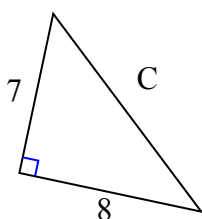
3)



$$49 + 4 = 53$$

$$\sqrt{53} = 7,28$$

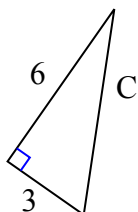
4)



$$49 + 64 = 113$$

$$\sqrt{113} = 10,63$$

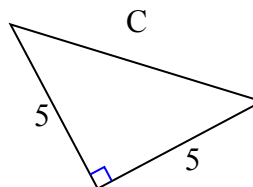
5)



$$36 + 9 = 45$$

$$\sqrt{45} = 6,71$$

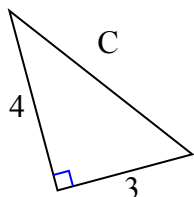
6)



$$25 + 25 = 50$$

$$\sqrt{50} = 7,07$$

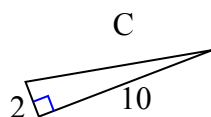
7)



$$16 + 9 = 25$$

$$\sqrt{25} = 5$$

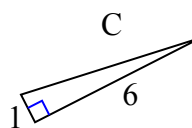
8)



$$4 + 100 = 104$$

$$\sqrt{104} = 10,2$$

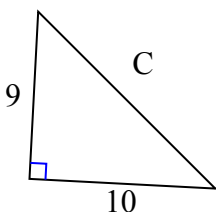
9)



$$1 + 36 = 37$$

$$\sqrt{37} = 6,08$$

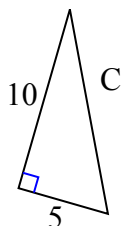
10)



$$81 + 100 = 181$$

$$\sqrt{181} = 13,45$$

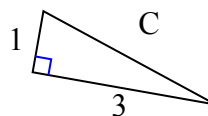
11)



$$100 + 25 = 125$$

$$\sqrt{125} = 11,18$$

12)



$$1 + 9 = 10$$

$$\sqrt{10} = 3,16$$

ОТВЕТЫ1. 10,632. 3,163. 7,284. 10,635. 6,716. 7,077. 58. 10,29. 6,0810. 13,4511. 11,1812. 3,16