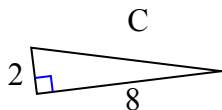


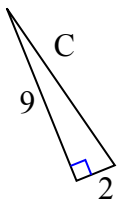


Определите значение 'C', округлите ответ до сотен.

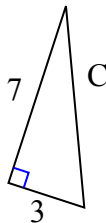
1)



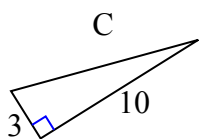
2)



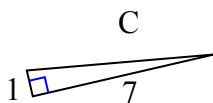
3)



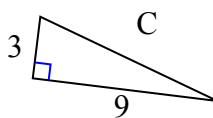
4)



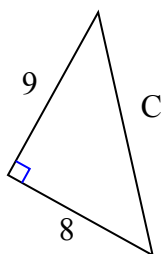
5)



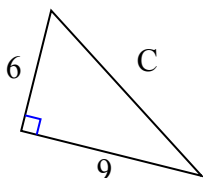
6)



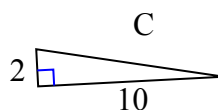
7)



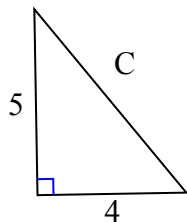
8)



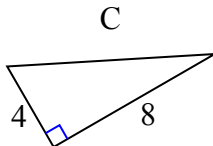
9)



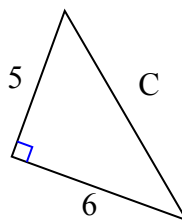
10)



11)



12)

**Ответы**

1. _____

2. _____

3. _____

4. _____

5. _____

6. _____

7. _____

8. _____

9. _____

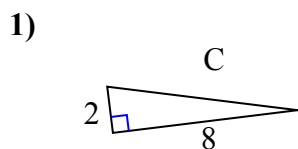
10. _____

11. _____

12. _____

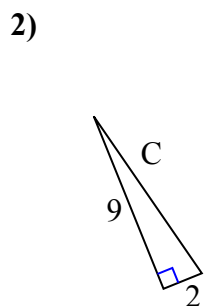


Определите значение 'C', округлите ответ до сотен.



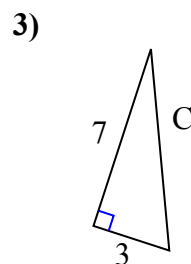
$$4 + 64 = 68$$

$$\sqrt{68} = 8,25$$



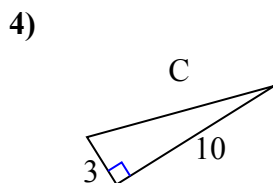
$$81 + 4 = 85$$

$$\sqrt{85} = 9,22$$



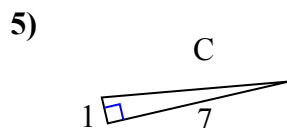
$$49 + 9 = 58$$

$$\sqrt{58} = 7,62$$



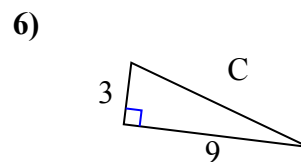
$$9 + 100 = 109$$

$$\sqrt{109} = 10,44$$



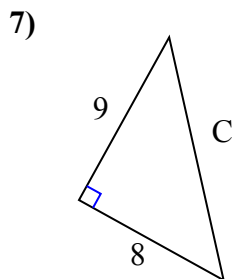
$$1 + 49 = 50$$

$$\sqrt{50} = 7,07$$



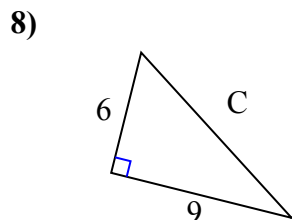
$$9 + 81 = 90$$

$$\sqrt{90} = 9,49$$



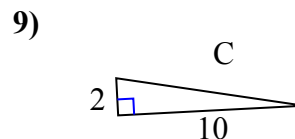
$$81 + 64 = 145$$

$$\sqrt{145} = 12,04$$



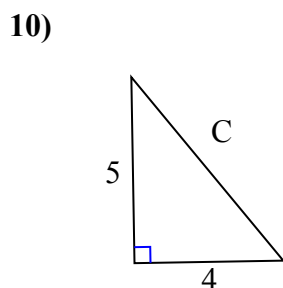
$$36 + 81 = 117$$

$$\sqrt{117} = 10,82$$



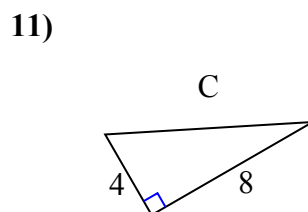
$$4 + 100 = 104$$

$$\sqrt{104} = 10,2$$



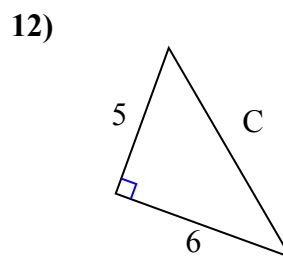
$$25 + 16 = 41$$

$$\sqrt{41} = 6,4$$



$$16 + 64 = 80$$

$$\sqrt{80} = 8,94$$



$$25 + 36 = 61$$

$$\sqrt{61} = 7,81$$

ОТВЕТЫ

1. 8,25
2. 9,22
3. 7,62
4. 10,44
5. 7,07
6. 9,49
7. 12,04
8. 10,82
9. 10,2
10. 6,4
11. 8,94
12. 7,81