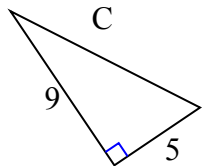




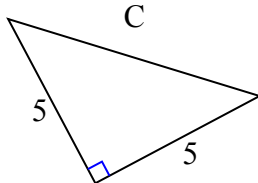
Определите значение 'С', округлите ответ до сотен.

Ответы

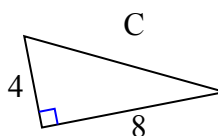
1)



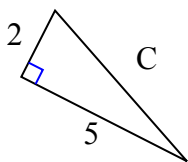
2)



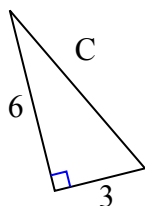
3)



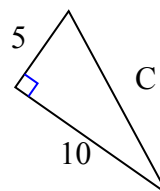
4)



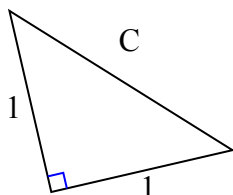
5)



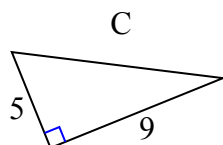
6)



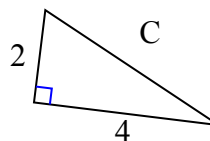
7)



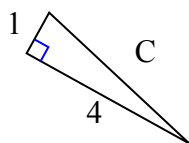
8)



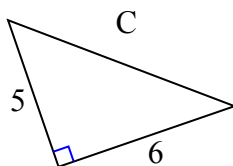
9)



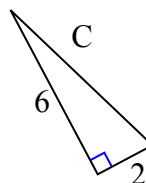
10)



11)



12)

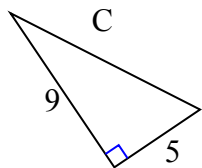


1. _____
2. _____
3. _____
4. _____
5. _____
6. _____
7. _____
8. _____
9. _____
10. _____
11. _____
12. _____



Определите значение 'С', округлите ответ до сотен.

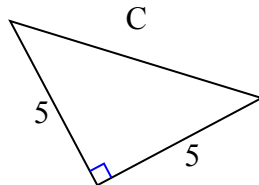
1)



$$81 + 25 = 106$$

$$\sqrt{106} = 10,3$$

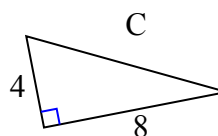
2)



$$25 + 25 = 50$$

$$\sqrt{50} = 7,07$$

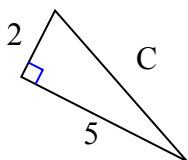
3)



$$16 + 64 = 80$$

$$\sqrt{80} = 8,94$$

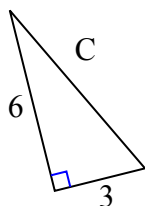
4)



$$4 + 25 = 29$$

$$\sqrt{29} = 5,39$$

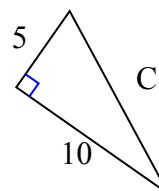
5)



$$36 + 9 = 45$$

$$\sqrt{45} = 6,71$$

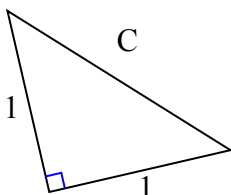
6)



$$25 + 100 = 125$$

$$\sqrt{125} = 11,18$$

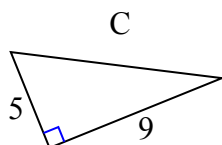
7)



$$1 + 1 = 2$$

$$\sqrt{2} = 1,41$$

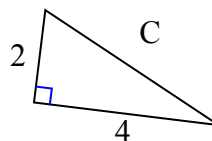
8)



$$25 + 81 = 106$$

$$\sqrt{106} = 10,3$$

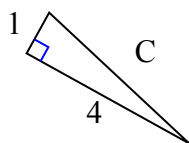
9)



$$4 + 16 = 20$$

$$\sqrt{20} = 4,47$$

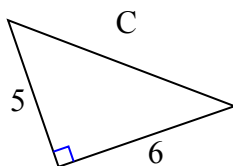
10)



$$1 + 16 = 17$$

$$\sqrt{17} = 4,12$$

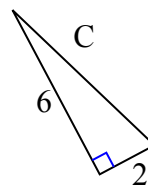
11)



$$25 + 36 = 61$$

$$\sqrt{61} = 7,81$$

12)



$$36 + 4 = 40$$

$$\sqrt{40} = 6,32$$

ОТВЕТЫ1. 10,32. 7,073. 8,944. 5,395. 6,716. 11,187. 1,418. 10,39. 4,4710. 4,1211. 7,8112. 6,32