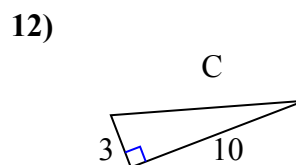
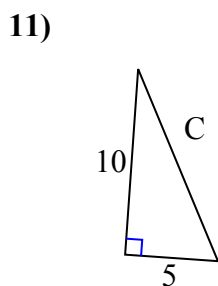
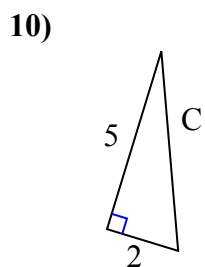
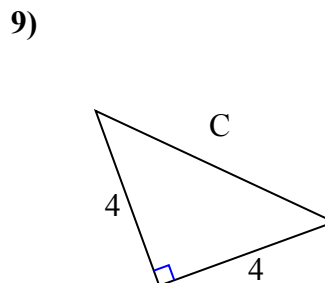
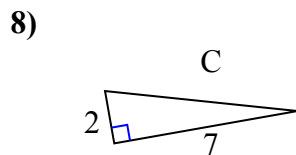
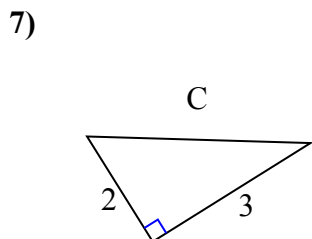
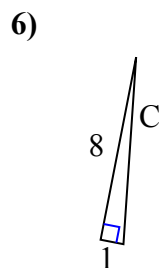
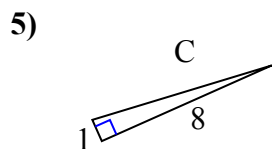
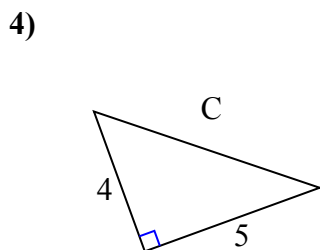
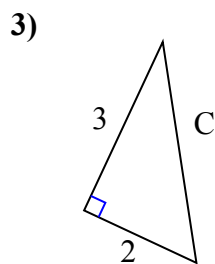
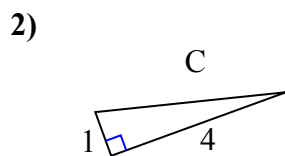
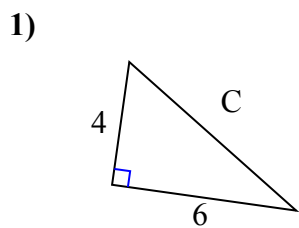




Определите значение 'С', округлите ответ до сотен.



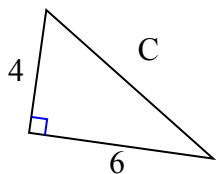
Ответы

1. _____
2. _____
3. _____
4. _____
5. _____
6. _____
7. _____
8. _____
9. _____
10. _____
11. _____
12. _____



Определите значение 'С', округлите ответ до сотен.

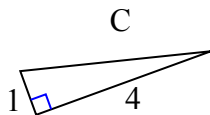
1)



$$16 + 36 = 52$$

$$\sqrt{52} = 7,21$$

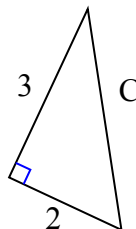
2)



$$1 + 16 = 17$$

$$\sqrt{17} = 4,12$$

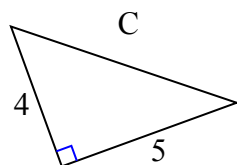
3)



$$9 + 4 = 13$$

$$\sqrt{13} = 3,61$$

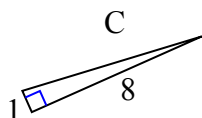
4)



$$16 + 25 = 41$$

$$\sqrt{41} = 6,4$$

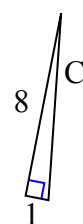
5)



$$1 + 64 = 65$$

$$\sqrt{65} = 8,06$$

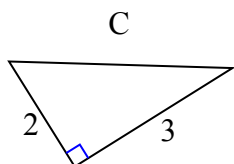
6)



$$64 + 1 = 65$$

$$\sqrt{65} = 8,06$$

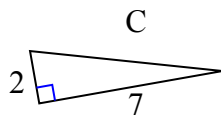
7)



$$4 + 9 = 13$$

$$\sqrt{13} = 3,61$$

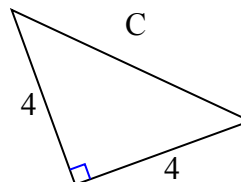
8)



$$4 + 49 = 53$$

$$\sqrt{53} = 7,28$$

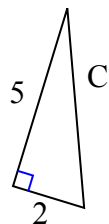
9)



$$16 + 16 = 32$$

$$\sqrt{32} = 5,66$$

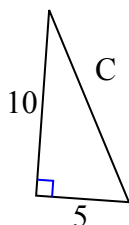
10)



$$25 + 4 = 29$$

$$\sqrt{29} = 5,39$$

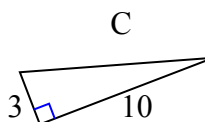
11)



$$100 + 25 = 125$$

$$\sqrt{125} = 11,18$$

12)



$$9 + 100 = 109$$

$$\sqrt{109} = 10,44$$

Ответы1. 7,212. 4,123. 3,614. 6,45. 8,066. 8,067. 3,618. 7,289. 5,6610. 5,3911. 11,1812. 10,44