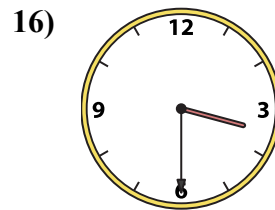
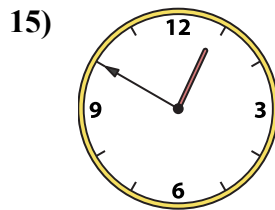
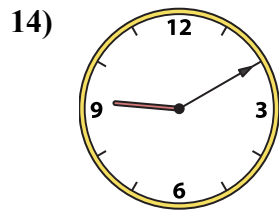
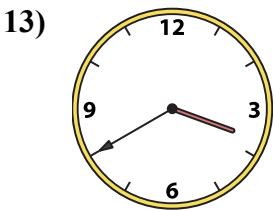
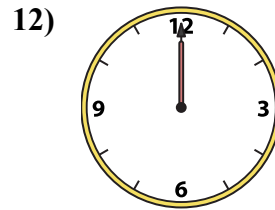
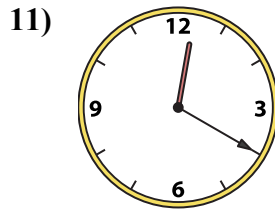
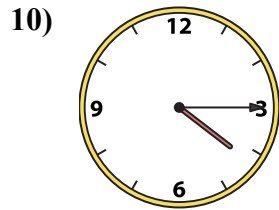
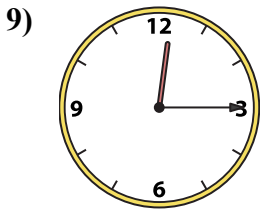
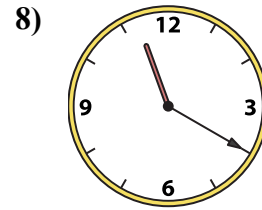
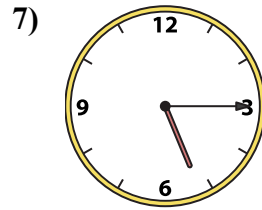
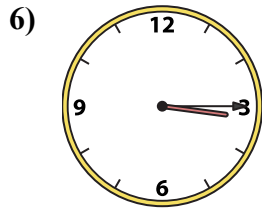
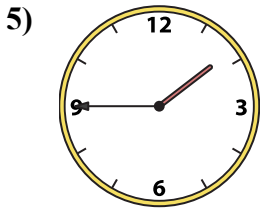
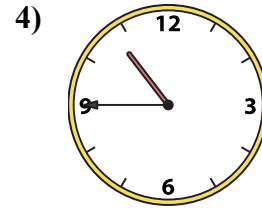
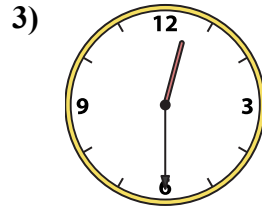
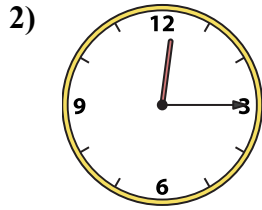
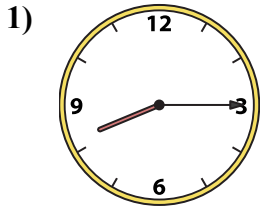




Подберите соответствующие часы к цифровым циферблатам снизу.

ОТВЕТЫ



1. _____
2. _____
3. _____
4. _____
5. _____
6. _____
7. _____
8. _____
9. _____
10. _____
11. _____
12. _____
13. _____
14. _____
15. _____
16. _____

A. 3:40

B. 9:10

C. 12:20

D. 12:15

E. 12:00

F. 12:15

G. 10:45

H. 12:50

I. 8:15

J. 11:20

K. 5:15

L. 1:45

M. 12:30

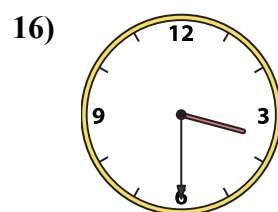
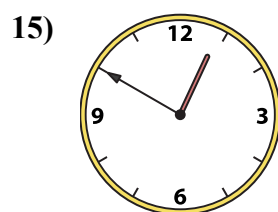
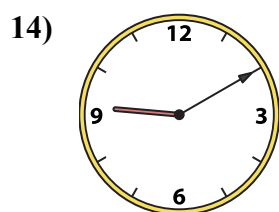
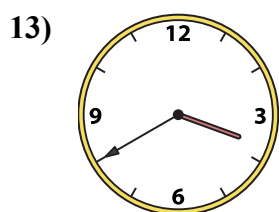
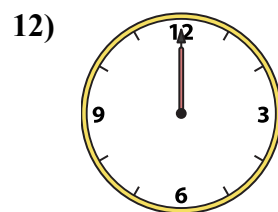
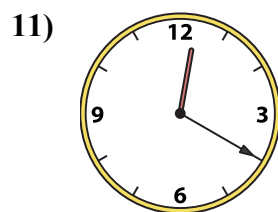
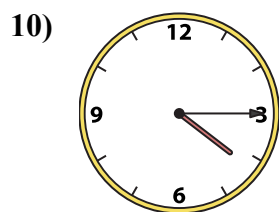
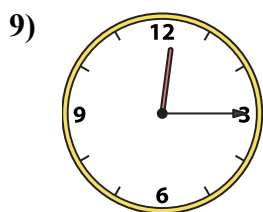

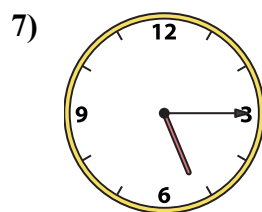
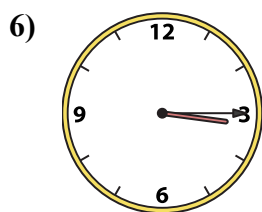
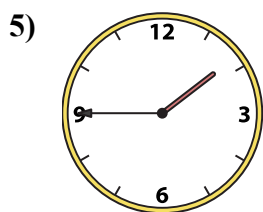
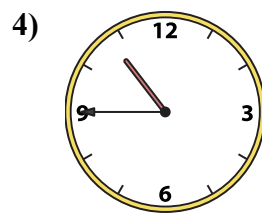
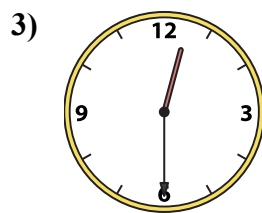
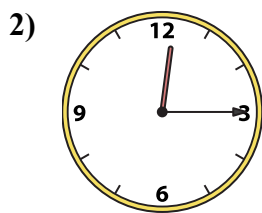
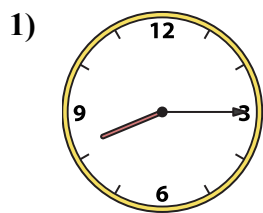
N. 4:15

O. 3:30

P. 3:15



Подберите соответствующие часы к цифровым циферблатам снизу.



ОТВЕТЫ

1. I

2. D

3. M

4. G

5. L

6. P

7. K

8. J

9. F

10. N

11. C

12. E

13. A

14. B

15. H

16. O

A. 3:40

B. 9:10

C. 12:20

D. 12:15

E. 12:00

F. 12:15

G. 10:45

H. 12:50

I. 8:15

J. 11:20

K. 5:15

L. 1:45

M. 12:30

N. 4:15

O. 3:30

P. 3:15