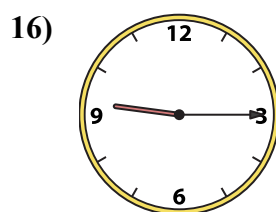
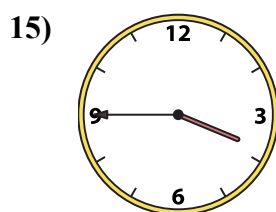
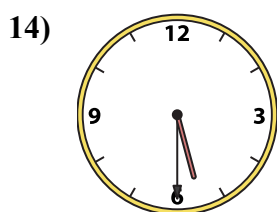
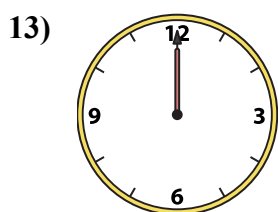
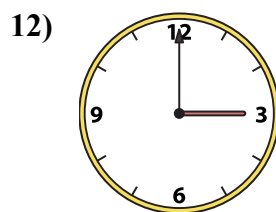
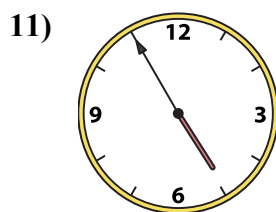
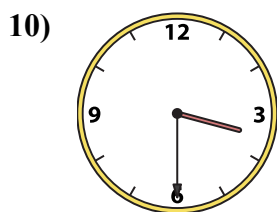
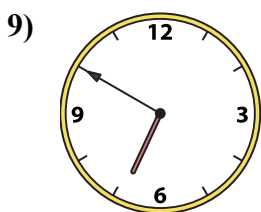
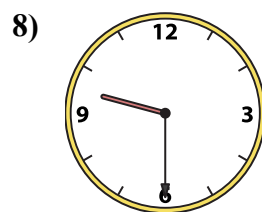
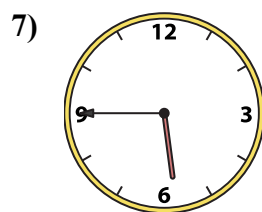
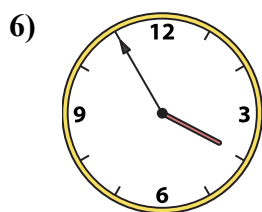
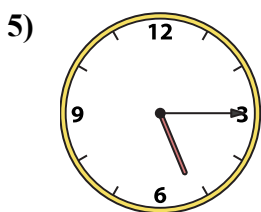
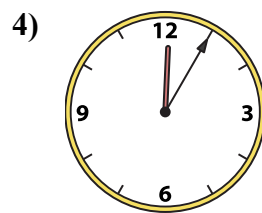
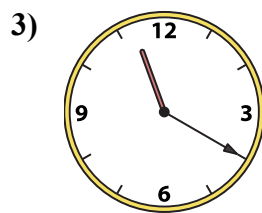
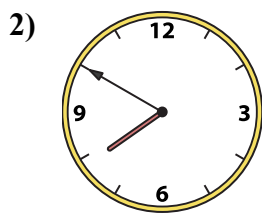
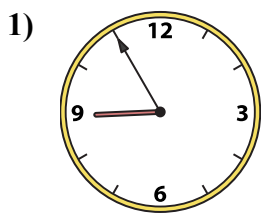




Подберите соответствующие часы к цифровым циферблатам снизу.

ОТВЕТЫ



1. _____
2. _____
3. _____
4. _____
5. _____
6. _____
7. _____
8. _____
9. _____
10. _____
11. _____
12. _____
13. _____
14. _____
15. _____
16. _____

A. 5:45

B. 3:00

C. 3:45

D. 12:05

E. 3:30

F. 6:50

G. 7:50

H. 12:00

I. 9:30

J. 3:55

K. 4:55

L. 8:55

M. 5:15

N. 9:15

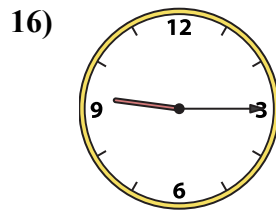
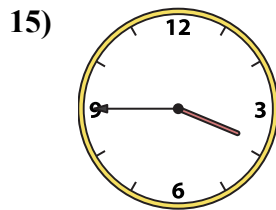
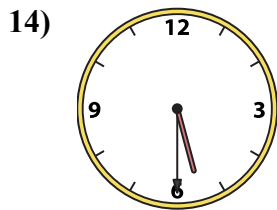
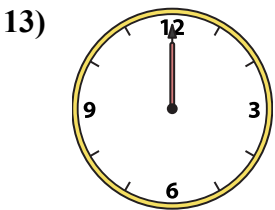
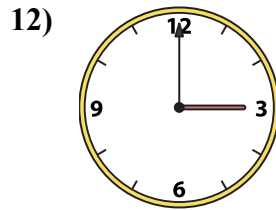
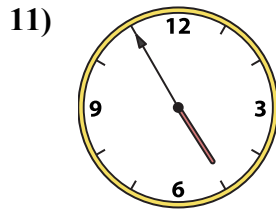
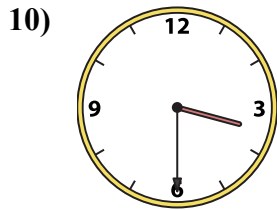
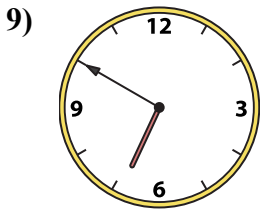
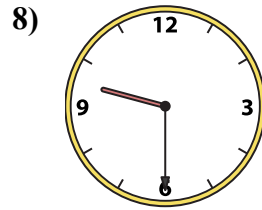
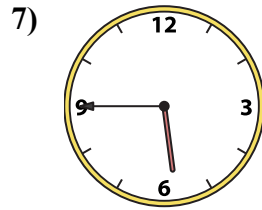
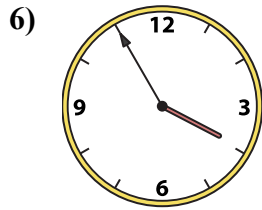
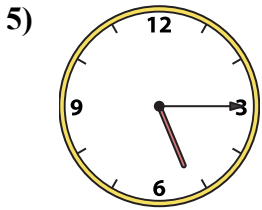
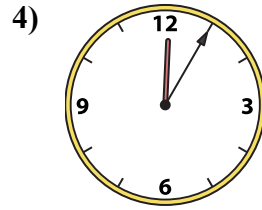
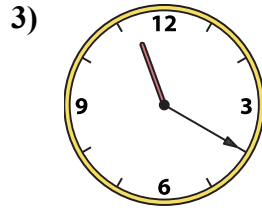
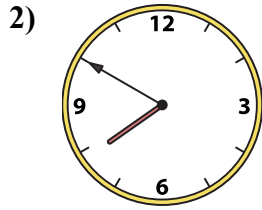

O. 11:20

P. 5:30



Подберите соответствующие часы к цифровым циферблатам снизу.

ОТВЕТЫ



A. 5:45

B. 3:00

C. 3:45

D. 12:05

E. 3:30

F. 6:50

G. 7:50

H. 12:00

I. 9:30

J. 3:55

K. 4:55

L. 8:55

M. 5:15

N. 9:15

O. 11:20

P. 5:30

1. L

2. G

3. O

4. D

5. M

6. J

7. A

8. I

9. F

10. E

11. K

12. B

13. H

14. P

15. C

16. N