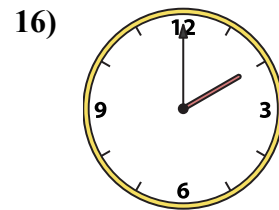
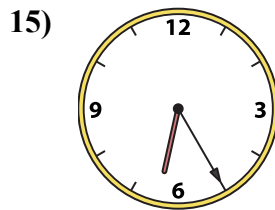
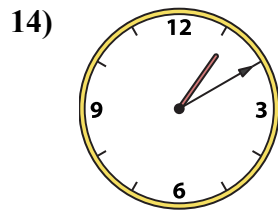
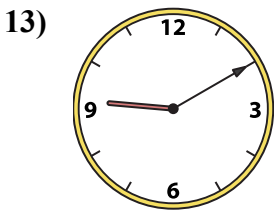
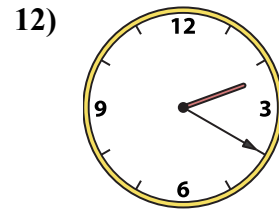
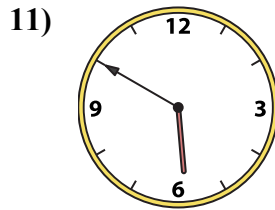
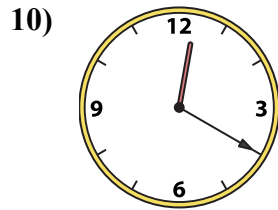
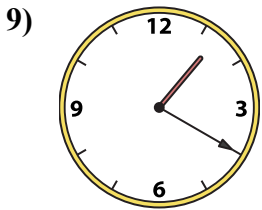
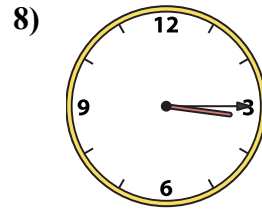
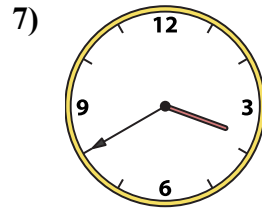
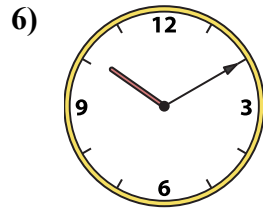
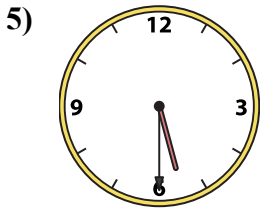
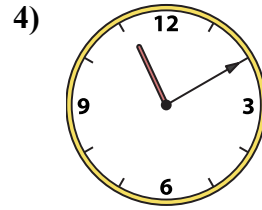
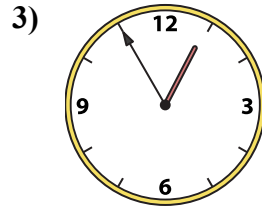
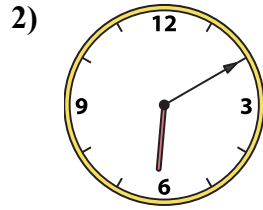
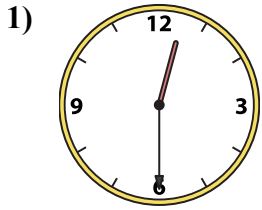




Подберите соответствующие часы к цифровым циферблатам снизу.

**ОТВЕТЫ**



1. \_\_\_\_\_
2. \_\_\_\_\_
3. \_\_\_\_\_
4. \_\_\_\_\_
5. \_\_\_\_\_
6. \_\_\_\_\_
7. \_\_\_\_\_
8. \_\_\_\_\_
9. \_\_\_\_\_
10. \_\_\_\_\_
11. \_\_\_\_\_
12. \_\_\_\_\_
13. \_\_\_\_\_
14. \_\_\_\_\_
15. \_\_\_\_\_
16. \_\_\_\_\_

A. 10:10

B. 3:40

C. 1:20

D. 12:30

E. 12:20

F. 3:15

G. 1:10

H. 6:10

I. 5:50

J. 2:00

K. 5:30

L. 6:25

M. 12:55


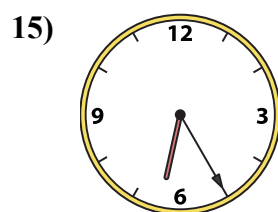
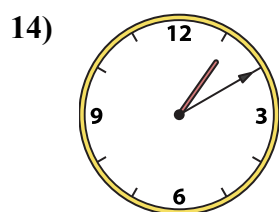
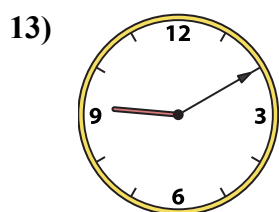
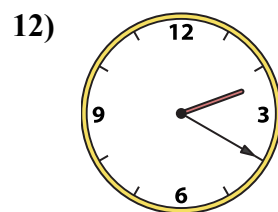
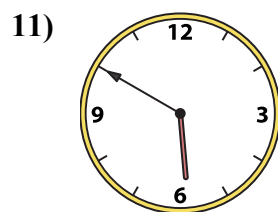
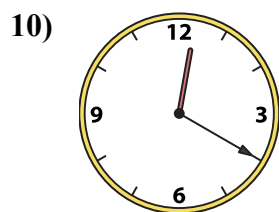
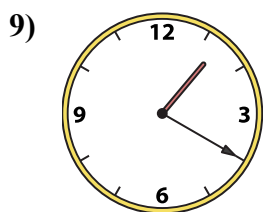
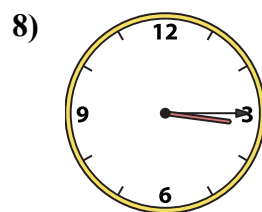
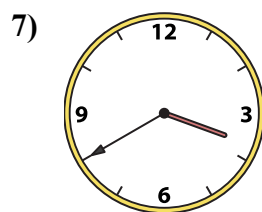
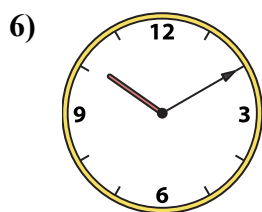
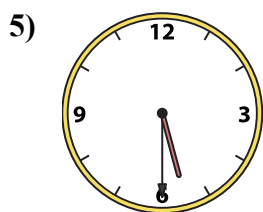
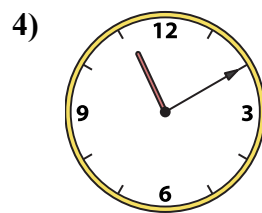
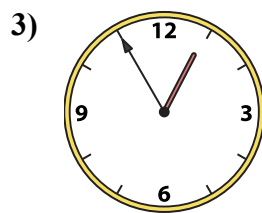
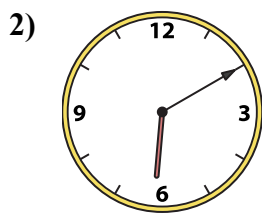
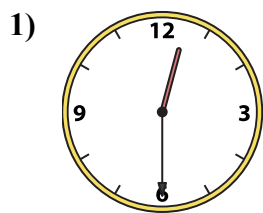
N. 11:10

O. 9:10

P. 2:20



Подберите соответствующие часы к цифровым циферблатам снизу.



**ОТВЕТЫ**

1. D

2. H

3. M

4. N

5. K

6. A

7. B

8. F

9. C

10. E

11. I

12. P

13. O

14. G

15. L

16. J

A. 10:10

B. 3:40

C. 1:20

D. 12:30

E. 12:20

F. 3:15

G. 1:10

H. 6:10

I. 5:50

J. 2:00

K. 5:30

L. 6:25

M. 12:55

N. 11:10

O. 9:10

P. 2:20