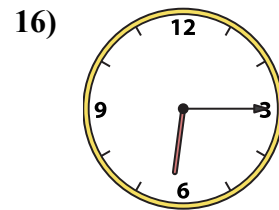
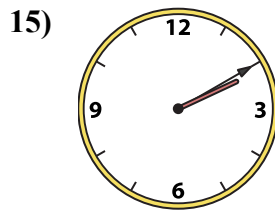
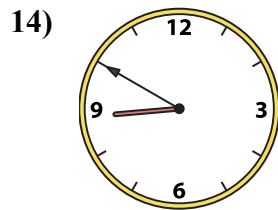
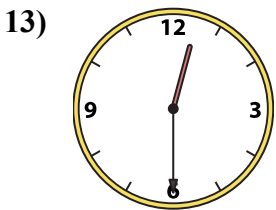
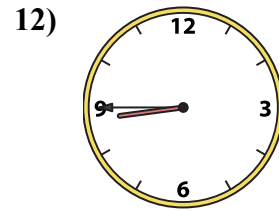
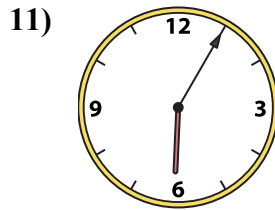
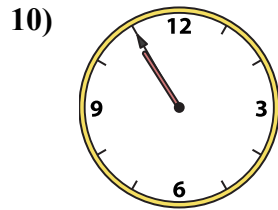
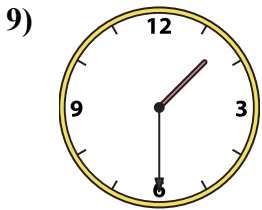
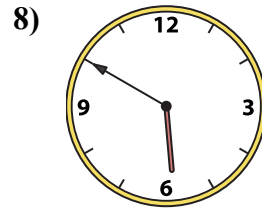
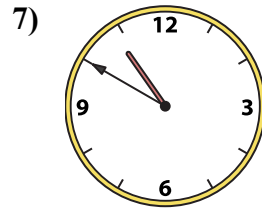
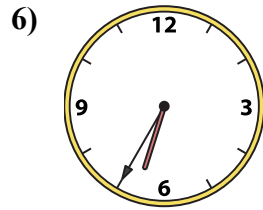
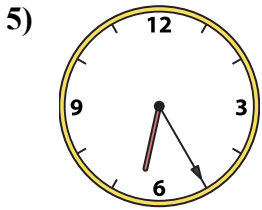
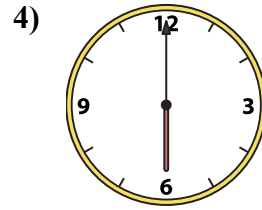
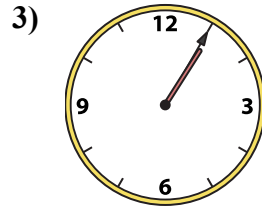
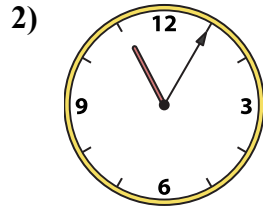
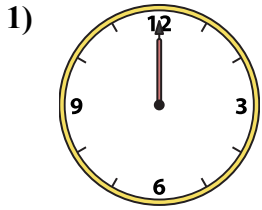




Подберите соответствующие часы к цифровым циферблатам снизу.

ОТВЕТЫ



1. _____
2. _____
3. _____
4. _____
5. _____
6. _____
7. _____
8. _____
9. _____
10. _____
11. _____
12. _____
13. _____
14. _____
15. _____
16. _____

A. 6:05

B. 1:30

C. 6:00

D. 6:35

E. 12:00

F. 2:10

G. 12:30

H. 10:50

I. 1:05

J. 8:45

K. 8:50

L. 5:50

M. 6:25


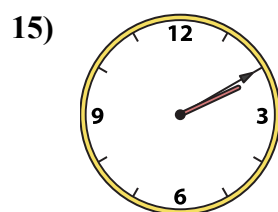
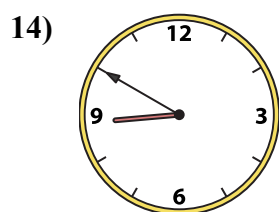
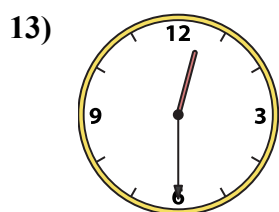
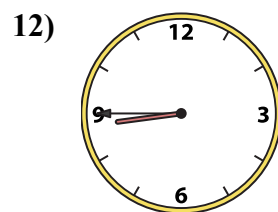
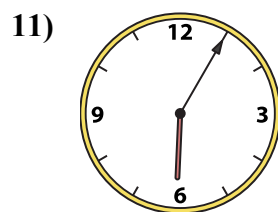
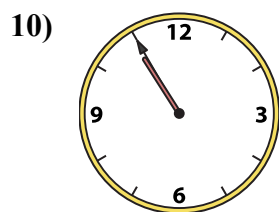
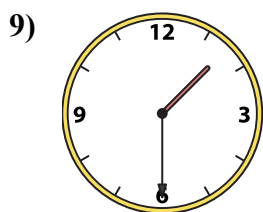
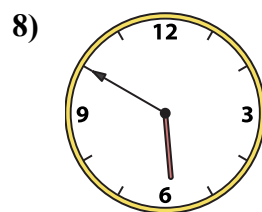
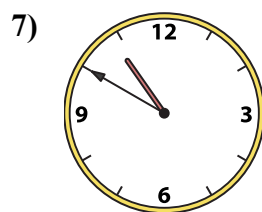
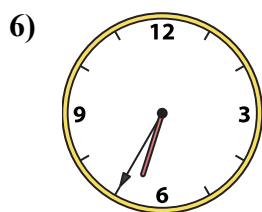
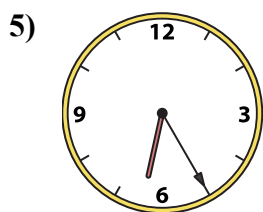
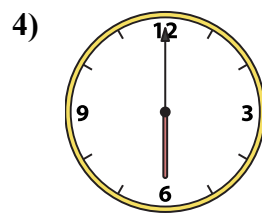
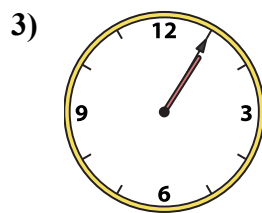
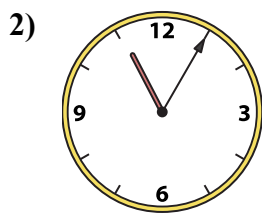
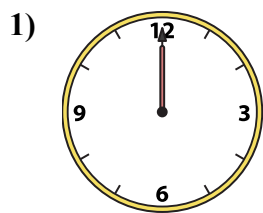
N. 10:55

O. 11:05

P. 6:15



Подберите соответствующие часы к цифровым циферблатам снизу.



ОТВЕТЫ

1. E

2. O

3. I

4. C

5. M

6. D

7. H

8. L

9. B

10. N

11. A

12. J

13. G

14. K

15. F

16. P

A. 6:05

B. 1:30

C. 6:00

D. 6:35

E. 12:00

F. 2:10

G. 12:30

H. 10:50

I. 1:05

J. 8:45

K. 8:50

L. 5:50

M. 6:25

N. 10:55

O. 11:05

P. 6:15