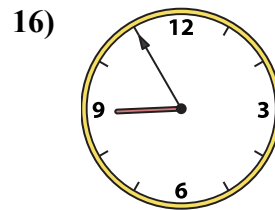
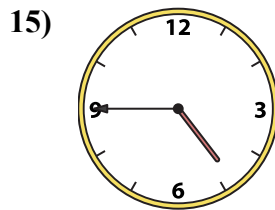
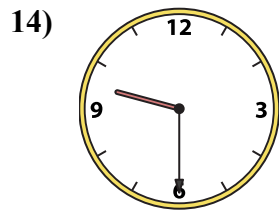
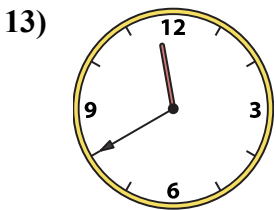
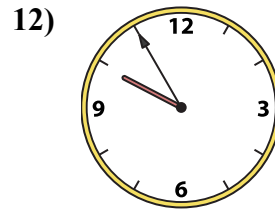
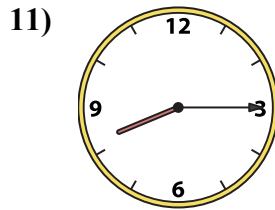
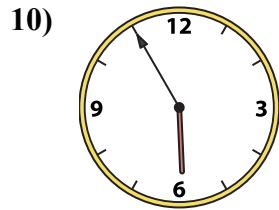
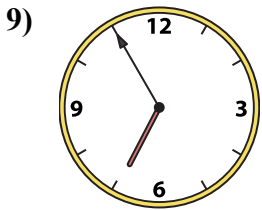
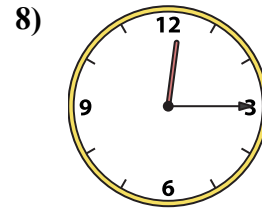
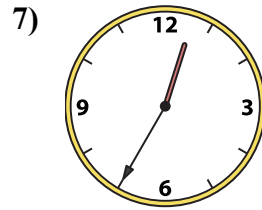
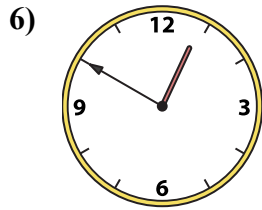
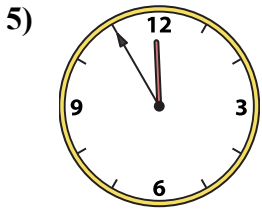
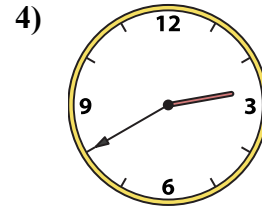
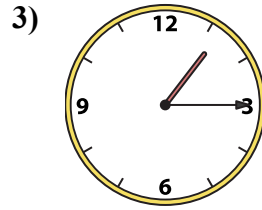
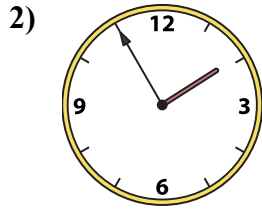
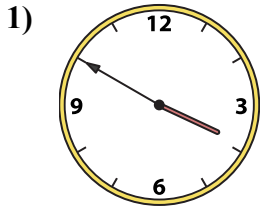




Подберите соответствующие часы к цифровым циферблатам снизу.

ОТВЕТЫ



A. 9:55

B. 5:55

C. 4:45

D. 11:40

E. 3:50

F. 1:55

G. 8:15

H. 1:15

I. 6:55

J. 8:55

K. 9:30

L. 12:50

M. 11:55

N. 12:15

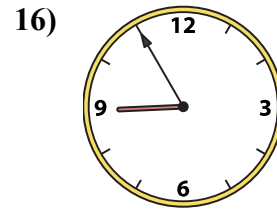
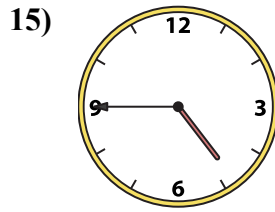
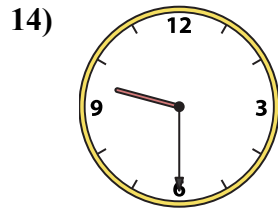
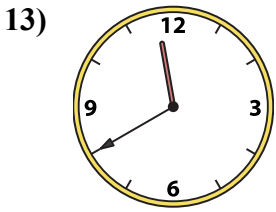
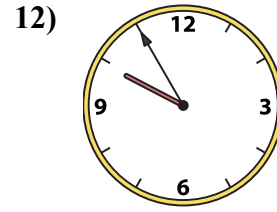
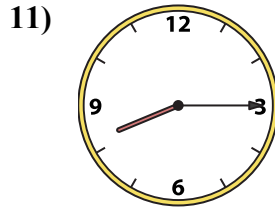
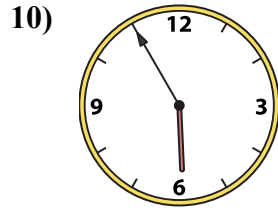
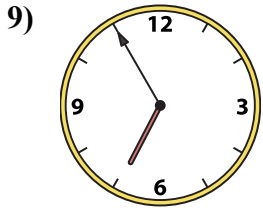
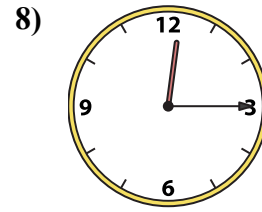
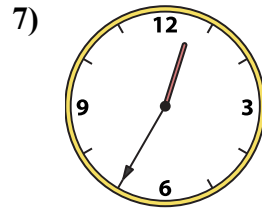
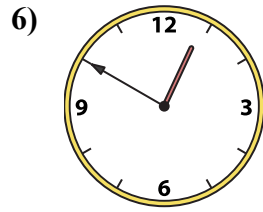
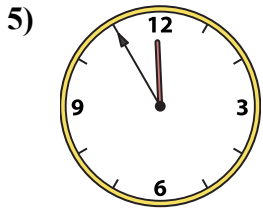
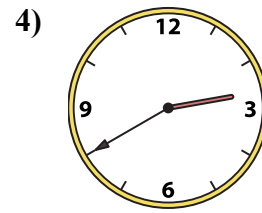
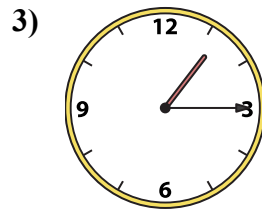
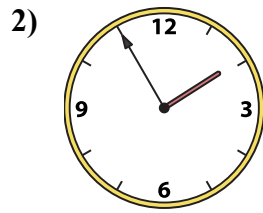
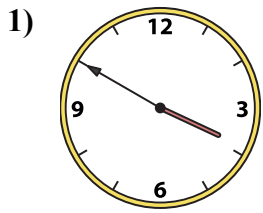
O. 12:35

P. 2:40

1. _____
2. _____
3. _____
4. _____
5. _____
6. _____
7. _____
8. _____
9. _____
10. _____
11. _____
12. _____
13. _____
14. _____
15. _____
16. _____



Подберите соответствующие часы к цифровым циферблатам снизу.



A. 9:55

B. 5:55

C. 4:45

D. 11:40

E. 3:50

F. 1:55

G. 8:15

H. 1:15

I. 6:55

J. 8:55

K. 9:30

L. 12:50

M. 11:55

N. 12:15

O. 12:35

P. 2:40

ОТВЕТЫ

1. E

2. F

3. H

4. P

5. M

6. L

7. O

8. N

9. I

10. B

11. G

12. A

13. D

14. K

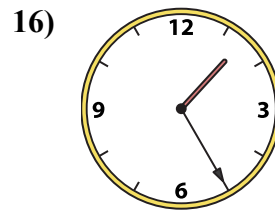
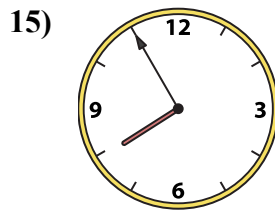
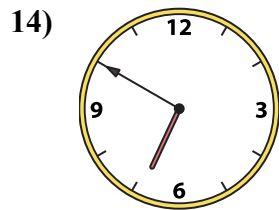
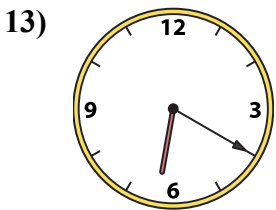
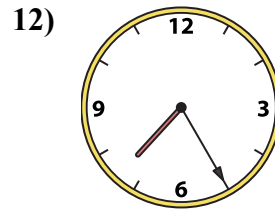
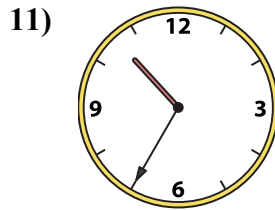
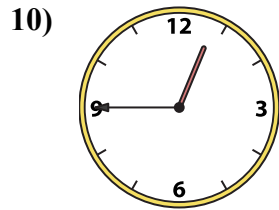
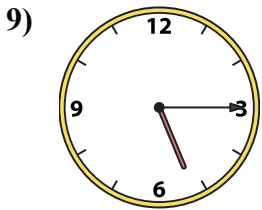
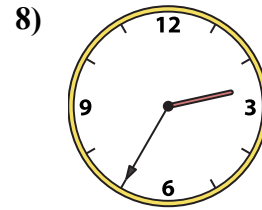
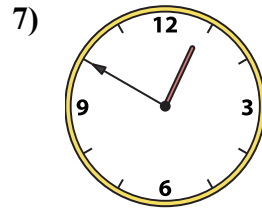
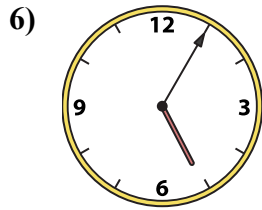
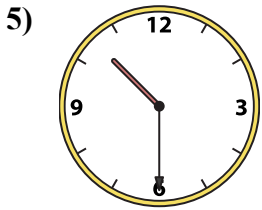
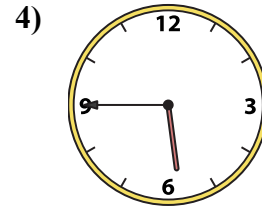
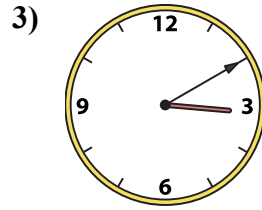
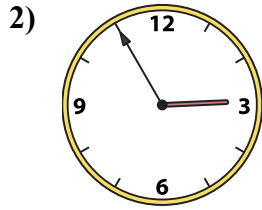
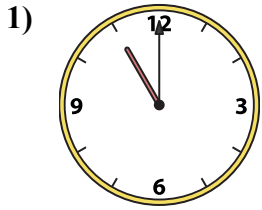
15. C

16. J



Подберите соответствующие часы к цифровым циферблатам снизу.

ОТВЕТЫ



1. _____
2. _____
3. _____
4. _____
5. _____
6. _____
7. _____
8. _____
9. _____
10. _____
11. _____
12. _____
13. _____
14. _____
15. _____
16. _____

A. 2:55

B. 10:30

C. 7:55

D. 6:20

E. 3:10

F. 5:45

G. 2:35

H. 1:25

I. 5:05

J. 10:35

K. 7:25

L. 12:50

M. 5:15



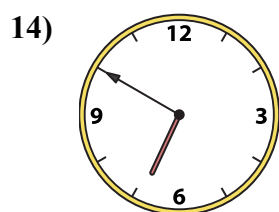
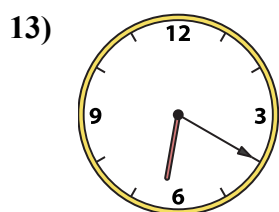
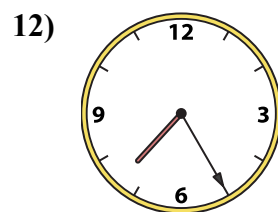
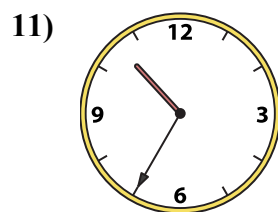
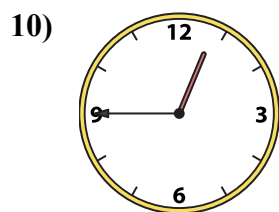
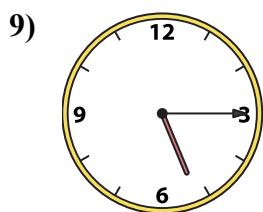
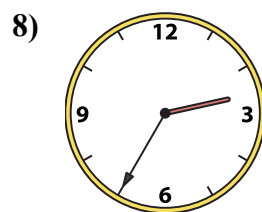
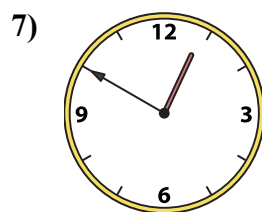
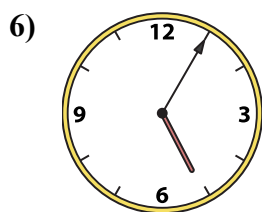
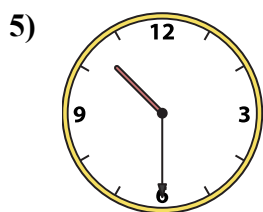
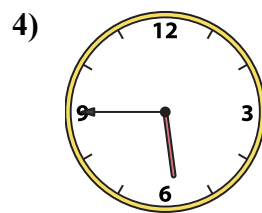
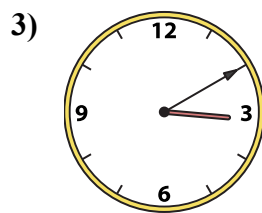
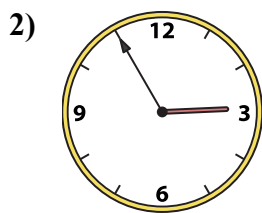
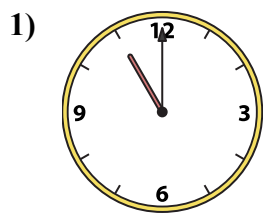
N. 12:45

O. 11:00

P. 6:50



Подберите соответствующие часы к цифровым циферблатам снизу.



A. 2:55

B. 10:30

C. 7:55

D. 6:20

E. 3:10

F. 5:45

G. 2:35

H. 1:25

I. 5:05

J. 10:35

K. 7:25

L. 12:50

M. 5:15

N. 12:45

O. 11:00

P. 6:50

ОТВЕТЫ

1. О

2. А

3. Е

4. F

5. В

6. И

7. L

8. G

9. M

10. N

11. J

12. K

13. D

14. P

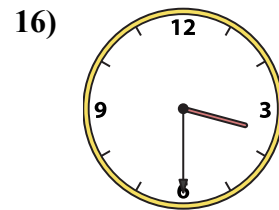
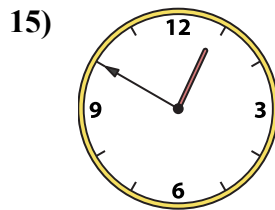
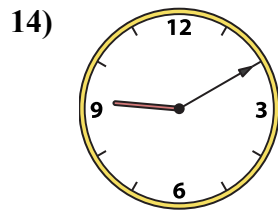
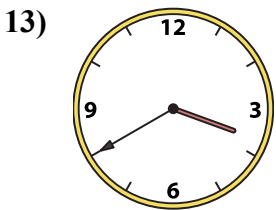
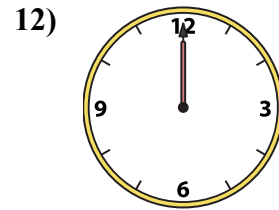
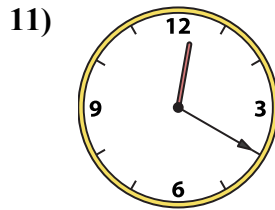
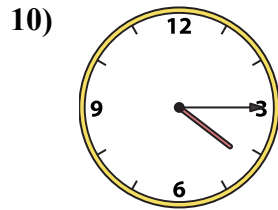
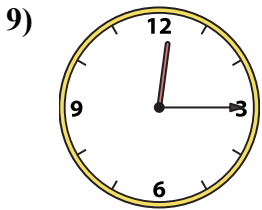
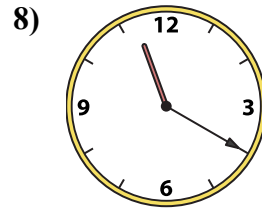
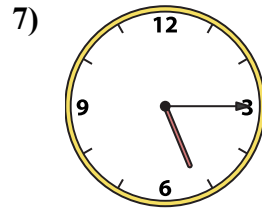
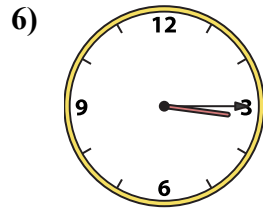
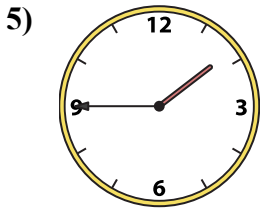
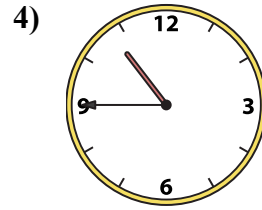
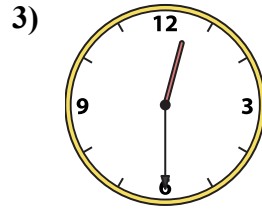
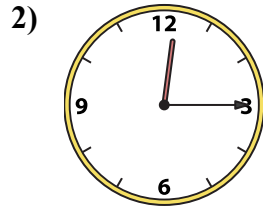
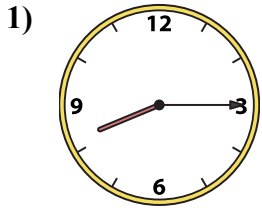
15. C

16. H



Подберите соответствующие часы к цифровым циферблатам снизу.

ОТВЕТЫ



A. 3:40

B. 9:10

C. 12:20

D. 12:15

E. 12:00

F. 12:15

G. 10:45

H. 12:50

I. 8:15

J. 11:20

K. 5:15

L. 1:45

M. 12:30

N. 4:15

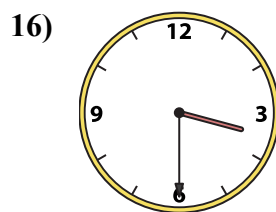
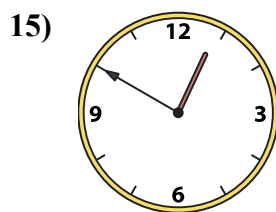
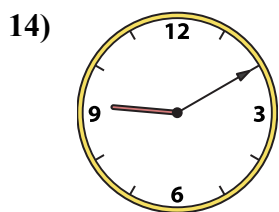
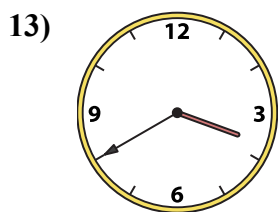
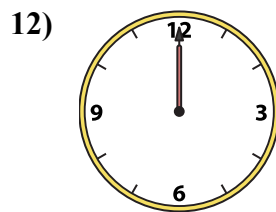
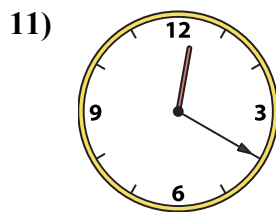
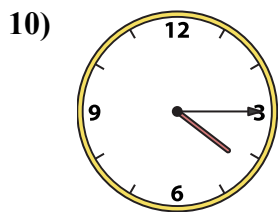
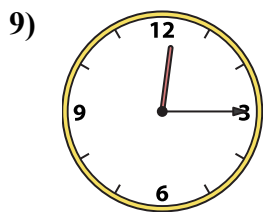

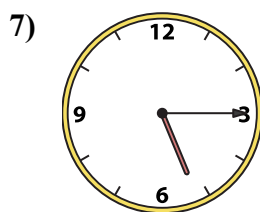
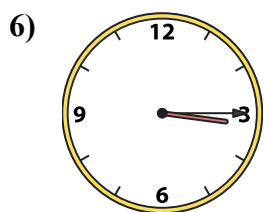
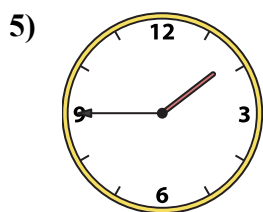
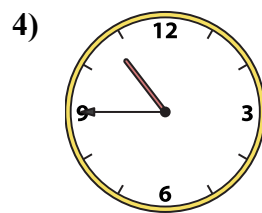
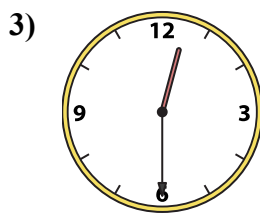
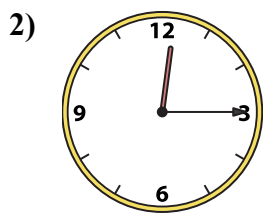
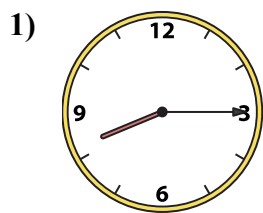
O. 3:30

P. 3:15

1. _____
2. _____
3. _____
4. _____
5. _____
6. _____
7. _____
8. _____
9. _____
10. _____
11. _____
12. _____
13. _____
14. _____
15. _____
16. _____



Подберите соответствующие часы к цифровым циферблатам снизу.



A. 3:40

B. 9:10

C. 12:20

D. 12:15

E. 12:00

F. 12:15

G. 10:45

H. 12:50

I. 8:15

J. 11:20

K. 5:15

L. 1:45

M. 12:30

N. 4:15

O. 3:30

P. 3:15

ОТВЕТЫ

1. I

2. D

3. M

4. G

5. L

6. P

7. K

8. J

9. F

10. N

11. C

12. E

13. A

14. B

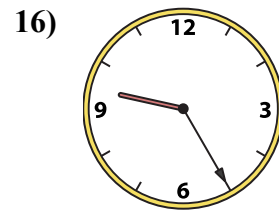
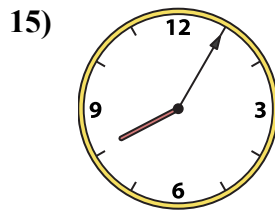
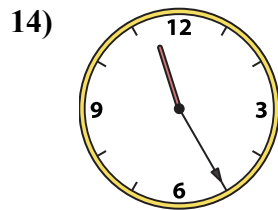
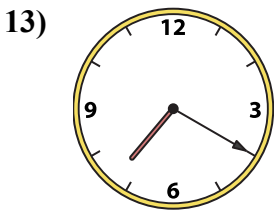
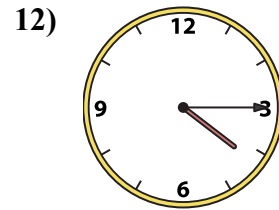
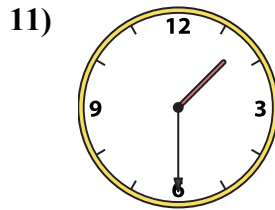
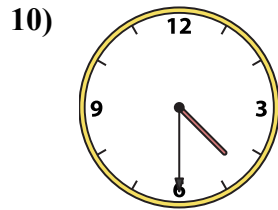
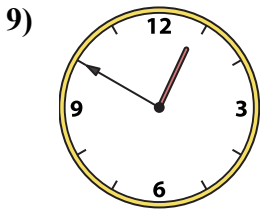
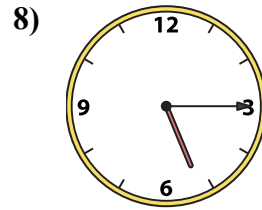
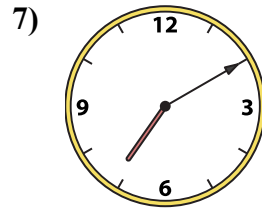
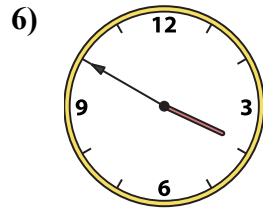
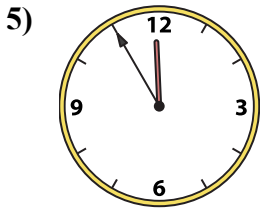
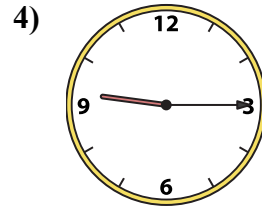
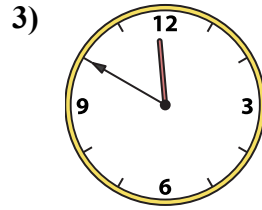
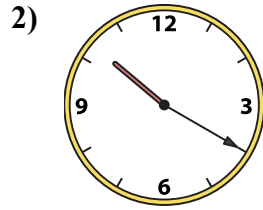
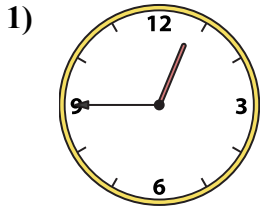
15. H

16. O



Подберите соответствующие часы к цифровым циферблатам снизу.

ОТВЕТЫ



1. _____
2. _____
3. _____
4. _____
5. _____
6. _____
7. _____
8. _____
9. _____
10. _____
11. _____
12. _____
13. _____
14. _____
15. _____
16. _____

A. 11:55

B. 9:25

C. 11:50

D. 3:50

E. 12:45

F. 1:30

G. 11:25

H. 7:10

I. 4:30

J. 5:15

K. 7:20

L. 10:20

M. 9:15

N. 12:50

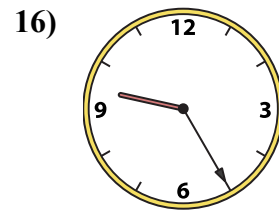
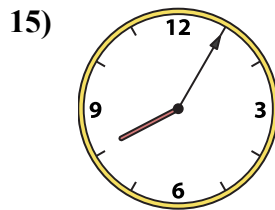
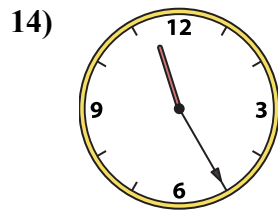
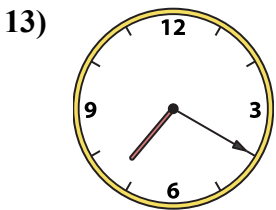
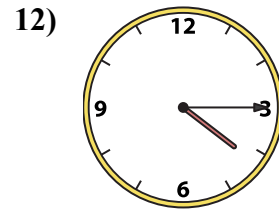
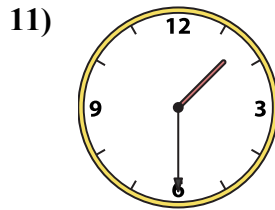
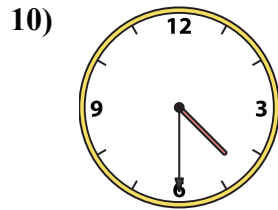
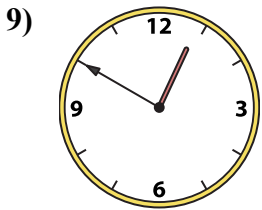
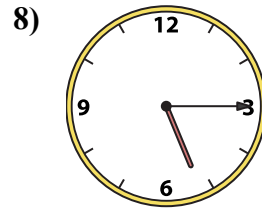
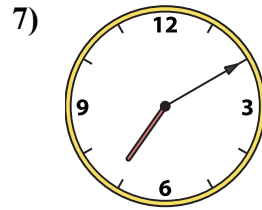
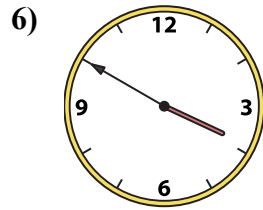
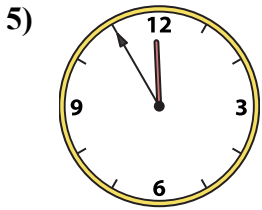
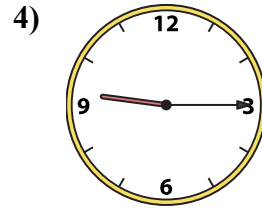
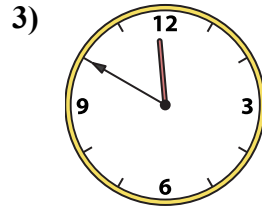
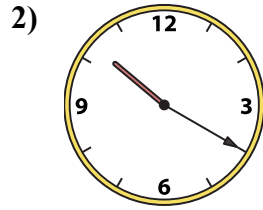
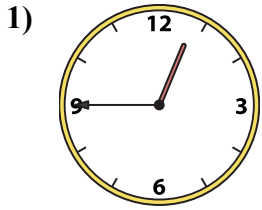
O. 4:15

P. 8:05



Подберите соответствующие часы к цифровым циферблатам снизу.

ОТВЕТЫ



A. 11:55

B. 9:25

C. 11:50

D. 3:50

E. 12:45

F. 1:30

G. 11:25

H. 7:10

I. 4:30

J. 5:15

K. 7:20

L. 10:20

M. 9:15

N. 12:50

O. 4:15

P. 8:05

1. E

2. L

3. C

4. M

5. A

6. D

7. H

8. J

9. N

10. I

11. F

12. O

13. K

14. G

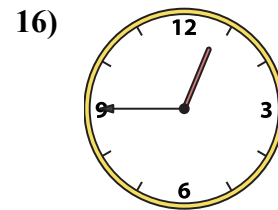
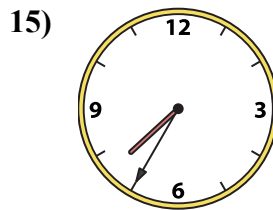
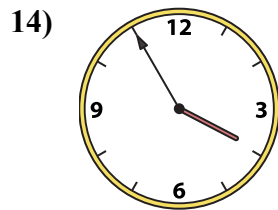
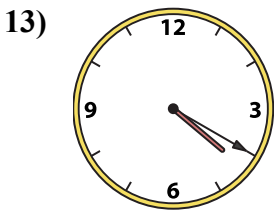
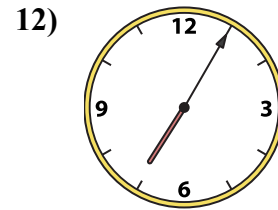
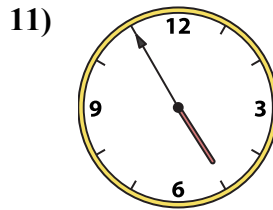
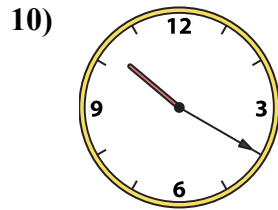
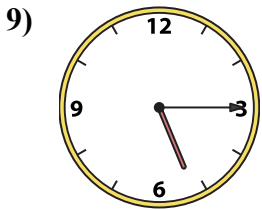
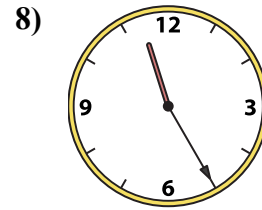
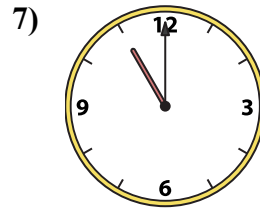
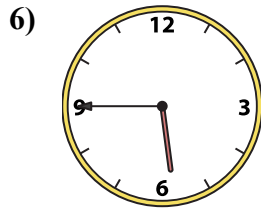
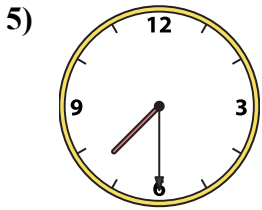
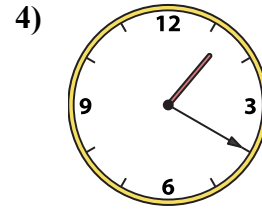
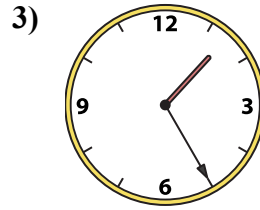
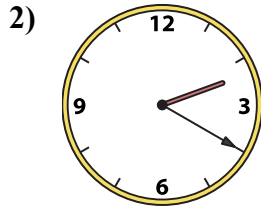
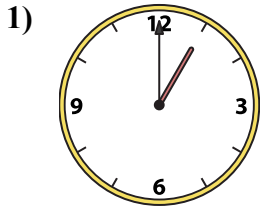
15. P

16. B



Подберите соответствующие часы к цифровым циферблатам снизу.

ОТВЕТЫ



1. _____
2. _____
3. _____
4. _____
5. _____
6. _____
7. _____
8. _____
9. _____
10. _____
11. _____
12. _____
13. _____
14. _____
15. _____
16. _____

A. 11:00

B. 1:20

C. 11:25

D. 5:15

E. 4:55

F. 4:20

G. 3:55

H. 5:45

I. 7:30

J. 1:00

K. 1:25

L. 12:45

M. 7:35


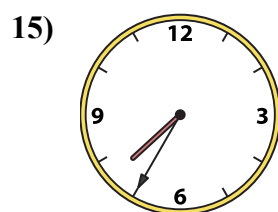
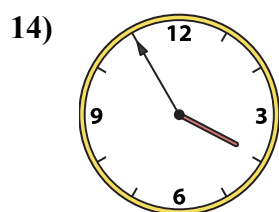
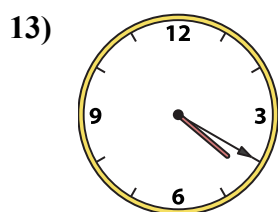
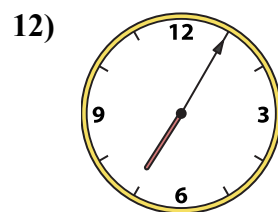
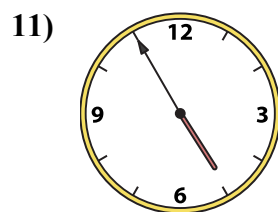
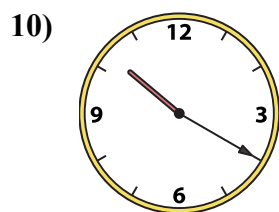
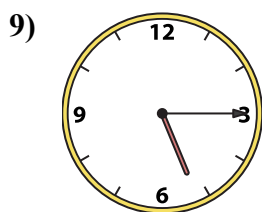

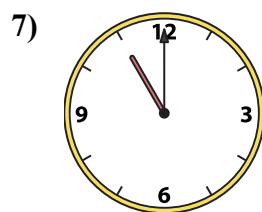
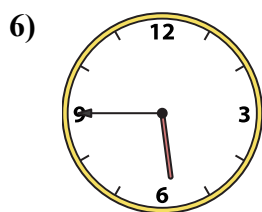
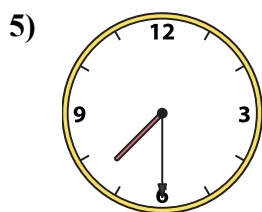
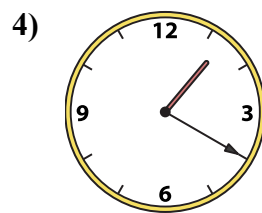
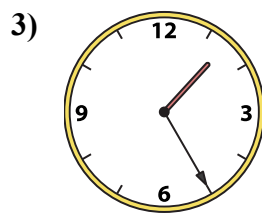
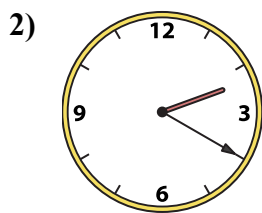
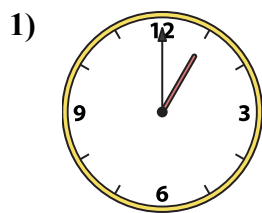
N. 2:20

O. 10:20

P. 7:05



Подберите соответствующие часы к цифровым циферблатам снизу.



ОТВЕТЫ

1. **J**

2. **N**

3. **K**

4. **B**

5. **I**

6. **H**

7. **A**

8. **C**

9. **D**

10. **O**

11. **E**

12. **P**

13. **F**

14. **G**

15. **M**

16. **L**

A. 11:00

B. 1:20

C. 11:25

D. 5:15

E. 4:55

F. 4:20

G. 3:55

H. 5:45

I. 7:30

J. 1:00

K. 1:25

L. 12:45

M. 7:35

N. 2:20

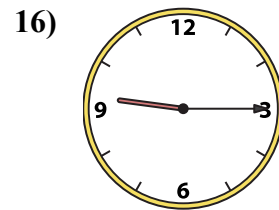
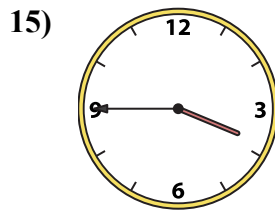
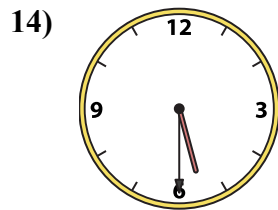
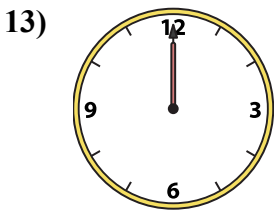
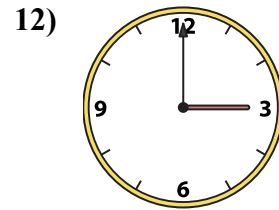
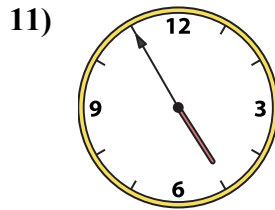
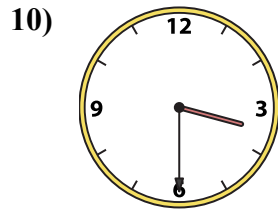
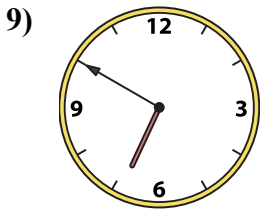
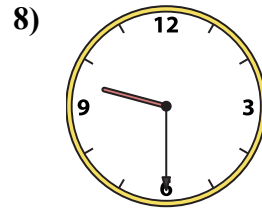
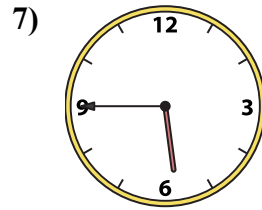
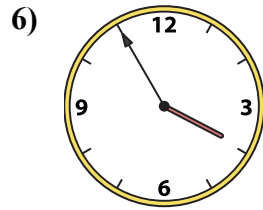
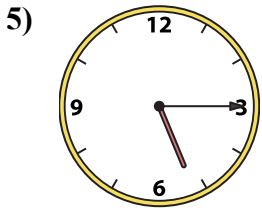
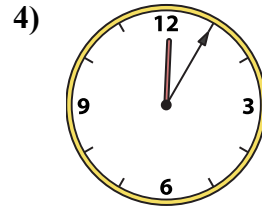
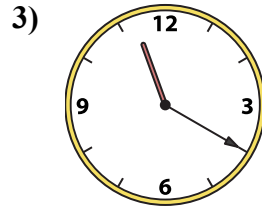
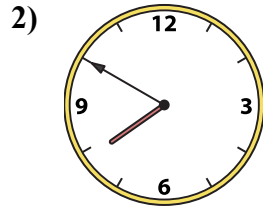

O. 10:20

P. 7:05



Подберите соответствующие часы к цифровым циферблатам снизу.

ОТВЕТЫ



1. _____
2. _____
3. _____
4. _____
5. _____
6. _____
7. _____
8. _____
9. _____
10. _____
11. _____
12. _____
13. _____
14. _____
15. _____
16. _____

A. 5:45

B. 3:00

C. 3:45

D. 12:05

E. 3:30

F. 6:50

G. 7:50

H. 12:00

I. 9:30

J. 3:55

K. 4:55

L. 8:55

M. 5:15

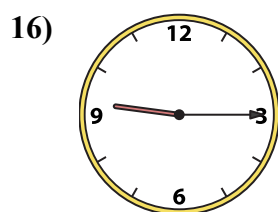
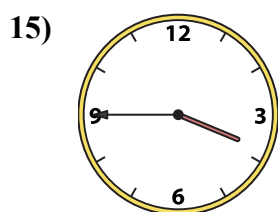
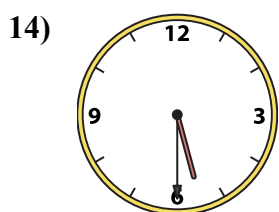
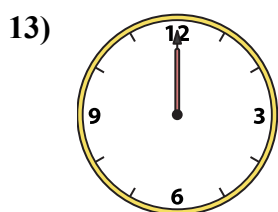
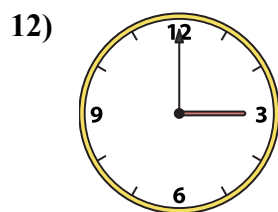
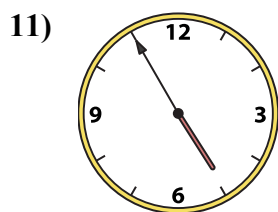
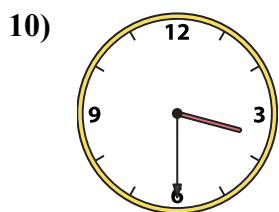
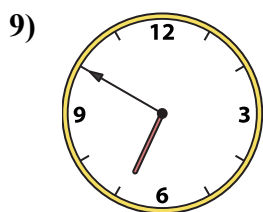
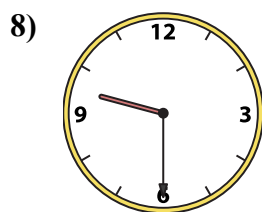
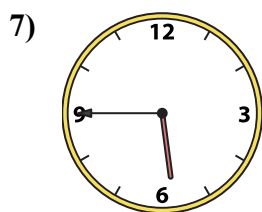
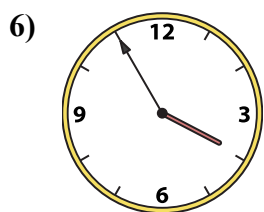
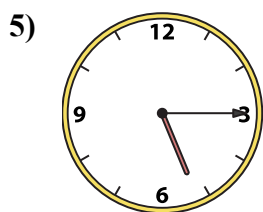
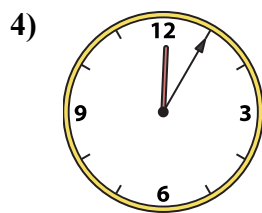
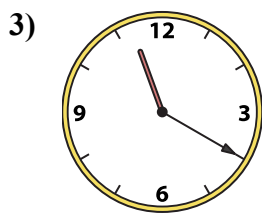
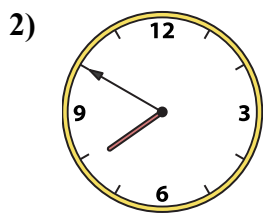
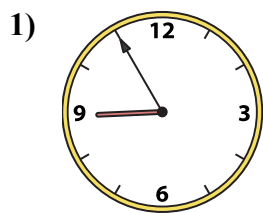
N. 9:15

O. 11:20

P. 5:30



Подберите соответствующие часы к цифровым циферблатам снизу.



A. 5:45

B. 3:00

C. 3:45

D. 12:05

E. 3:30

F. 6:50

G. 7:50

H. 12:00

I. 9:30

J. 3:55

K. 4:55

L. 8:55

M. 5:15

N. 9:15

O. 11:20

P. 5:30

ОТВЕТЫ

1. L

2. G

3. O

4. D

5. M

6. J

7. A

8. I

9. F

10. E

11. K

12. B

13. H

14. P

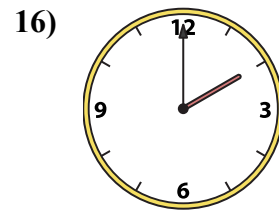
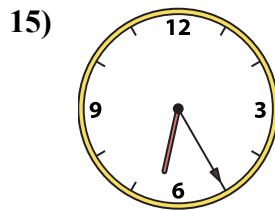
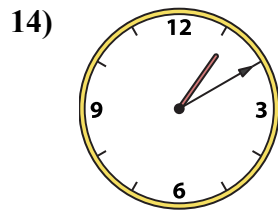
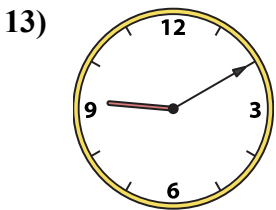
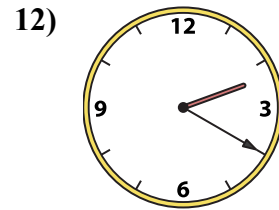
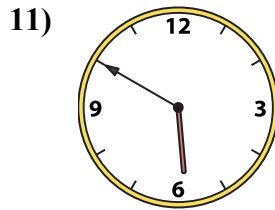
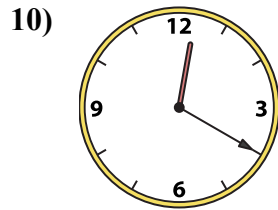
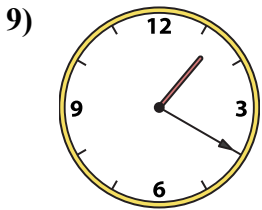
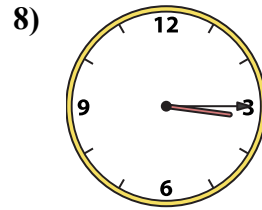
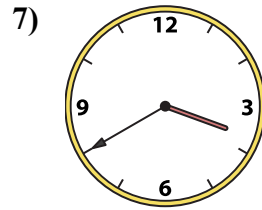
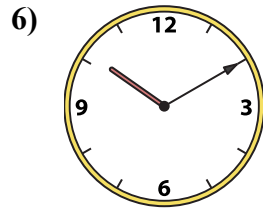
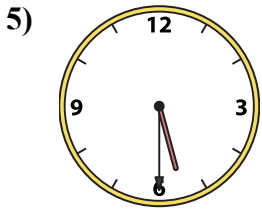
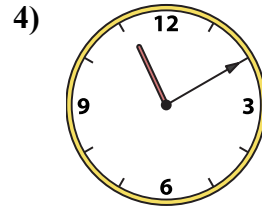
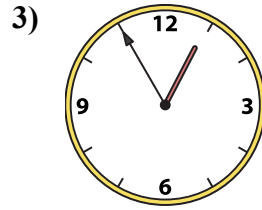
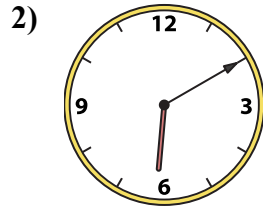
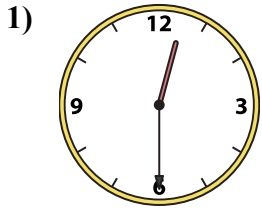
15. C

16. N



Подберите соответствующие часы к цифровым циферблатам снизу.

ОТВЕТЫ



1. _____
2. _____
3. _____
4. _____
5. _____
6. _____
7. _____
8. _____
9. _____
10. _____
11. _____
12. _____
13. _____
14. _____
15. _____
16. _____

A. 10:10

B. 3:40

C. 1:20

D. 12:30

E. 12:20

F. 3:15

G. 1:10

H. 6:10

I. 5:50

J. 2:00

K. 5:30

L. 6:25

M. 12:55

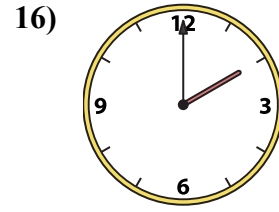
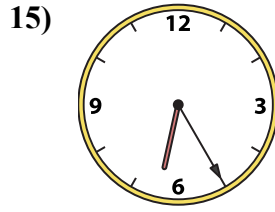
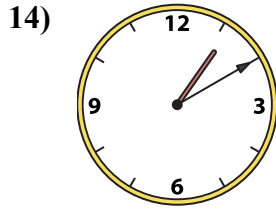
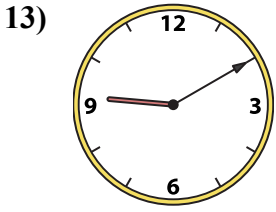
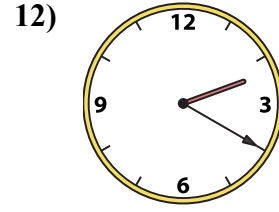
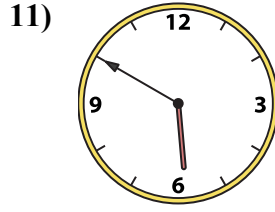
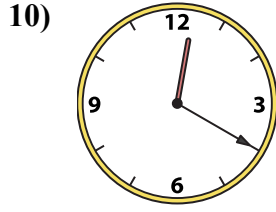
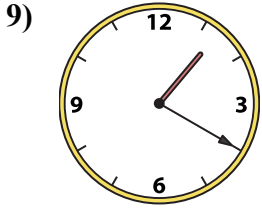
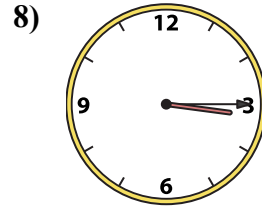
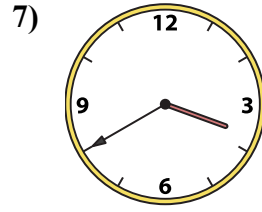
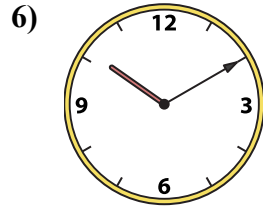
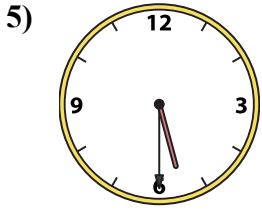
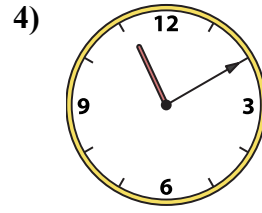
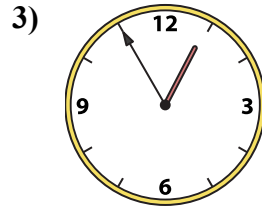
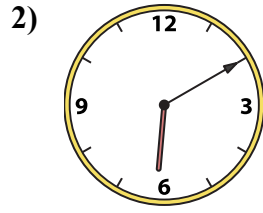
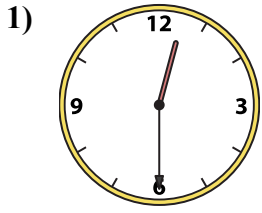
N. 11:10

O. 9:10

P. 2:20



Подберите соответствующие часы к цифровым циферблатам снизу.



ОТВЕТЫ

1. D

2. H

3. M

4. N

5. K

6. A

7. B

8. F

9. C

10. E

11. I

12. P

13. O

14. G

15. L

16. J

A. 10:10

B. 3:40

C. 1:20

D. 12:30

E. 12:20

F. 3:15

G. 1:10

H. 6:10

I. 5:50

J. 2:00

K. 5:30

L. 6:25

M. 12:55

N. 11:10

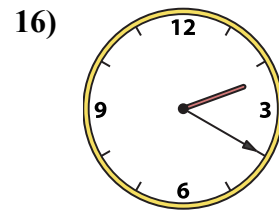
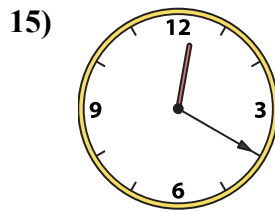
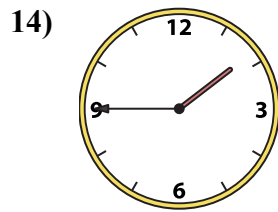
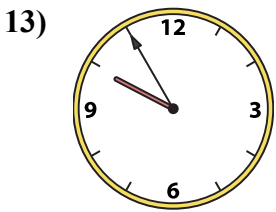
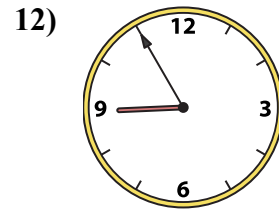
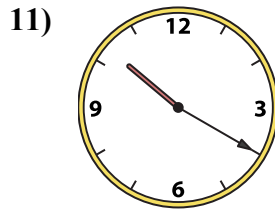
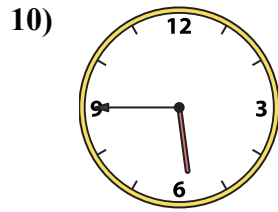
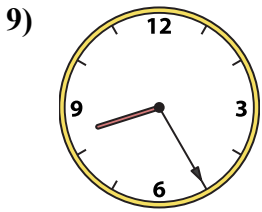
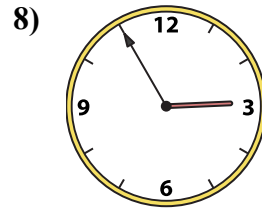
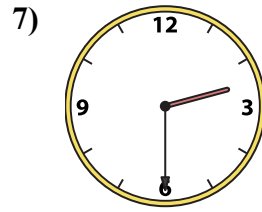
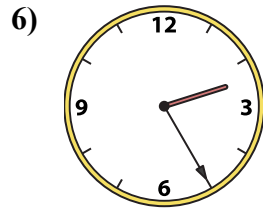
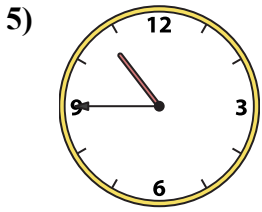
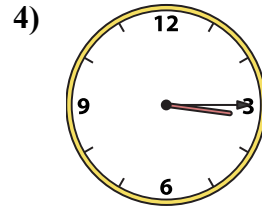
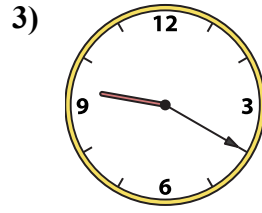
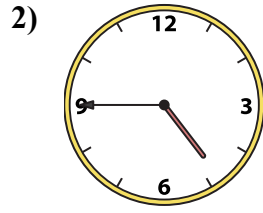
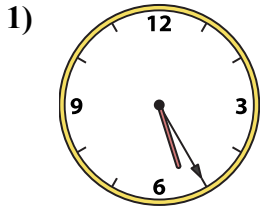
O. 9:10

P. 2:20



Подберите соответствующие часы к цифровым циферблатам снизу.

ОТВЕТЫ



1. _____
2. _____
3. _____
4. _____
5. _____
6. _____
7. _____
8. _____
9. _____
10. _____
11. _____
12. _____
13. _____
14. _____
15. _____
16. _____

A. 12:20

B. 8:25

C. 1:45

D. 3:15

E. 2:55

F. 4:45

G. 2:20

H. 2:25

I. 10:45

J. 9:20

K. 10:20

L. 5:45

M. 2:30

N. 9:55

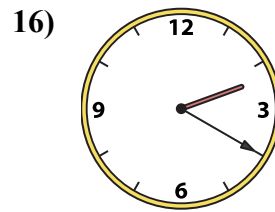
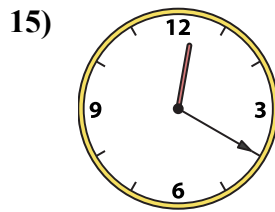
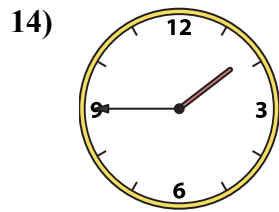
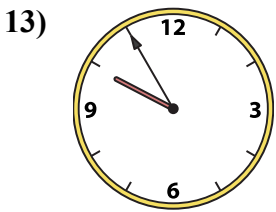
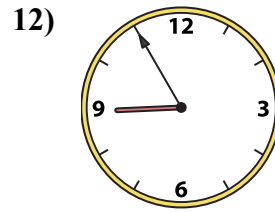
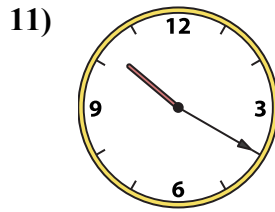
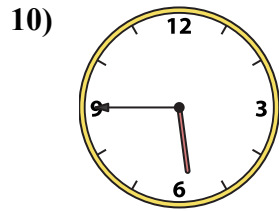
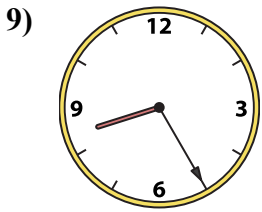
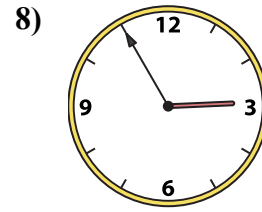
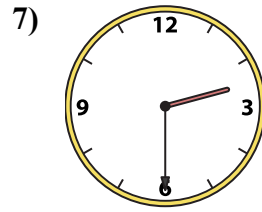
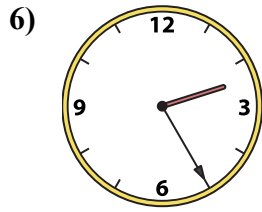
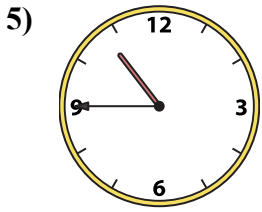
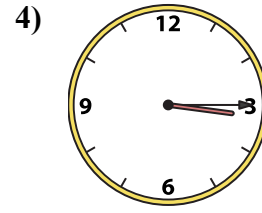
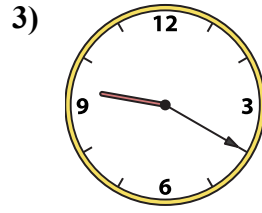
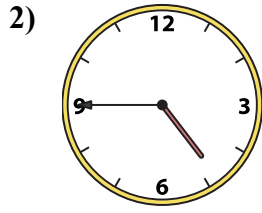
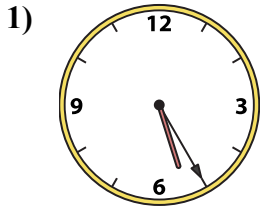
O. 8:55

P. 5:25



Подберите соответствующие часы к цифровым циферблатам снизу.

ОТВЕТЫ



1. P

2. F

3. J

4. D

5. I

6. H

7. M

8. E

9. B

10. L

11. K

12. O

13. N

14. C

15. A

16. G

A. 12:20

B. 8:25

C. 1:45

D. 3:15

E. 2:55

F. 4:45

G. 2:20

H. 2:25

I. 10:45

J. 9:20

K. 10:20

L. 5:45

M. 2:30

N. 9:55

O. 8:55


P. 5:25




Подберите соответствующие часы к цифровым циферблатам снизу.

ОТВЕТЫ


1)




2)



3)




4)




5)




6)




7)



8)




9)



10)




11)



12)




13)




14)



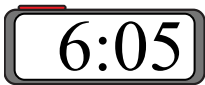
15)



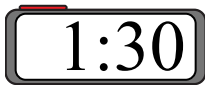
16)



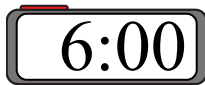
A.



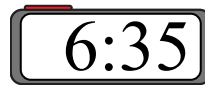
B.



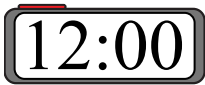
C.



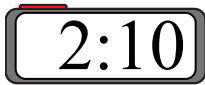
D.



E.



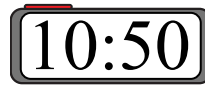
F.



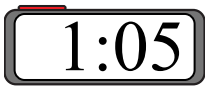
G.



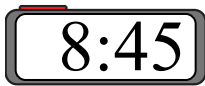
H.



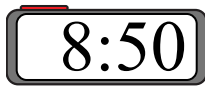
I.



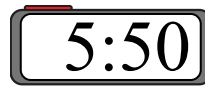
J.



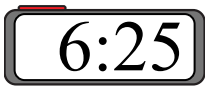
K.



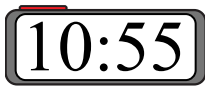
L.



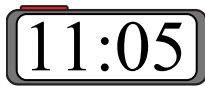
M.



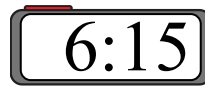
N.



O.



P.



1. _____

2. _____

3. _____

4. _____

5. _____

6. _____

7. _____

8. _____

9. _____

10. _____

11. _____

12. _____

13. _____

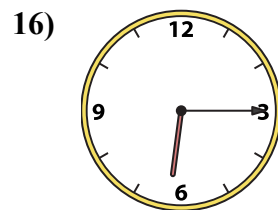
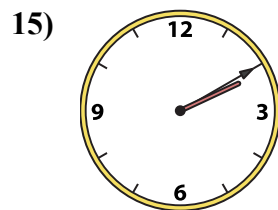
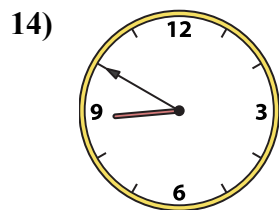
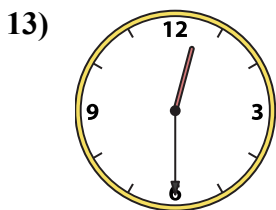
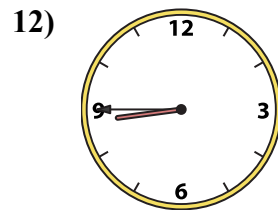
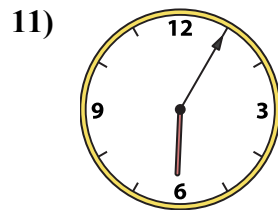
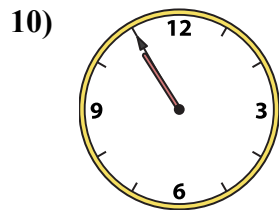
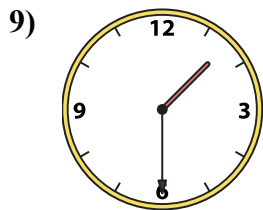
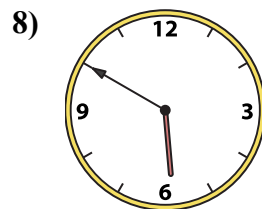
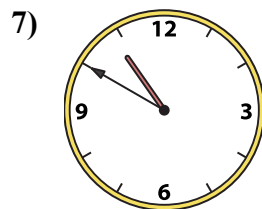
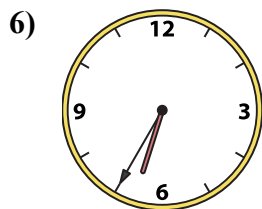
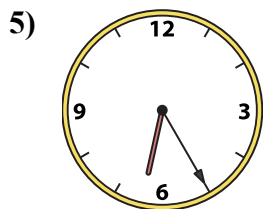
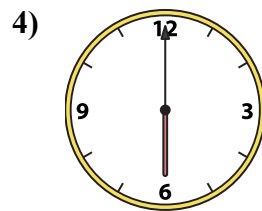
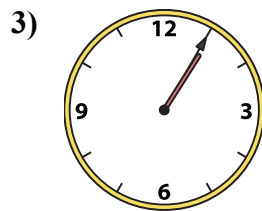
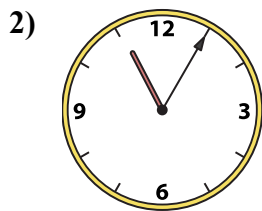
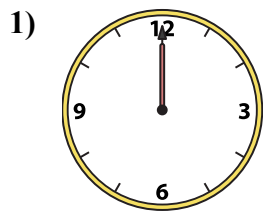
14. _____

15. _____

16. _____



Подберите соответствующие часы к цифровым циферблатам снизу.



ОТВЕТЫ

1. E

2. O

3. I

4. C

5. M

6. D

7. H

8. L

9. B

10. N

11. A

12. J

13. G

14. K

15. F

16. P

A. 6:05

B. 1:30

C. 6:00

D. 6:35

E. 12:00

F. 2:10

G. 12:30

H. 10:50

I. 1:05

J. 8:45

K. 8:50

L. 5:50

M. 6:25

N. 10:55

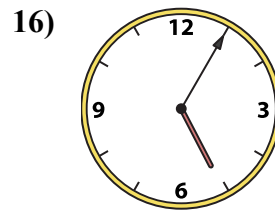
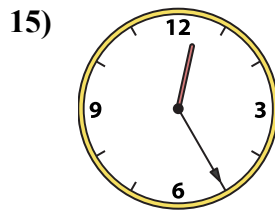
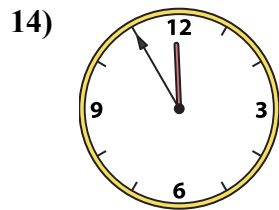
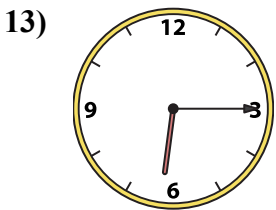
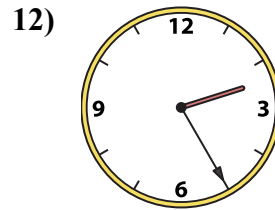
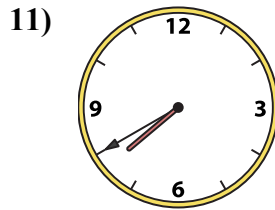
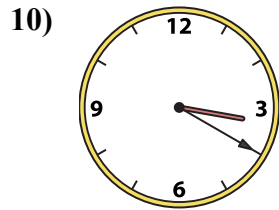
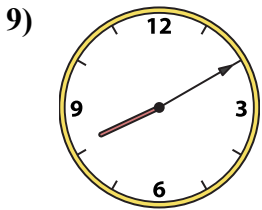
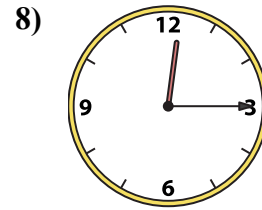
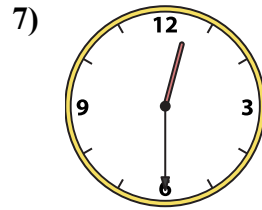
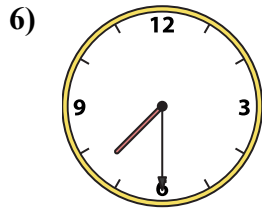
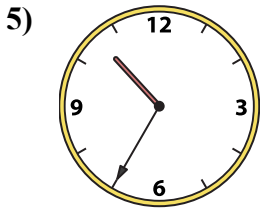
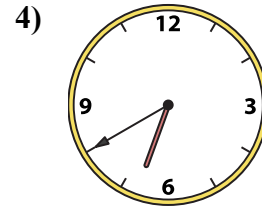
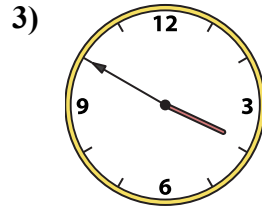
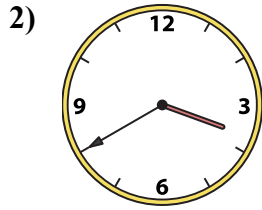
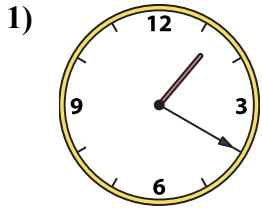
O. 11:05

P. 6:15



Подберите соответствующие часы к цифровым циферблатам снизу.

ОТВЕТЫ



1. _____
2. _____
3. _____
4. _____
5. _____
6. _____
7. _____
8. _____
9. _____
10. _____
11. _____
12. _____
13. _____
14. _____
15. _____
16. _____

A. 10:35

B. 2:25

C. 7:40

D. 12:30

E. 6:40

F. 1:20

G. 12:25

H. 6:15

I. 3:50

J. 3:20

K. 11:55

L. 5:05

M. 7:30

N. 3:40

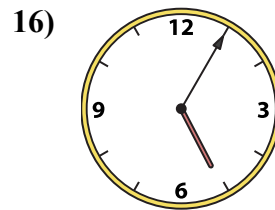
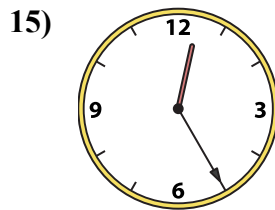
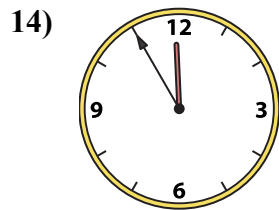
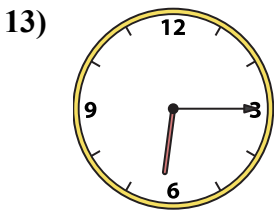
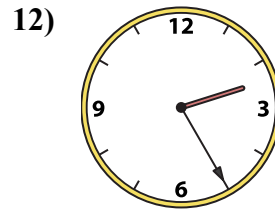
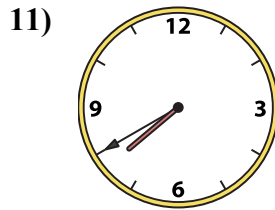
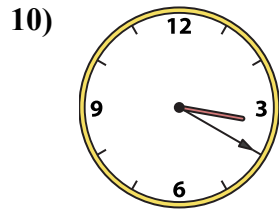
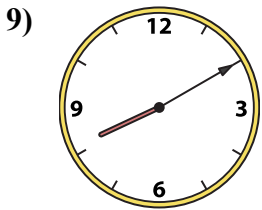
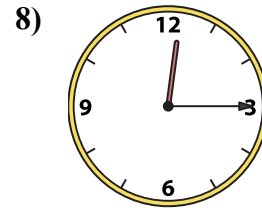
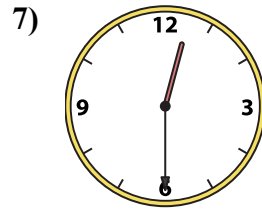
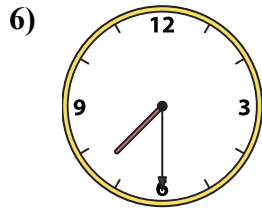
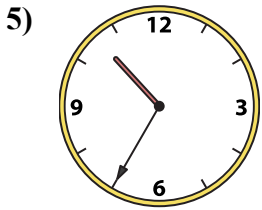
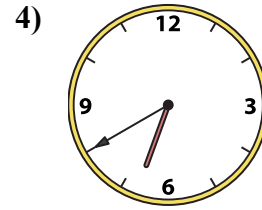
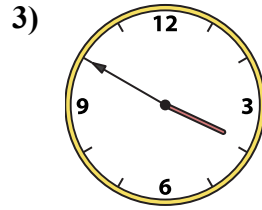
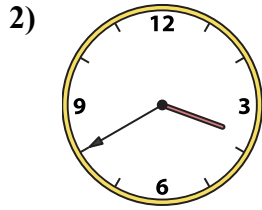
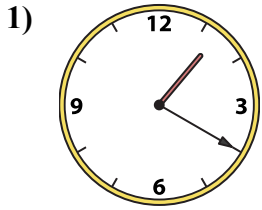
O. 8:10

P. 12:15



Подберите соответствующие часы к цифровым циферблатам снизу.

ОТВЕТЫ



A. 10:35

B. 2:25

C. 7:40

D. 12:30

E. 6:40

F. 1:20

G. 12:25

H. 6:15

I. 3:50

J. 3:20

K. 11:55

L. 5:05

M. 7:30

N. 3:40

O. 8:10

P. 12:15

1. F

2. N

3. I

4. E

5. A

6. M

7. D

8. P

9. O

10. J

11. C

12. B

13. H

14. K

15. G

16. L