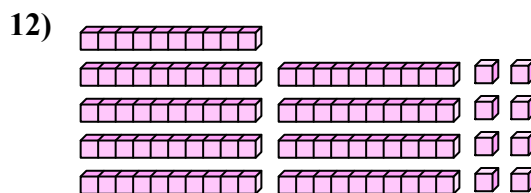
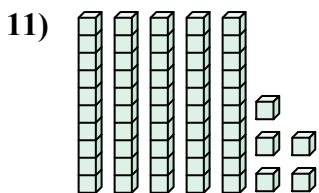
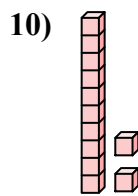
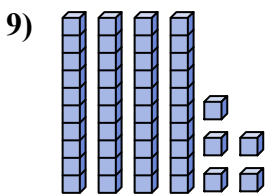
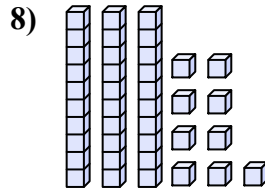
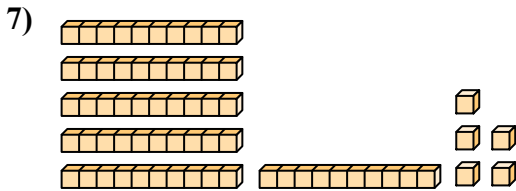
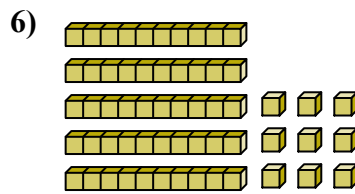
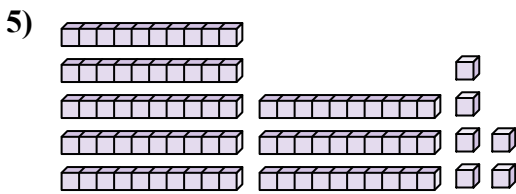

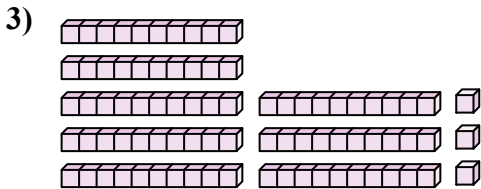
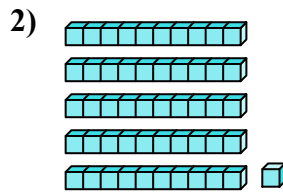





Подсчитайте общее число маленьких блоков.

Ответы



1. _____

2. _____

3. _____

4. _____

5. _____

6. _____

7. _____

8. _____

9. _____

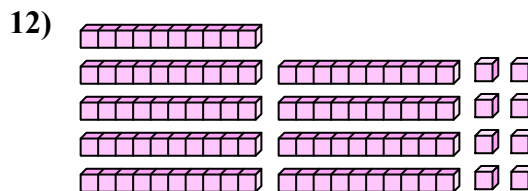
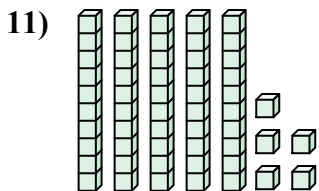
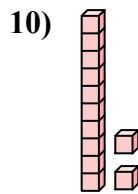
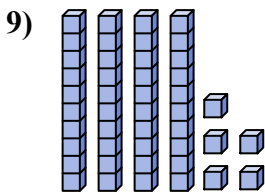
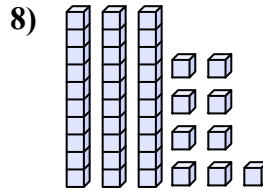
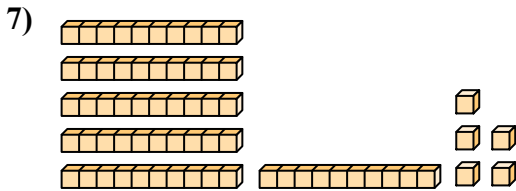
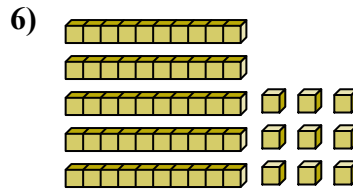
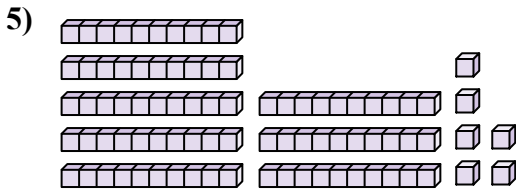

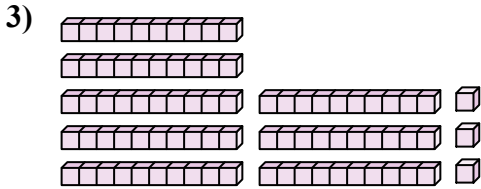
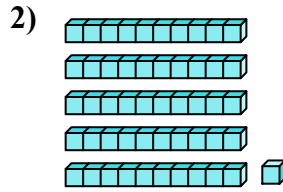
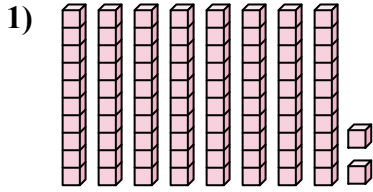
10. _____

11. _____

12. _____



Подсчитайте общее число маленьких блоков.



ОТВЕТЫ

1. 82

2. 51

3. 83

4. 54

5. 86

6. 59

7. 65

8. 39

9. 45

10. 12

11. 55

12. 98



Подсчитайте общее число маленьких блоков.

Ответы

51

45

54

39

65

86

59

82

12

83

- 1. _____
- 2. _____
- 3. _____
- 4. _____
- 5. _____
- 6. _____
- 7. _____
- 8. _____
- 9. _____
- 10. _____

