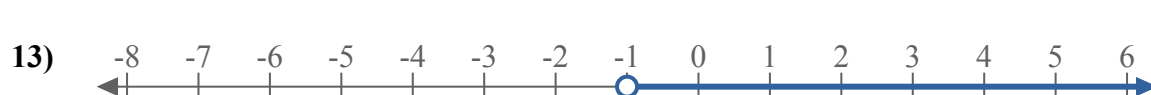
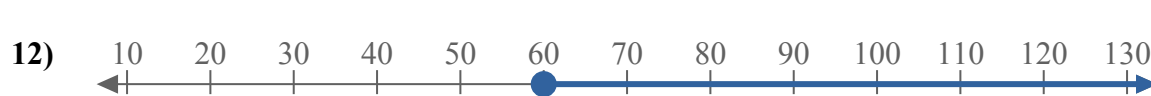
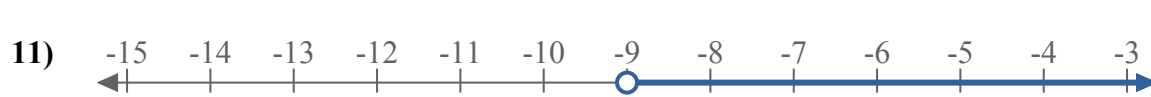
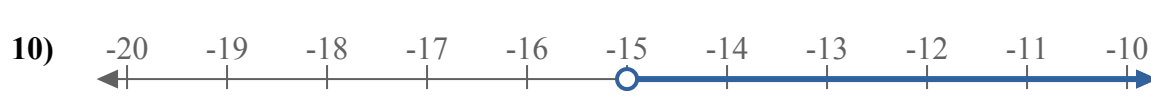
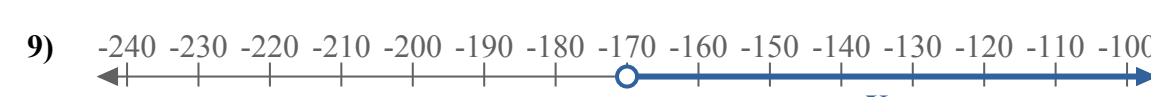
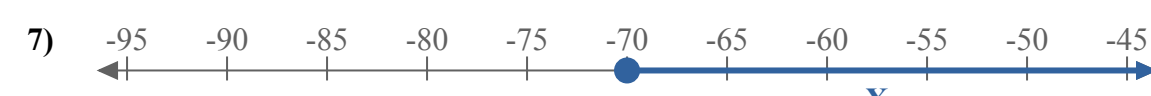




Составьте неравенство, выражающее цифровую прямую.



Ответы

об. $X \geq -3$

1. _____

2. _____

3. _____

4. _____

5. _____

6. _____

7. _____

8. _____

9. _____

10. _____

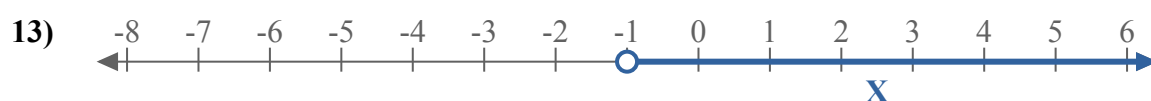
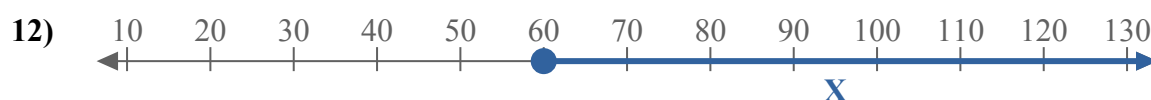
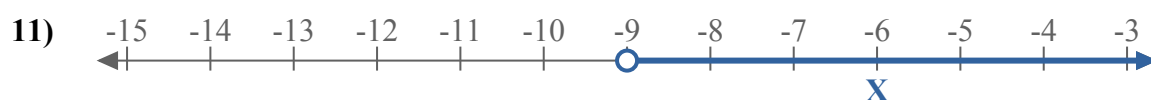
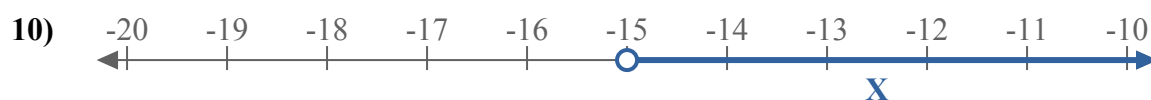
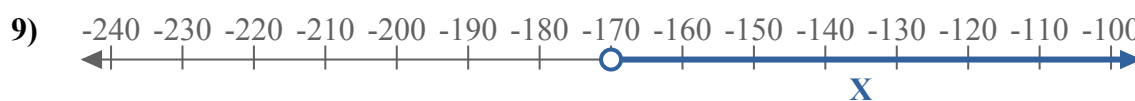
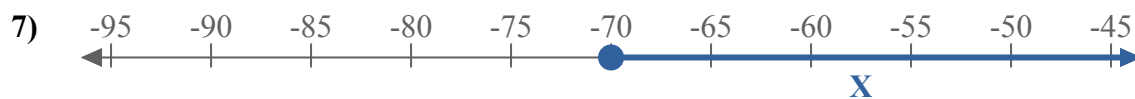
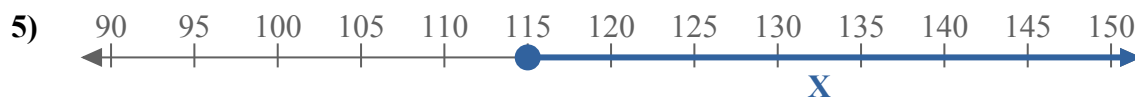
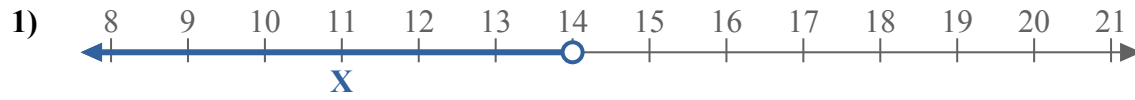
11. _____

12. _____

13. _____



Составьте неравенство, выражающее цифровую прямую.



Ответы

об. $X \geq -3$

1. $X < 14$

2. $X \leq 5$

3. $X \leq -19$

4. $X < -120$

5. $X \geq 115$

6. $X \leq 5$

7. $X \geq -70$

8. $X > 3$

9. $X > -170$

10. $X > -15$

11. $X > -9$

12. $X \geq 60$

13. $X > -1$