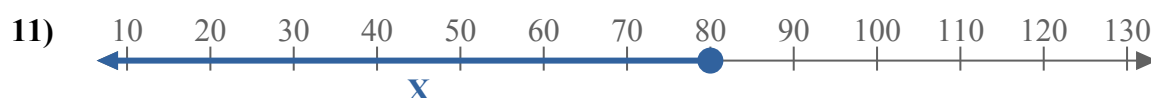
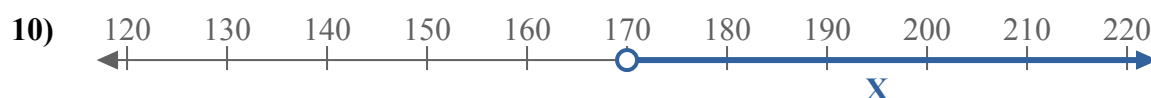
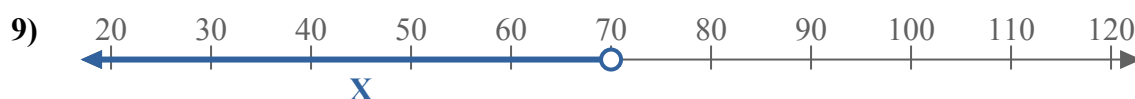
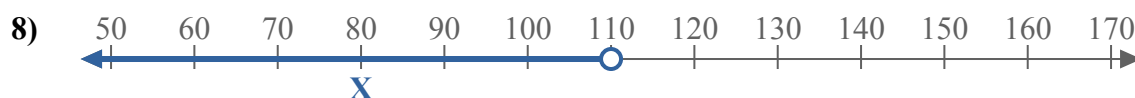
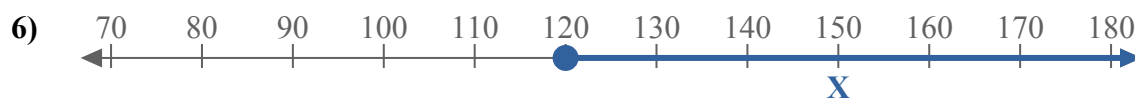
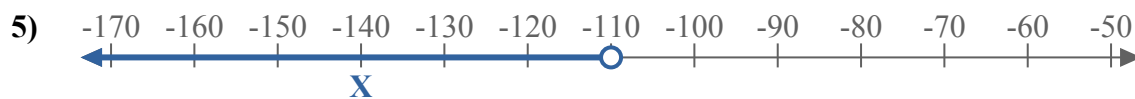
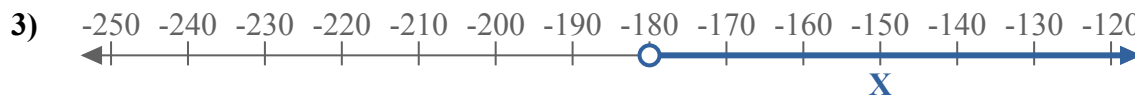
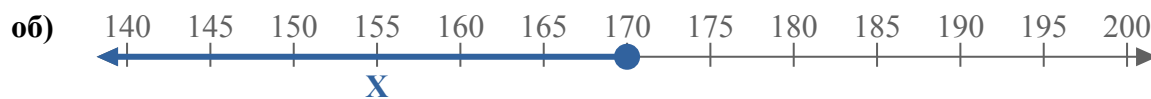




Составьте неравенство, выражающее цифровую прямую.



**Ответы**

об.  $X \leq 170$

1. \_\_\_\_\_

2. \_\_\_\_\_

3. \_\_\_\_\_

4. \_\_\_\_\_

5. \_\_\_\_\_

6. \_\_\_\_\_

7. \_\_\_\_\_

8. \_\_\_\_\_

9. \_\_\_\_\_

10. \_\_\_\_\_

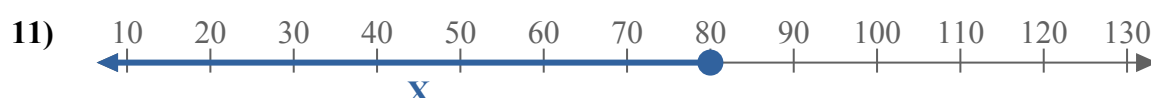
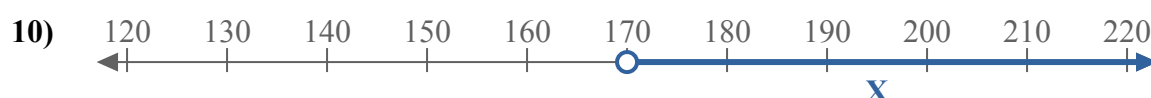
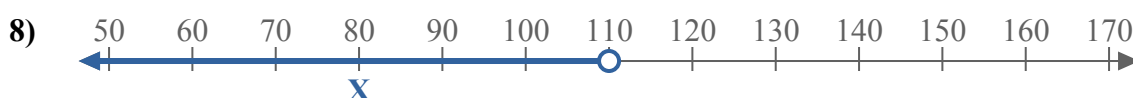
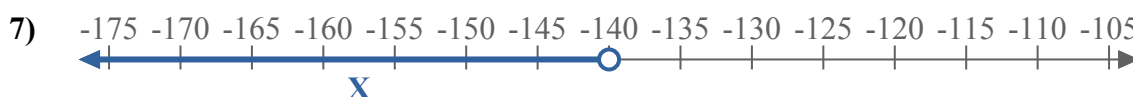
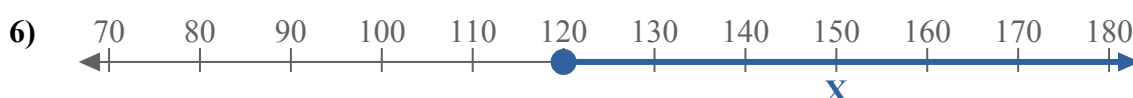
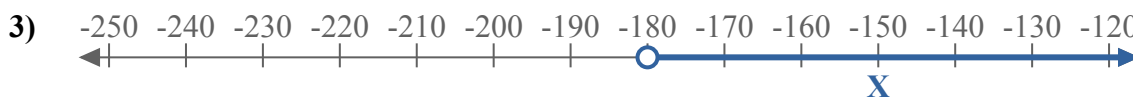
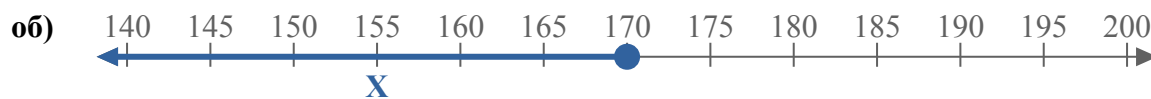
11. \_\_\_\_\_

12. \_\_\_\_\_

13. \_\_\_\_\_



Составьте неравенство, выражающее цифровую прямую.



**Ответы**

об.  $X \leq 170$

1.  $X \leq 2$

2.  $X \leq -75$

3.  $X > -180$

4.  $X \geq -11$

5.  $X < -110$

6.  $X \geq 120$

7.  $X < -140$

8.  $X < 110$

9.  $X < 70$

10.  $X > 170$

11.  $X \leq 80$

12.  $X \geq -80$

13.  $X \geq -18$