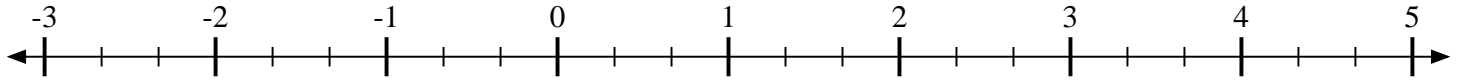


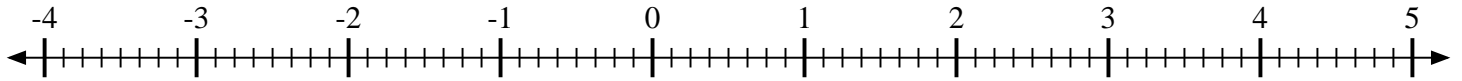


????????? ??????? ???????????????????.

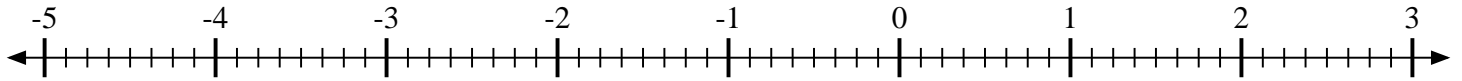
1) ?????????? ?????????? $-2\frac{2}{3}$



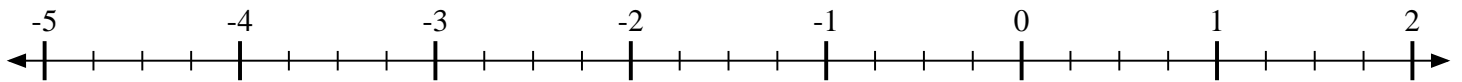
2) ?????????? ?????????? $-2\frac{2}{8}$



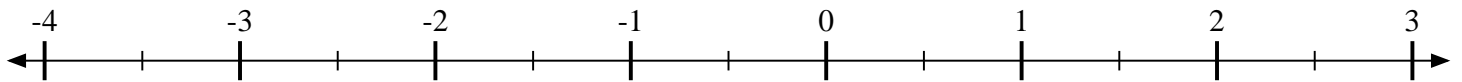
3) ?????????? ?????????? $\frac{1}{8}$



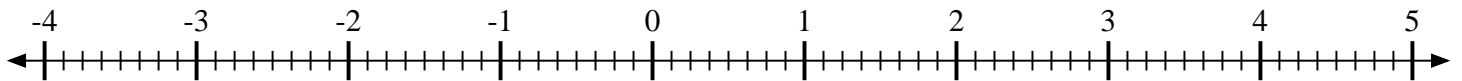
4) ?????????? ?????????? $\frac{2}{4}$



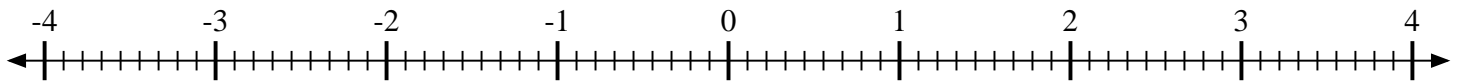
5) ?????????? ?????????? $2\frac{1}{2}$



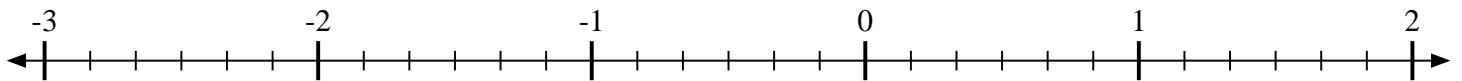
6) ?????????? ?????????? $-3\frac{3}{8}$



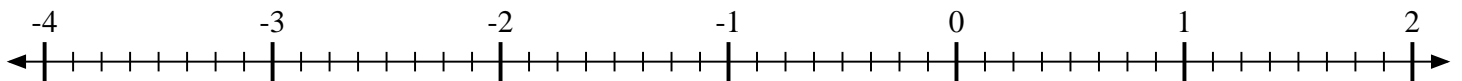
7) ?????????? ?????????? $3\frac{7}{9}$



8) ?????????? ?????????? $\frac{3}{6}$



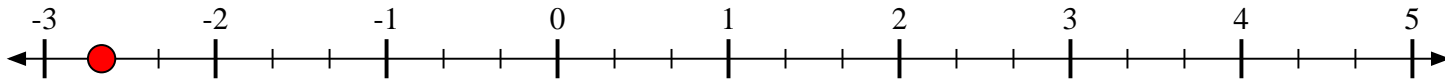
9) ?????????? ?????????? $1\frac{5}{8}$



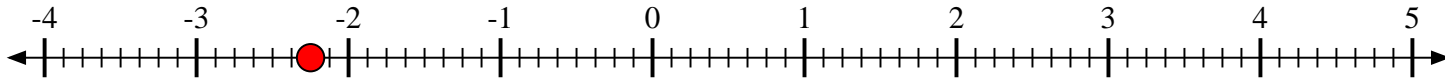


???????? ???? ???? ???? ???? ?

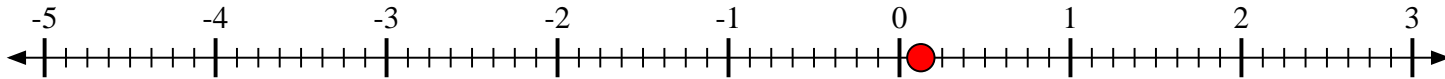
1) ?????? ?????? $-2\frac{2}{3}$



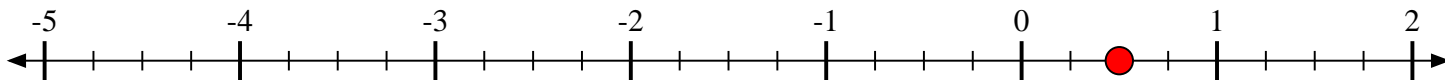
2) ?????? ?????? $-2\frac{2}{8}$



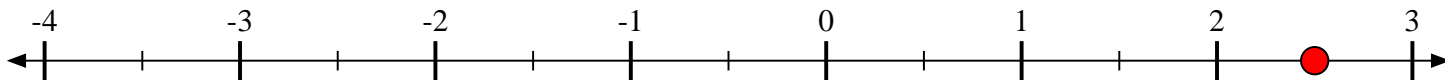
3) ?????? ?????? $\frac{1}{8}$



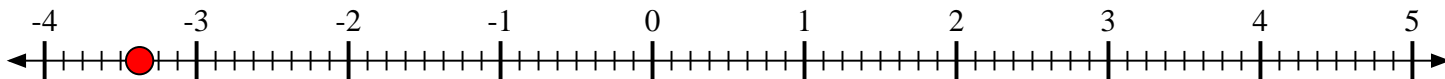
4) ?????? ?????? $\frac{2}{4}$



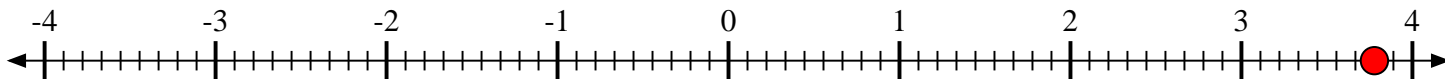
5) ?????? ?????? $2\frac{1}{2}$



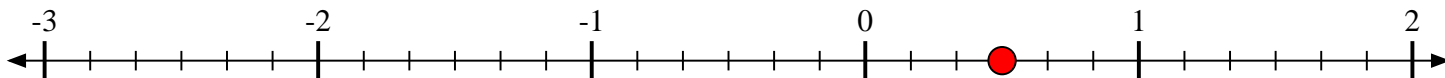
6) ?????? ?????? $-3\frac{3}{8}$



7) ?????? ?????? $3\frac{7}{9}$



8) ?????? ?????? $\frac{3}{6}$



9) ?????? ?????? $1\frac{5}{8}$

