



Решите каждую задачу.

1) $3 + 2 = \underline{\quad}$

2) $5 + 0 = \underline{\quad}$

3) $3 + 1 = \underline{\quad}$

4) $3 + 0 = \underline{\quad}$

5) $2 + 0 = \underline{\quad}$

6) $4 + 0 = \underline{\quad}$

7) $1 + 3 = \underline{\quad}$

8) $1 + 4 = \underline{\quad}$

9) $3 - 3 = \underline{\quad}$

10) $4 - 3 = \underline{\quad}$

11) $5 - 2 = \underline{\quad}$

12) $4 - 1 = \underline{\quad}$

13) $5 - 4 = \underline{\quad}$

14) $5 - 3 = \underline{\quad}$

15) $4 - 2 = \underline{\quad}$

16) $3 - 2 = \underline{\quad}$

Отвeты

1. _____

2. _____

3. _____

4. _____

5. _____

6. _____

7. _____

8. _____

9. _____

10. _____

11. _____

12. _____

13. _____

14. _____

15. _____

16. _____



Решите каждую задачу.

1) $3 + 2 = \underline{5}$

2) $5 + 0 = \underline{5}$

3) $3 + 1 = \underline{4}$

4) $3 + 0 = \underline{3}$

5) $2 + 0 = \underline{2}$

6) $4 + 0 = \underline{4}$

7) $1 + 3 = \underline{4}$

8) $1 + 4 = \underline{5}$

9) $3 - 3 = \underline{0}$

10) $4 - 3 = \underline{1}$

11) $5 - 2 = \underline{3}$

12) $4 - 1 = \underline{3}$

13) $5 - 4 = \underline{1}$

14) $5 - 3 = \underline{2}$

15) $4 - 2 = \underline{2}$


16) $3 - 2 = \underline{1}$

Ответы1. 52. 53. 44. 35. 26. 47. 48. 59. 010. 111. 312. 313. 114. 215. 216. 1

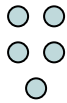


Решите каждую задачу.


1) $3 + 2 = \underline{\quad}$




2) $5 + 0 = \underline{\quad}$




3) $3 + 1 = \underline{\quad}$




4) $3 + 0 = \underline{\quad}$




5) $2 + 0 = \underline{\quad}$



6) $4 + 0 = \underline{\quad}$




7) $1 + 3 = \underline{\quad}$




8) $1 + 4 = \underline{\quad}$



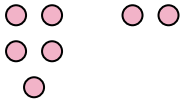
9) $3 - 3 = \underline{\quad}$




10) $4 - 3 = \underline{\quad}$



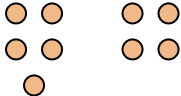
11) $5 - 2 = \underline{\quad}$



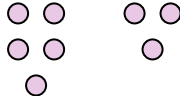
12) $4 - 1 = \underline{\quad}$




13) $5 - 4 = \underline{\quad}$




14) $5 - 3 = \underline{\quad}$



15) $4 - 2 = \underline{\quad}$



16) $3 - 2 = \underline{\quad}$



Ответы

1. _____

2. _____

3. _____

4. _____

5. _____

6. _____

7. _____

8. _____

9. _____

10. _____

11. _____

12. _____

13. _____

14. _____

15. _____

16. _____