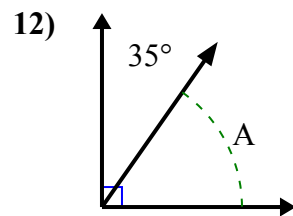
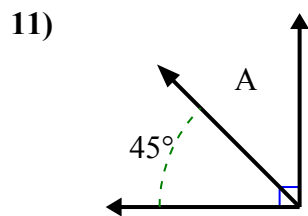
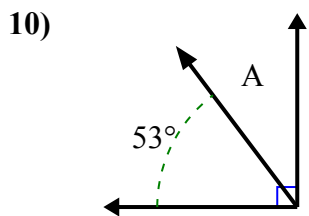
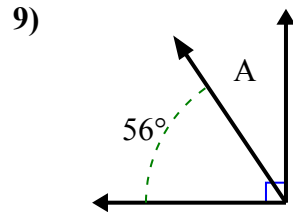
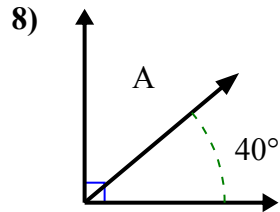
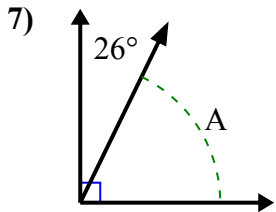
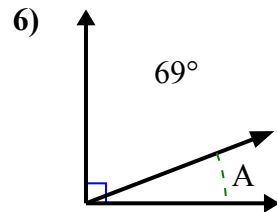
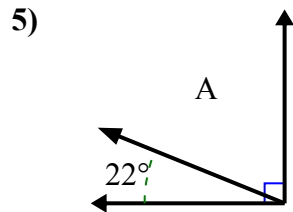
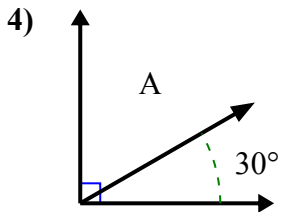
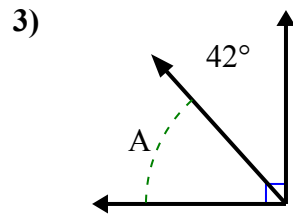
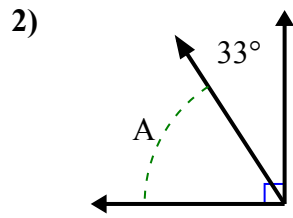
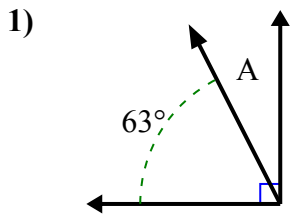




Найдите значение «А» в наборе дополнительных углов.

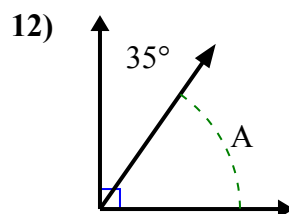
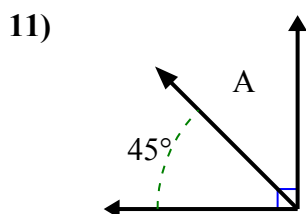
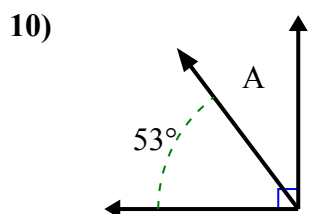
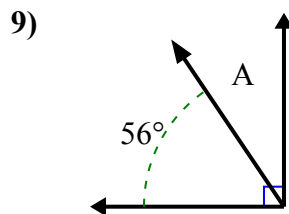
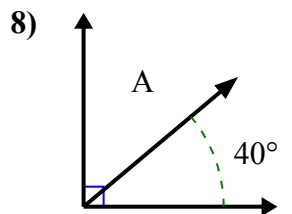
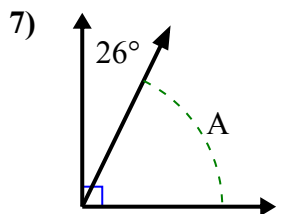
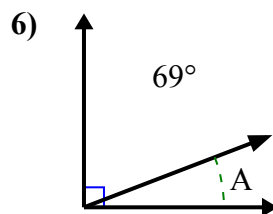
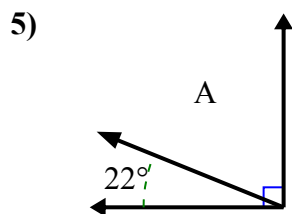
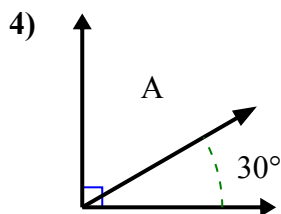
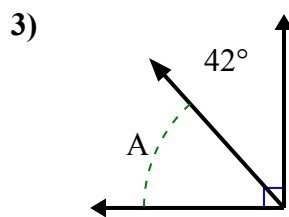
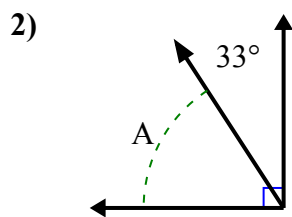
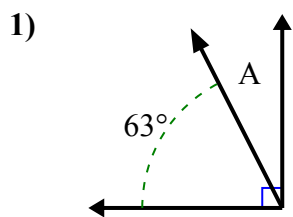


**ОТВЕТЫ**

1. \_\_\_\_\_
2. \_\_\_\_\_
3. \_\_\_\_\_
4. \_\_\_\_\_
5. \_\_\_\_\_
6. \_\_\_\_\_
7. \_\_\_\_\_
8. \_\_\_\_\_
9. \_\_\_\_\_
10. \_\_\_\_\_
11. \_\_\_\_\_
12. \_\_\_\_\_



Найдите значение «А» в наборе дополнительных углов.

Ответы1. 27°2. 57°3. 48°4. 60°5. 68°6. 21°7. 64°8. 50°9. 34°10. 37°11. 45°12. 55°