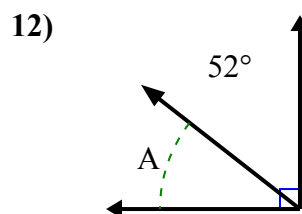
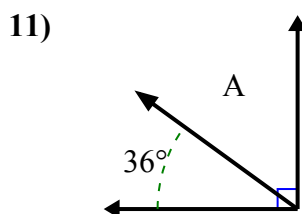
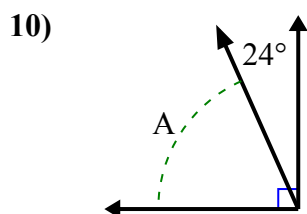
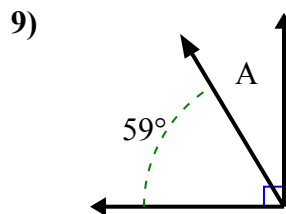
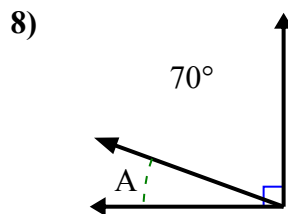
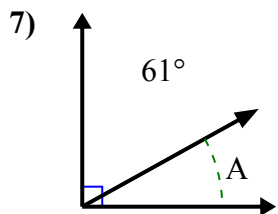
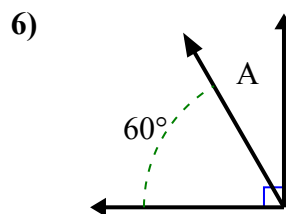
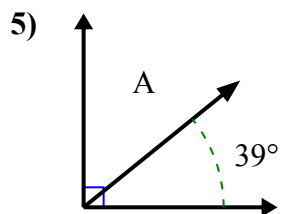
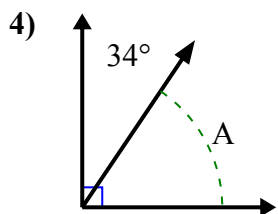
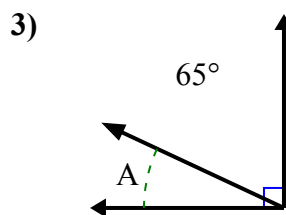
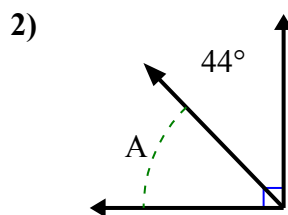
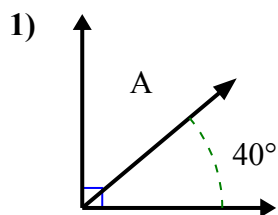




Найдите значение «А» в наборе дополнительных углов.

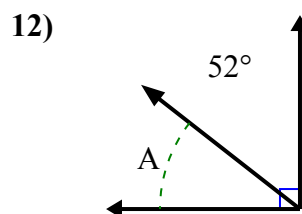
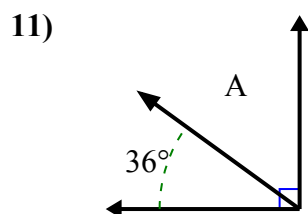
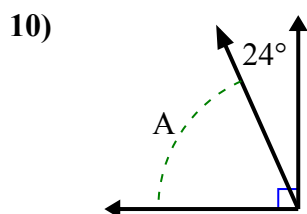
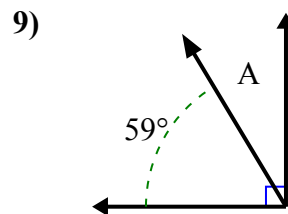
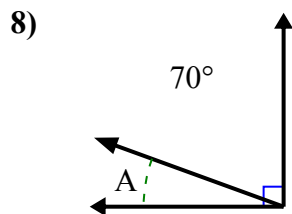
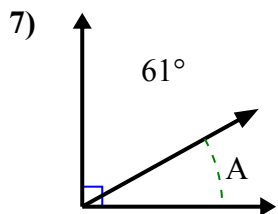
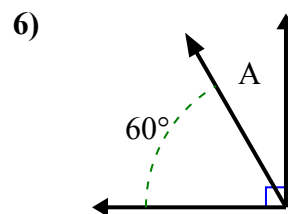
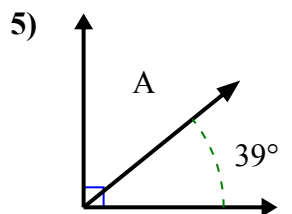
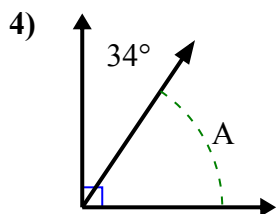
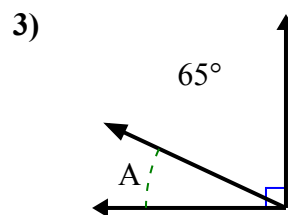
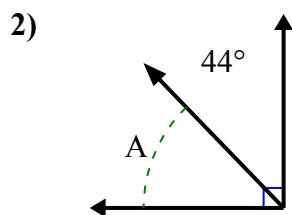
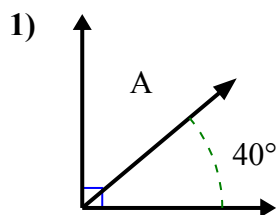


**Отв**

1. \_\_\_\_\_
2. \_\_\_\_\_
3. \_\_\_\_\_
4. \_\_\_\_\_
5. \_\_\_\_\_
6. \_\_\_\_\_
7. \_\_\_\_\_
8. \_\_\_\_\_
9. \_\_\_\_\_
10. \_\_\_\_\_
11. \_\_\_\_\_
12. \_\_\_\_\_



Найдите значение «А» в наборе дополнительных углов.

Отвeты1. 50°2. 46°3. 25°4. 56°5. 51°6. 30°7. 29°8. 20°9. 31°10. 66°11. 54°12. 38°