

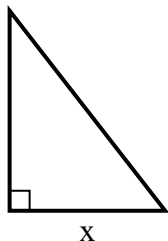


Найдите значение X.

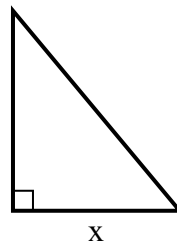
1) площадь =  $9 \text{ u}^2$



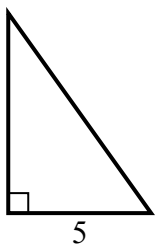
2) площадь =  $31.5 \text{ u}^2$



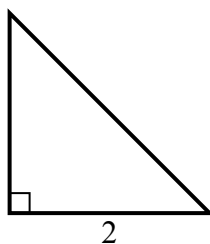
3) площадь =  $15 \text{ u}^2$



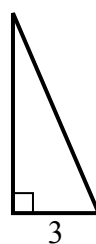
4) площадь =  $17.5 \text{ u}^2$



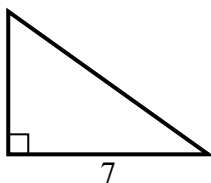
5) площадь =  $2 \text{ u}^2$



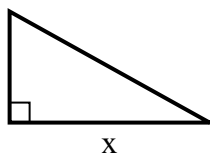
6) площадь =  $10.5 \text{ u}^2$



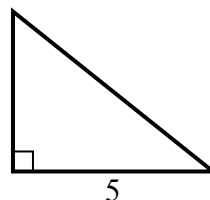
7) площадь =  $17.5 \text{ u}^2$



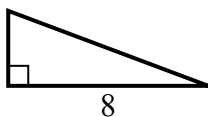
8) площадь =  $22.5 \text{ u}^2$



9) площадь =  $10 \text{ u}^2$



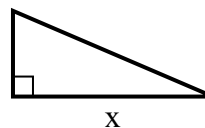
10) площадь =  $12 \text{ u}^2$



11) площадь =  $7 \text{ u}^2$



12) площадь =  $10.5 \text{ u}^2$



**Ответы**

1. \_\_\_\_\_
2. \_\_\_\_\_
3. \_\_\_\_\_
4. \_\_\_\_\_
5. \_\_\_\_\_
6. \_\_\_\_\_
7. \_\_\_\_\_
8. \_\_\_\_\_
9. \_\_\_\_\_
10. \_\_\_\_\_
11. \_\_\_\_\_
12. \_\_\_\_\_

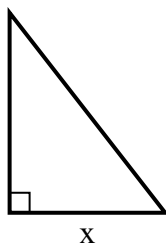


Найдите значение X.

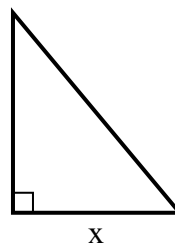
1) площадь =  $9 \text{ u}^2$



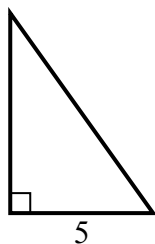
2) площадь =  $31.5 \text{ u}^2$



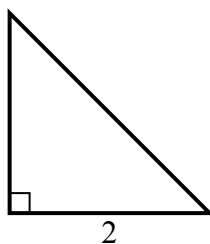
3) площадь =  $15 \text{ u}^2$



4) площадь =  $17.5 \text{ u}^2$



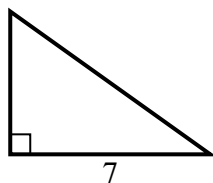
5) площадь =  $2 \text{ u}^2$



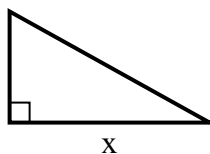
6) площадь =  $10.5 \text{ u}^2$



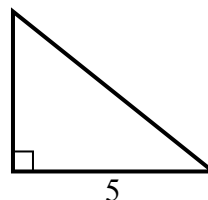
7) площадь =  $17.5 \text{ u}^2$



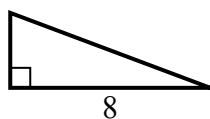
8) площадь =  $22.5 \text{ u}^2$



9) площадь =  $10 \text{ u}^2$



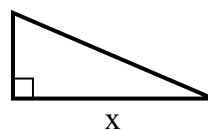
10) площадь =  $12 \text{ u}^2$



11) площадь =  $7 \text{ u}^2$



12) площадь =  $10.5 \text{ u}^2$

**Ответы**1. 92. 73. 54. 75. 26. 77. 58. 99. 410. 311. 212. 7