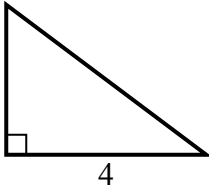


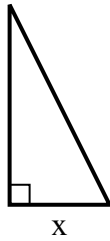


Найдите значение X.

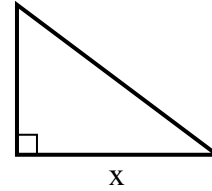
1) площадь = 6 u^2



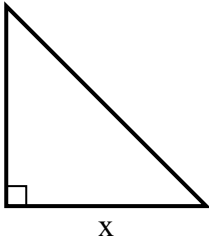
2) площадь = 4 u^2



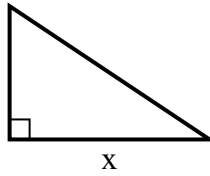
3) площадь = 24 u^2



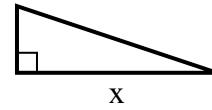
4) площадь = 8 u^2



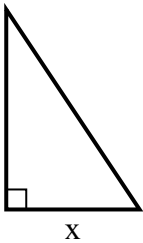
5) площадь = 12 u^2



6) площадь = 6 u^2



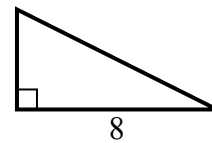
7) площадь = 12 u^2



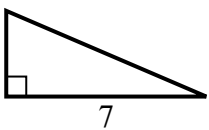
8) площадь = 13.5 u^2



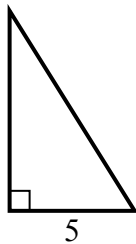
9) площадь = 16 u^2



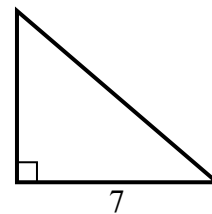
10) площадь = 10.5 u^2



11) площадь = 20 u^2



12) площадь = 21 u^2



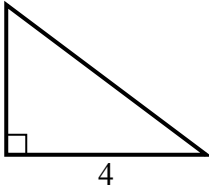
ОТВЕТЫ

1. _____
2. _____
3. _____
4. _____
5. _____
6. _____
7. _____
8. _____
9. _____
10. _____
11. _____
12. _____

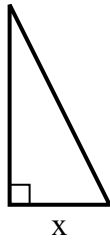


Найдите значение X.

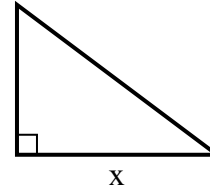
1) площадь = $6 u^2$



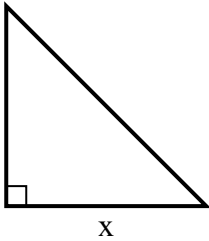
2) площадь = $4 u^2$



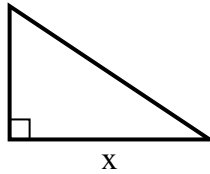
3) площадь = $24 u^2$



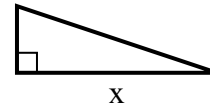
4) площадь = $8 u^2$



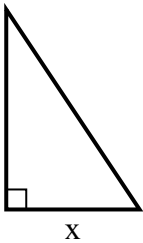
5) площадь = $12 u^2$



6) площадь = $6 u^2$



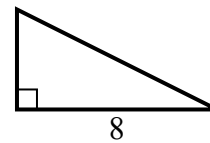
7) площадь = $12 u^2$



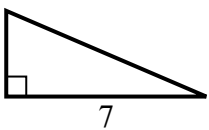
8) площадь = $13.5 u^2$



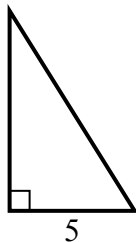
9) площадь = $16 u^2$



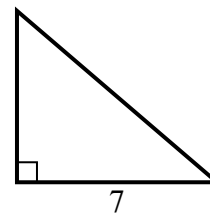
10) площадь = $10.5 u^2$



11) площадь = $20 u^2$



12) площадь = $21 u^2$

**Ответы**1. 32. 23. 84. 45. 66. 67. 48. 39. 410. 311. 812. 6