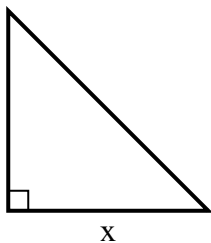


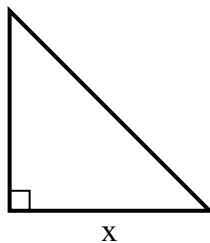


Найдите значение X.

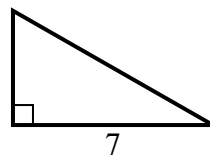
1) площадь = 4.5 u^2



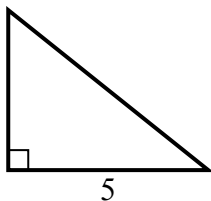
2) площадь = 12.5 u^2



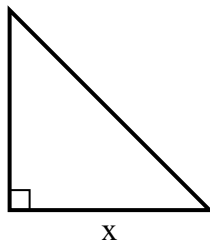
3) площадь = 14 u^2



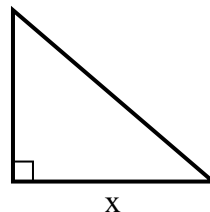
4) площадь = 10 u^2



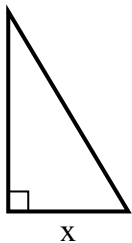
5) площадь = 32 u^2



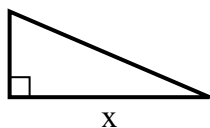
6) площадь = 21 u^2



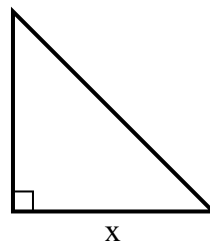
7) площадь = 7.5 u^2



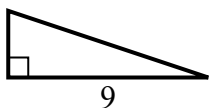
8) площадь = 10.5 u^2



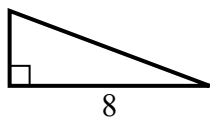
9) площадь = 18 u^2



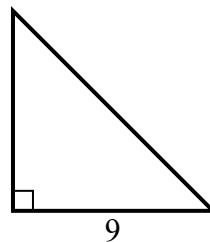
10) площадь = 13.5 u^2



11) площадь = 12 u^2



12) площадь = 40.5 u^2



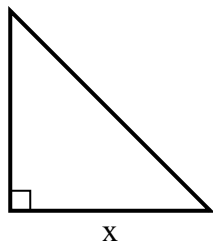
Ответы

1. _____
2. _____
3. _____
4. _____
5. _____
6. _____
7. _____
8. _____
9. _____
10. _____
11. _____
12. _____

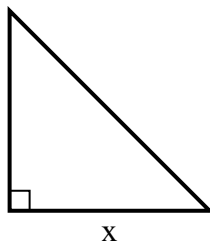


Найдите значение X.

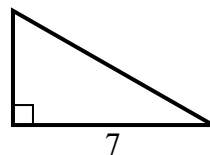
1) площадь = 4.5 u^2



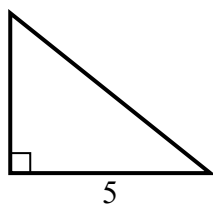
2) площадь = 12.5 u^2



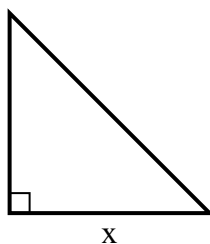
3) площадь = 14 u^2



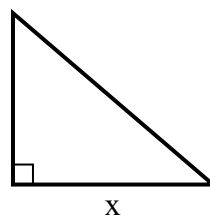
4) площадь = 10 u^2



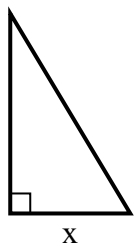
5) площадь = 32 u^2



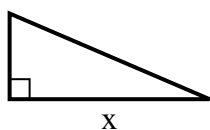
6) площадь = 21 u^2



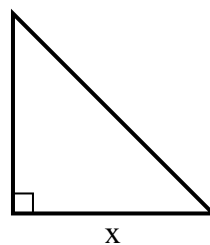
7) площадь = 7.5 u^2



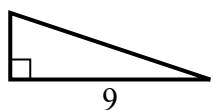
8) площадь = 10.5 u^2



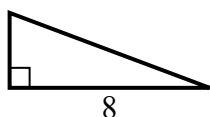
9) площадь = 18 u^2



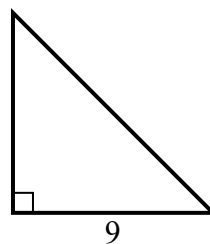
10) площадь = 13.5 u^2



11) площадь = 12 u^2



12) площадь = 40.5 u^2

**Ответы**1. 32. 53. 44. 45. 86. 77. 38. 79. 610. 311. 312. 9