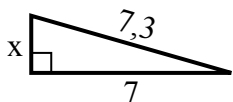


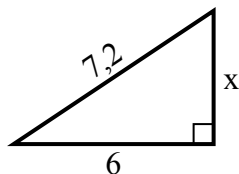


Найдите значение  $x$ .

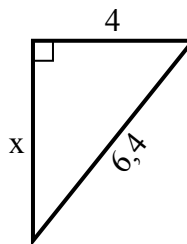
1) Периметр = 16,3 u



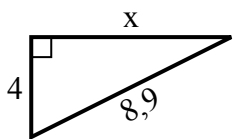
2) Периметр = 17,2 u



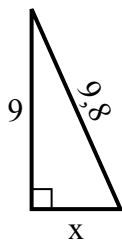
3) Периметр = 15,4 u



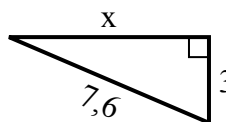
4) Периметр = 20,9 u



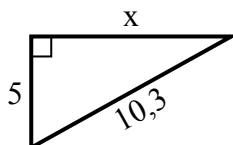
5) Периметр = 22,8 u



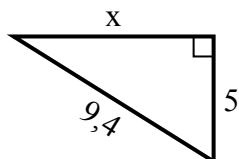
6) Периметр = 17,6 u



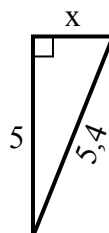
7) Периметр = 24,3 u



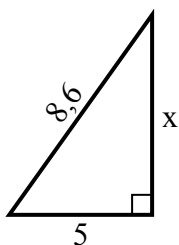
8) Периметр = 22,4 u



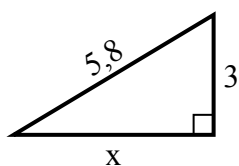
9) Периметр = 12,4 u



10) Периметр = 20,6 u



11) Периметр = 13,8 u



12) Периметр = 19,5 u



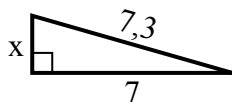
Ответы

1. \_\_\_\_\_
2. \_\_\_\_\_
3. \_\_\_\_\_
4. \_\_\_\_\_
5. \_\_\_\_\_
6. \_\_\_\_\_
7. \_\_\_\_\_
8. \_\_\_\_\_
9. \_\_\_\_\_
10. \_\_\_\_\_
11. \_\_\_\_\_
12. \_\_\_\_\_

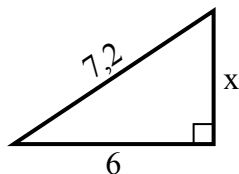


Найдите значение X.

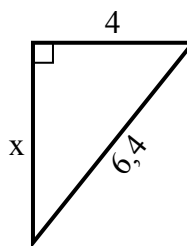
1) Периметр = 16,3 u



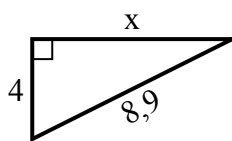
2) Периметр = 17,2 u



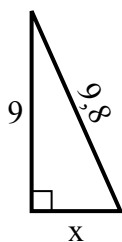
3) Периметр = 15,4 u



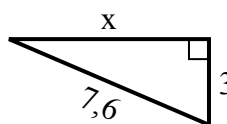
4) Периметр = 20,9 u



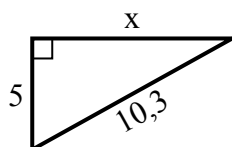
5) Периметр = 22,8 u



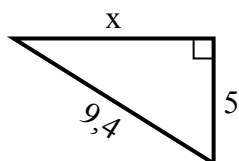
6) Периметр = 17,6 u



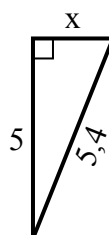
7) Периметр = 24,3 u



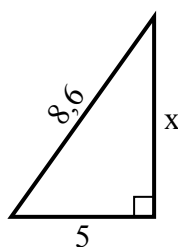
8) Периметр = 22,4 u



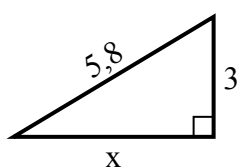
9) Периметр = 12,4 u



10) Периметр = 20,6 u



11) Периметр = 13,8 u



12) Периметр = 19,5 u

**Ответы**1. 22. 43. 54. 85. 46. 77. 98. 89. 210. 711. 512. 3