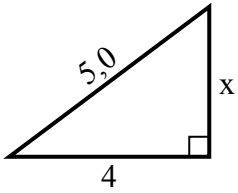


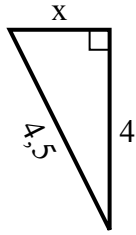


Найдите значение X.

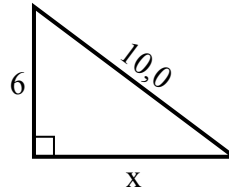
1) Периметр = 12 u



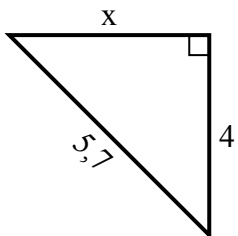
2) Периметр = 10,5 u



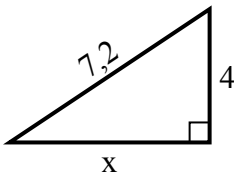
3) Периметр = 24 u



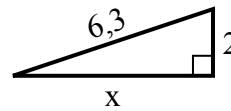
4) Периметр = 13,7 u



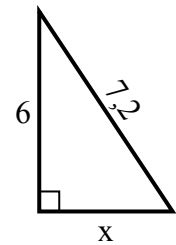
5) Периметр = 17,2 u



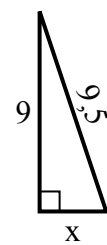
6) Периметр = 14,3 u



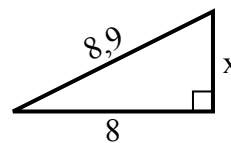
7) Периметр = 17,2 u



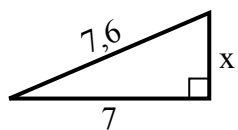
8) Периметр = 21,5 u



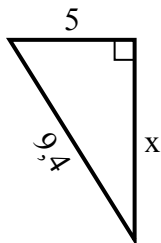
9) Периметр = 20,9 u



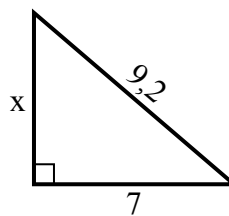
10) Периметр = 17,6 u



11) Периметр = 22,4 u



12) Периметр = 22,2 u



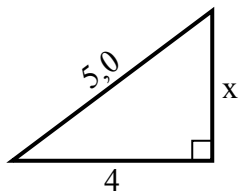
Ответы

1. _____
2. _____
3. _____
4. _____
5. _____
6. _____
7. _____
8. _____
9. _____
10. _____
11. _____
12. _____

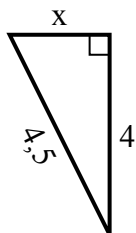


Найдите значение X.

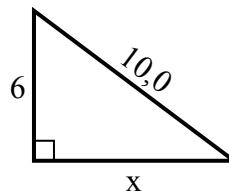
1) Периметр = 12 u



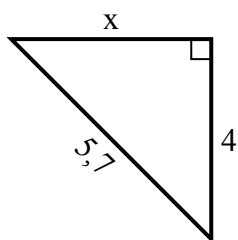
2) Периметр = 10,5 u



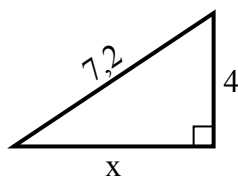
3) Периметр = 24 u



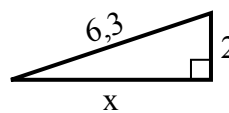
4) Периметр = 13,7 u



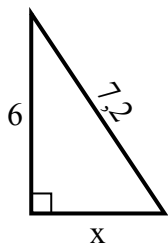
5) Периметр = 17,2 u



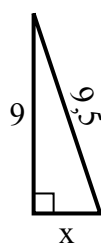
6) Периметр = 14,3 u



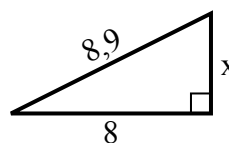
7) Периметр = 17,2 u



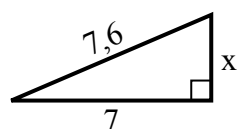
8) Периметр = 21,5 u



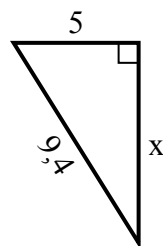
9) Периметр = 20,9 u



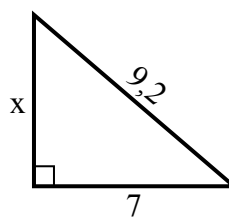
10) Периметр = 17,6 u



11) Периметр = 22,4 u



12) Периметр = 22,2 u

**Ответы**1. 32. 23. 84. 45. 66. 67. 48. 39. 410. 311. 812. 6