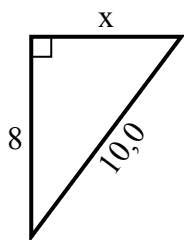


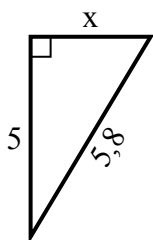


Найдите значение x .

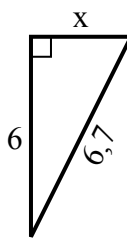
1) Периметр = 24 у



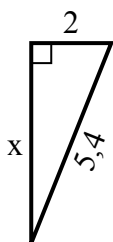
2) Периметр = 13,8 у



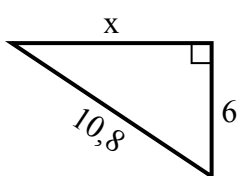
3) Периметр = 15,7 у



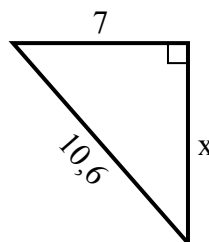
4) Периметр = 12,4 у



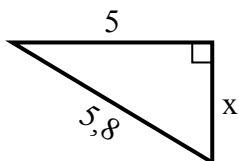
5) Периметр = 25,8 у



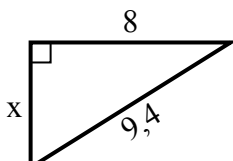
6) Периметр = 25,6 у



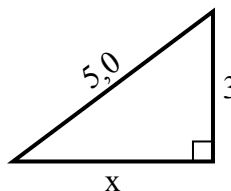
7) Периметр = 13,8 у



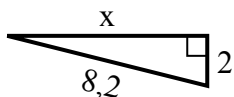
8) Периметр = 22,4 у



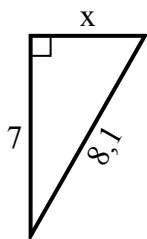
9) Периметр = 12 у



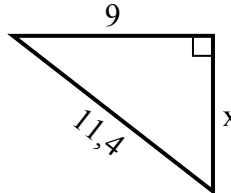
10) Периметр = 18,2 у



11) Периметр = 19,1 у



12) Периметр = 27,4 у



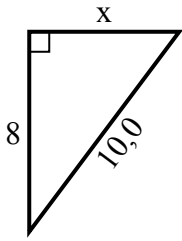
Ответы

1. _____
2. _____
3. _____
4. _____
5. _____
6. _____
7. _____
8. _____
9. _____
10. _____
11. _____
12. _____

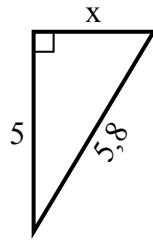


Найдите значение X.

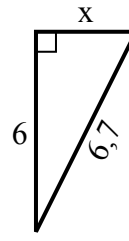
1) Периметр = 24 u



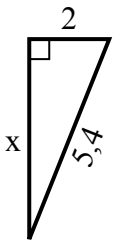
2) Периметр = 13,8 u



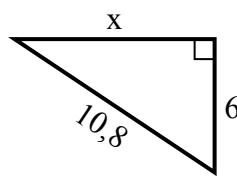
3) Периметр = 15,7 u



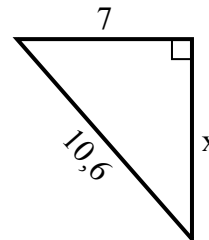
4) Периметр = 12,4 u



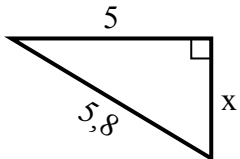
5) Периметр = 25,8 u



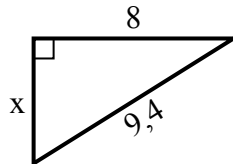
6) Периметр = 25,6 u



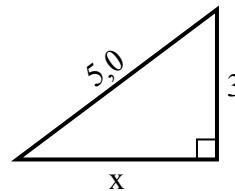
7) Периметр = 13,8 u



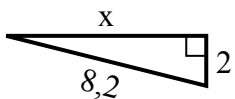
8) Периметр = 22,4 u



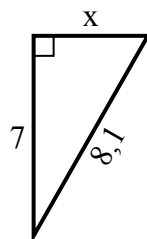
9) Периметр = 12 u



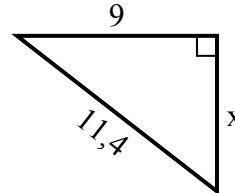
10) Периметр = 18,2 u



11) Периметр = 19,1 u



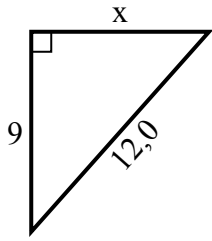
12) Периметр = 27,4 u

Ответы1. 62. 33. 34. 55. 96. 87. 38. 59. 410. 811. 412. 7

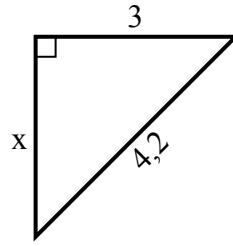


Найдите значение x .

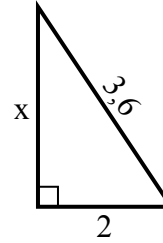
1) Периметр = 29 у



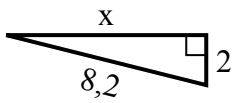
2) Периметр = 10,2 у



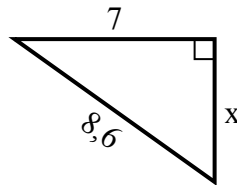
3) Периметр = 8,6 у



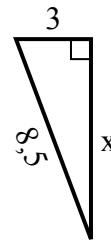
4) Периметр = 18,2 у



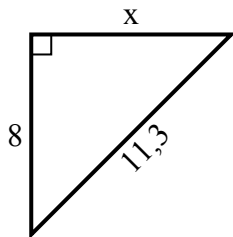
5) Периметр = 20,6 у



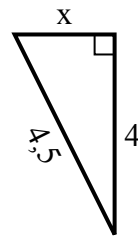
6) Периметр = 19,5 у



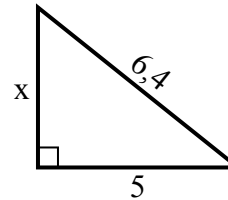
7) Периметр = 27,3 у



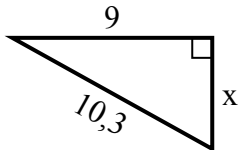
8) Периметр = 10,5 у



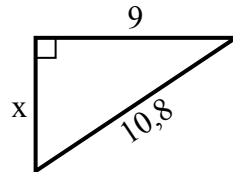
9) Периметр = 15,4 у



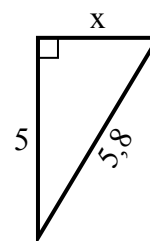
10) Периметр = 24,3 у



11) Периметр = 25,8 у



12) Периметр = 13,8 у

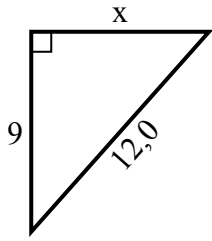


Ответы

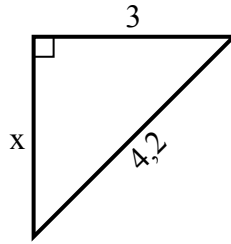
1. _____
2. _____
3. _____
4. _____
5. _____
6. _____
7. _____
8. _____
9. _____
10. _____
11. _____
12. _____

Найдите значение x .

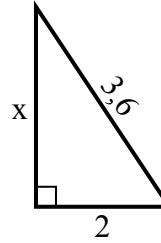
1) Периметр = 29 у



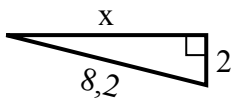
2) Периметр = 10,2 у



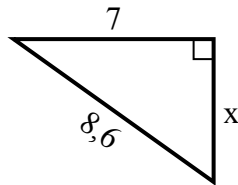
3) Периметр = 8,6 у



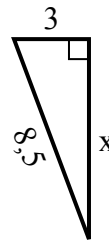
4) Периметр = 18,2 у



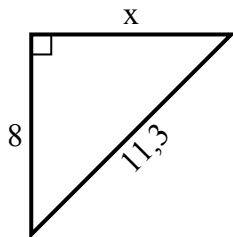
5) Периметр = 20,6 у



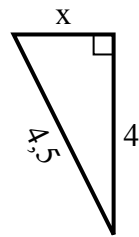
6) Периметр = 19,5 у



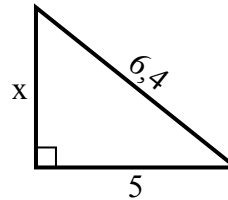
7) Периметр = 27,3 у



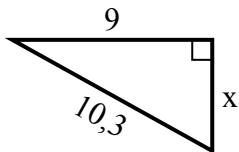
8) Периметр = 10,5 у



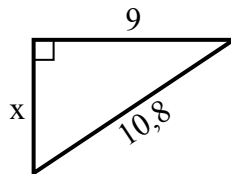
9) Периметр = 15,4 у



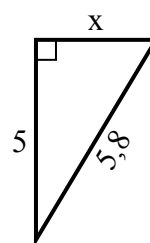
10) Периметр = 24,3 у



11) Периметр = 25,8 у



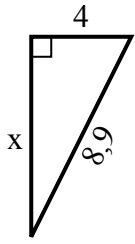
12) Периметр = 13,8 у

**Ответы**1. 82. 33. 34. 85. 56. 87. 88. 29. 410. 511. 612. 3

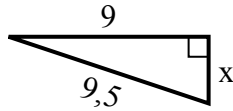


Найдите значение x .

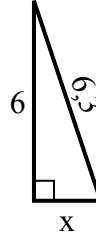
1) Периметр = 20,9 у



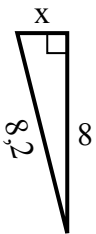
2) Периметр = 21,5 у



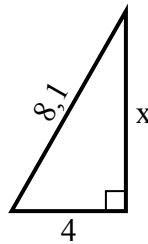
3) Периметр = 14,3 у



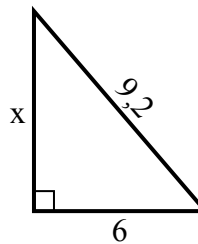
4) Периметр = 18,2 у



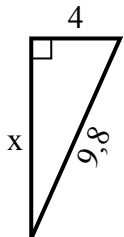
5) Периметр = 19,1 у



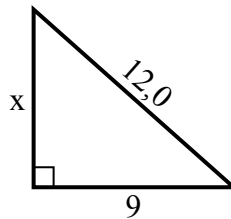
6) Периметр = 22,2 у



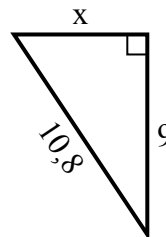
7) Периметр = 22,8 у



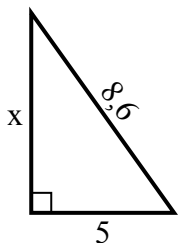
8) Периметр = 29 у



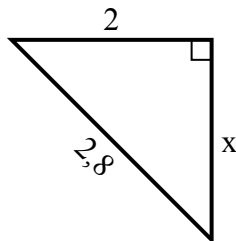
9) Периметр = 25,8 у



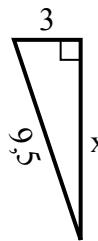
10) Периметр = 20,6 у



11) Периметр = 6,8 у



12) Периметр = 21,5 у

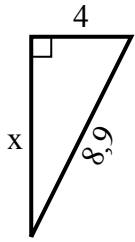


Ответы

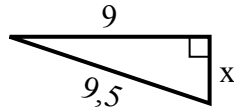
1. _____
2. _____
3. _____
4. _____
5. _____
6. _____
7. _____
8. _____
9. _____
10. _____
11. _____
12. _____

Найдите значение X .

1) Периметр = 20,9 у



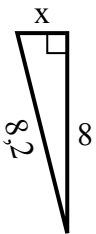
2) Периметр = 21,5 у



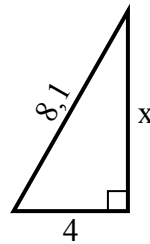
3) Периметр = 14,3 у



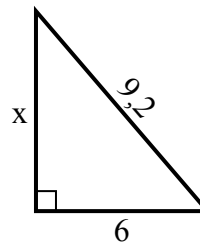
4) Периметр = 18,2 у



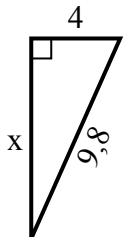
5) Периметр = 19,1 у



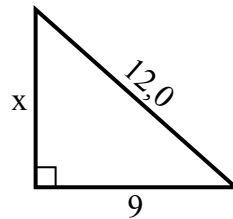
6) Периметр = 22,2 у



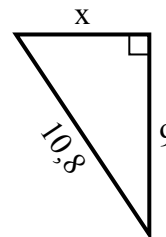
7) Периметр = 22,8 у



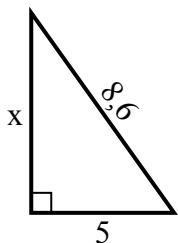
8) Периметр = 29 у



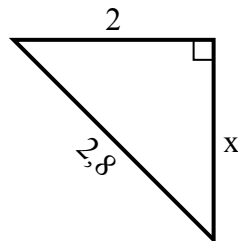
9) Периметр = 25,8 у



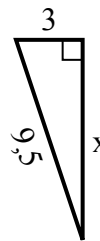
10) Периметр = 20,6 у



11) Периметр = 6,8 у



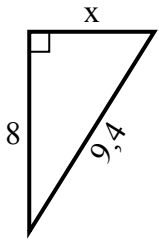
12) Периметр = 21,5 у

**Ответы**1. 82. 33. 24. 25. 76. 77. 98. 89. 610. 711. 212. 9

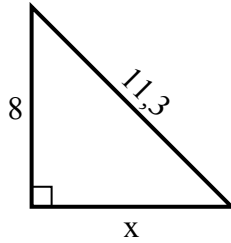


Найдите значение x .

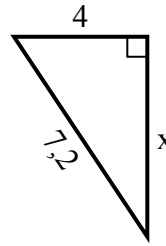
1) Периметр = 22,4 у



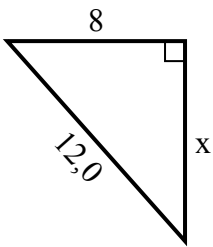
2) Периметр = 27,3 у



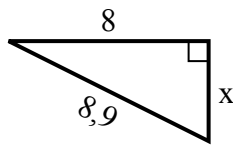
3) Периметр = 17,2 у



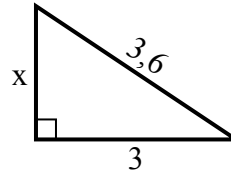
4) Периметр = 29 у



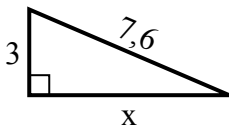
5) Периметр = 20,9 у



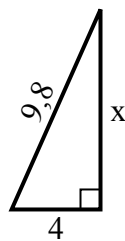
6) Периметр = 8,6 у



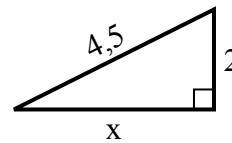
7) Периметр = 17,6 у



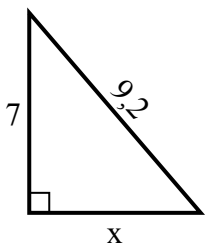
8) Периметр = 22,8 у



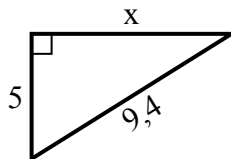
9) Периметр = 10,5 у



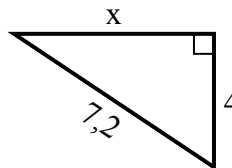
10) Периметр = 22,2 у



11) Периметр = 22,4 у



12) Периметр = 17,2 у

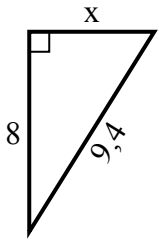


Ответы

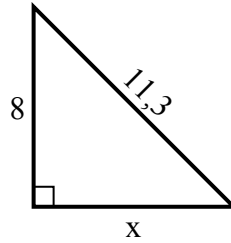
1. _____
2. _____
3. _____
4. _____
5. _____
6. _____
7. _____
8. _____
9. _____
10. _____
11. _____
12. _____

Найдите значение X .

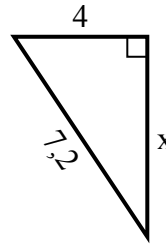
1) Периметр = 22,4 у



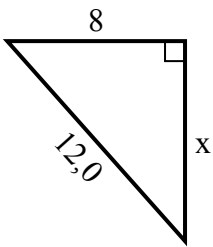
2) Периметр = 27,3 у



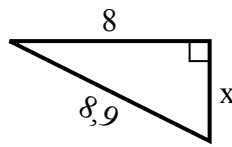
3) Периметр = 17,2 у



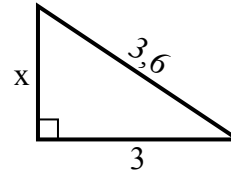
4) Периметр = 29 у



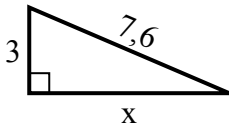
5) Периметр = 20,9 у



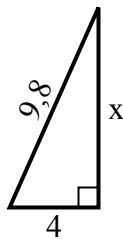
6) Периметр = 8,6 у



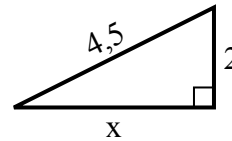
7) Периметр = 17,6 у



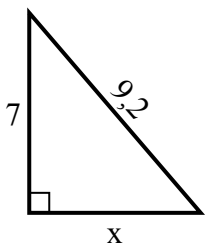
8) Периметр = 22,8 у



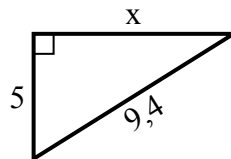
9) Периметр = 10,5 у



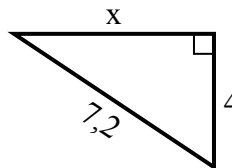
10) Периметр = 22,2 у



11) Периметр = 22,4 у



12) Периметр = 17,2 у

**Ответы**1. 52. 83. 64. 95. 46. 27. 78. 99. 410. 611. 812. 6

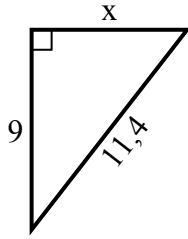


Найдите значение X.

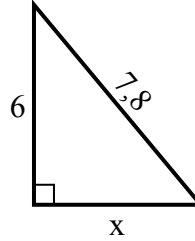
1) Периметр = 20,2 у



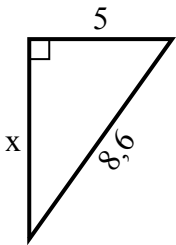
2) Периметр = 27,4 у



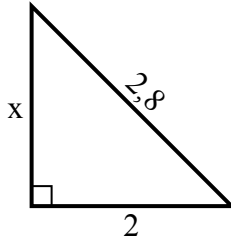
3) Периметр = 18,8 у



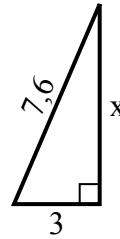
4) Периметр = 20,6 у



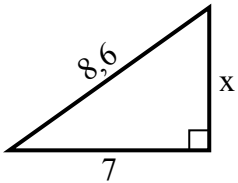
5) Периметр = 6,8 у



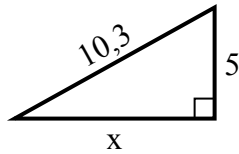
6) Периметр = 17,6 у



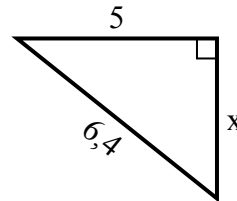
7) Периметр = 20,6 у



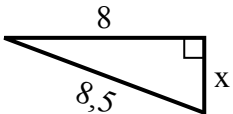
8) Периметр = 24,3 у



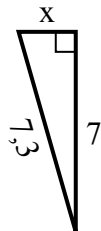
9) Периметр = 15,4 у



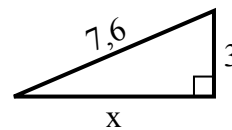
10) Периметр = 19,5 у



11) Периметр = 16,3 у



12) Периметр = 17,6 у



Ответы

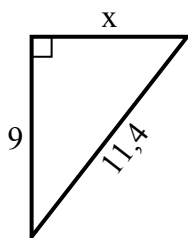
1. _____
2. _____
3. _____
4. _____
5. _____
6. _____
7. _____
8. _____
9. _____
10. _____
11. _____
12. _____

Найдите значение x .

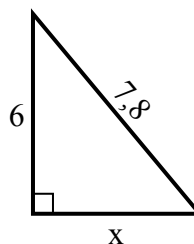
1) Периметр = 20,2 у



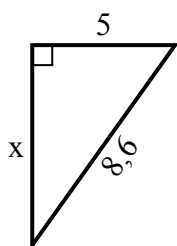
2) Периметр = 27,4 у



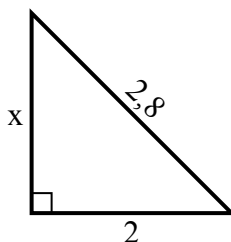
3) Периметр = 18,8 у



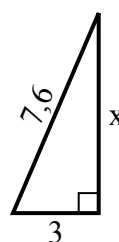
4) Периметр = 20,6 у



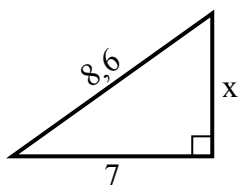
5) Периметр = 6,8 у



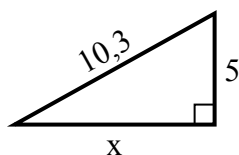
6) Периметр = 17,6 у



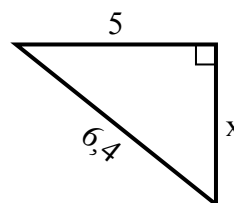
7) Периметр = 20,6 у



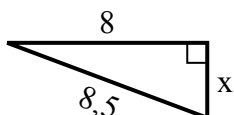
8) Периметр = 24,3 у



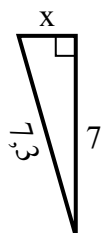
9) Периметр = 15,4 у



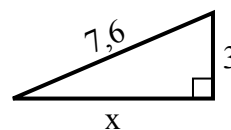
10) Периметр = 19,5 у



11) Периметр = 16,3 у



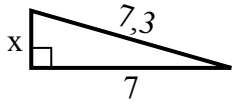
12) Периметр = 17,6 у

**Ответы**1. 92. 73. 54. 75. 26. 77. 58. 99. 410. 311. 212. 7

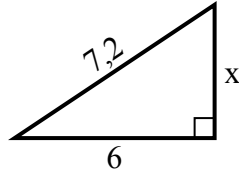


Найдите значение X .

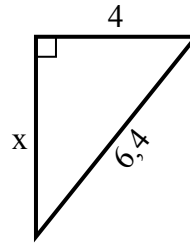
1) Периметр = 16,3 u



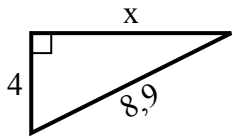
2) Периметр = 17,2 u



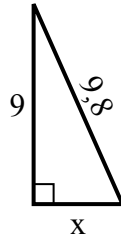
3) Периметр = 15,4 u



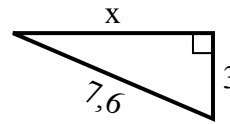
4) Периметр = 20,9 u



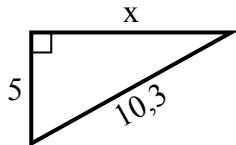
5) Периметр = 22,8 u



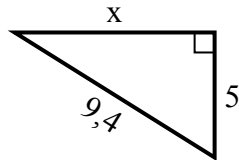
6) Периметр = 17,6 u



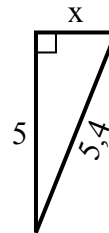
7) Периметр = 24,3 u



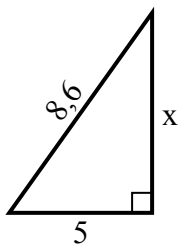
8) Периметр = 22,4 u



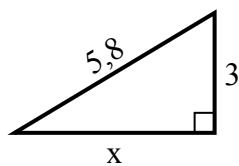
9) Периметр = 12,4 u



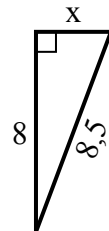
10) Периметр = 20,6 u



11) Периметр = 13,8 u



12) Периметр = 19,5 u



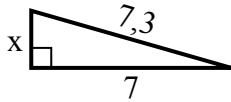
Ответы

1. _____
2. _____
3. _____
4. _____
5. _____
6. _____
7. _____
8. _____
9. _____
10. _____
11. _____
12. _____

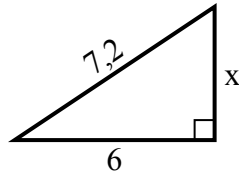


Найдите значение X.

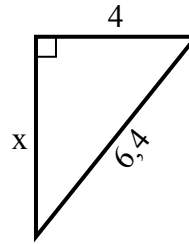
1) Периметр = 16,3 u



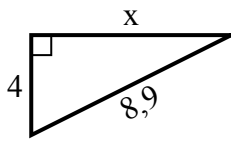
2) Периметр = 17,2 u



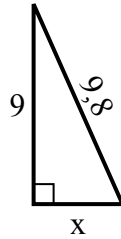
3) Периметр = 15,4 u



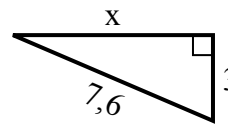
4) Периметр = 20,9 u



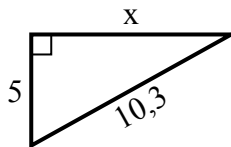
5) Периметр = 22,8 u



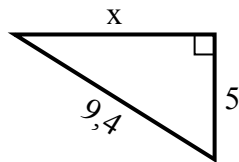
6) Периметр = 17,6 u



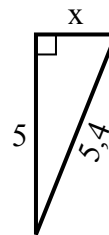
7) Периметр = 24,3 u



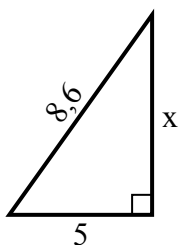
8) Периметр = 22,4 u



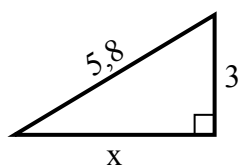
9) Периметр = 12,4 u



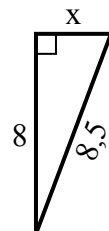
10) Периметр = 20,6 u



11) Периметр = 13,8 u



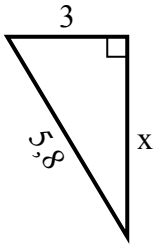
12) Периметр = 19,5 u

**Ответы**1. 22. 43. 54. 85. 46. 77. 98. 89. 210. 711. 512. 3

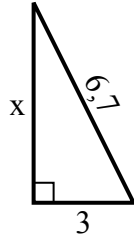


Найдите значение X.

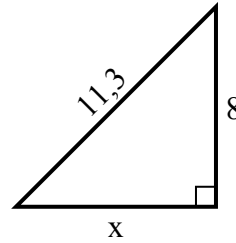
1) Периметр = 13,8 у



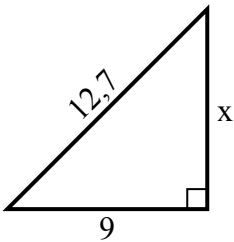
2) Периметр = 15,7 у



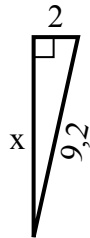
3) Периметр = 27,3 у



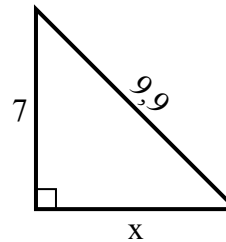
4) Периметр = 30,7 у



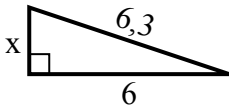
5) Периметр = 20,2 у



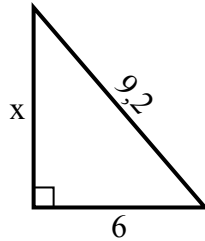
6) Периметр = 23,9 у



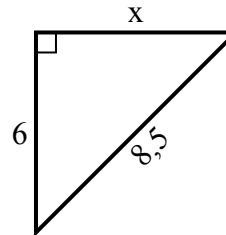
7) Периметр = 14,3 у



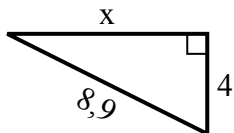
8) Периметр = 22,2 у



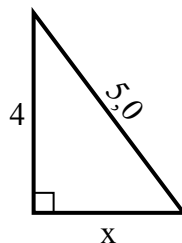
9) Периметр = 20,5 у



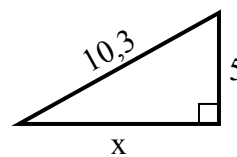
10) Периметр = 20,9 у



11) Периметр = 12 у



12) Периметр = 24,3 у



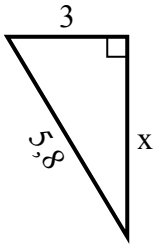
Ответы

1. _____
2. _____
3. _____
4. _____
5. _____
6. _____
7. _____
8. _____
9. _____
10. _____
11. _____
12. _____

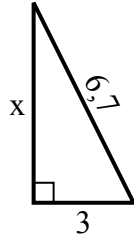


Найдите значение X.

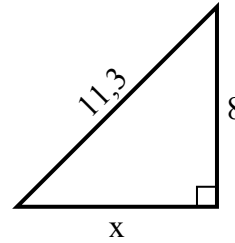
1) Периметр = 13,8 у



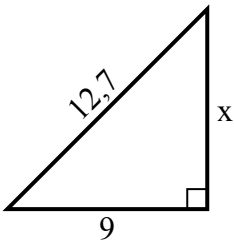
2) Периметр = 15,7 у



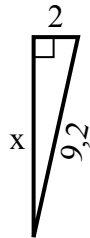
3) Периметр = 27,3 у



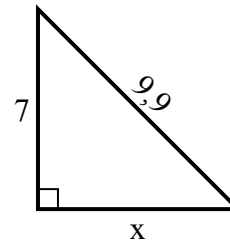
4) Периметр = 30,7 у



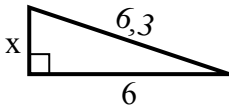
5) Периметр = 20,2 у



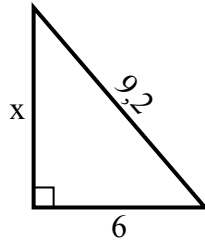
6) Периметр = 23,9 у



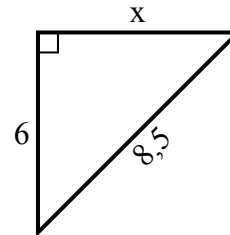
7) Периметр = 14,3 у



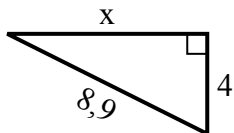
8) Периметр = 22,2 у



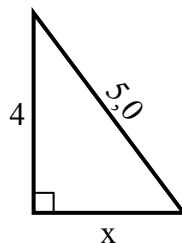
9) Периметр = 20,5 у



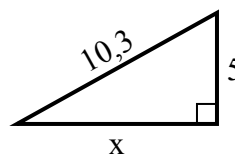
10) Периметр = 20,9 у



11) Периметр = 12 у



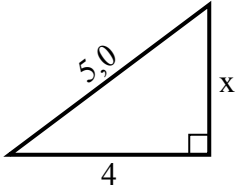
12) Периметр = 24,3 у

**Ответы**1. 52. 63. 84. 95. 96. 77. 28. 79. 610. 811. 312. 9

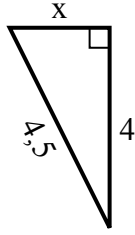


Найдите значение X.

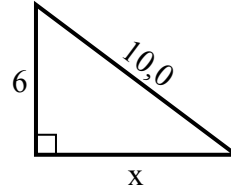
1) Периметр = 12 u



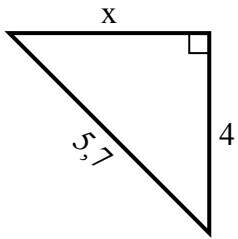
2) Периметр = 10,5 u



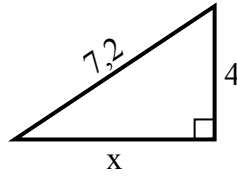
3) Периметр = 24 u



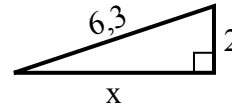
4) Периметр = 13,7 u



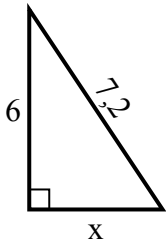
5) Периметр = 17,2 u



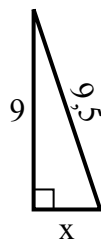
6) Периметр = 14,3 u



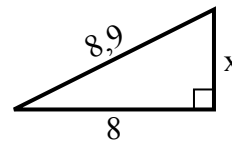
7) Периметр = 17,2 u



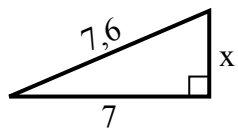
8) Периметр = 21,5 u



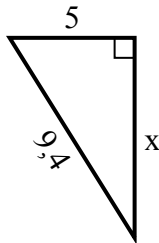
9) Периметр = 20,9 u



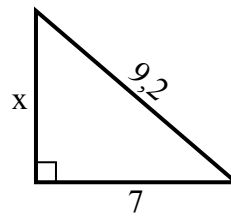
10) Периметр = 17,6 u



11) Периметр = 22,4 u



12) Периметр = 22,2 u



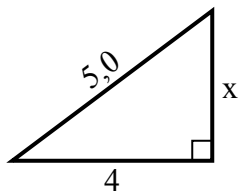
Ответы

1. _____
2. _____
3. _____
4. _____
5. _____
6. _____
7. _____
8. _____
9. _____
10. _____
11. _____
12. _____

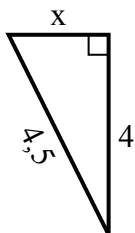


Найдите значение X.

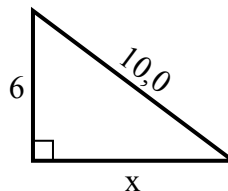
1) Периметр = 12 u



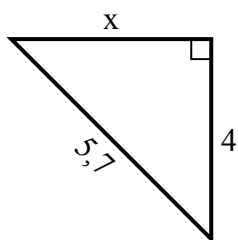
2) Периметр = 10,5 u



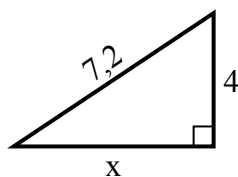
3) Периметр = 24 u



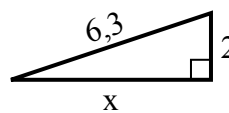
4) Периметр = 13,7 u



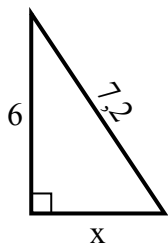
5) Периметр = 17,2 u



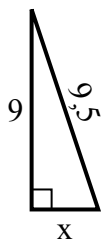
6) Периметр = 14,3 u



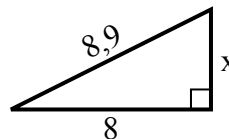
7) Периметр = 17,2 u



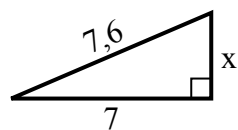
8) Периметр = 21,5 u



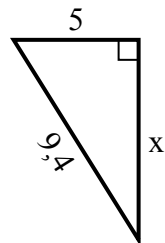
9) Периметр = 20,9 u



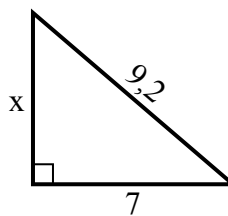
10) Периметр = 17,6 u



11) Периметр = 22,4 u



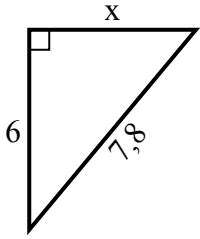
12) Периметр = 22,2 u

**Ответы**1. 32. 23. 84. 45. 66. 67. 48. 39. 410. 311. 812. 6

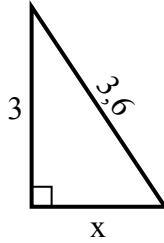


Найдите значение X.

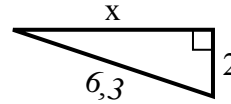
1) Периметр = 18,8 у



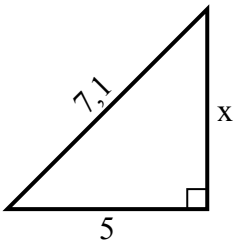
2) Периметр = 8,6 у



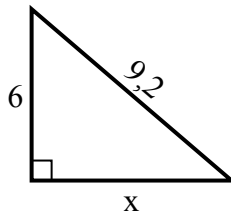
3) Периметр = 14,3 у



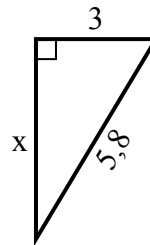
4) Периметр = 17,1 у



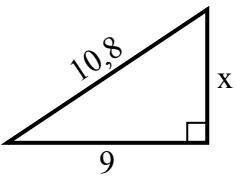
5) Периметр = 22,2 у



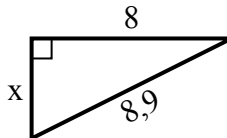
6) Периметр = 13,8 у



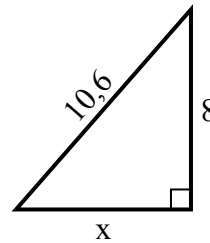
7) Периметр = 25,8 у



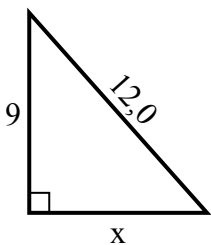
8) Периметр = 20,9 у



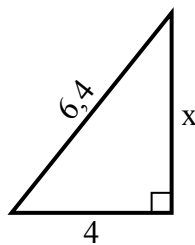
9) Периметр = 25,6 у



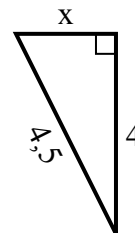
10) Периметр = 29 у



11) Периметр = 15,4 у



12) Периметр = 10,5 у



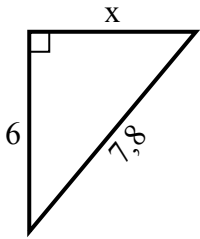
Ответы

1. _____
2. _____
3. _____
4. _____
5. _____
6. _____
7. _____
8. _____
9. _____
10. _____
11. _____
12. _____

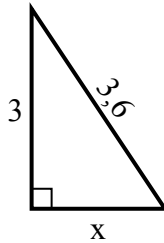


Найдите значение X.

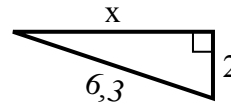
1) Периметр = 18,8 у



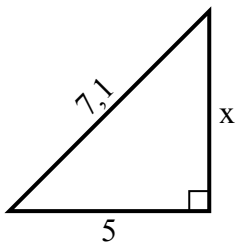
2) Периметр = 8,6 у



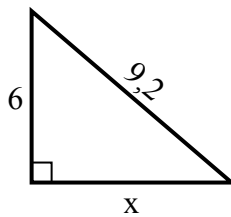
3) Периметр = 14,3 у



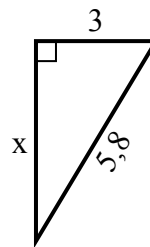
4) Периметр = 17,1 у



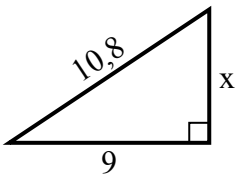
5) Периметр = 22,2 у



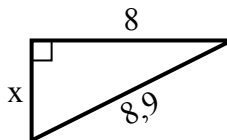
6) Периметр = 13,8 у



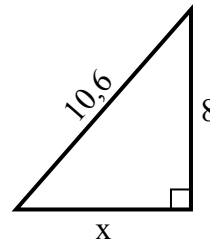
7) Периметр = 25,8 у



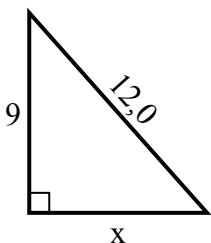
8) Периметр = 20,9 у



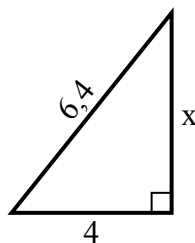
9) Периметр = 25,6 у



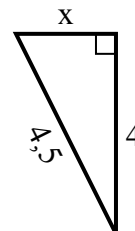
10) Периметр = 29 у



11) Периметр = 15,4 у



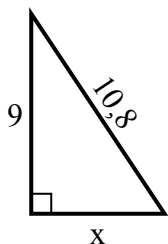
12) Периметр = 10,5 у

**Ответы**1. 52. 23. 64. 55. 76. 57. 68. 49. 710. 811. 512. 2

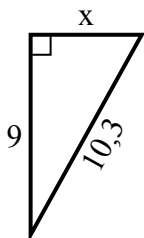


Найдите значение X.

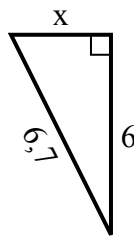
1) Периметр = 25,8 у



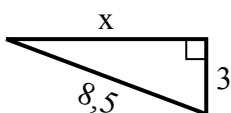
2) Периметр = 24,3 у



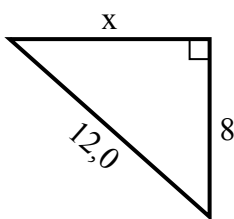
3) Периметр = 15,7 у



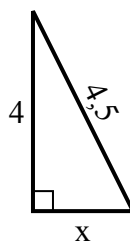
4) Периметр = 19,5 у



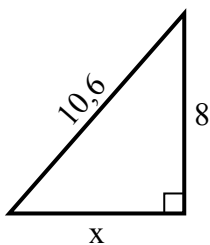
5) Периметр = 29 у



6) Периметр = 10,5 у



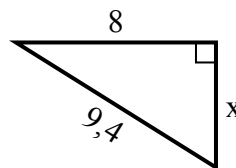
7) Периметр = 25,6 у



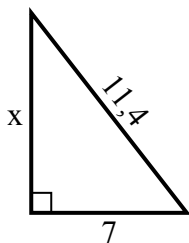
8) Периметр = 14,3 у



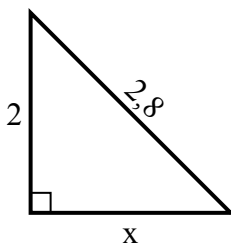
9) Периметр = 22,4 у



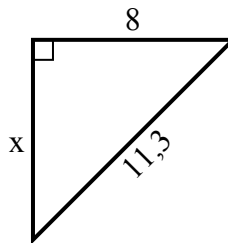
10) Периметр = 27,4 у



11) Периметр = 6,8 у



12) Периметр = 27,3 у



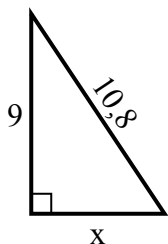
Ответы

1. _____
2. _____
3. _____
4. _____
5. _____
6. _____
7. _____
8. _____
9. _____
10. _____
11. _____
12. _____

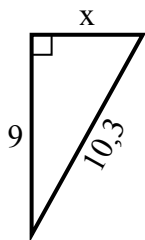


Найдите значение X.

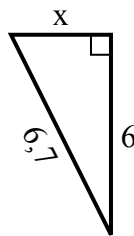
1) Периметр = 25,8 у



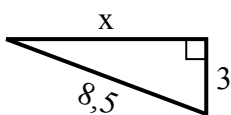
2) Периметр = 24,3 у



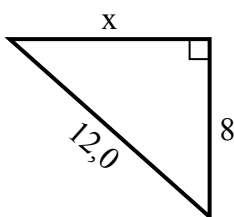
3) Периметр = 15,7 у



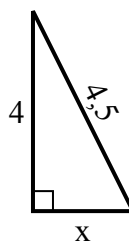
4) Периметр = 19,5 у



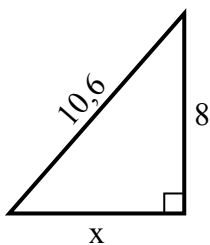
5) Периметр = 29 у



6) Периметр = 10,5 у



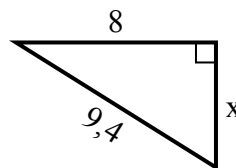
7) Периметр = 25,6 у



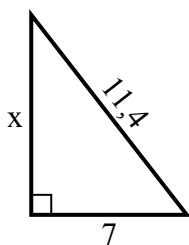
8) Периметр = 14,3 у



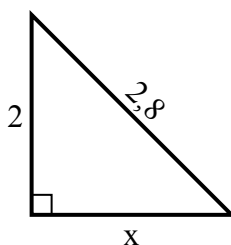
9) Периметр = 22,4 у



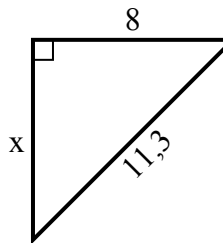
10) Периметр = 27,4 у



11) Периметр = 6,8 у



12) Периметр = 27,3 у

**Ответы**1. 62. 53. 34. 85. 96. 27. 78. 29. 510. 911. 212. 8